



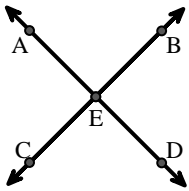
Match the description on the top with the visual image on the bottom.

Answers

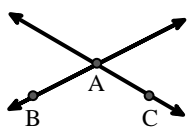
- 1) \vec{AC} parallel to \vec{EB}
- 2) \vec{BA} intersecting \vec{AD}
- 3) Acute $\angle BED$
- 4) \vec{AD} intersecting \vec{BC} at point E
- 5) \vec{BE} intersecting \vec{CD}
- 6) \vec{AC} intersected by \vec{BD}
- 7) $\angle BAC$ creating an obtuse angle
- 8) \vec{BC} intersecting $\angle ACD$
- 9) \vec{AB} intersecting \vec{AD}
- 10) Acute $\angle ABC$ intersecting \vec{AD}
- 11) $\angle DEC$ intersected by \vec{AC}
- 12) \vec{AC} perpendicular to \vec{AD}

1. _____
2. _____
3. _____
4. _____
5. _____
6. _____
7. _____
8. _____
9. _____
10. _____
11. _____
12. _____

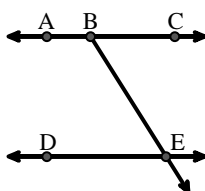
A.



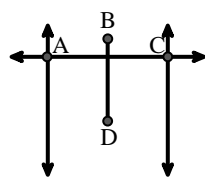
B.



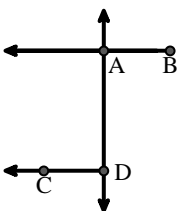
C.



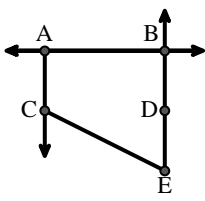
D.



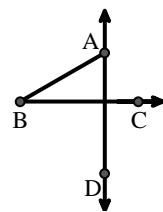
E.



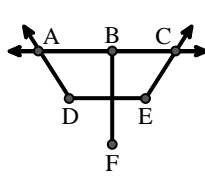
F.



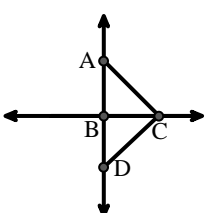
G.



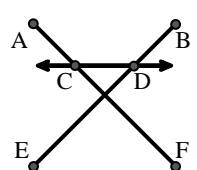
H.



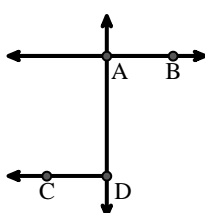
I.



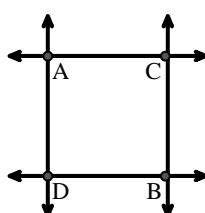
J.



K.



L.





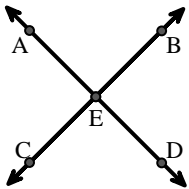
Match the description on the top with the visual image on the bottom.

Answers

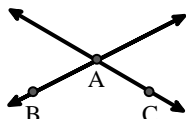
- 1) \vec{AC} parallel to \vec{EB}
- 2) \vec{BA} intersecting \vec{AD}
- 3) Acute $\angle BED$
- 4) \vec{AD} intersecting \vec{BC} at point E
- 5) \vec{BE} intersecting \vec{CD}
- 6) \vec{AC} intersected by \vec{BD}
- 7) $\angle BAC$ creating an obtuse angle
- 8) \vec{BC} intersecting $\angle ACD$
- 9) \vec{AB} intersecting \vec{AD}
- 10) Acute $\angle ABC$ intersecting \vec{AD}
- 11) $\angle DEC$ intersected by \vec{AC}
- 12) \vec{AC} perpendicular to \vec{AD}

1. **F**
2. **E**
3. **C**
4. **A**
5. **J**
6. **D**
7. **B**
8. **I**
9. **K**
10. **G**
11. **H**
12. **L**

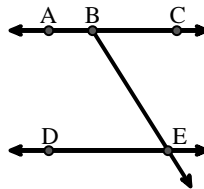
A.



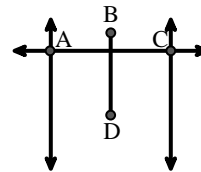
B.



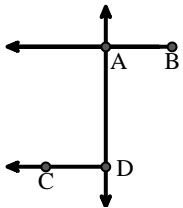
C.



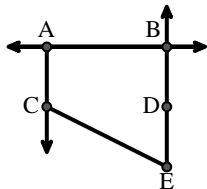
D.



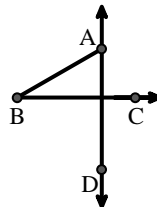
E.



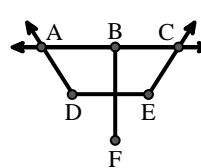
F.



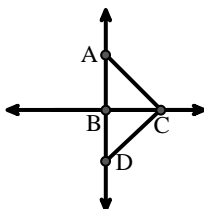
G.



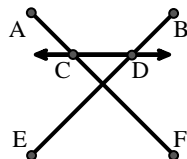
H.



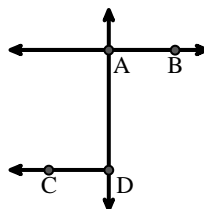
I.



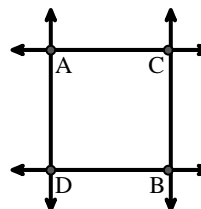
J.



K.



L.





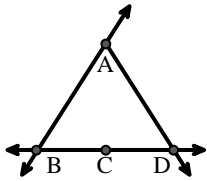
Match the description on the top with the visual image on the bottom.

Answers

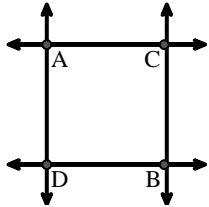
- 1) Right $\angle ADE$
- 2) D as the midpoint of \overleftrightarrow{CE}
- 3) Acute $\angle BED$
- 4) \overleftrightarrow{AB} intersecting \overleftrightarrow{AD}
- 5) Acute $\angle BDE$
- 6) \overleftrightarrow{AD} intersecting \overleftrightarrow{BC} at point E
- 7) \overleftrightarrow{AB} parallel to \overleftrightarrow{CD}
- 8) \overleftrightarrow{AB} intersecting $\angle BCD$ at point B
- 9) \overleftrightarrow{AC} perpendicular to \overleftrightarrow{AD}
- 10) \overleftrightarrow{AE} intersecting \overleftrightarrow{DB}
- 11) \overleftrightarrow{BD} intersecting $\angle ACE$
- 12) \overleftrightarrow{BA} intersecting \overleftrightarrow{AD}

1. _____
2. _____
3. _____
4. _____
5. _____
6. _____
7. _____
8. _____
9. _____
10. _____
11. _____
12. _____

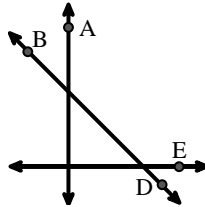
A.



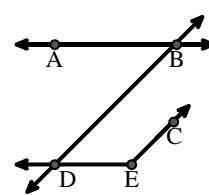
B.



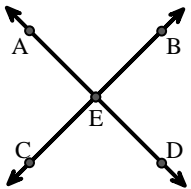
C.



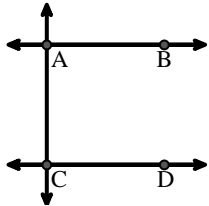
D.



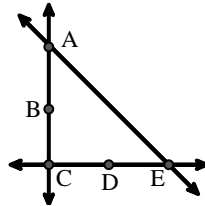
E.



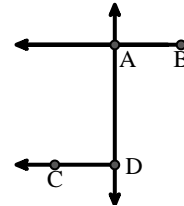
F.



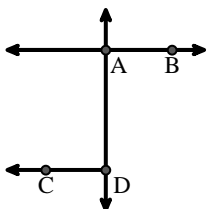
G.



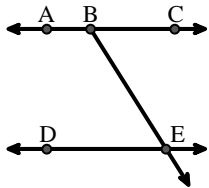
H.



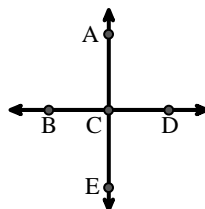
I.



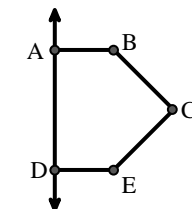
J.



K.



L.



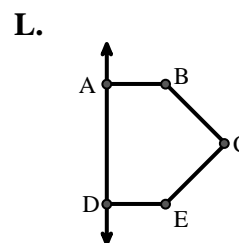
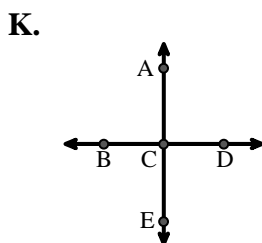
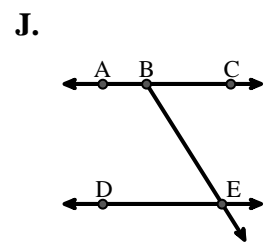
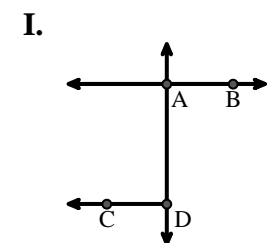
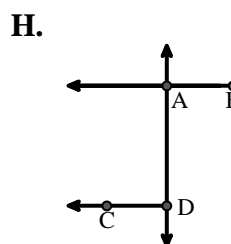
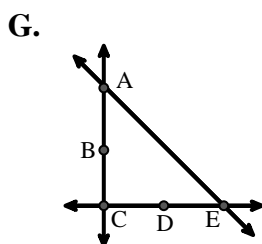
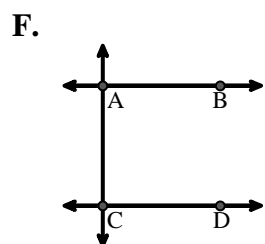
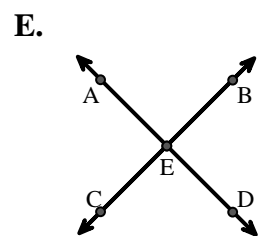
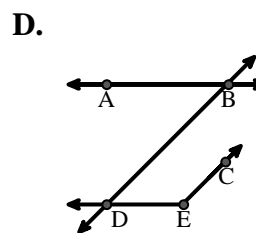
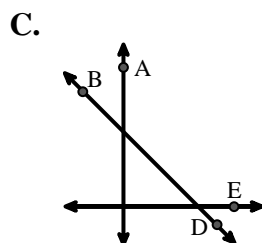
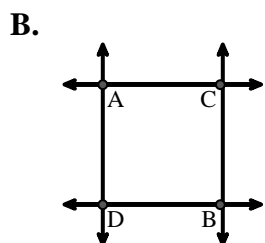
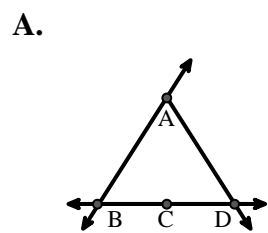


Match the description on the top with the visual image on the bottom.

Answers

- 1) Right $\angle ADE$
- 2) D as the midpoint of \overleftrightarrow{CE}
- 3) Acute $\angle BED$
- 4) \overleftrightarrow{AB} intersecting \overleftrightarrow{AD}
- 5) Acute $\angle BDE$
- 6) \overleftrightarrow{AD} intersecting \overleftrightarrow{BC} at point E
- 7) \overleftrightarrow{AB} parallel to \overleftrightarrow{CD}
- 8) \overleftrightarrow{AB} intersecting $\angle BCD$ at point B
- 9) \overleftrightarrow{AC} perpendicular to \overleftrightarrow{AD}
- 10) \overleftrightarrow{AE} intersecting \overleftrightarrow{DB}
- 11) \overleftrightarrow{BD} intersecting $\angle ACE$
- 12) \overleftrightarrow{BA} intersecting \overleftrightarrow{AD}

1. **L**
2. **G**
3. **J**
4. **I**
5. **D**
6. **E**
7. **F**
8. **A**
9. **B**
10. **K**
11. **C**
12. **H**





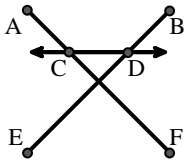
Match the description on the top with the visual image on the bottom.

Answers

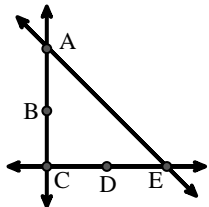
- 1) \overleftrightarrow{AB} intersecting \overleftrightarrow{AD}
- 2) Acute $\angle BED$
- 3) \overline{BE} intersecting \overleftrightarrow{CD}
- 4) $\angle BAC$ creating an obtuse angle
- 5) D as the midpoint of \overleftrightarrow{CE}
- 6) \overleftrightarrow{BC} intersecting $\angle ACD$
- 7) \overleftrightarrow{AC} intersected by \overline{BD}
- 8) \overleftrightarrow{AC} perpendicular to \overleftrightarrow{AD}
- 9) \overleftrightarrow{AB} intersecting $\angle BCD$ at point B
- 10) \overleftrightarrow{AC} parallel to \overleftrightarrow{EB}
- 11) $\angle DEC$ intersected by \overleftrightarrow{AC}
- 12) Acute $\angle ABC$ intersecting \overleftrightarrow{AD}

1. _____
2. _____
3. _____
4. _____
5. _____
6. _____
7. _____
8. _____
9. _____
10. _____
11. _____
12. _____

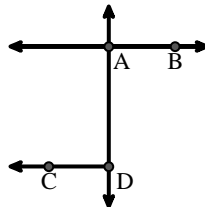
A.



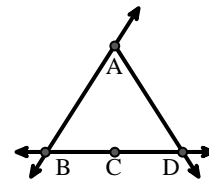
B.



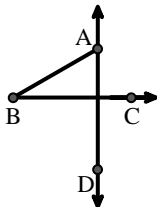
C.



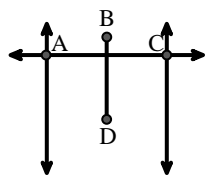
D.



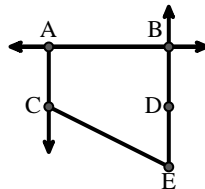
E.



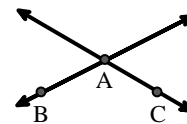
F.



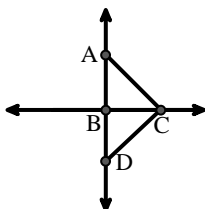
G.



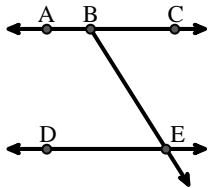
H.



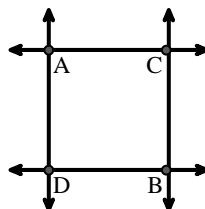
I.



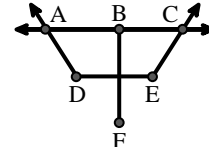
J.



K.



L.





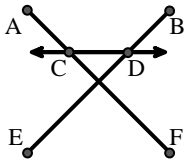
Match the description on the top with the visual image on the bottom.

Answers

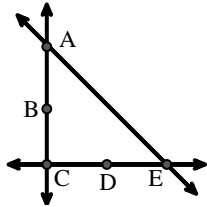
- 1) \overleftrightarrow{AB} intersecting \overleftrightarrow{AD}
- 2) Acute $\angle BED$
- 3) \overline{BE} intersecting \overleftrightarrow{CD}
- 4) $\angle BAC$ creating an obtuse angle
- 5) D as the midpoint of \overleftrightarrow{CE}
- 6) \overleftrightarrow{BC} intersecting $\angle ACD$
- 7) \overleftrightarrow{AC} intersected by \overline{BD}
- 8) \overleftrightarrow{AC} perpendicular to \overleftrightarrow{AD}
- 9) \overleftrightarrow{AB} intersecting $\angle BCD$ at point B
- 10) \overleftrightarrow{AC} parallel to \overleftrightarrow{EB}
- 11) $\angle DEC$ intersected by \overleftrightarrow{AC}
- 12) Acute $\angle ABC$ intersecting \overleftrightarrow{AD}

1. **C**
2. **J**
3. **A**
4. **H**
5. **B**
6. **I**
7. **F**
8. **K**
9. **D**
10. **G**
11. **L**
12. **E**

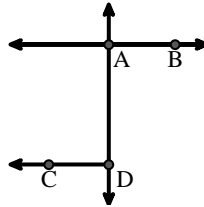
A.



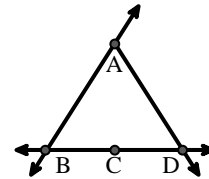
B.



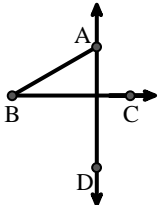
C.



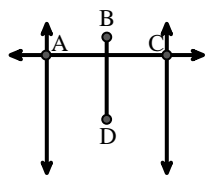
D.



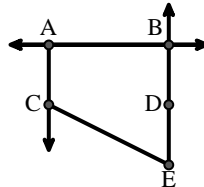
E.



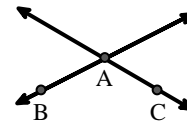
F.



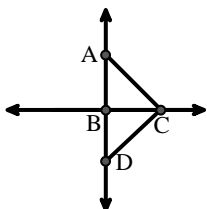
G.



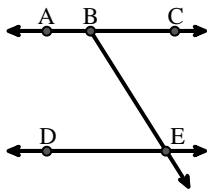
H.



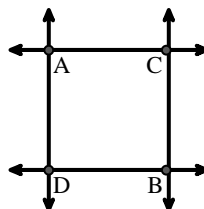
I.



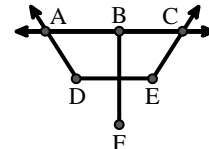
J.



K.



L.





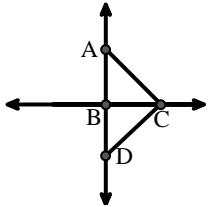
Match the description on the top with the visual image on the bottom.

Answers

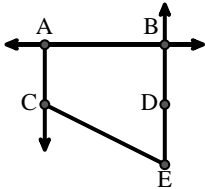
- 1) \overleftrightarrow{AB} parallel to \overleftrightarrow{CD}
- 2) \overrightarrow{BA} intersecting \overleftrightarrow{AD}
- 3) \overleftrightarrow{BC} intersecting $\angle ACD$
- 4) \overleftrightarrow{AB} intersecting \overleftrightarrow{AD}
- 5) Acute $\angle BED$
- 6) \overline{BE} intersecting \overleftrightarrow{CD}
- 7) Right $\angle ADE$
- 8) $\angle BAC$ creating an obtuse angle
- 9) \overrightarrow{AC} parallel to \overrightarrow{EB}
- 10) \overleftrightarrow{AC} intersected by \overline{BD}
- 11) D as the midpoint of \overleftrightarrow{CE}
- 12) $\angle DEC$ intersected by \overleftrightarrow{AC}

1. _____
2. _____
3. _____
4. _____
5. _____
6. _____
7. _____
8. _____
9. _____
10. _____
11. _____
12. _____

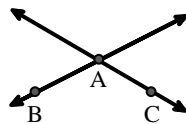
A.



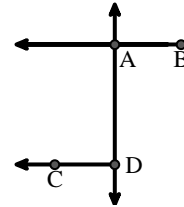
B.



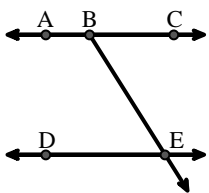
C.



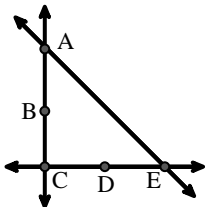
D.



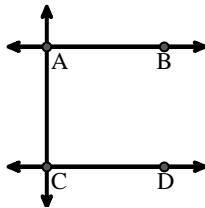
E.



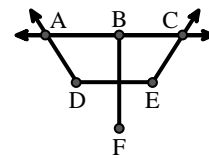
F.



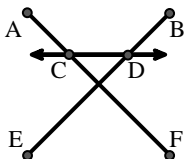
G.



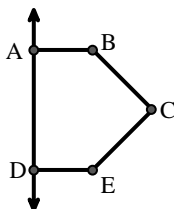
H.



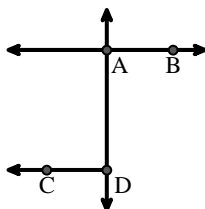
I.



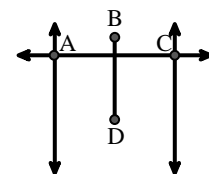
J.



K.



L.





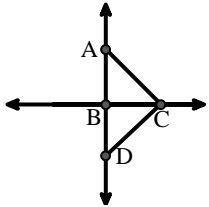
Match the description on the top with the visual image on the bottom.

Answers

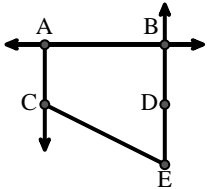
- 1) \overleftrightarrow{AB} parallel to \overleftrightarrow{CD}
- 2) \overrightarrow{BA} intersecting \overleftrightarrow{AD}
- 3) \overleftrightarrow{BC} intersecting $\angle ACD$
- 4) \overleftrightarrow{AB} intersecting \overleftrightarrow{AD}
- 5) Acute $\angle BED$
- 6) \overline{BE} intersecting \overleftrightarrow{CD}
- 7) Right $\angle ADE$
- 8) $\angle BAC$ creating an obtuse angle
- 9) \overrightarrow{AC} parallel to \overrightarrow{EB}
- 10) \overleftrightarrow{AC} intersected by \overline{BD}
- 11) D as the midpoint of \overleftrightarrow{CE}
- 12) $\angle DEC$ intersected by \overleftrightarrow{AC}

1. **G**
2. **D**
3. **A**
4. **K**
5. **E**
6. **I**
7. **J**
8. **C**
9. **B**
10. **L**
11. **F**
12. **H**

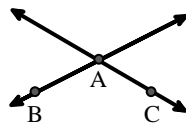
A.



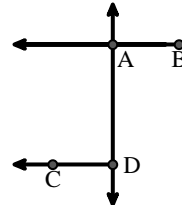
B.



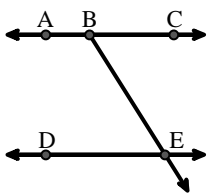
C.



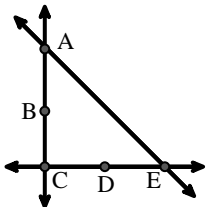
D.



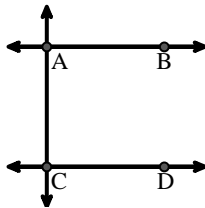
E.



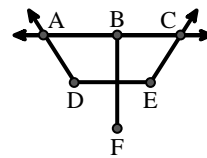
F.



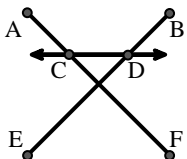
G.



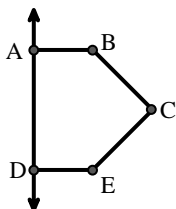
H.



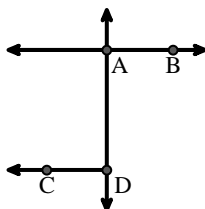
I.



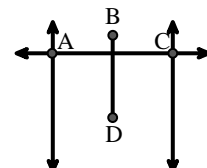
J.



K.



L.





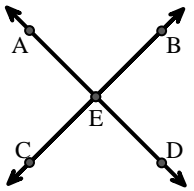
Match the description on the top with the visual image on the bottom.

Answers

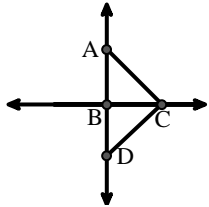
- 1) $\angle BAC$ creating an obtuse angle
- 2) \overleftrightarrow{AB} intersecting \overleftrightarrow{AD}
- 3) Right $\angle ADE$
- 4) \overleftrightarrow{BA} intersecting \overleftrightarrow{AD}
- 5) \overleftrightarrow{AD} intersecting \overleftrightarrow{BC} at point E
- 6) \overleftrightarrow{BD} intersecting \overleftrightarrow{CE}
- 7) \overleftrightarrow{AC} parallel to \overleftrightarrow{EB}
- 8) \overleftrightarrow{AB} parallel to \overleftrightarrow{CD}
- 9) \overleftrightarrow{BC} intersecting $\angle ACD$
- 10) \overleftrightarrow{AC} perpendicular to \overleftrightarrow{AD}
- 11) Acute $\angle BDE$
- 12) \overleftrightarrow{AC} intersected by \overleftrightarrow{BD}

- 1. _____
- 2. _____
- 3. _____
- 4. _____
- 5. _____
- 6. _____
- 7. _____
- 8. _____
- 9. _____
- 10. _____
- 11. _____
- 12. _____

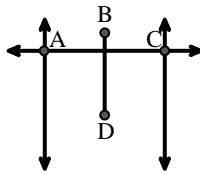
A.



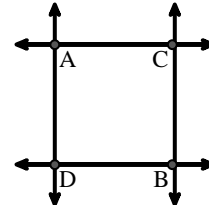
B.



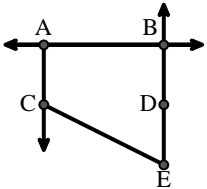
C.



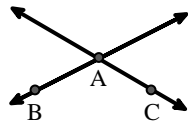
D.



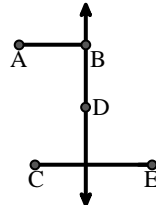
E.



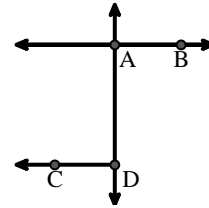
F.



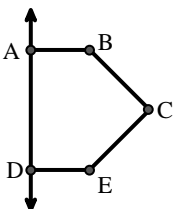
G.



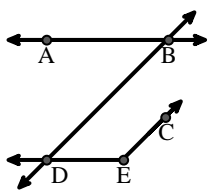
H.



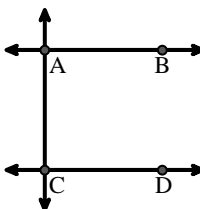
I.



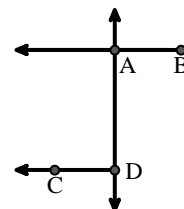
J.



K.



L.





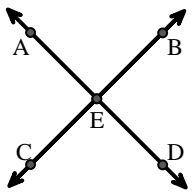
Match the description on the top with the visual image on the bottom.

Answers

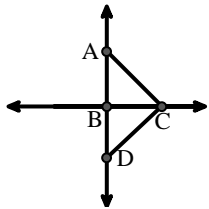
- 1) $\angle BAC$ creating an obtuse angle
- 2) \overleftrightarrow{AB} intersecting \overleftrightarrow{AD}
- 3) Right $\angle ADE$
- 4) \overleftrightarrow{BA} intersecting \overleftrightarrow{AD}
- 5) \overleftrightarrow{AD} intersecting \overleftrightarrow{BC} at point E
- 6) \overleftrightarrow{BD} intersecting \overleftrightarrow{CE}
- 7) \overleftrightarrow{AC} parallel to \overleftrightarrow{EB}
- 8) \overleftrightarrow{AB} parallel to \overleftrightarrow{CD}
- 9) \overleftrightarrow{BC} intersecting $\angle ACD$
- 10) \overleftrightarrow{AC} perpendicular to \overleftrightarrow{AD}
- 11) Acute $\angle BDE$
- 12) \overleftrightarrow{AC} intersected by \overleftrightarrow{BD}

1. **F**
2. **H**
3. **I**
4. **L**
5. **A**
6. **G**
7. **E**
8. **K**
9. **B**
10. **D**
11. **J**
12. **C**

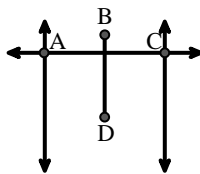
A.



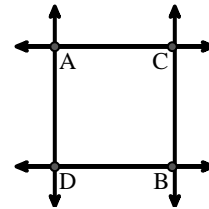
B.



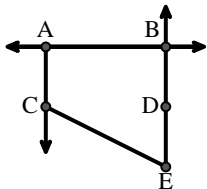
C.



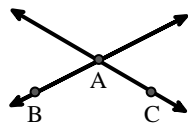
D.



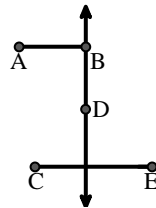
E.



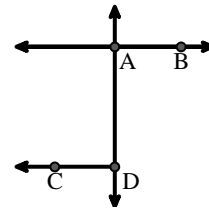
F.



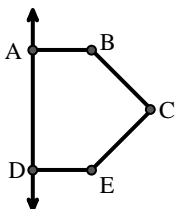
G.



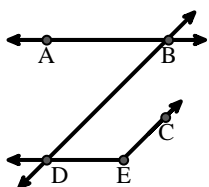
H.



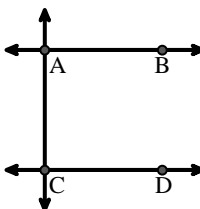
I.



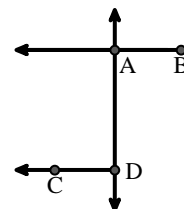
J.



K.



L.





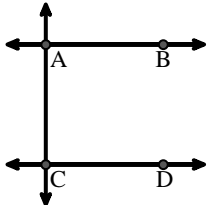
Match the description on the top with the visual image on the bottom.

Answers

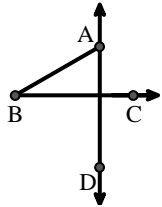
- 1) \overleftrightarrow{BC} intersecting $\angle ACD$
- 2) Right $\angle ADE$
- 3) \overleftrightarrow{AC} parallel to \overleftrightarrow{EB}
- 4) \overleftrightarrow{AB} parallel to \overleftrightarrow{CD}
- 5) \overleftrightarrow{AE} intersecting \overleftrightarrow{DB}
- 6) \overleftrightarrow{AD} intersecting \overleftrightarrow{BC} at point E
- 7) \overleftrightarrow{AC} intersected by \overleftrightarrow{BD}
- 8) Acute $\angle ABC$ intersecting \overleftrightarrow{AD}
- 9) \overleftrightarrow{BD} intersecting $\angle ACE$
- 10) D as the midpoint of \overleftrightarrow{CE}
- 11) \overleftrightarrow{AC} perpendicular to \overleftrightarrow{AD}
- 12) \overleftrightarrow{BE} intersecting \overleftrightarrow{CD}

1. _____
2. _____
3. _____
4. _____
5. _____
6. _____
7. _____
8. _____
9. _____
10. _____
11. _____
12. _____

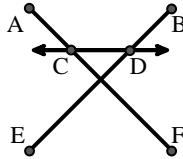
A.



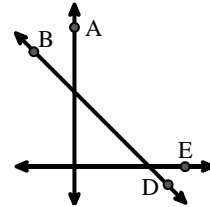
B.



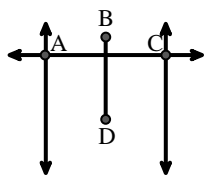
C.



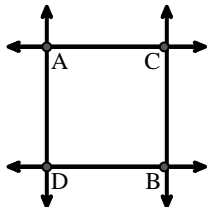
D.



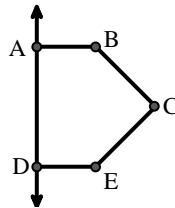
E.



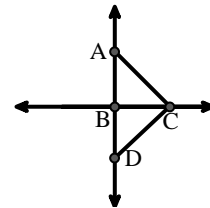
F.



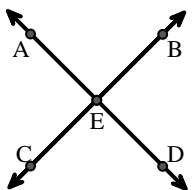
G.



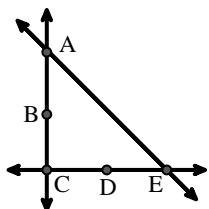
H.



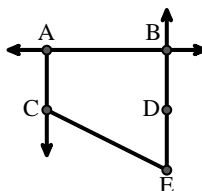
I.



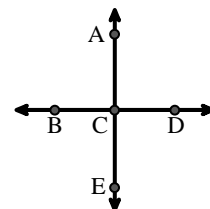
J.



K.



L.





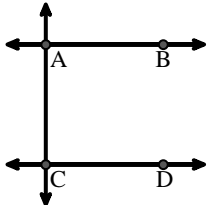
Match the description on the top with the visual image on the bottom.

Answers

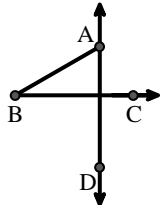
- 1) \overleftrightarrow{BC} intersecting $\angle ACD$
- 2) Right $\angle ADE$
- 3) \overleftrightarrow{AC} parallel to \overleftrightarrow{EB}
- 4) \overleftrightarrow{AB} parallel to \overleftrightarrow{CD}
- 5) \overleftrightarrow{AE} intersecting \overleftrightarrow{DB}
- 6) \overleftrightarrow{AD} intersecting \overleftrightarrow{BC} at point E
- 7) \overleftrightarrow{AC} intersected by \overleftrightarrow{BD}
- 8) Acute $\angle ABC$ intersecting \overleftrightarrow{AD}
- 9) \overleftrightarrow{BD} intersecting $\angle ACE$
- 10) D as the midpoint of \overleftrightarrow{CE}
- 11) \overleftrightarrow{AC} perpendicular to \overleftrightarrow{AD}
- 12) \overleftrightarrow{BE} intersecting \overleftrightarrow{CD}

1. **H**
2. **G**
3. **K**
4. **A**
5. **L**
6. **I**
7. **E**
8. **B**
9. **D**
10. **J**
11. **F**
12. **C**

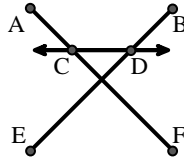
A.



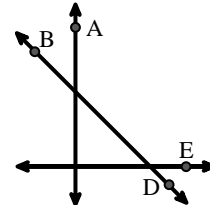
B.



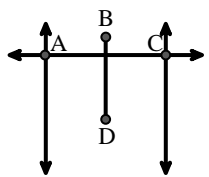
C.



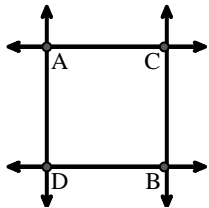
D.



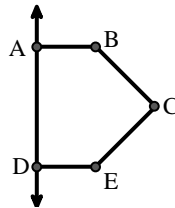
E.



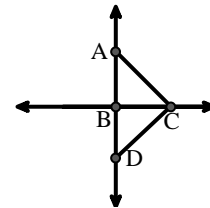
F.



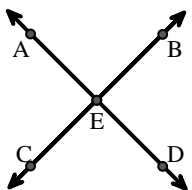
G.



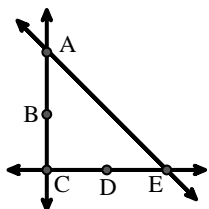
H.



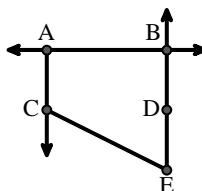
I.



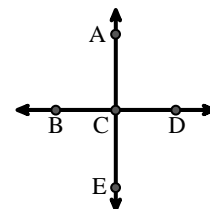
J.



K.



L.





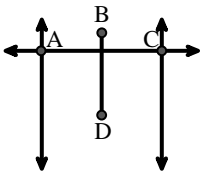
Match the description on the top with the visual image on the bottom.

Answers

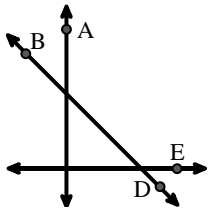
- 1) \overleftrightarrow{BD} intersecting $\angle ACE$
- 2) \overleftrightarrow{AB} intersecting \overleftrightarrow{AD}
- 3) \overleftrightarrow{BC} intersecting $\angle ACD$
- 4) \overleftrightarrow{AB} intersecting $\angle BCD$ at point B
- 5) \overleftrightarrow{AB} parallel to \overleftrightarrow{CD}
- 6) Acute $\angle BED$
- 7) Right $\angle ADE$
- 8) \overleftrightarrow{BA} intersecting \overleftrightarrow{AD}
- 9) $\angle BAC$ creating an obtuse angle
- 10) Acute $\angle BDE$
- 11) \overleftrightarrow{BD} intersecting \overline{CE}
- 12) \overleftrightarrow{AC} intersected by \overline{BD}

1. _____
2. _____
3. _____
4. _____
5. _____
6. _____
7. _____
8. _____
9. _____
10. _____
11. _____
12. _____

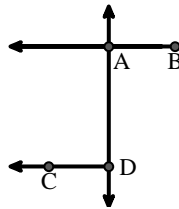
A.



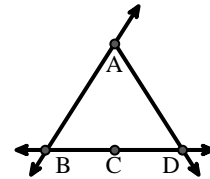
B.



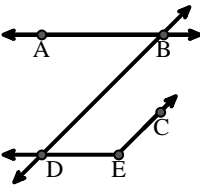
C.



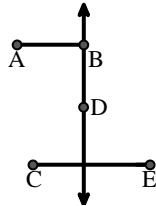
D.



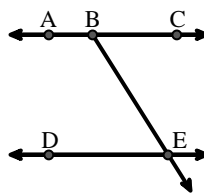
E.



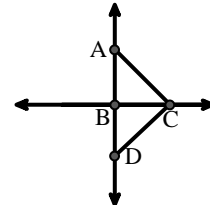
F.



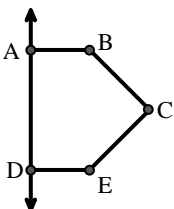
G.



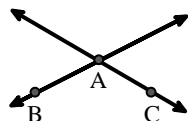
H.



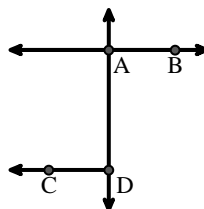
I.



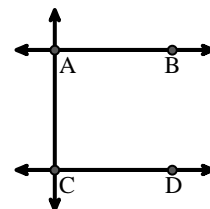
J.



K.



L.





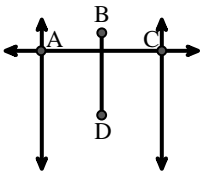
Match the description on the top with the visual image on the bottom.

Answers

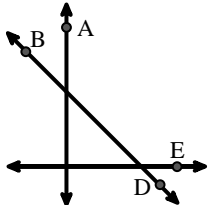
- 1) \overleftrightarrow{BD} intersecting $\angle ACE$
- 2) \overleftrightarrow{AB} intersecting \overleftrightarrow{AD}
- 3) \overleftrightarrow{BC} intersecting $\angle ACD$
- 4) \overleftrightarrow{AB} intersecting $\angle BCD$ at point B
- 5) \overleftrightarrow{AB} parallel to \overleftrightarrow{CD}
- 6) Acute $\angle BED$
- 7) Right $\angle ADE$
- 8) \overleftrightarrow{BA} intersecting \overleftrightarrow{AD}
- 9) $\angle BAC$ creating an obtuse angle
- 10) Acute $\angle BDE$
- 11) \overleftrightarrow{BD} intersecting \overline{CE}
- 12) \overleftrightarrow{AC} intersected by \overline{BD}

- 1. **B**
- 2. **K**
- 3. **H**
- 4. **D**
- 5. **L**
- 6. **G**
- 7. **I**
- 8. **C**
- 9. **J**
- 10. **E**
- 11. **F**
- 12. **A**

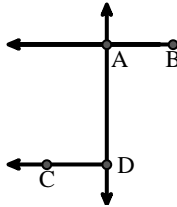
A.



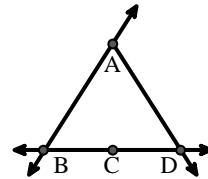
B.



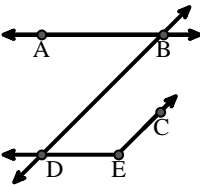
C.



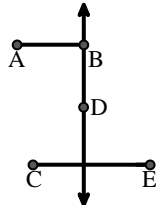
D.



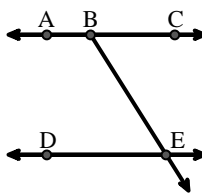
E.



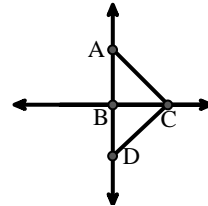
F.



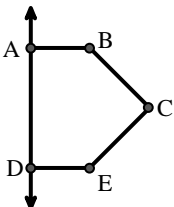
G.



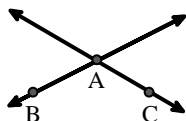
H.



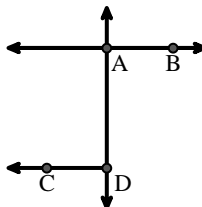
I.



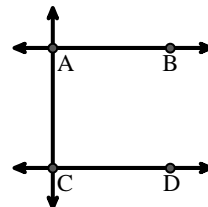
J.



K.



L.





Match the description on the top with the visual image on the bottom.

Answers

1) \overleftrightarrow{AD} intersecting \overleftrightarrow{BC} at point E

2) \overleftrightarrow{AC} parallel to \overleftrightarrow{EB}

3) D as the midpoint of \overleftrightarrow{CE}

4) \overleftrightarrow{AC} intersected by \overleftrightarrow{BD}

5) \overleftrightarrow{BE} intersecting \overleftrightarrow{CD}

6) \overleftrightarrow{BC} intersecting $\angle ACD$

7) $\angle BAC$ creating an obtuse angle

8) Acute $\angle ABC$ intersecting \overleftrightarrow{AD}

9) \overleftrightarrow{AB} intersecting \overleftrightarrow{AD}

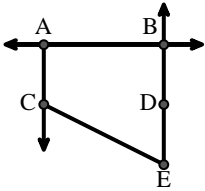
10) \overleftrightarrow{BA} intersecting \overleftrightarrow{AD}

11) \overleftrightarrow{AB} parallel to \overleftrightarrow{CD}

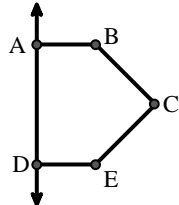
12) Right $\angle ADE$

- 1. _____
- 2. _____
- 3. _____
- 4. _____
- 5. _____
- 6. _____
- 7. _____
- 8. _____
- 9. _____
- 10. _____
- 11. _____
- 12. _____

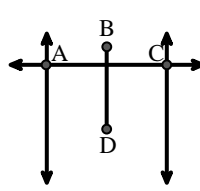
A.



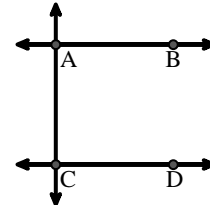
B.



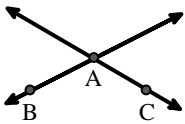
C.



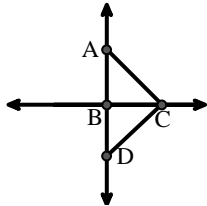
D.



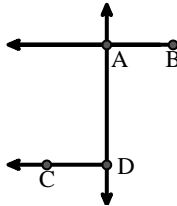
E.



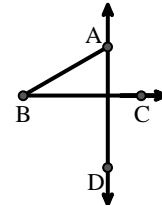
F.



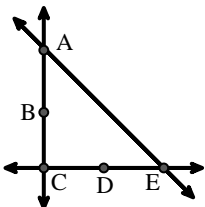
G.



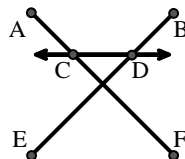
H.



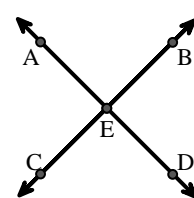
I.



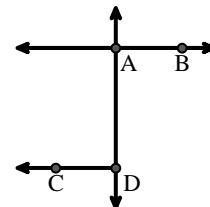
J.



K.



L.





Match the description on the top with the visual image on the bottom.

Answers

1) \overleftrightarrow{AD} intersecting \overleftrightarrow{BC} at point E

1. **K**

2) \overleftrightarrow{AC} parallel to \overleftrightarrow{EB}

2. **A**

3) D as the midpoint of \overleftrightarrow{CE}

3. **I**

4) \overleftrightarrow{AC} intersected by \overleftrightarrow{BD}

4. **C**

5) \overleftrightarrow{BE} intersecting \overleftrightarrow{CD}

5. **J**

6) \overleftrightarrow{BC} intersecting $\angle ACD$

6. **F**

7) $\angle BAC$ creating an obtuse angle

7. **E**

8) Acute $\angle ABC$ intersecting \overleftrightarrow{AD}

8. **H**

9) \overleftrightarrow{AB} intersecting \overleftrightarrow{AD}

9. **L**

10) \overleftrightarrow{BA} intersecting \overleftrightarrow{AD}

10. **G**

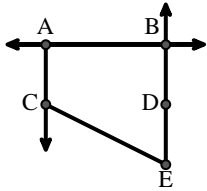
11) \overleftrightarrow{AB} parallel to \overleftrightarrow{CD}

11. **D**

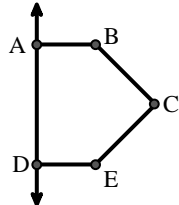
12) Right $\angle ADE$

12. **B**

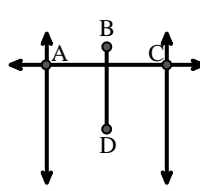
A.



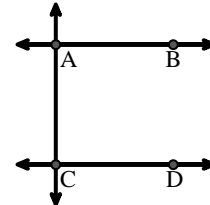
B.



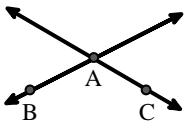
C.



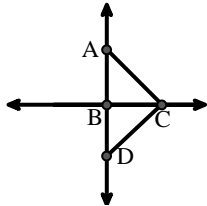
D.



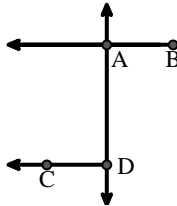
E.



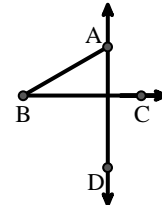
F.



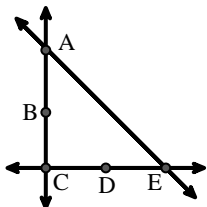
G.



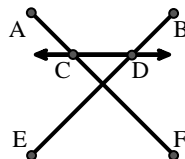
H.



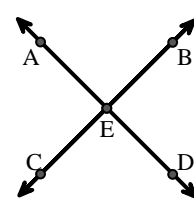
I.



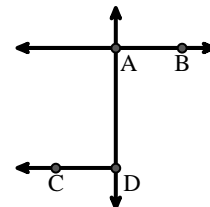
J.



K.



L.





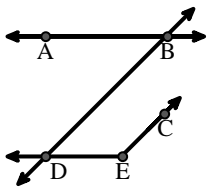
Match the description on the top with the visual image on the bottom.

Answers

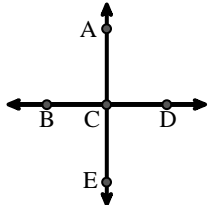
- 1) D as the midpoint of \overleftrightarrow{CE}
- 2) \overleftrightarrow{AE} intersecting \overleftrightarrow{DB}
- 3) \overleftrightarrow{AD} intersecting \overleftrightarrow{BC} at point E
- 4) Acute $\angle BDE$
- 5) $\angle BAC$ creating an obtuse angle
- 6) Right $\angle ADE$
- 7) \overleftrightarrow{BC} intersecting $\angle ACD$
- 8) \overleftrightarrow{AC} intersected by \overleftrightarrow{BD}
- 9) Acute $\angle ABC$ intersecting \overleftrightarrow{AD}
- 10) \overleftrightarrow{BD} intersecting $\angle ACE$
- 11) \overleftrightarrow{AB} parallel to \overleftrightarrow{CD}
- 12) $\angle DEC$ intersected by \overleftrightarrow{AC}

1. _____
2. _____
3. _____
4. _____
5. _____
6. _____
7. _____
8. _____
9. _____
10. _____
11. _____
12. _____

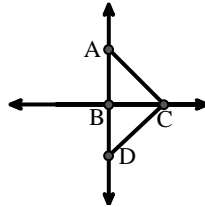
A.



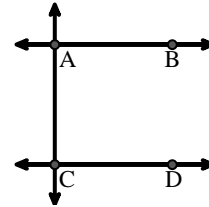
B.



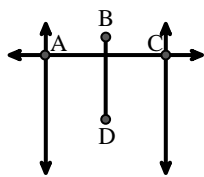
C.



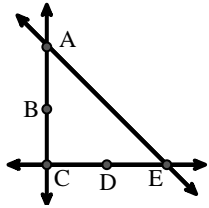
D.



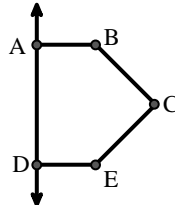
E.



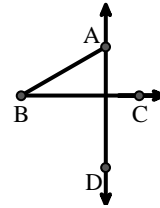
F.



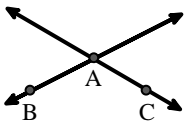
G.



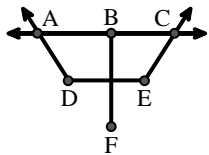
H.



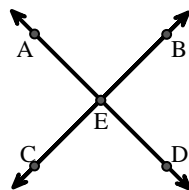
I.



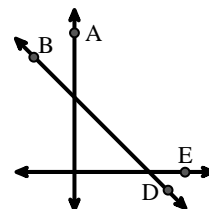
J.



K.



L.





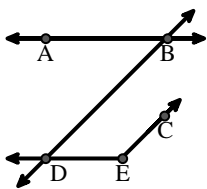
Match the description on the top with the visual image on the bottom.

Answers

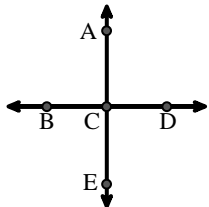
- 1) D as the midpoint of \overleftrightarrow{CE}
- 2) \overleftrightarrow{AE} intersecting \overleftrightarrow{DB}
- 3) \overleftrightarrow{AD} intersecting \overleftrightarrow{BC} at point E
- 4) Acute $\angle BDE$
- 5) $\angle BAC$ creating an obtuse angle
- 6) Right $\angle ADE$
- 7) \overleftrightarrow{BC} intersecting $\angle ACD$
- 8) \overleftrightarrow{AC} intersected by \overleftrightarrow{BD}
- 9) Acute $\angle ABC$ intersecting \overleftrightarrow{AD}
- 10) \overleftrightarrow{BD} intersecting $\angle ACE$
- 11) \overleftrightarrow{AB} parallel to \overleftrightarrow{CD}
- 12) $\angle DEC$ intersected by \overleftrightarrow{AC}

1. **F**
2. **B**
3. **K**
4. **A**
5. **I**
6. **G**
7. **C**
8. **E**
9. **H**
10. **L**
11. **D**
12. **J**

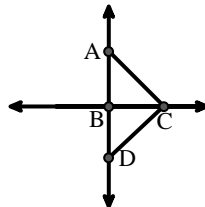
A.



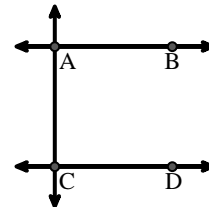
B.



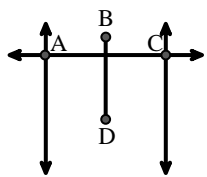
C.



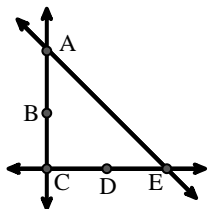
D.



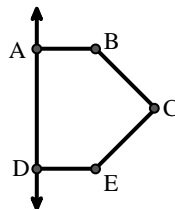
E.



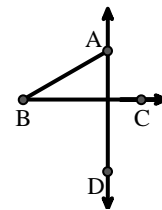
F.



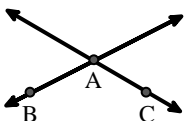
G.



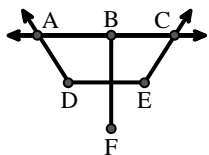
H.



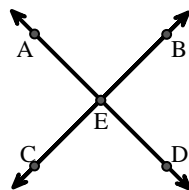
I.



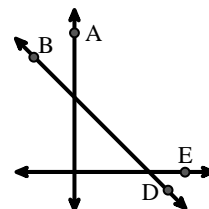
J.



K.



L.





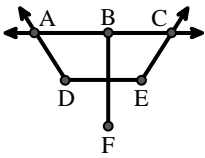
Match the description on the top with the visual image on the bottom.

Answers

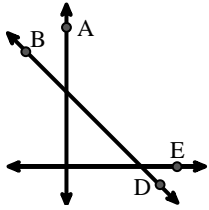
- 1) \overleftrightarrow{AB} intersecting $\angle BCD$ at point B
- 2) \overleftrightarrow{AC} parallel to \overleftrightarrow{EB}
- 3) \overleftrightarrow{AB} parallel to \overleftrightarrow{CD}
- 4) Acute $\angle BED$
- 5) \overleftrightarrow{AC} intersected by \overleftrightarrow{BD}
- 6) Right $\angle ADE$
- 7) Acute $\angle ABC$ intersecting \overleftrightarrow{AD}
- 8) \overleftrightarrow{BD} intersecting $\angle ACE$
- 9) \overleftrightarrow{AC} perpendicular to \overleftrightarrow{AD}
- 10) $\angle DEC$ intersected by \overleftrightarrow{AC}
- 11) \overleftrightarrow{BA} intersecting \overleftrightarrow{AD}
- 12) \overleftrightarrow{AE} intersecting \overleftrightarrow{DB}

1. _____
2. _____
3. _____
4. _____
5. _____
6. _____
7. _____
8. _____
9. _____
10. _____
11. _____
12. _____

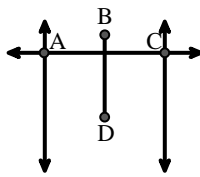
A.



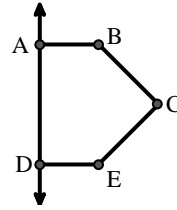
B.



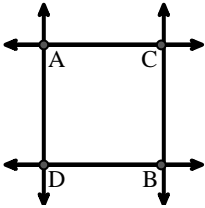
C.



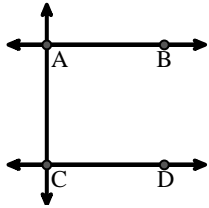
D.



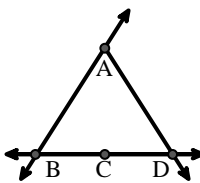
E.



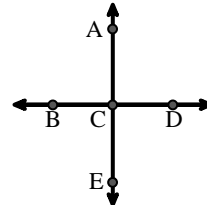
F.



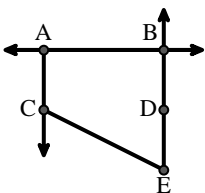
G.



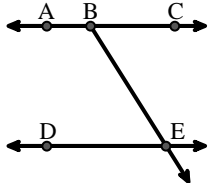
H.



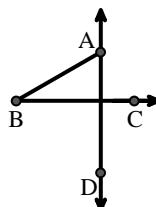
I.



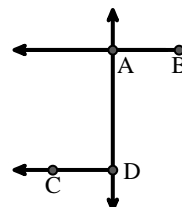
J.



K.



L.





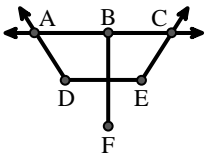
Match the description on the top with the visual image on the bottom.

Answers

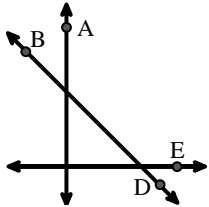
- 1) \overleftrightarrow{AB} intersecting $\angle BCD$ at point B
- 2) \overleftrightarrow{AC} parallel to \overleftrightarrow{EB}
- 3) \overleftrightarrow{AB} parallel to \overleftrightarrow{CD}
- 4) Acute $\angle BED$
- 5) \overleftrightarrow{AC} intersected by \overleftrightarrow{BD}
- 6) Right $\angle ADE$
- 7) Acute $\angle ABC$ intersecting \overleftrightarrow{AD}
- 8) \overleftrightarrow{BD} intersecting $\angle ACE$
- 9) \overleftrightarrow{AC} perpendicular to \overleftrightarrow{AD}
- 10) $\angle DEC$ intersected by \overleftrightarrow{AC}
- 11) \overleftrightarrow{BA} intersecting \overleftrightarrow{AD}
- 12) \overleftrightarrow{AE} intersecting \overleftrightarrow{DB}

1. **G**
2. **I**
3. **F**
4. **J**
5. **C**
6. **D**
7. **K**
8. **B**
9. **E**
10. **A**
11. **L**
12. **H**

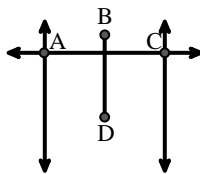
A.



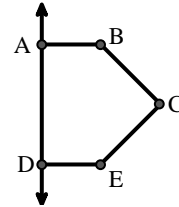
B.



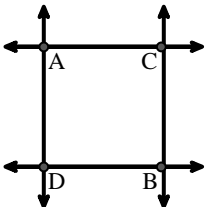
C.



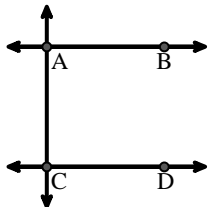
D.



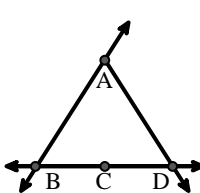
E.



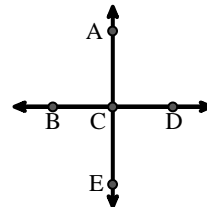
F.



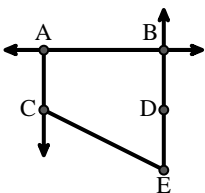
G.



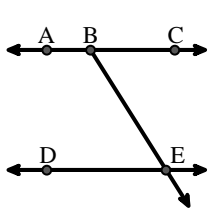
H.



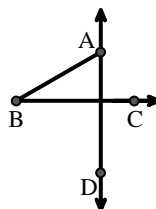
I.



J.



K.



L.

