



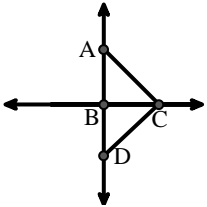
Match the description on the top with the visual image on the bottom.

Answers

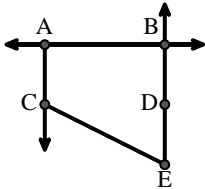
- 1) \overleftrightarrow{AB} parallel to \overleftrightarrow{CD}
- 2) \overrightarrow{BA} intersecting \overleftrightarrow{AD}
- 3) \overleftrightarrow{BC} intersecting $\angle ACD$
- 4) \overleftrightarrow{AB} intersecting \overleftrightarrow{AD}
- 5) Acute $\angle BED$
- 6) \overline{BE} intersecting \overleftrightarrow{CD}
- 7) Right $\angle ADE$
- 8) $\angle BAC$ creating an obtuse angle
- 9) \overrightarrow{AC} parallel to \overrightarrow{EB}
- 10) \overleftrightarrow{AC} intersected by \overline{BD}
- 11) D as the midpoint of \overleftrightarrow{CE}
- 12) $\angle DEC$ intersected by \overleftrightarrow{AC}

1. _____
2. _____
3. _____
4. _____
5. _____
6. _____
7. _____
8. _____
9. _____
10. _____
11. _____
12. _____

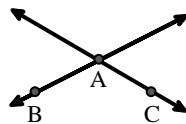
A.



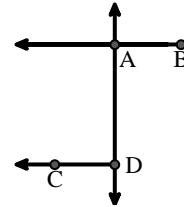
B.



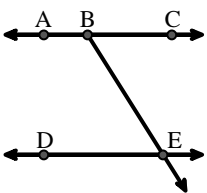
C.



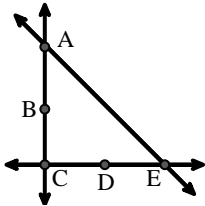
D.



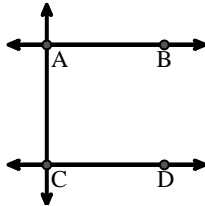
E.



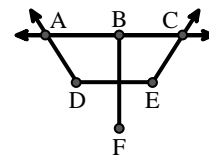
F.



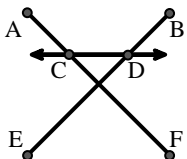
G.



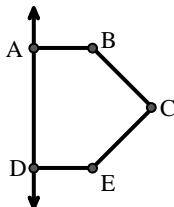
H.



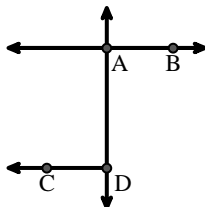
I.



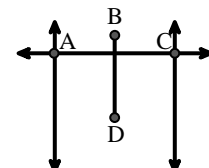
J.



K.



L.





Match the description on the top with the visual image on the bottom.

Answers

- 1) \overleftrightarrow{AB} parallel to \overleftrightarrow{CD}
- 2) \overrightarrow{BA} intersecting \overleftrightarrow{AD}
- 3) \overleftrightarrow{BC} intersecting $\angle ACD$
- 4) \overleftrightarrow{AB} intersecting \overleftrightarrow{AD}
- 5) Acute $\angle BED$
- 6) \overline{BE} intersecting \overleftrightarrow{CD}
- 7) Right $\angle ADE$
- 8) $\angle BAC$ creating an obtuse angle
- 9) \overrightarrow{AC} parallel to \overrightarrow{EB}
- 10) \overleftrightarrow{AC} intersected by \overline{BD}
- 11) D as the midpoint of \overleftrightarrow{CE}
- 12) $\angle DEC$ intersected by \overleftrightarrow{AC}

1. **G**
2. **D**
3. **A**
4. **K**
5. **E**
6. **I**
7. **J**
8. **C**
9. **B**
10. **L**
11. **F**
12. **H**

