


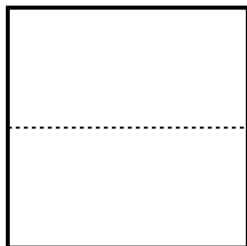


Partition and label each shape.


- Ex)** *Split the shape into 8 equal parts and label each part.*




- 2)** *Split the shape into 6 equal parts and label each part.*



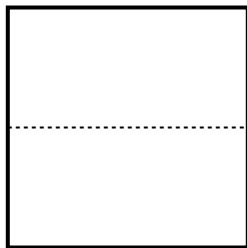
- 4)** *Split the shape into 3 equal parts and label each part.*




- 6)** *Split the shape into 4 equal parts and label each part.*




- 8)** *Split the shape into 8 equal parts and label each part.*




- 1)** *Split the shape into 4 equal parts and label each part.*




- 3)** *Split the shape into 2 equal parts and label each part.*




- 5)** *Split the shape into 2 equal parts and label each part.*



- 7)** *Split the shape into 3 equal parts and label each part.*



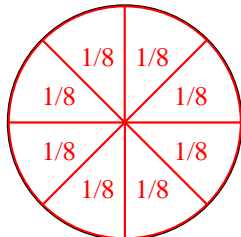
- 9)** *Split the shape into 6 equal parts and label each part.*



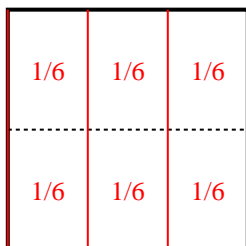


Partition and label each shape.


- Ex) Split the shape into 8 equal parts and label each part.




- 2) Split the shape into 6 equal parts and label each part.



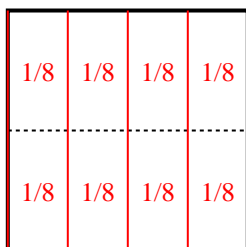
- 4) Split the shape into 3 equal parts and label each part.




- 6) Split the shape into 4 equal parts and label each part.



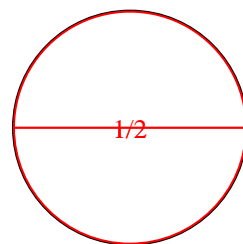
- 8) Split the shape into 8 equal parts and label each part.



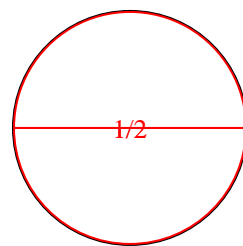
- 1) Split the shape into 4 equal parts and label each part.



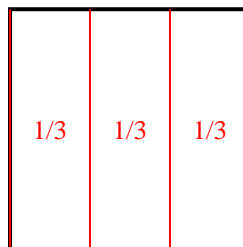
- 3) Split the shape into 2 equal parts and label each part.



- 5) Split the shape into 2 equal parts and label each part.



- 7) Split the shape into 3 equal parts and label each part.



- 9) Split the shape into 6 equal parts and label each part.

