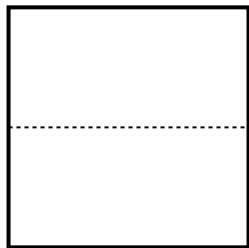


**Partition and label each shape.**


- Ex)** Split the shape into 8 equal parts and label each part.




- 1)** Split the shape into 2 equal parts and label each part.




- 2)** Split the shape into 4 equal parts and label each part.




- 3)** Split the shape into 6 equal parts and label each part.



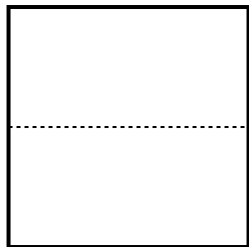
- 4)** Split the shape into 3 equal parts and label each part.




- 5)** Split the shape into 8 equal parts and label each part.




- 6)** Split the shape into 6 equal parts and label each part.




- 7)** Split the shape into 4 equal parts and label each part.



- 8)** Split the shape into 2 equal parts and label each part.



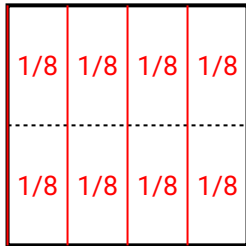
- 9)** Split the shape into 3 equal parts and label each part.



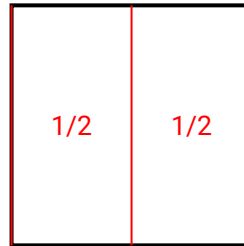


Partition and label each shape.

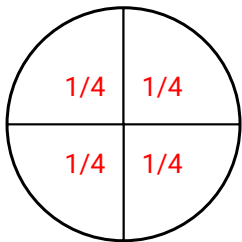
Ex) Split the shape into 8 equal parts and label each part.



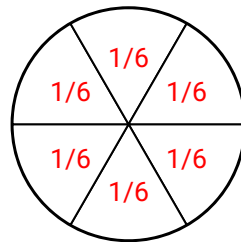
1) Split the shape into 2 equal parts and label each part.



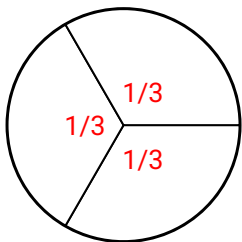
2) Split the shape into 4 equal parts and label each part.



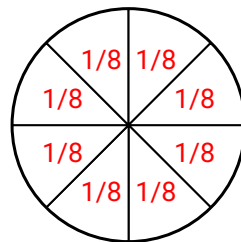
3) Split the shape into 6 equal parts and label each part.



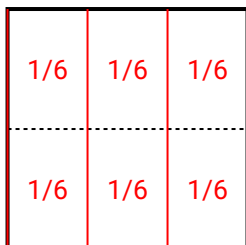
4) Split the shape into 3 equal parts and label each part.



5) Split the shape into 8 equal parts and label each part.



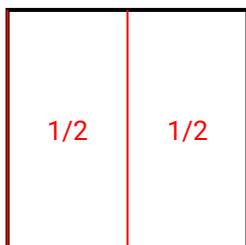
6) Split the shape into 6 equal parts and label each part.



7) Split the shape into 4 equal parts and label each part.



8) Split the shape into 2 equal parts and label each part.



9) Split the shape into 3 equal parts and label each part.

