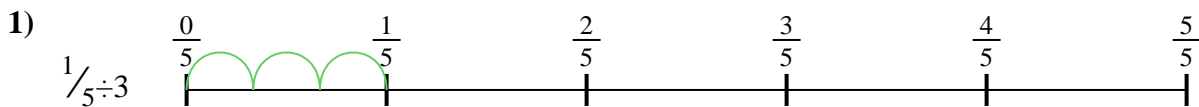





Use the numberline to solve each problem. The first is marked for you.

Answers



1. _____

2. _____



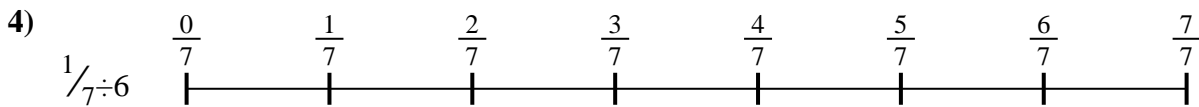
3. _____

4. _____



5. _____

6. _____

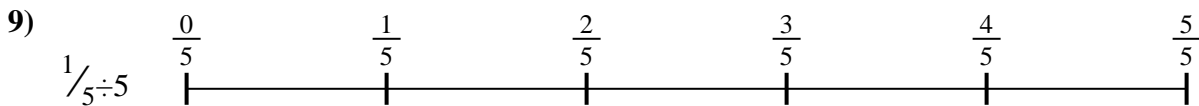
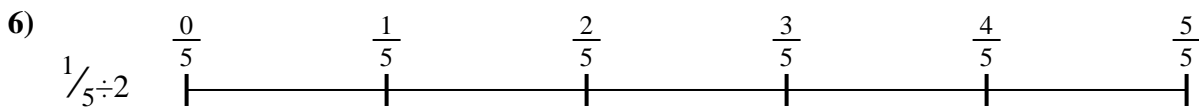


7. _____

8. _____

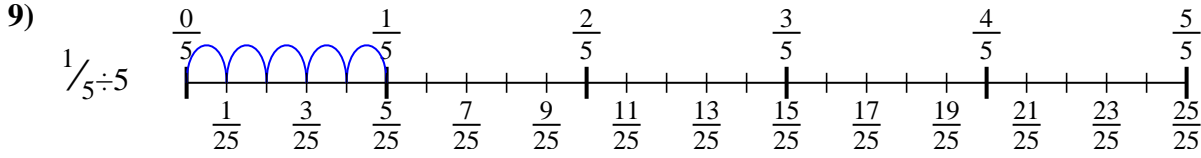
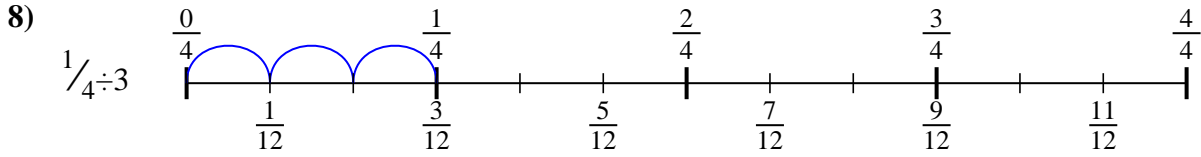
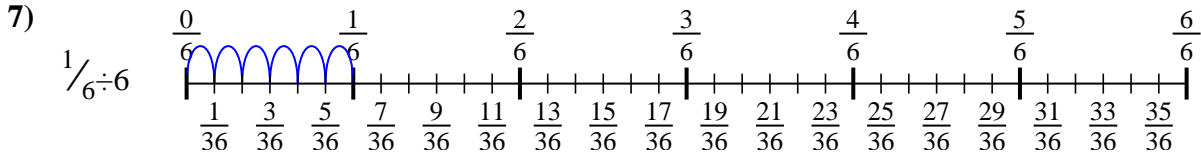
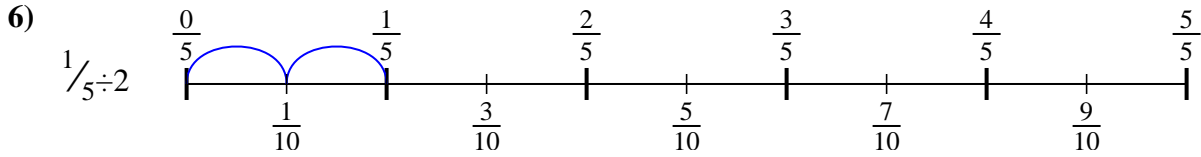
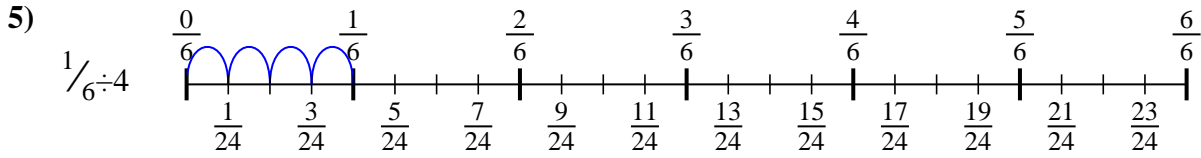
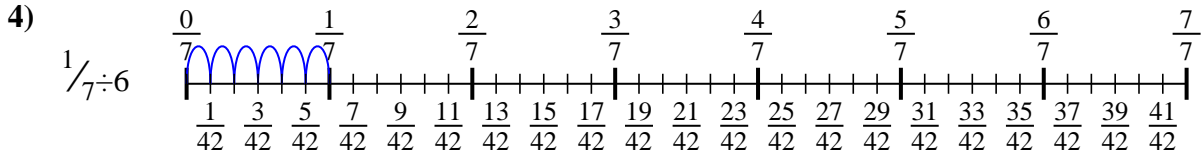
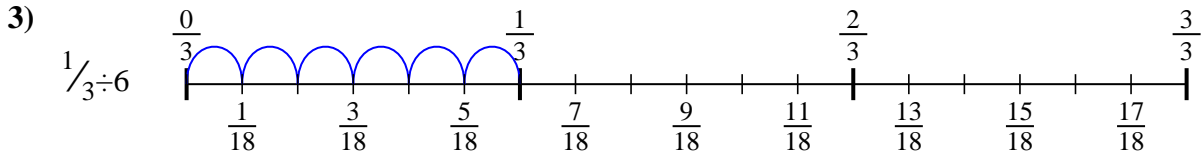
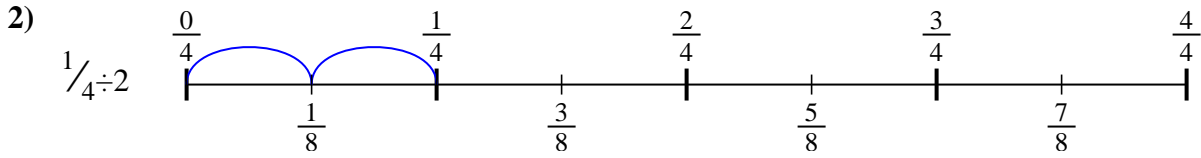
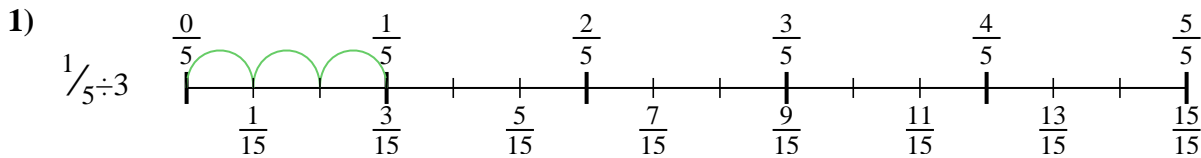


9. _____





Use the numberline to solve each problem. The first is marked for you.



Answers

1. $\frac{1}{15}$

2. $\frac{1}{8}$

3. $\frac{1}{18}$

4. $\frac{1}{42}$

5. $\frac{1}{24}$

6. $\frac{1}{10}$

7. $\frac{1}{36}$

8. $\frac{1}{12}$

9. $\frac{1}{25}$



Use the numberline to solve each problem. The first is marked for you.

Answers

$\frac{1}{18}$

$\frac{1}{12}$

$\frac{1}{10}$

$\frac{1}{42}$

$\frac{1}{25}$

$\frac{1}{15}$

$\frac{1}{8}$

$\frac{1}{24}$

$\frac{1}{36}$

1. _____

2. _____

3. _____

4. _____

5. _____

6. _____

7. _____

8. _____

9. _____

