



Use the numberline to solve each problem. The first is marked for you.

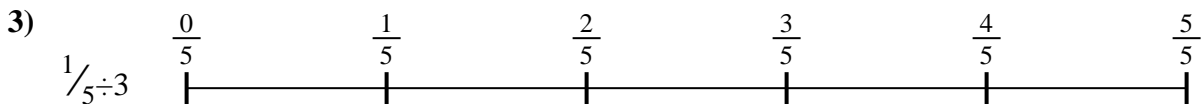
**Answers**



1. \_\_\_\_\_



2. \_\_\_\_\_



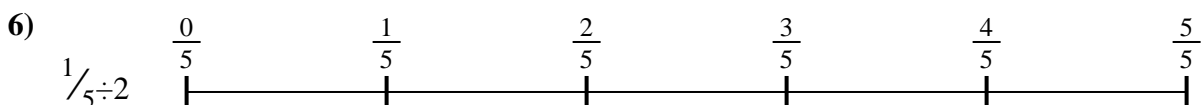
3. \_\_\_\_\_




4. \_\_\_\_\_




5. \_\_\_\_\_



6. \_\_\_\_\_



7. \_\_\_\_\_



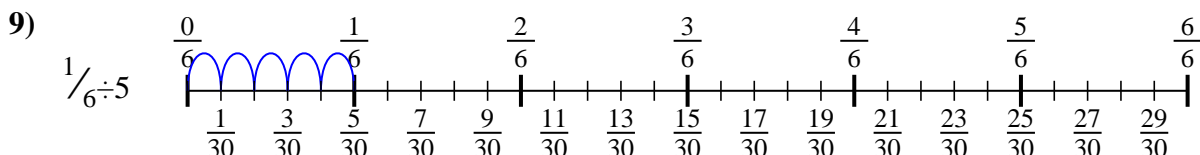
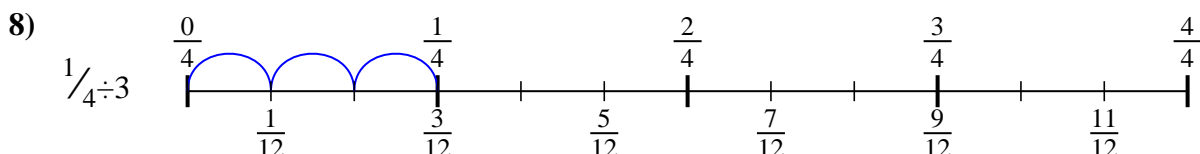
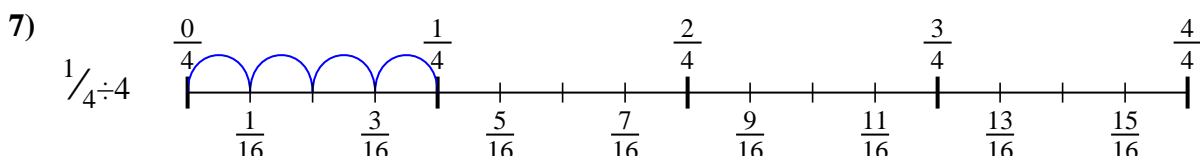
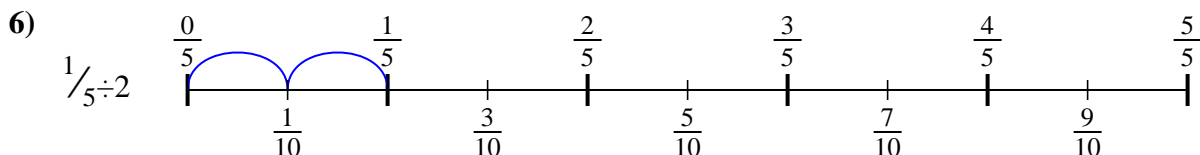
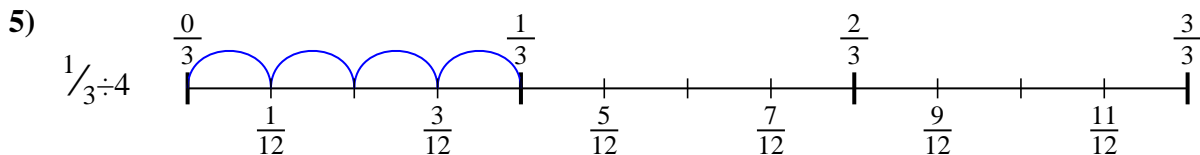
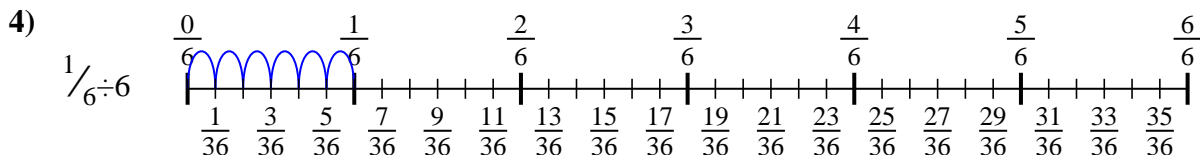
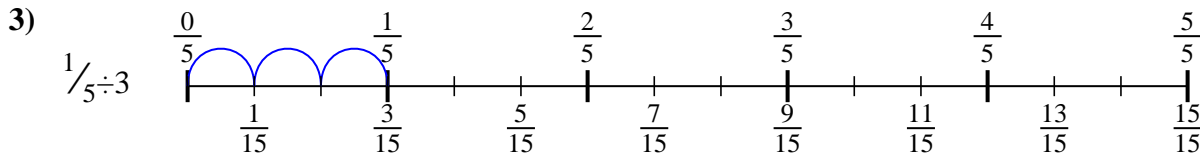
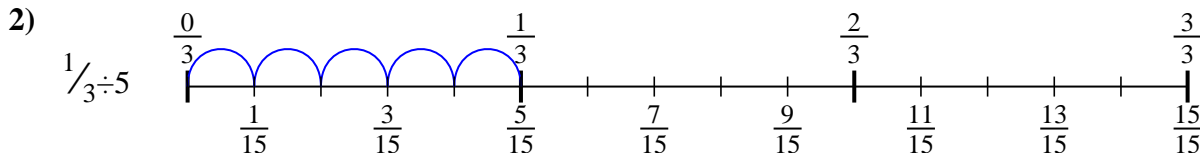
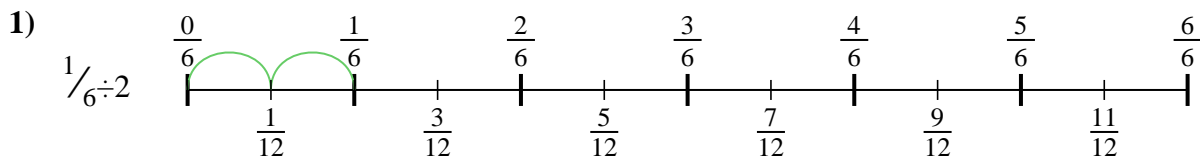
8. \_\_\_\_\_



9. \_\_\_\_\_



Use the numberline to solve each problem. The first is marked for you.



**Answers**

1.  $\frac{1}{12}$

2.  $\frac{1}{15}$

3.  $\frac{1}{15}$

4.  $\frac{1}{36}$

5.  $\frac{1}{12}$

6.  $\frac{1}{10}$

7.  $\frac{1}{16}$

8.  $\frac{1}{12}$

9.  $\frac{1}{30}$



Use the numberline to solve each problem. The first is marked for you.

**Answers**

$\frac{1}{36}$

$\frac{1}{12}$

$\frac{1}{30}$

$\frac{1}{12}$

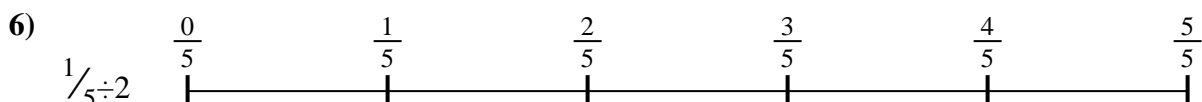

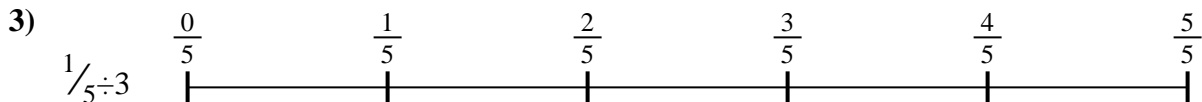
$\frac{1}{15}$

$\frac{1}{10}$

$\frac{1}{12}$

$\frac{1}{16}$

$\frac{1}{15}$



1. \_\_\_\_\_
2. \_\_\_\_\_
3. \_\_\_\_\_
4. \_\_\_\_\_
5. \_\_\_\_\_
6. \_\_\_\_\_
7. \_\_\_\_\_
8. \_\_\_\_\_
9. \_\_\_\_\_