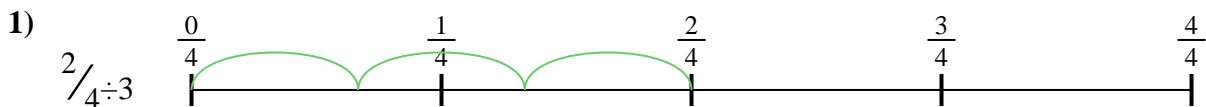


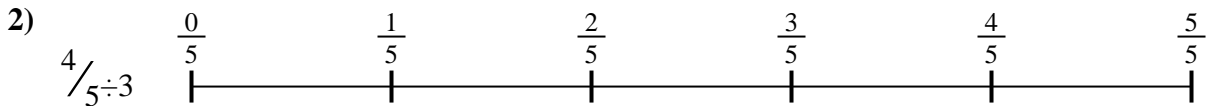


Use the numberline to solve each problem. The first is marked for you.

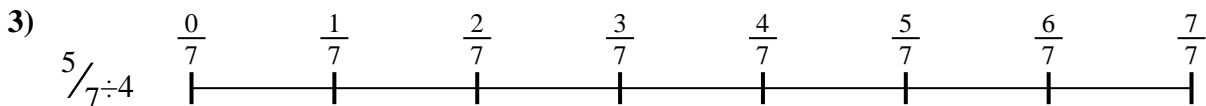
**Answers**




1. \_\_\_\_\_



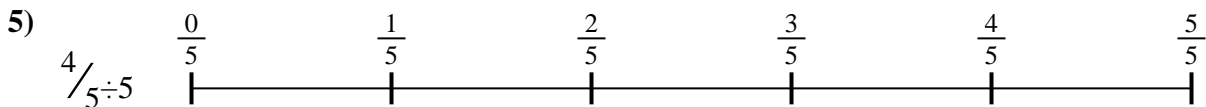
2. \_\_\_\_\_



3. \_\_\_\_\_




4. \_\_\_\_\_



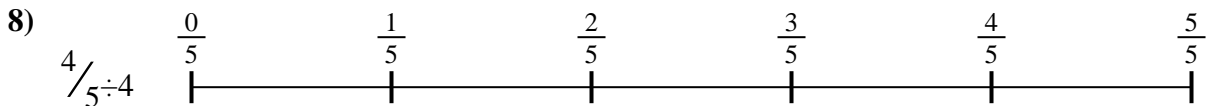
5. \_\_\_\_\_



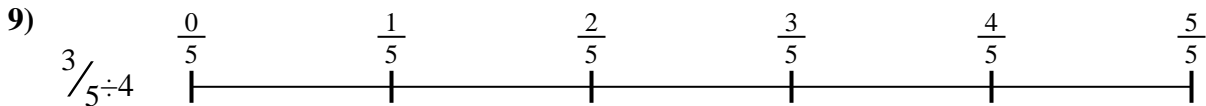
6. \_\_\_\_\_



7. \_\_\_\_\_



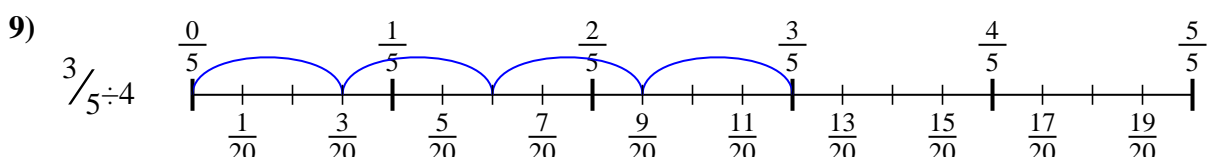
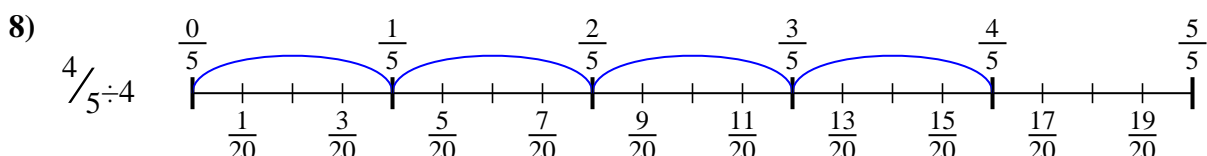
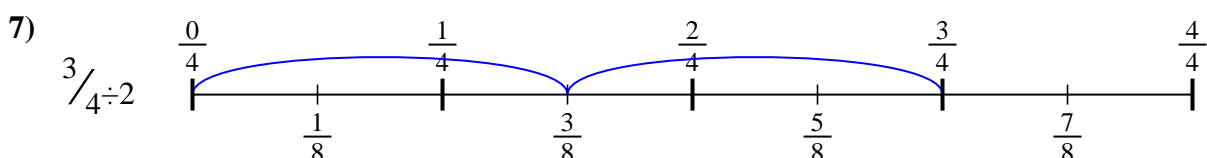
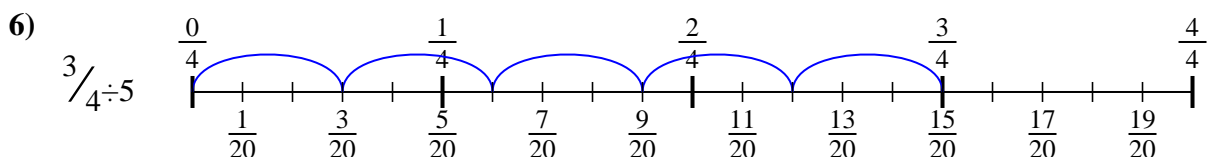
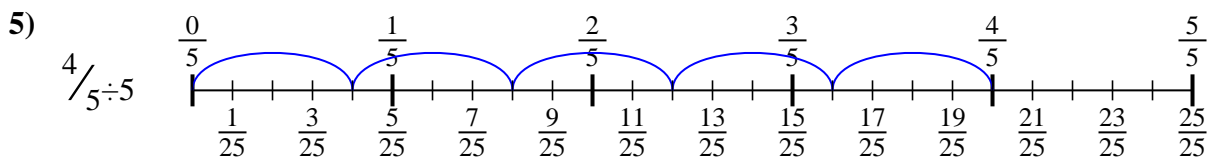
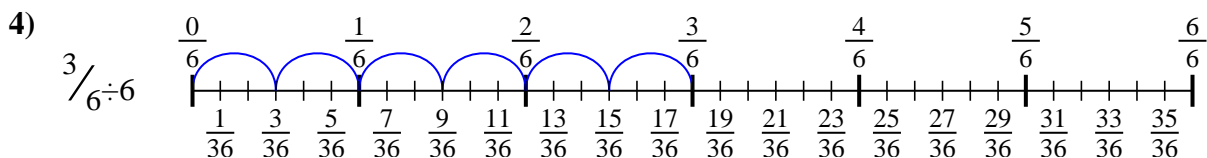
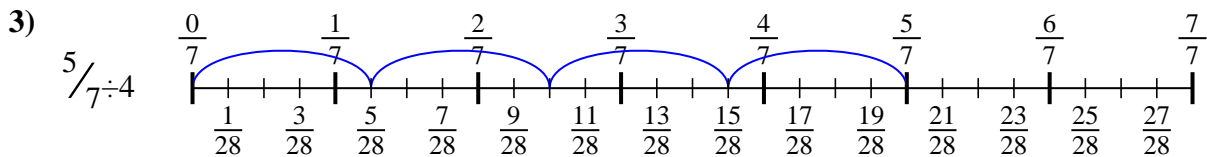
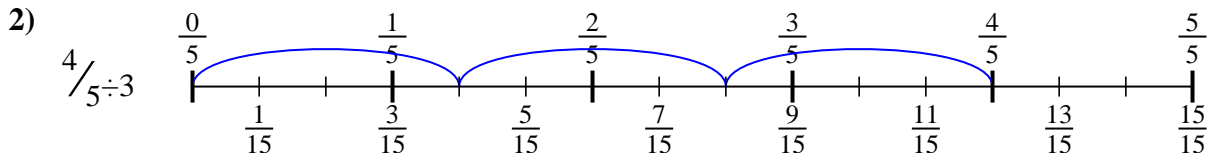
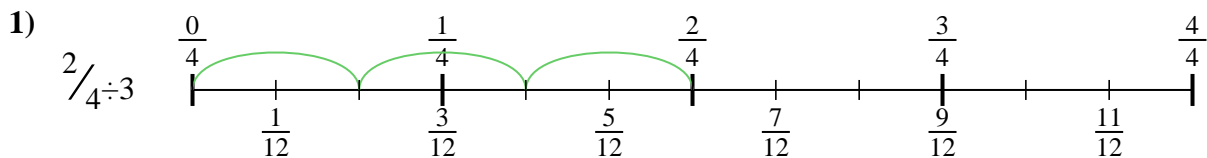
8. \_\_\_\_\_



9. \_\_\_\_\_



Use the numberline to solve each problem. The first is marked for you.



**Answers**

1.  $\frac{2}{12}$

2.  $\frac{4}{15}$

3.  $\frac{5}{28}$

4.  $\frac{3}{36}$

5.  $\frac{4}{25}$

6.  $\frac{3}{20}$

7.  $\frac{3}{8}$

8.  $\frac{4}{20}$

9.  $\frac{3}{20}$



Use the numberline to solve each problem. The first is marked for you.

**Answers**

$$\frac{3}{20}$$

$$\frac{4}{20}$$

$$\frac{5}{28}$$

$$\frac{3}{20}$$

$$\frac{3}{8}$$

$$\frac{3}{36}$$

$$\frac{2}{12}$$

$$\frac{4}{15}$$

$$\frac{4}{25}$$

1. \_\_\_\_\_
2. \_\_\_\_\_
3. \_\_\_\_\_
4. \_\_\_\_\_
5. \_\_\_\_\_
6. \_\_\_\_\_
7. \_\_\_\_\_
8. \_\_\_\_\_
9. \_\_\_\_\_

