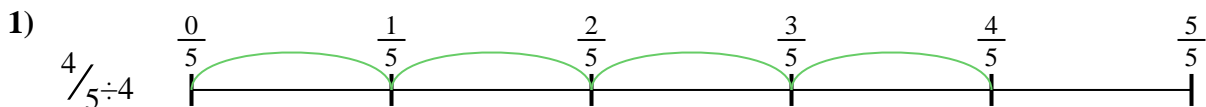


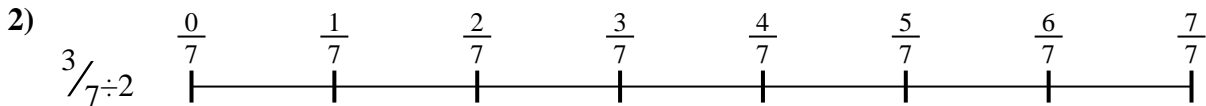


Use the numberline to solve each problem. The first is marked for you.

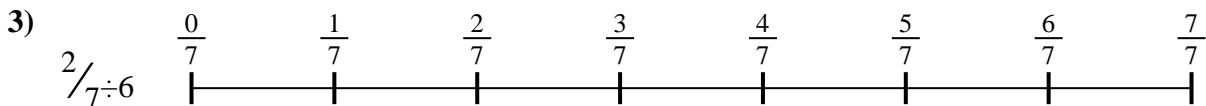
**Answers**



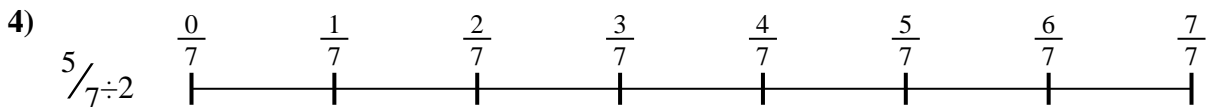
1. \_\_\_\_\_



2. \_\_\_\_\_



3. \_\_\_\_\_



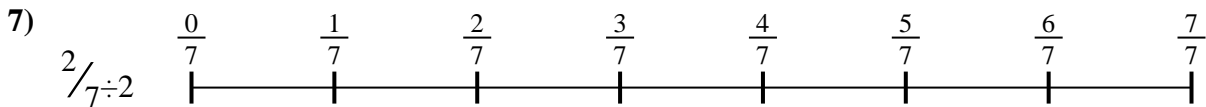
4. \_\_\_\_\_



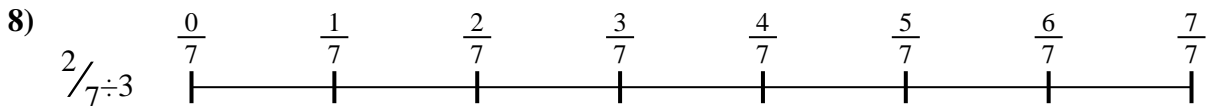
5. \_\_\_\_\_



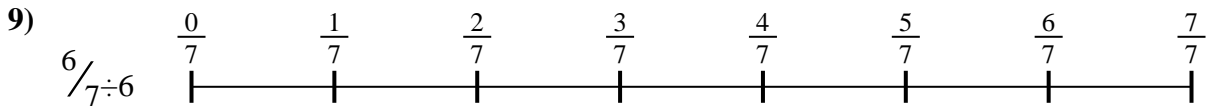
6. \_\_\_\_\_



7. \_\_\_\_\_



8. \_\_\_\_\_

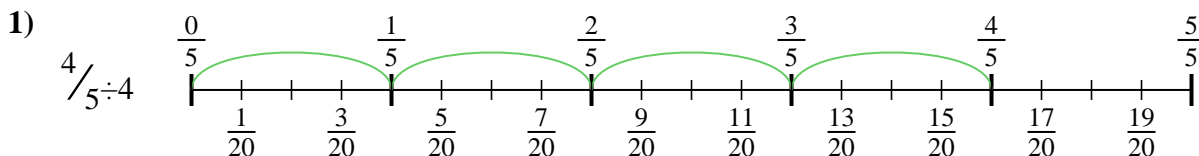


9. \_\_\_\_\_

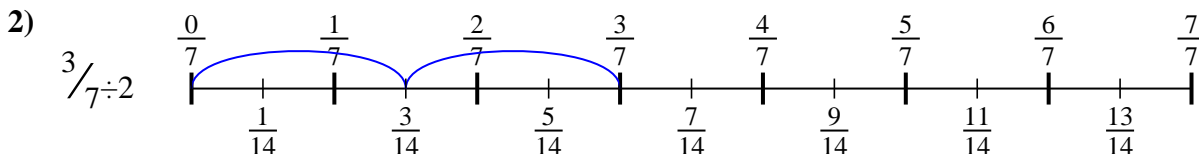


Use the numberline to solve each problem. The first is marked for you.

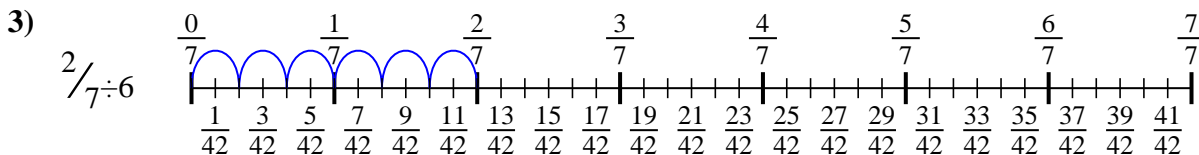
**Answers**



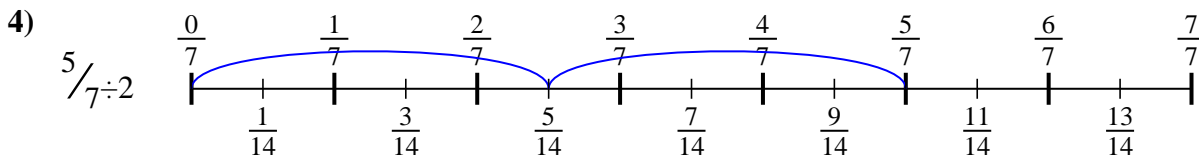
1.  $\frac{4}{20}$



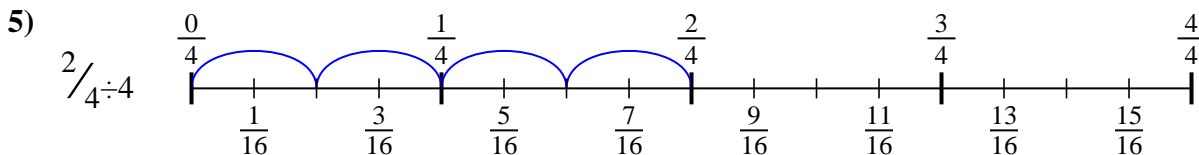
2.  $\frac{3}{14}$



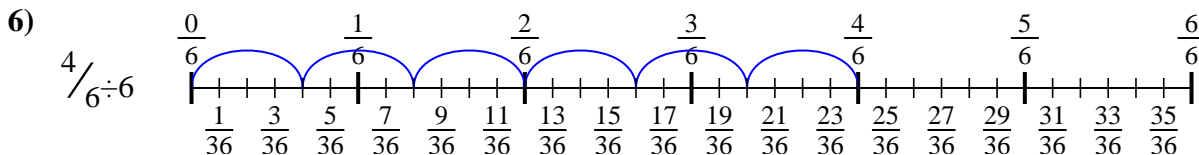
3.  $\frac{2}{42}$



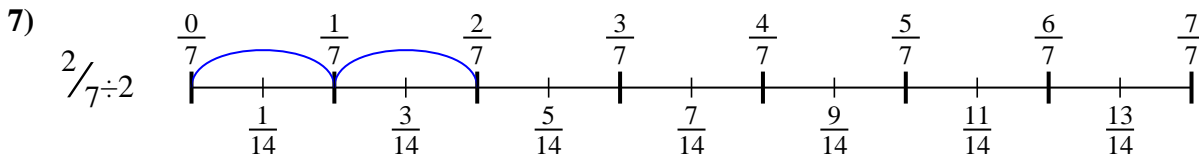
4.  $\frac{5}{14}$



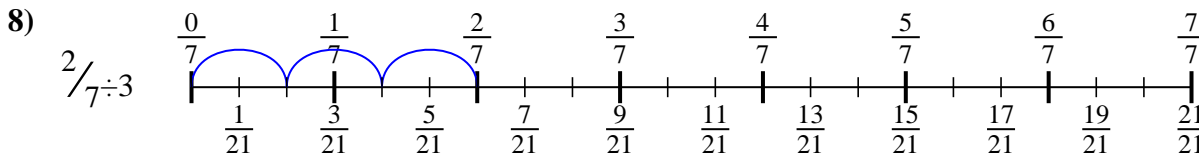
5.  $\frac{2}{16}$



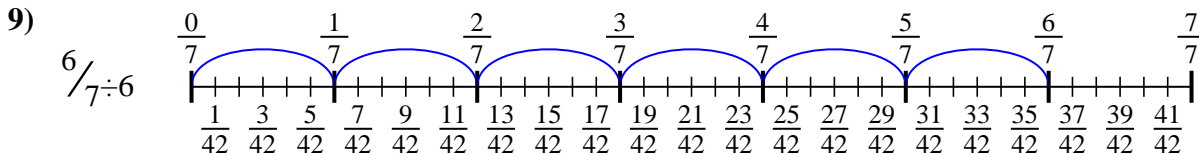
6.  $\frac{4}{36}$



7.  $\frac{2}{14}$



8.  $\frac{2}{21}$



9.  $\frac{6}{42}$



Use the numberline to solve each problem. The first is marked for you.

**Answers**

$2/21$

$4/20$

$3/14$

$4/36$

$2/16$

$6/42$

$2/14$

$5/14$

$2/42$

1. \_\_\_\_\_

2. \_\_\_\_\_

3. \_\_\_\_\_

4. \_\_\_\_\_

5. \_\_\_\_\_

6. \_\_\_\_\_

7. \_\_\_\_\_

8. \_\_\_\_\_

9. \_\_\_\_\_

