




Use the numberline to solve each problem. The first is marked for you.

**Answers**



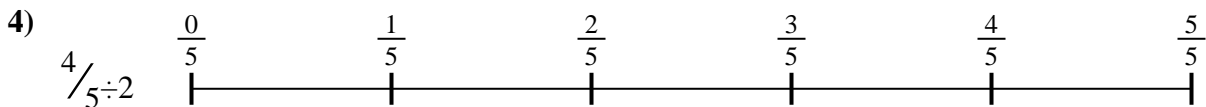
1. \_\_\_\_\_



2. \_\_\_\_\_



3. \_\_\_\_\_



4. \_\_\_\_\_



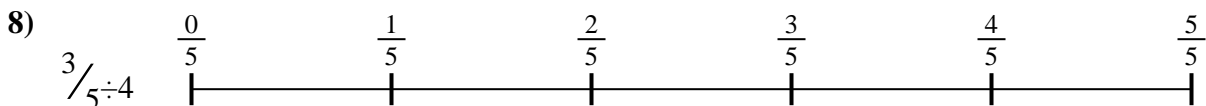
5. \_\_\_\_\_



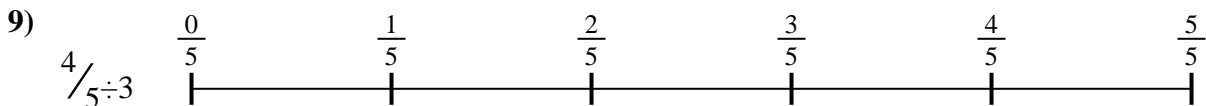
6. \_\_\_\_\_



7. \_\_\_\_\_



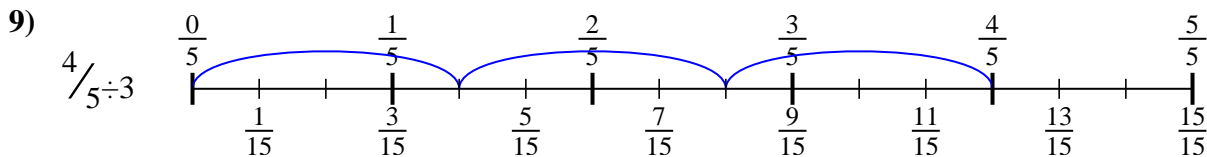
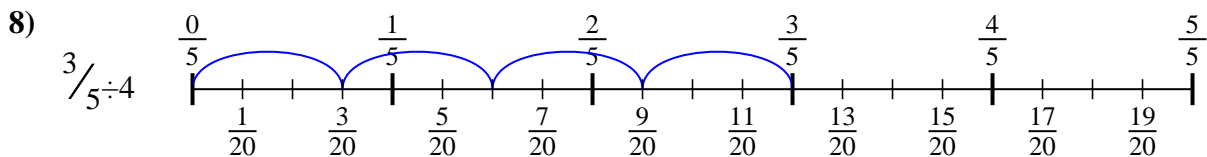
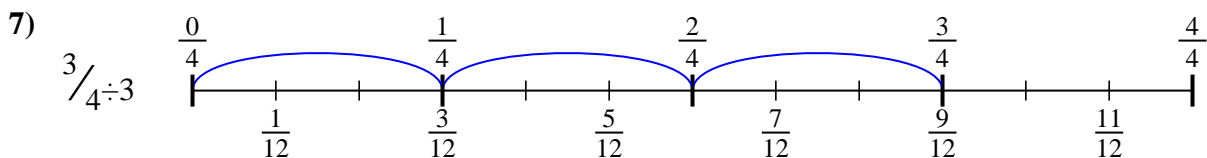
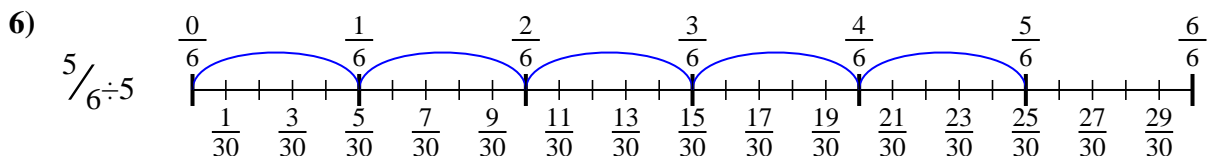
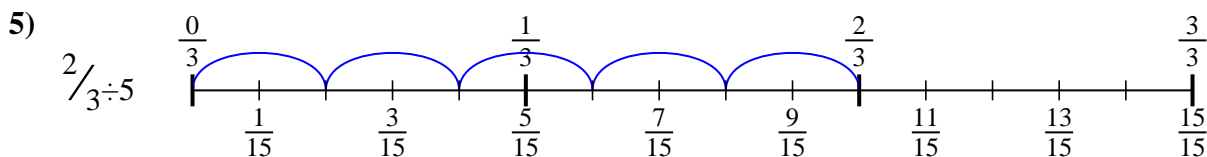
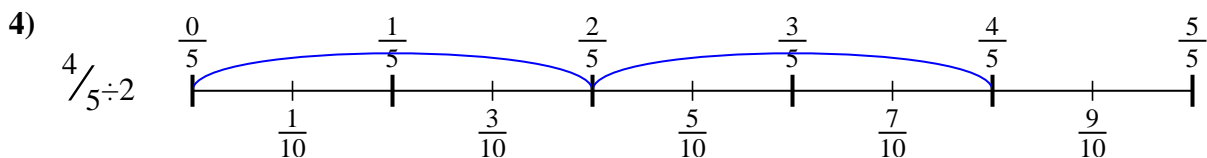
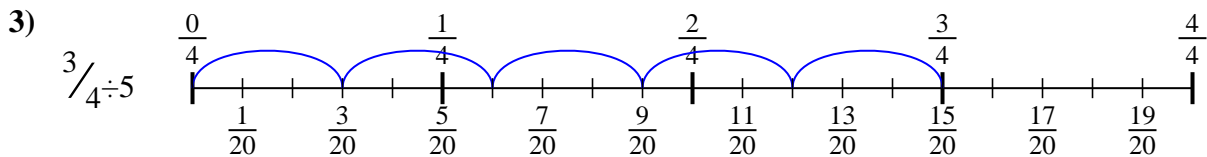
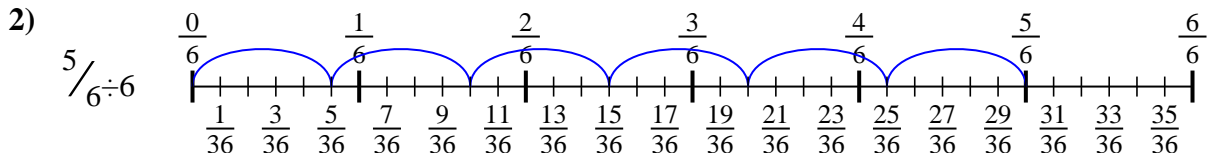
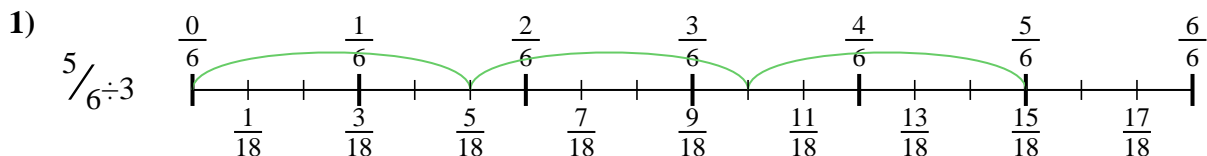
8. \_\_\_\_\_



9. \_\_\_\_\_



Use the numberline to solve each problem. The first is marked for you.



**Answers**

1.  $\frac{5}{18}$

2.  $\frac{5}{36}$

3.  $\frac{3}{20}$

4.  $\frac{4}{10}$

5.  $\frac{2}{15}$

6.  $\frac{5}{30}$

7.  $\frac{3}{12}$

8.  $\frac{3}{20}$

9.  $\frac{4}{15}$



Use the numberline to solve each problem. The first is marked for you.

**Answers**

$$\frac{3}{20}$$

$$\frac{5}{30}$$

$$\frac{2}{15}$$

$$\frac{4}{15}$$

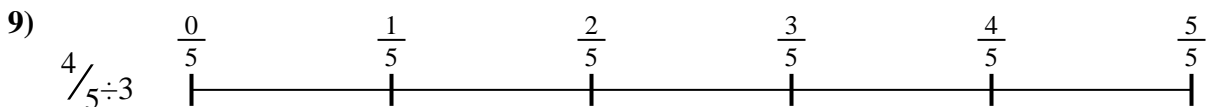
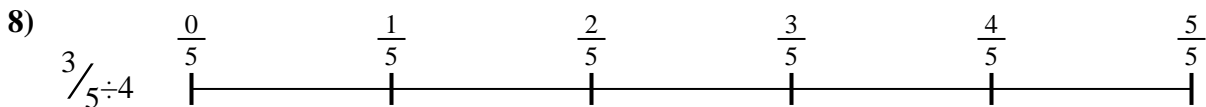

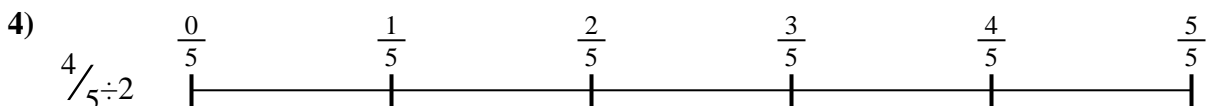

$$\frac{3}{12}$$

$$\frac{4}{10}$$

$$\frac{5}{36}$$

$$\frac{5}{18}$$

$$\frac{3}{20}$$



1. \_\_\_\_\_
2. \_\_\_\_\_
3. \_\_\_\_\_
4. \_\_\_\_\_
5. \_\_\_\_\_
6. \_\_\_\_\_
7. \_\_\_\_\_
8. \_\_\_\_\_
9. \_\_\_\_\_