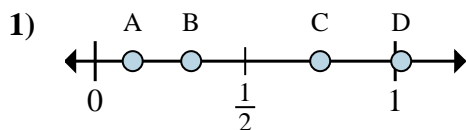
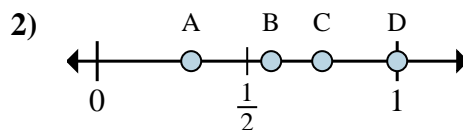
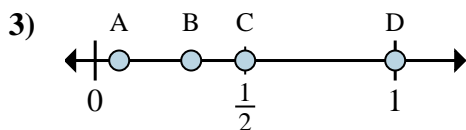
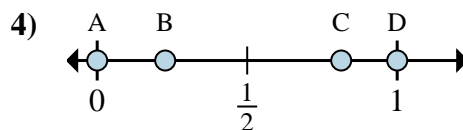
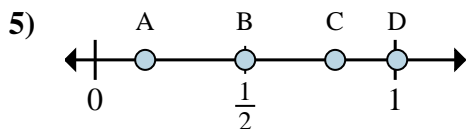
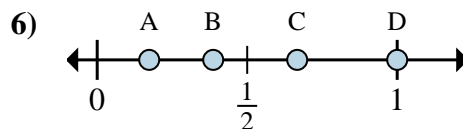
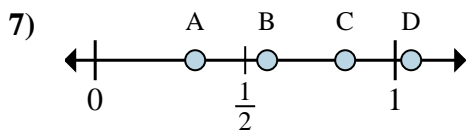
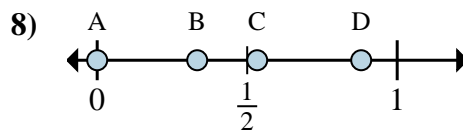




Determine which letter best shows the location of the fraction.

Answersa. Which letter best shows $\frac{1}{8}$?b. Which letter best shows $\frac{6}{8}$?a. Which letter best shows $\frac{3}{4}$?b. Which letter best shows $\frac{4}{4}$?a. Which letter best shows $\frac{8}{8}$?b. Which letter best shows $\frac{4}{8}$?a. Which letter best shows $\frac{0}{2}$?b. Which letter best shows $\frac{2}{2}$?a. Which letter best shows $\frac{1}{6}$?b. Which letter best shows $\frac{3}{6}$?a. Which letter best shows $\frac{2}{3}$?b. Which letter best shows $\frac{3}{3}$?a. Which letter best shows $\frac{5}{6}$?b. Which letter best shows $\frac{2}{6}$?a. Which letter best shows $\frac{0}{3}$?b. Which letter best shows $\frac{1}{3}$?

1. _____

2. _____

3. _____

4. _____

5. _____

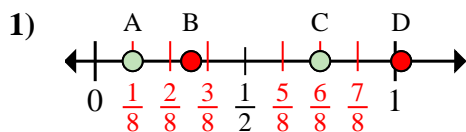
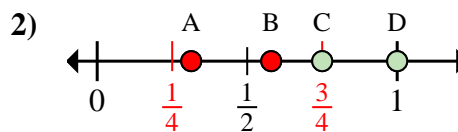
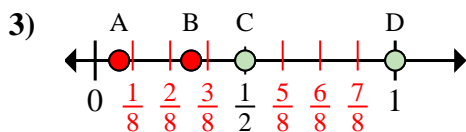
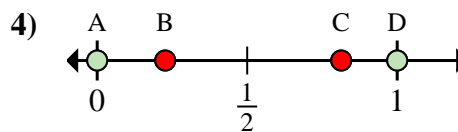
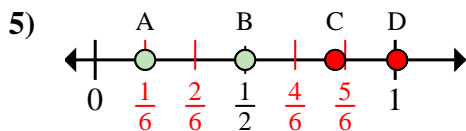
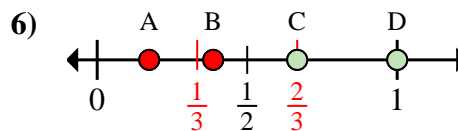
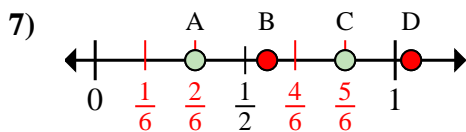
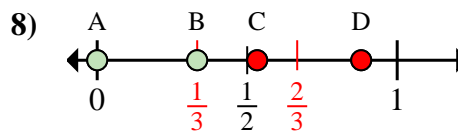
6. _____

7. _____

8. _____



Determine which letter best shows the location of the fraction.

Answersa. Which letter best shows $\frac{1}{8}$?b. Which letter best shows $\frac{6}{8}$?a. Which letter best shows $\frac{3}{4}$?b. Which letter best shows $\frac{4}{4}$?a. Which letter best shows $\frac{8}{8}$?b. Which letter best shows $\frac{4}{8}$?a. Which letter best shows $\frac{0}{2}$?b. Which letter best shows $\frac{2}{2}$?a. Which letter best shows $\frac{1}{6}$?b. Which letter best shows $\frac{3}{6}$?a. Which letter best shows $\frac{2}{3}$?b. Which letter best shows $\frac{3}{3}$?a. Which letter best shows $\frac{5}{6}$?b. Which letter best shows $\frac{2}{6}$?a. Which letter best shows $\frac{0}{3}$?b. Which letter best shows $\frac{1}{3}$?1. A C2. C D3. D C4. A D5. A B6. C D7. C A8. A B