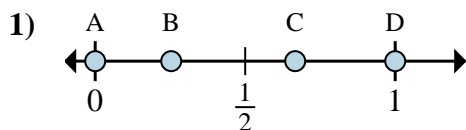
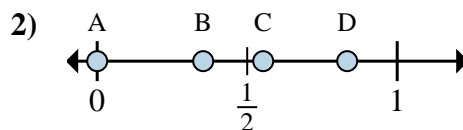
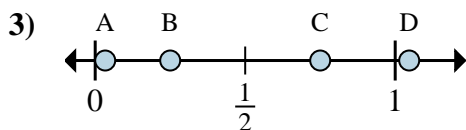
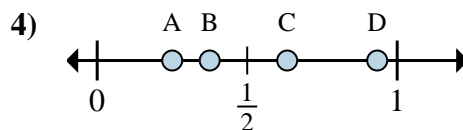
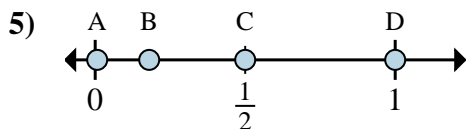
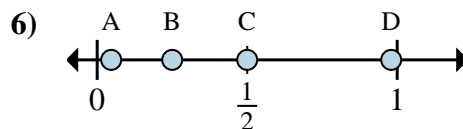
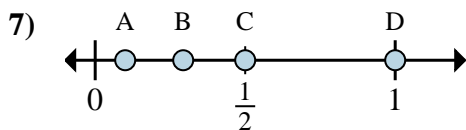
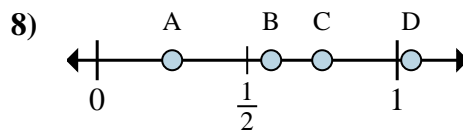


**Determine which letter best shows the location of the fraction.****Answers**a. Which letter best shows $\frac{0}{3}$?b. Which letter best shows $\frac{2}{3}$?a. Which letter best shows $\frac{0}{6}$?b. Which letter best shows $\frac{5}{6}$?a. Which letter best shows $\frac{3}{4}$?b. Which letter best shows $\frac{1}{4}$?a. Which letter best shows $\frac{2}{8}$?b. Which letter best shows $\frac{3}{8}$?a. Which letter best shows $\frac{2}{4}$?b. Which letter best shows $\frac{4}{4}$?a. Which letter best shows $\frac{1}{4}$?b. Which letter best shows $\frac{2}{4}$?a. Which letter best shows $\frac{1}{2}$?b. Which letter best shows $\frac{2}{2}$?a. Which letter best shows $\frac{1}{4}$?b. Which letter best shows $\frac{3}{4}$?

1. _____

2. _____

3. _____

4. _____

5. _____

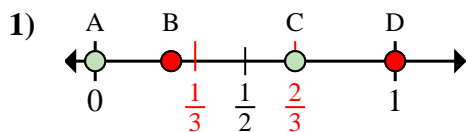
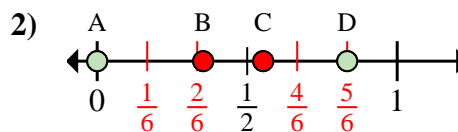
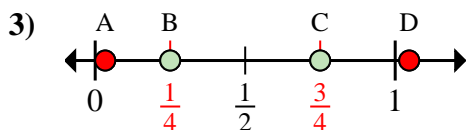
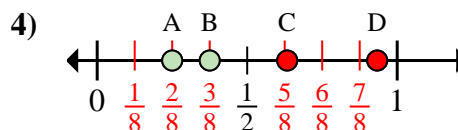
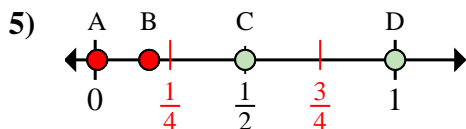
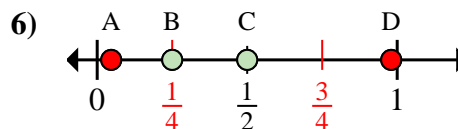
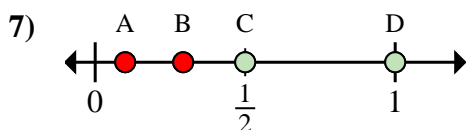
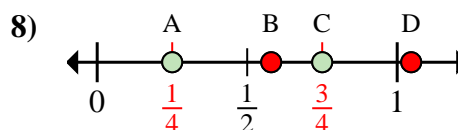
6. _____

7. _____

8. _____



Determine which letter best shows the location of the fraction.

Answersa. Which letter best shows $\frac{0}{3}$?b. Which letter best shows $\frac{2}{3}$?a. Which letter best shows $\frac{0}{6}$?b. Which letter best shows $\frac{5}{6}$?a. Which letter best shows $\frac{3}{4}$?b. Which letter best shows $\frac{1}{4}$?a. Which letter best shows $\frac{2}{8}$?b. Which letter best shows $\frac{3}{8}$?a. Which letter best shows $\frac{2}{4}$?b. Which letter best shows $\frac{4}{4}$?a. Which letter best shows $\frac{1}{4}$?b. Which letter best shows $\frac{2}{4}$?a. Which letter best shows $\frac{1}{2}$?b. Which letter best shows $\frac{2}{2}$?a. Which letter best shows $\frac{1}{4}$?b. Which letter best shows $\frac{3}{4}$?1. **A** **C**2. **A** **D**3. **C** **B**4. **A** **B**5. **C** **D**6. **B** **C**7. **C** **D**8. **A** **C**