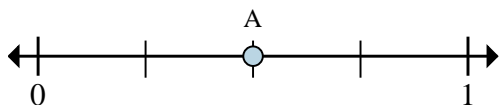




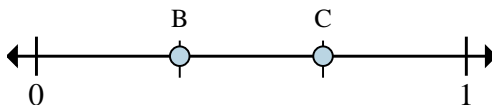
Solve each problem.

Ex)



- This numberline is divided into how many pieces?
- What is the location of A (written as a fraction)?

1)



- On this numberline what is the value of 1 written as a fraction?
- On this numberline from B to C is how far (written as a fraction)?

**Answers**

Ex. 4     2/4

1. \_\_\_\_\_

2. \_\_\_\_\_

3. \_\_\_\_\_

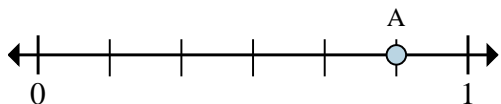
4. \_\_\_\_\_

5. \_\_\_\_\_

6. \_\_\_\_\_

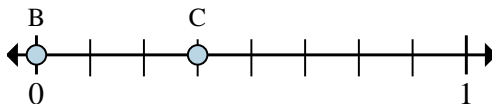
7. \_\_\_\_\_

2)



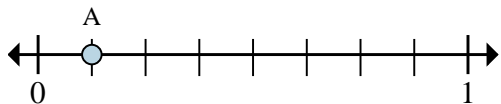
- This numberline is divided into how many pieces?
- What is the location of A (written as a fraction)?

3)



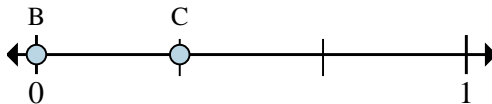
- On this numberline what is the value of 0 written as a fraction?
- On this numberline from B to C is how far (written as a fraction)?

4)



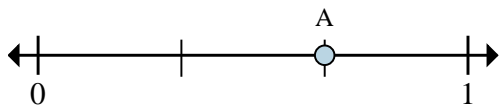
- This numberline is divided into how many pieces?
- What is the location of A (written as a fraction)?

5)



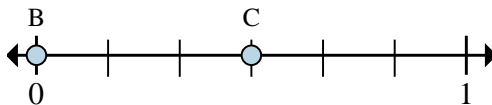
- On this numberline what is the value of 1 written as a fraction?
- On this numberline from B to C is how far (written as a fraction)?

6)



- This numberline is divided into how many pieces?
- What is the location of A (written as a fraction)?

7)

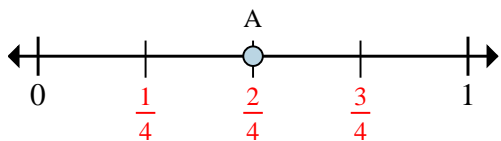


- On this numberline what is the value of 0 written as a fraction?
- On this numberline from B to C is how far (written as a fraction)?



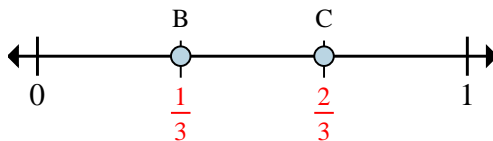
Solve each problem.

Ex)



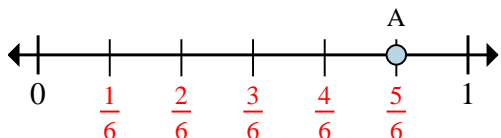
- This numberline is divided into how many pieces?
- What is the location of A (written as a fraction)?

1)



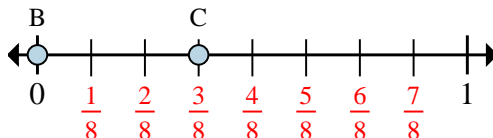
- On this numberline what is the value of 1 written as a fraction?
- On this numberline from B to C is how far (written as a fraction)?

2)



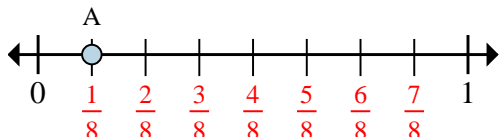
- This numberline is divided into how many pieces?
- What is the location of A (written as a fraction)?

3)



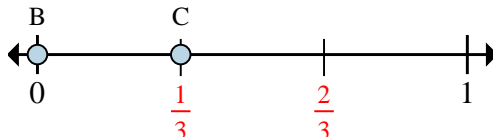
- On this numberline what is the value of 0 written as a fraction?
- On this numberline from B to C is how far (written as a fraction)?

4)



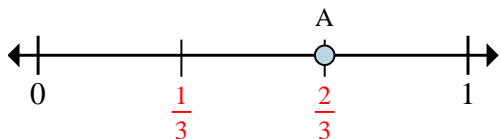
- This numberline is divided into how many pieces?
- What is the location of A (written as a fraction)?

5)



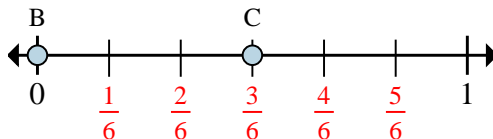
- On this numberline what is the value of 1 written as a fraction?
- On this numberline from B to C is how far (written as a fraction)?

6)



- This numberline is divided into how many pieces?
- What is the location of A (written as a fraction)?

7)



- On this numberline what is the value of 0 written as a fraction?
- On this numberline from B to C is how far (written as a fraction)?

**Answers**

Ex.	<u>4</u>	<u>2/4</u>
1.	<u>3/3</u>	<u>1/3</u>
2.	<u>6</u>	<u>5/6</u>
3.	<u>0/8</u>	<u>3/8</u>
4.	<u>8</u>	<u>1/8</u>
5.	<u>3/3</u>	<u>1/3</u>
6.	<u>3</u>	<u>2/3</u>
7.	<u>0/6</u>	<u>3/6</u>