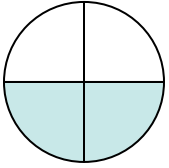




Determine which letter best describes the shaded portion.


Answers

1)



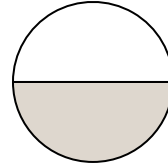
- A. one-fourth
- B. three-fourths
- C. two-quarters

2)



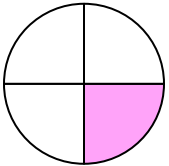
- A. two-quarters
- B. three-quarters
- C. one-half

3)



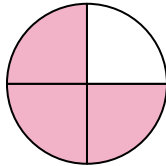
- A. four-fourths
- B. two-quarters
- C. one-half

4)



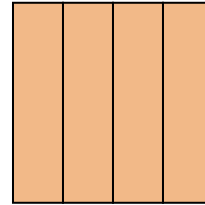
- A. one-quarter
- B. two-halves
- C. two-fourths

5)




- A. one-half
- B. two-quarters
- C. three-fourths

6)



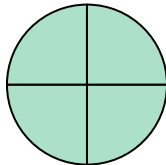
- A. four-fourths
- B. three-quarters
- C. two-halves

7)



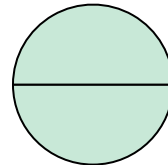
- A. one-quarter
- B. one-half
- C. two-halves

8)



- A. one-quarter
- B. two-fourths
- C. four-fourths

9)

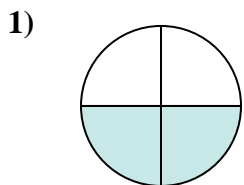


- A. two-halves
- B. two-quarters
- C. one-fourth

- 1. _____
- 2. _____
- 3. _____
- 4. _____
- 5. _____
- 6. _____
- 7. _____
- 8. _____
- 9. _____



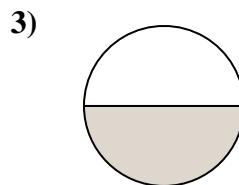
Determine which letter best describes the shaded portion.



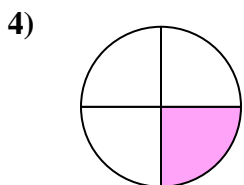
- A. one-fourth
- B. three-fourths
- C. two-quarters



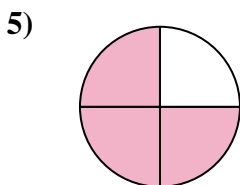
- A. two-quarters
- B. three-quarters
- C. one-half



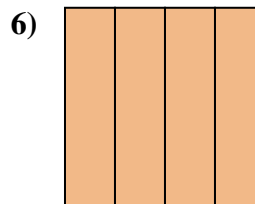
- A. four-fourths
- B. two-quarters
- C. one-half



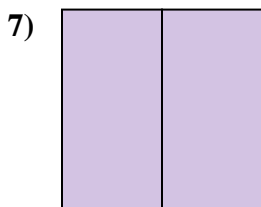
- A. one-quarter
- B. two-halves
- C. two-fourths



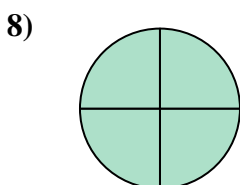
- A. one-half
- B. two-quarters
- C. three-fourths



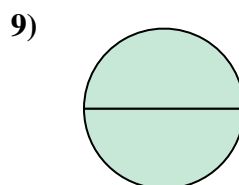
- A. four-fourths
- B. three-quarters
- C. two-halves



- A. one-quarter
- B. one-half
- C. two-halves



- A. one-quarter
- B. two-fourths
- C. four-fourths



- A. two-halves
- B. two-quarters
- C. one-fourth

Answers

- 1. **C**
- 2. **C**
- 3. **C**
- 4. **A**
- 5. **C**
- 6. **A**
- 7. **C**
- 8. **C**
- 9. **A**