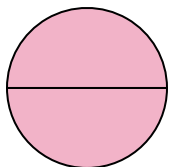



**Determine which letter best describes the shaded portion.****Answers**

1)



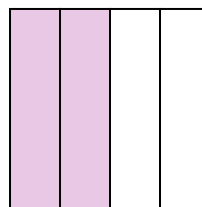
- A. two-halves  
B. one-quarter  
C. two-quarters

2)



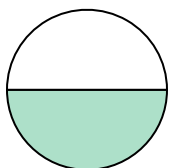
- A. one-half  
B. three-fourths  
C. two-halves

3)



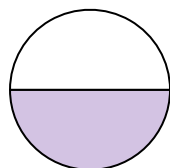
- A. two-fourths  
B. one-fourth  
C. three-fourths

4)



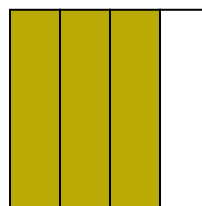
- A. two-fourths  
B. four-fourths  
C. one-half

5)



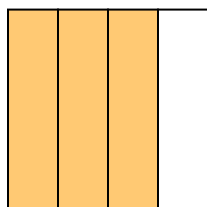
- A. four-fourths  
B. one-half  
C. two-quarters

6)



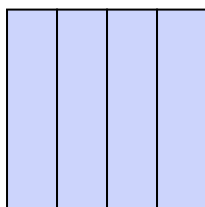
- A. one-fourth  
B. two-fourths  
C. three-fourths

7)



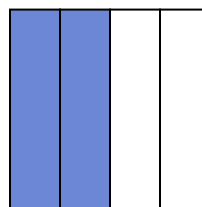
- A. two-fourths  
B. four-quarters  
C. three-quarters

8)



- A. two-quarters  
B. one-half  
C. four-quarters

9)



- A. two-halves  
B. two-fourths  
C. one-fourth

1. \_\_\_\_\_

2. \_\_\_\_\_

3. \_\_\_\_\_

4. \_\_\_\_\_

5. \_\_\_\_\_

6. \_\_\_\_\_

7. \_\_\_\_\_

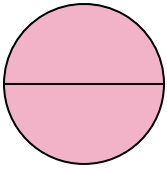
8. \_\_\_\_\_

9. \_\_\_\_\_




Determine which letter best describes the shaded portion.

1)



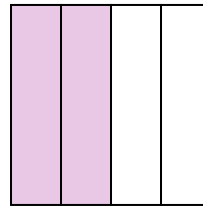
- A. two-halves  
B. one-quarter  
C. two-quarters

2)



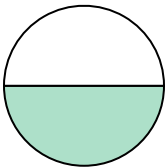
- A. one-half  
B. three-fourths  
C. two-halves

3)



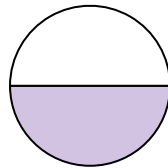
- A. two-fourths  
B. one-fourth  
C. three-fourths

4)



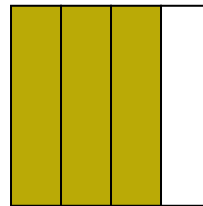
- A. two-fourths  
B. four-fourths  
C. one-half

5)



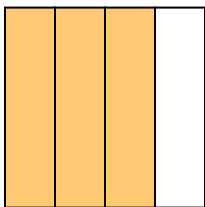
- A. four-fourths  
B. one-half  
C. two-quarters

6)



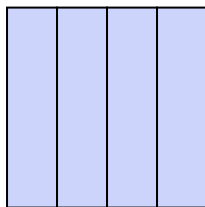
- A. one-fourth  
B. two-fourths  
C. three-fourths

7)



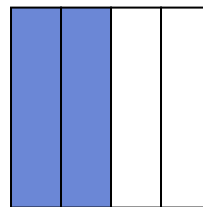
- A. two-fourths  
B. four-quarters  
C. three-quarters

8)



- A. two-quarters  
B. one-half  
C. four-quarters

9)



- A. two-halves  
B. two-fourths  
C. one-fourth

**Answers**

1. **A**  
2. **C**  
3. **A**  
4. **C**  
5. **B**  
6. **C**  
7. **C**  
8. **C**  
9. **B**