


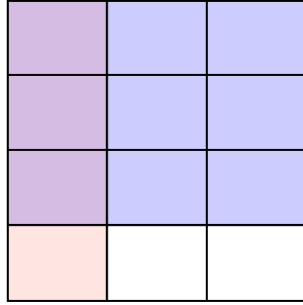


Use the box provided to show a visual example of how to multiply two fractions.

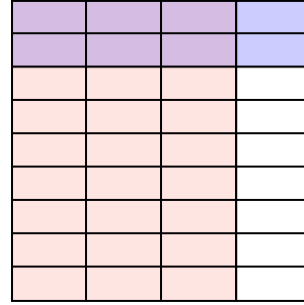
Ex) $\frac{8}{9} \times \frac{5}{8} =$




1) $\frac{1}{3} \times \frac{3}{4} =$



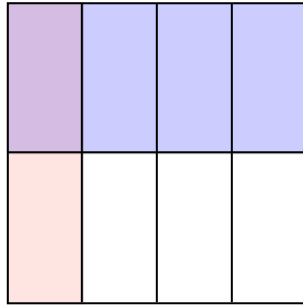
2) $\frac{3}{4} \times \frac{2}{9} =$



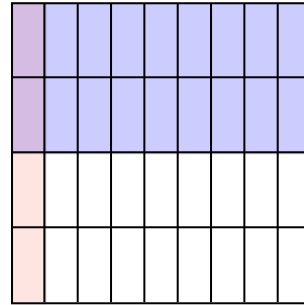
3) $\frac{1}{2} \times \frac{1}{2} =$



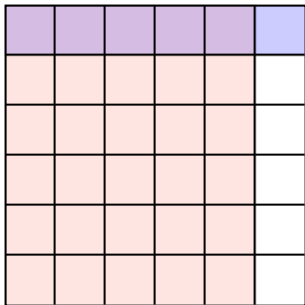
4) $\frac{1}{4} \times \frac{1}{2} =$



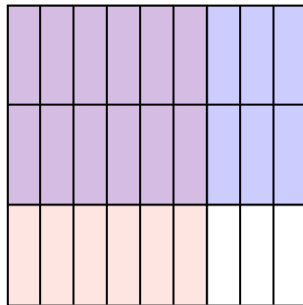
5) $\frac{1}{9} \times \frac{2}{4} =$



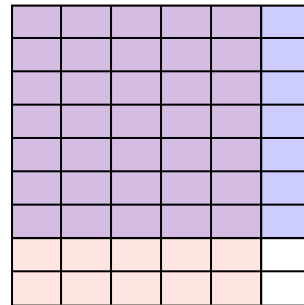
6) $\frac{5}{6} \times \frac{1}{6} =$




7) $\frac{6}{9} \times \frac{2}{3} =$



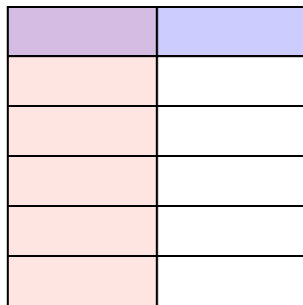
8) $\frac{5}{6} \times \frac{7}{9} =$



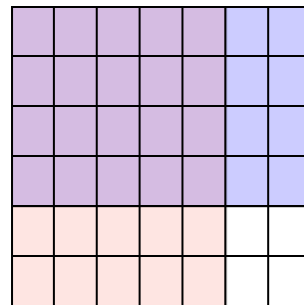
9) $\frac{2}{4} \times \frac{2}{6} =$



10) $\frac{1}{2} \times \frac{1}{6} =$



11) $\frac{5}{7} \times \frac{4}{6} =$



Answers

Ex. $\frac{40}{72}$

1. $\frac{3}{12}$

2. $\frac{6}{36}$

3. $\frac{1}{4}$

4. $\frac{1}{8}$

5. $\frac{2}{36}$

6. $\frac{5}{36}$

7. $\frac{12}{27}$

8. $\frac{35}{54}$

9. $\frac{4}{24}$

10. $\frac{1}{12}$

11. $\frac{20}{42}$