



















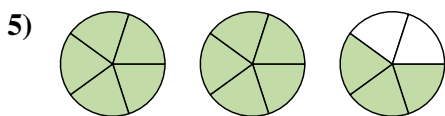
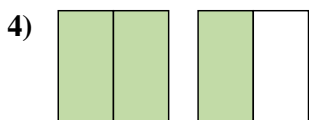
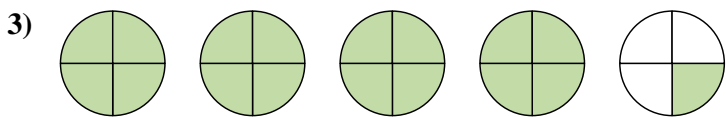
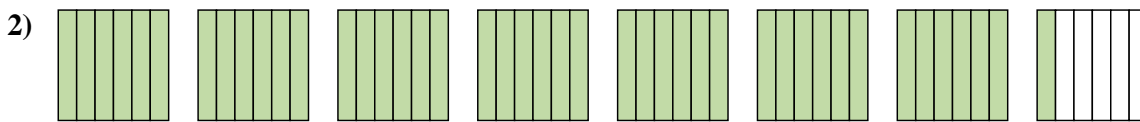
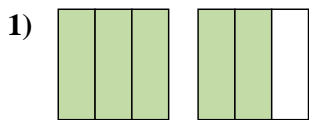




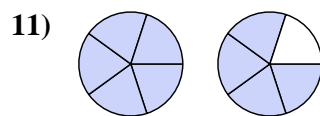
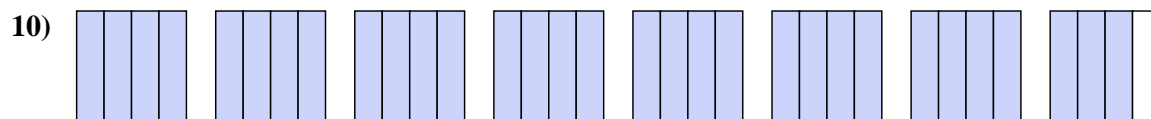
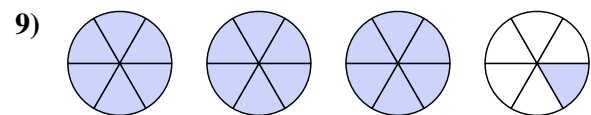
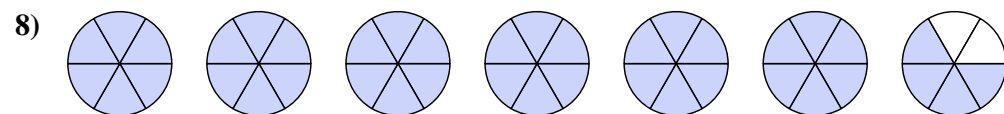
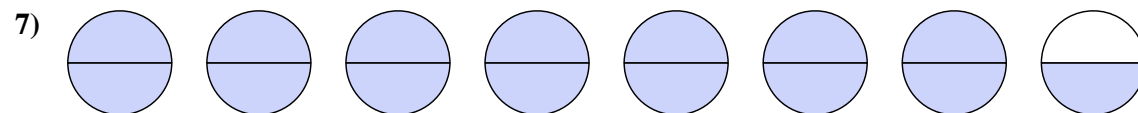
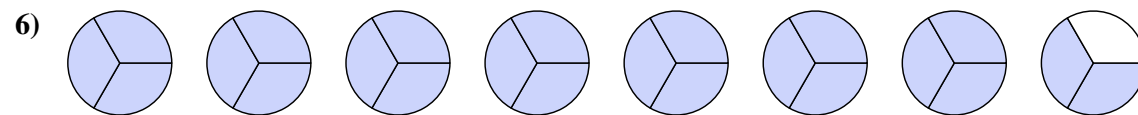




Write each amount as a mixed number.



Write each amount as an improper fraction.



Answers

1. 1<sup>2</sup>/<sub>3</sub>

2. 7<sup>1</sup>/<sub>6</sub>

3. 4<sup>1</sup>/<sub>4</sub>

4. 1<sup>1</sup>/<sub>2</sub>

5. 2<sup>3</sup>/<sub>5</sub>

6. 23/<sub>3</sub>

7. 15/<sub>2</sub>

8. 40/<sub>6</sub>

9. 19/<sub>6</sub>

10. 31/<sub>4</sub>

11. 9/<sub>5</sub>

















