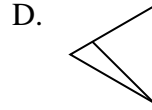
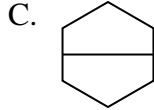
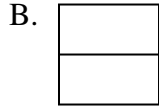




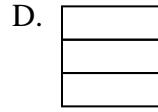
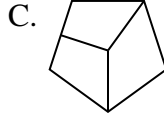
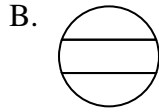
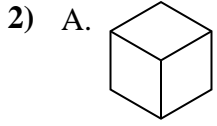
Determine which choice(s) show the shape partitioned so each piece has equal area. If none, write 'none'.

Answers



1. \_\_\_\_\_

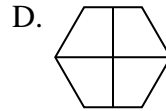
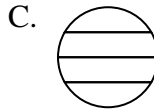
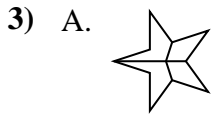
2. \_\_\_\_\_



3. \_\_\_\_\_

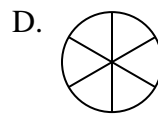
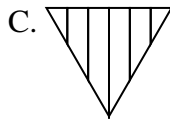
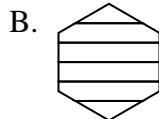
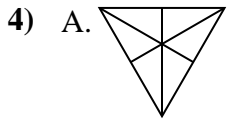
4. \_\_\_\_\_

5. \_\_\_\_\_

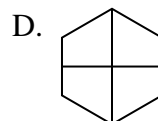
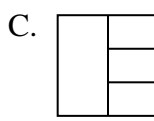
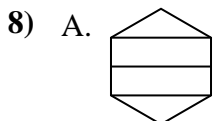
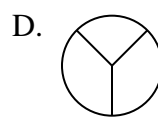
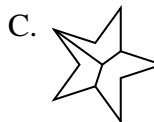
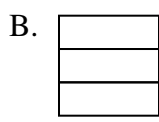
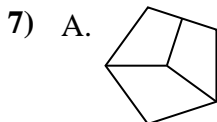
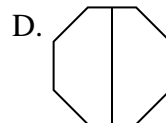
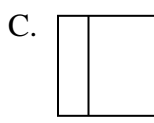
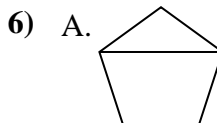
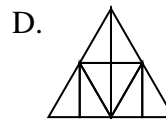
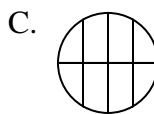
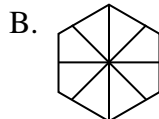
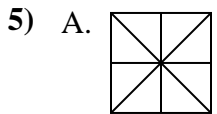


6. \_\_\_\_\_

7. \_\_\_\_\_

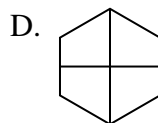
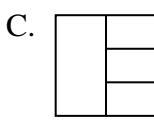
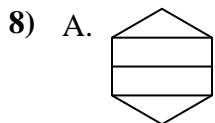
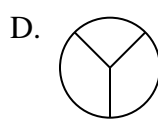

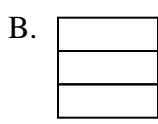
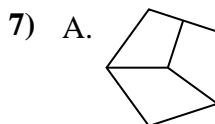
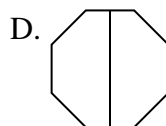
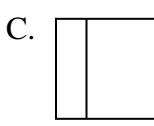
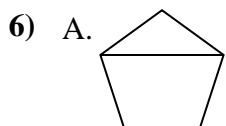
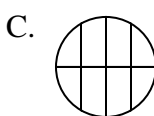
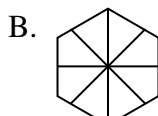
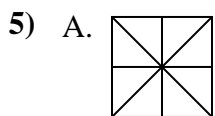
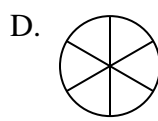
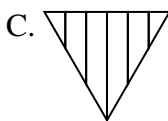
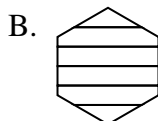
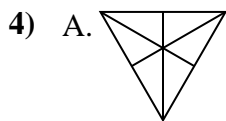
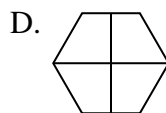
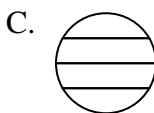
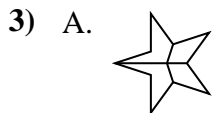
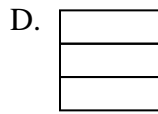
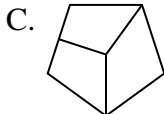
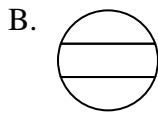
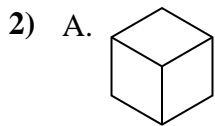
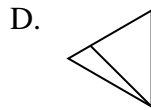
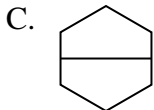
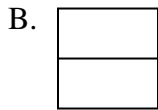


8. \_\_\_\_\_





Determine which choice(s) show the shape partitioned so each piece has equal area. If none, write 'none'.



Answers

1. **B,C**

2. **A,D**

3. **B,D**

4. **A,D**

5. **A,D**

6. **B,D**

7. **B**

8. **D**