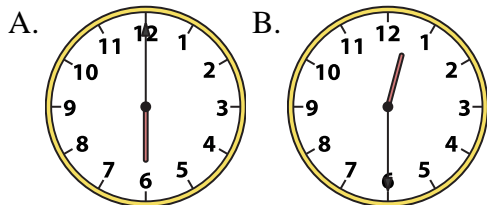




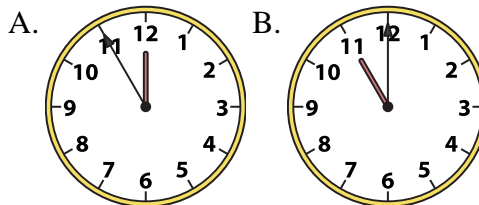
Determine which clock accurately shows the time.

Answers

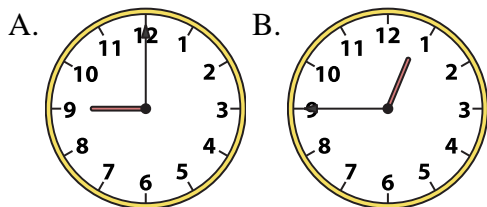
1) 6:00



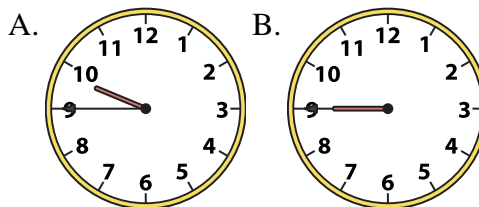
2) 11:00



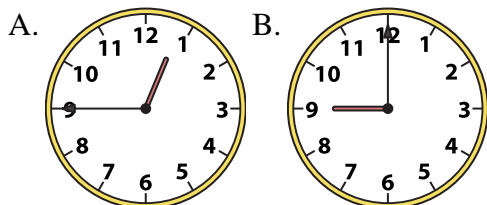
3) 12:45



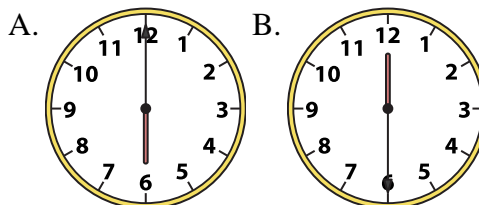
4) 9:45



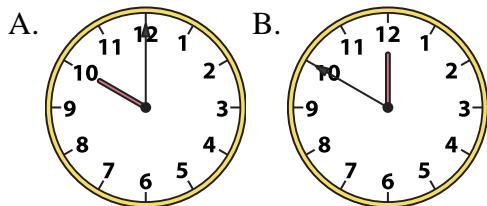
5) 12:45



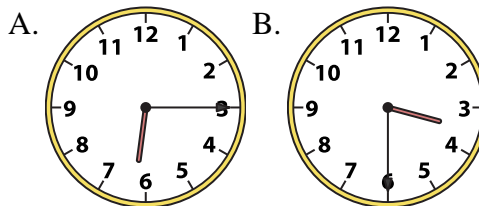
6) 6:00



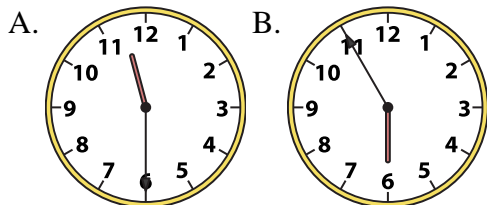
7) 10:00



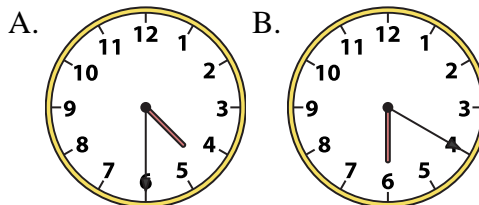
8) 3:30



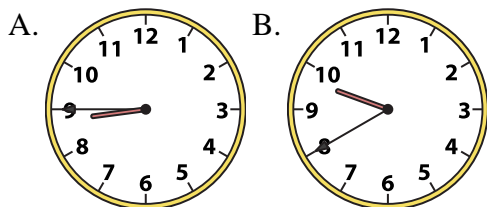
9) 11:30



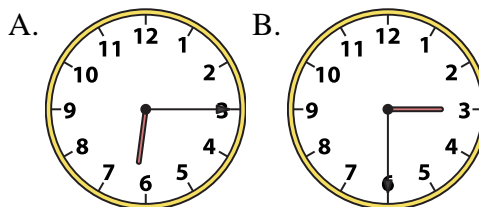
10) 4:30



11) 8:45



12) 6:15



1. _____
2. _____
3. _____
4. _____
5. _____
6. _____
7. _____
8. _____
9. _____
10. _____
11. _____
12. _____

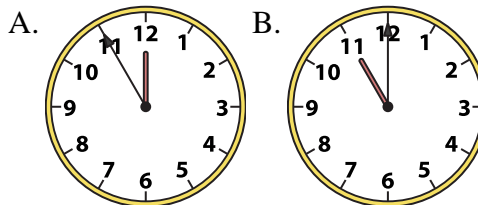
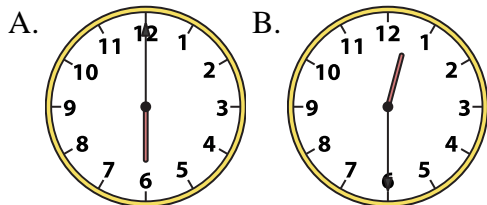


Determine which clock accurately shows the time.

Answers

1) 6:00

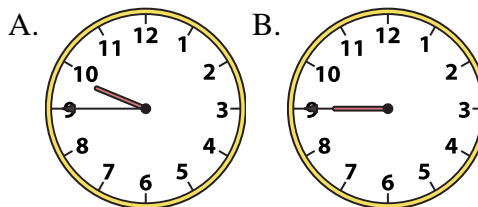
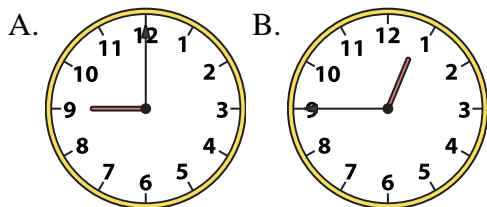
2) 11:00



1. **A**

3) 12:45

4) 9:45



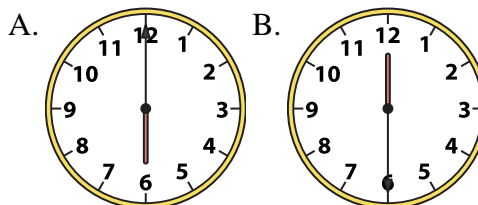
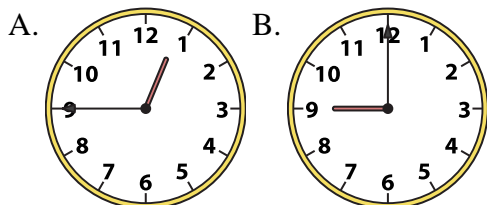
2. **B**

3. **B**

4. **A**

5) 12:45

6) 6:00



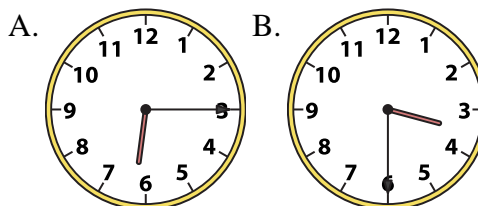
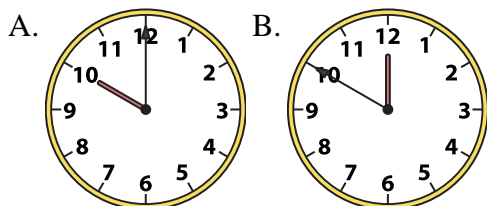
5. **A**

6. **A**

7. **A**

7) 10:00

8) 3:30



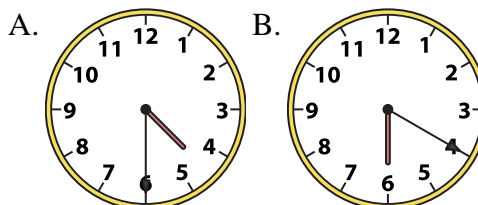
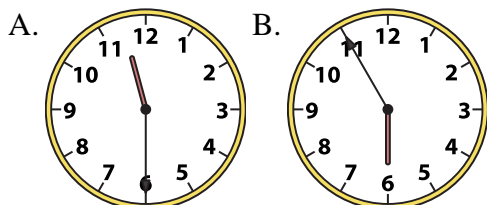
8. **B**

9. **A**

10. **A**

9) 11:30

10) 4:30



11. **A**

12. **A**

11) 8:45

12) 6:15

