



Convert the fraction to a decimal.

Answers

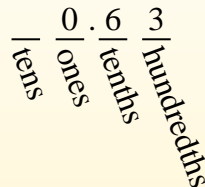
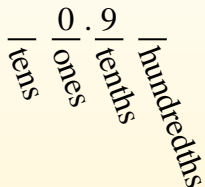

$$\frac{9}{10}$$

$$\frac{63}{100}$$

Converting from a fraction to a decimal is simple as long as you remember the place values.

The example above is nine-tenths. Lets look at how we'd write that as a decimal.

We do the same thing for the problem above only make sure we're in the hundredths place.



- Ex. 0.8
1. _____
2. _____
3. _____
4. _____
5. _____
6. _____
7. _____
8. _____
9. _____
10. _____
11. _____
12. _____
13. _____
14. _____
15. _____
16. _____
17. _____
18. _____
19. _____
20. _____

Ex) $\frac{8}{10} = 0.8$

1) $\frac{16}{100} =$

2) $\frac{6}{100} =$

3) $\frac{7}{100} =$

4) $\frac{3}{10} =$

5) $\frac{7}{10} =$

6) $\frac{2}{10} =$

7) $\frac{9}{100} =$

8) $\frac{3}{100} =$

9) $\frac{97}{100} =$

10) $\frac{4}{100} =$

11) $\frac{21}{100} =$

12) $\frac{5}{10} =$

13) $\frac{15}{100} =$

14) $\frac{42}{100} =$

15) $\frac{53}{100} =$

16) $\frac{2}{100} =$

17) $\frac{1}{10} =$

18) $\frac{8}{100} =$

19) $\frac{4}{10} =$

20) $\frac{46}{100} =$

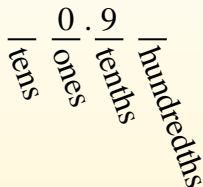


Convert the fraction to a decimal.

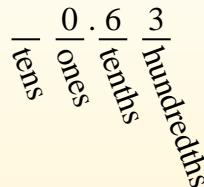
Converting from a fraction to a decimal is simple as long as you remember the place values.



$\frac{9}{10}$
The example above is nine-tenths. Lets look at how we'd write that as a decimal.



$\frac{63}{100}$
We do the same thing for the problem above only make sure we're in the hundredths place.



Answers

Ex) $\frac{8}{10} = 0.8$

1) $\frac{16}{100} = 0.16$

2) $\frac{6}{100} = 0.06$

3) $\frac{7}{100} = 0.07$

4) $\frac{3}{10} = 0.3$

5) $\frac{7}{10} = 0.7$

6) $\frac{2}{10} = 0.2$

7) $\frac{9}{100} = 0.09$

8) $\frac{3}{100} = 0.03$

9) $\frac{97}{100} = 0.97$

10) $\frac{4}{100} = 0.04$

11) $\frac{21}{100} = 0.21$

12) $\frac{5}{10} = 0.5$

13) $\frac{15}{100} = 0.15$

14) $\frac{42}{100} = 0.42$

15) $\frac{53}{100} = 0.53$

16) $\frac{2}{100} = 0.02$

17) $\frac{1}{10} = 0.1$

18) $\frac{8}{100} = 0.08$

19) $\frac{4}{10} = 0.4$

20) $\frac{46}{100} = 0.46$

- Ex. 0.8
- 1. 0.16
- 2. 0.06
- 3. 0.07
- 4. 0.3
- 5. 0.7
- 6. 0.2
- 7. 0.09
- 8. 0.03
- 9. 0.97
- 10. 0.04
- 11. 0.21
- 12. 0.5
- 13. 0.15
- 14. 0.42
- 15. 0.53
- 16. 0.02
- 17. 0.1
- 18. 0.08
- 19. 0.4
- 20. 0.46