



Convert the fraction to a decimal.

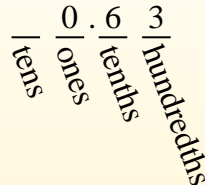
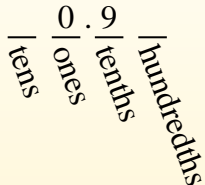

$$\frac{9}{10}$$

$$\frac{63}{100}$$

Converting from a fraction to a decimal is simple as long as you remember the place values.

The example above is nine-tenths. Lets look at how we'd write that as a decimal.

We do the same thing for the problem above only make sure we're in the hundredths place.



Answers

Ex. 0.63

1. _____

2. _____

3. _____

4. _____

5. _____

6. _____

7. _____

8. _____

9. _____

10. _____

11. _____

12. _____

13. _____

14. _____

15. _____

16. _____

17. _____

18. _____

19. _____

20. _____

Ex) $\frac{63}{100} = 0.63$

1) $\frac{9}{10} =$

2) $\frac{3}{100} =$

3) $\frac{3}{10} =$

4) $\frac{7}{10} =$

5) $\frac{2}{10} =$

6) $\frac{5}{10} =$

7) $\frac{4}{100} =$

8) $\frac{4}{10} =$

9) $\frac{5}{100} =$

10) $\frac{8}{100} =$

11) $\frac{8}{10} =$

12) $\frac{2}{100} =$

13) $\frac{42}{100} =$

14) $\frac{19}{100} =$

15) $\frac{58}{100} =$

16) $\frac{6}{100} =$

17) $\frac{83}{100} =$

18) $\frac{26}{100} =$

19) $\frac{74}{100} =$

20) $\frac{1}{100} =$



Convert the fraction to a decimal.

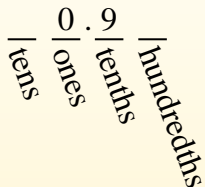
$$\frac{9}{10}$$

$$\frac{63}{100}$$

Converting from a fraction to a decimal is simple as long as you remember the place values.

The example above is nine-tenths. Lets look at how we'd write that as a decimal.

We do the same thing for the problem above only make sure we're in the hundredths place.



Answers

- Ex. 0.63
- 1. 0.9
- 2. 0.03
- 3. 0.3
- 4. 0.7
- 5. 0.2
- 6. 0.5
- 7. 0.04
- 8. 0.4
- 9. 0.05
- 10. 0.08
- 11. 0.8
- 12. 0.02
- 13. 0.42
- 14. 0.19
- 15. 0.58
- 16. 0.06
- 17. 0.83
- 18. 0.26
- 19. 0.74
- 20. 0.01

Ex) $\frac{63}{100} = 0.63$

1) $\frac{9}{10} = 0.9$

2) $\frac{3}{100} = 0.03$

3) $\frac{3}{10} = 0.3$

4) $\frac{7}{10} = 0.7$

5) $\frac{2}{10} = 0.2$

6) $\frac{5}{10} = 0.5$

7) $\frac{4}{100} = 0.04$

8) $\frac{4}{10} = 0.4$

9) $\frac{5}{100} = 0.05$

10) $\frac{8}{100} = 0.08$

11) $\frac{8}{10} = 0.8$

12) $\frac{2}{100} = 0.02$

13) $\frac{42}{100} = 0.42$

14) $\frac{19}{100} = 0.19$

15) $\frac{58}{100} = 0.58$

16) $\frac{6}{100} = 0.06$

17) $\frac{83}{100} = 0.83$

18) $\frac{26}{100} = 0.26$

19) $\frac{74}{100} = 0.74$

20) $\frac{1}{100} = 0.01$