



Convert the fraction to a decimal.

**Answers**

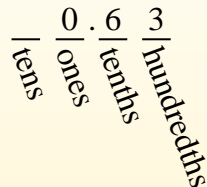
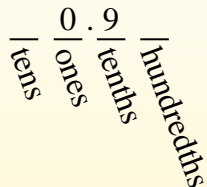

$$\frac{9}{10}$$

$$\frac{63}{100}$$

Converting from a fraction to a decimal is simple as long as you remember the place values.

The example above is nine-tenths. Lets look at how we'd write that as a decimal.

We do the same thing for the problem above only make sure we're in the hundredths place.



- Ex. **0.04**
1. \_\_\_\_\_
2. \_\_\_\_\_
3. \_\_\_\_\_
4. \_\_\_\_\_
5. \_\_\_\_\_
6. \_\_\_\_\_
7. \_\_\_\_\_
8. \_\_\_\_\_
9. \_\_\_\_\_
10. \_\_\_\_\_
11. \_\_\_\_\_
12. \_\_\_\_\_
13. \_\_\_\_\_
14. \_\_\_\_\_
15. \_\_\_\_\_
16. \_\_\_\_\_
17. \_\_\_\_\_
18. \_\_\_\_\_
19. \_\_\_\_\_
20. \_\_\_\_\_

Ex)  $\frac{4}{100} = 0.04$

1)  $\frac{9}{10} =$

2)  $\frac{3}{10} =$

3)  $\frac{1}{100} =$

4)  $\frac{2}{100} =$

5)  $\frac{44}{100} =$

6)  $\frac{87}{100} =$

7)  $\frac{80}{100} =$

8)  $\frac{38}{100} =$

9)  $\frac{6}{100} =$

10)  $\frac{55}{100} =$

11)  $\frac{7}{10} =$

12)  $\frac{7}{100} =$

13)  $\frac{2}{10} =$

14)  $\frac{1}{10} =$

15)  $\frac{5}{100} =$

16)  $\frac{4}{10} =$

17)  $\frac{3}{100} =$

18)  $\frac{97}{100} =$


19)  $\frac{70}{100} =$

20)  $\frac{5}{10} =$



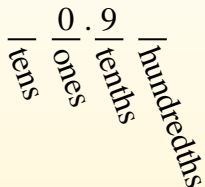
**Convert the fraction to a decimal.**

Converting from a fraction to a decimal is simple as long as you remember the place values.



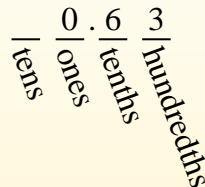
$$\frac{9}{10}$$

The example above is nine-tenths. Lets look at how we'd write that as a decimal.



$$\frac{63}{100}$$

We do the same thing for the problem above only make sure we're in the hundredths place.



**Answers**

- Ex. 0.04
- 1. 0.9
- 2. 0.3
- 3. 0.01
- 4. 0.02
- 5. 0.44
- 6. 0.87
- 7. 0.80
- 8. 0.38
- 9. 0.06
- 10. 0.55
- 11. 0.7
- 12. 0.07
- 13. 0.2
- 14. 0.1
- 15. 0.05
- 16. 0.4
- 17. 0.03
- 18. 0.97
- 19. 0.70
- 20. 0.5

Ex)  $\frac{4}{100} = 0.04$

1)  $\frac{9}{10} = 0.9$

2)  $\frac{3}{10} = 0.3$

3)  $\frac{1}{100} = 0.01$

4)  $\frac{2}{100} = 0.02$

5)  $\frac{44}{100} = 0.44$

6)  $\frac{87}{100} = 0.87$

7)  $\frac{80}{100} = 0.80$

8)  $\frac{38}{100} = 0.38$

9)  $\frac{6}{100} = 0.06$

10)  $\frac{55}{100} = 0.55$

11)  $\frac{7}{10} = 0.7$

12)  $\frac{7}{100} = 0.07$

13)  $\frac{2}{10} = 0.2$

14)  $\frac{1}{10} = 0.1$

15)  $\frac{5}{100} = 0.05$

16)  $\frac{4}{10} = 0.4$

17)  $\frac{3}{100} = 0.03$

18)  $\frac{97}{100} = 0.97$

19)  $\frac{70}{100} = 0.70$

20)  $\frac{5}{10} = 0.5$