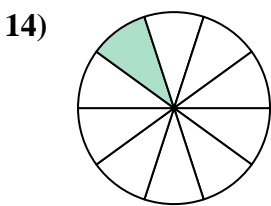
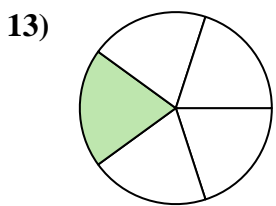
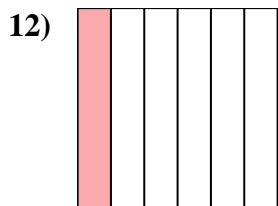
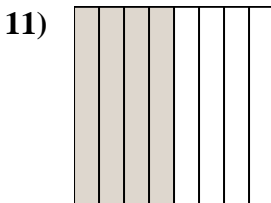
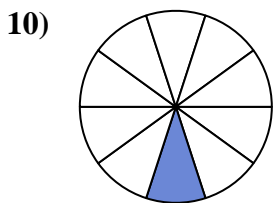
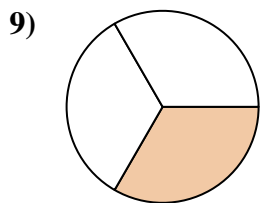
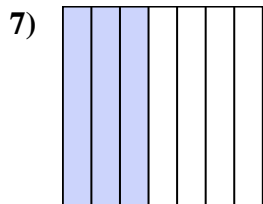
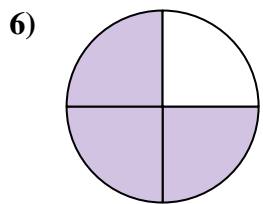
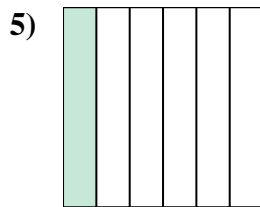
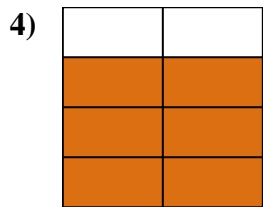
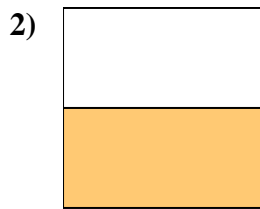
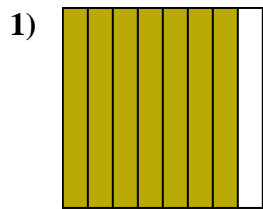
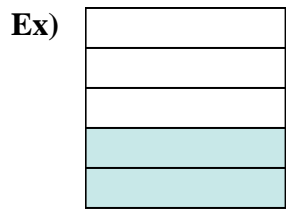




Write the shaded amount in word form.



Answers

Ex. two-fifths

1. \_\_\_\_\_

2. \_\_\_\_\_

3. \_\_\_\_\_

4. \_\_\_\_\_

5. \_\_\_\_\_

6. \_\_\_\_\_

7. \_\_\_\_\_

8. \_\_\_\_\_

9. \_\_\_\_\_

10. \_\_\_\_\_

11. \_\_\_\_\_

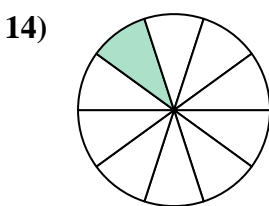
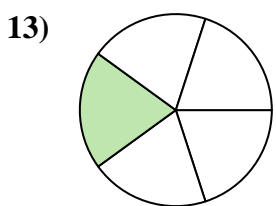
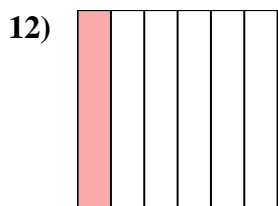
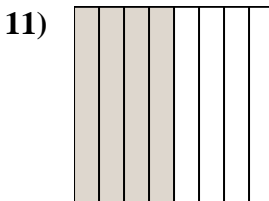
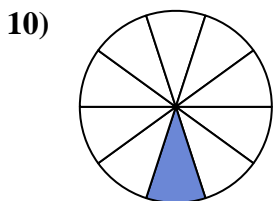
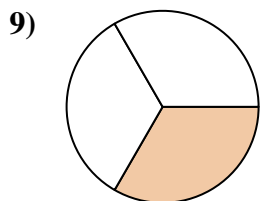
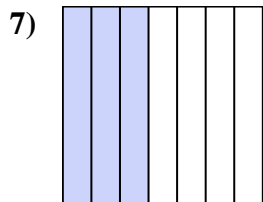
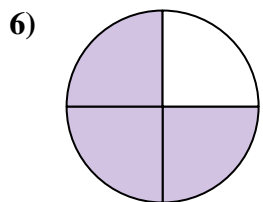
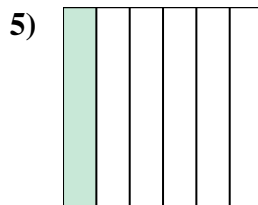
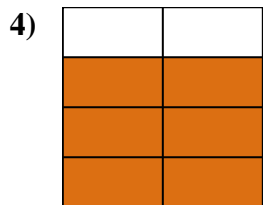
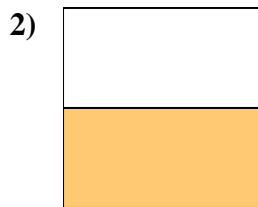
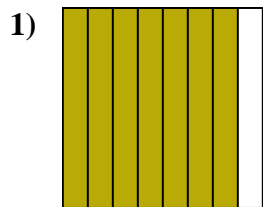

12. \_\_\_\_\_

13. \_\_\_\_\_

14. \_\_\_\_\_



Write the shaded amount in word form.



Answers

Ex. two-fifths

1. seven-eighths

2. one-half

3. three-ninths

4. six-sevenths

5. one-sixth

6. three-fourths

7. three-sevenths

8. four-ninths

9. one-third

10. one-tenth

11. four-eighths

12. one-sixth

13. one-fifth

14. one-tenth