





Write the shaded amount in word form.

Ex)



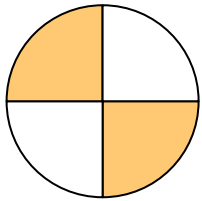
1)



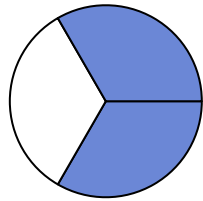
2)



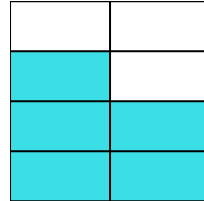
3)



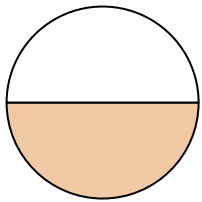
4)



5)



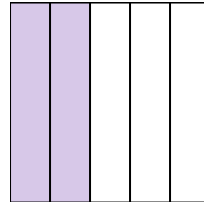
6)




7)




8)



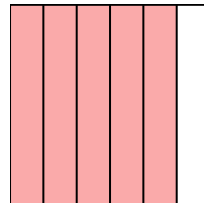
9)



10)



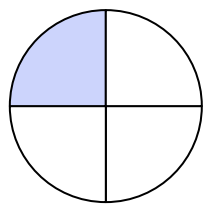
11)



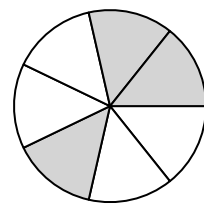
12)



13)



14)

**Answers**

Ex.

one-half

1.

2.

3.

4.

5.

6.

7.

8.

9.

10.

11.

12.


13.

14.




Write the shaded amount in word form.

Ex)



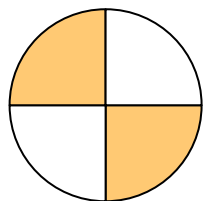
1)



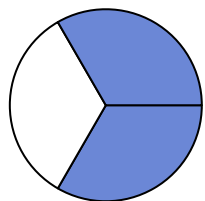
2)




3)



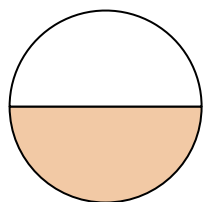
4)



5)



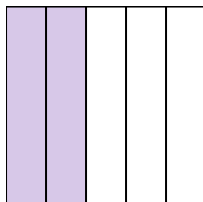
6)




7)




8)



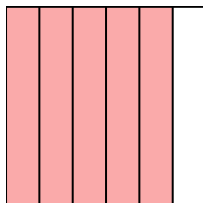
9)




10)



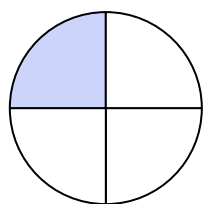
11)



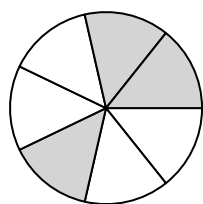
12)



13)



14)

**Answers**

Ex.

one-half

1.

two-fifths

2.

five-tenths

3.

two-fourths

4.

two-thirds

5.

five-sevenths

6.

one-half

7.

four-eighths

8.

two-fifths

9.

two-thirds

10.

one-ninth

11.

five-sixths

12.

three-sixths

13.

one-fourth

14.

three-sevenths