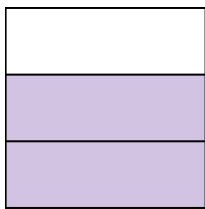





Write the shaded amount in word form.

Ex)




1)




2)



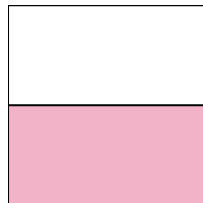
3)



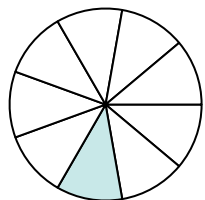
4)



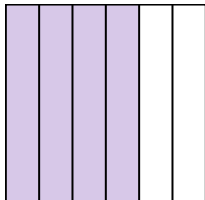
5)




6)




7)



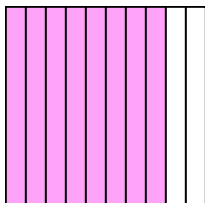
8)



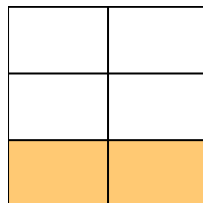
9)



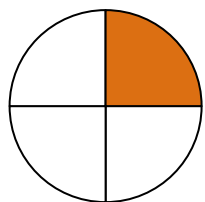
10)



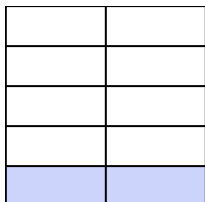
11)




12)



13)



14)

**Answers**Ex. **two-thirds**

1. \_\_\_\_\_

2. \_\_\_\_\_

3. \_\_\_\_\_

4. \_\_\_\_\_

5. \_\_\_\_\_

6. \_\_\_\_\_

7. \_\_\_\_\_

8. \_\_\_\_\_

9. \_\_\_\_\_

10. \_\_\_\_\_

11. \_\_\_\_\_

12. \_\_\_\_\_

13. \_\_\_\_\_

14. \_\_\_\_\_



Write the shaded amount in word form.


Ex)




1)




2)




3)



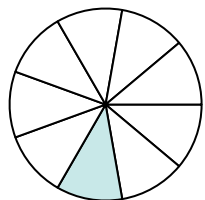
4)



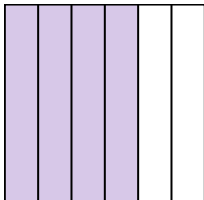
5)




6)




7)



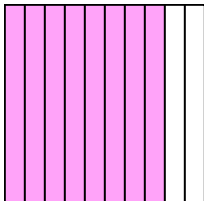
8)



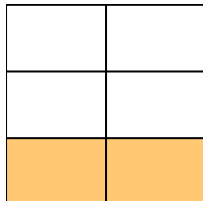
9)



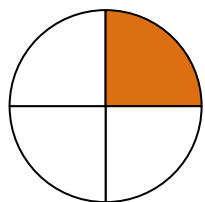
10)



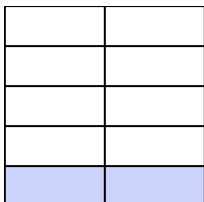
11)



12)



13)



14)

**Answers**Ex. two-thirds1. two-fourths2. three-sevenths3. one-third4. one-half5. one-half6. one-ninth7. four-sixths8. seven-eighths9. four-fifths10. eight-tenths11. two-fifths12. one-fourth13. two-ninths14. one-sixth