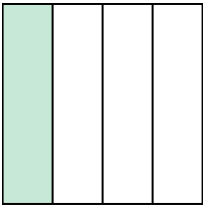



Write the shaded amount in word form.

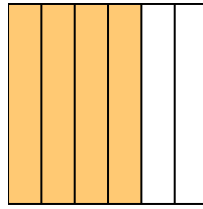
Ex)



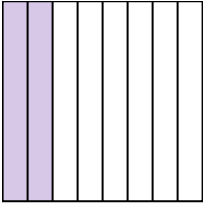
1)




2)



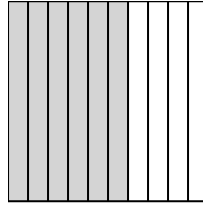
3)



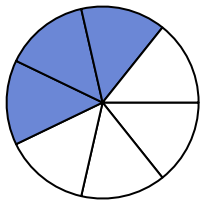
4)



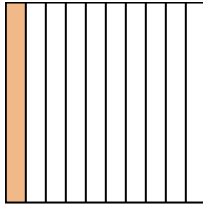
5)



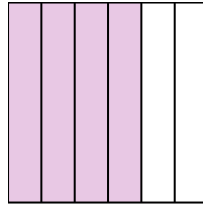
6)



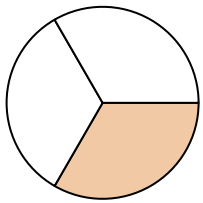
7)




8)



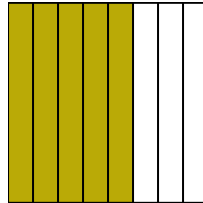
9)



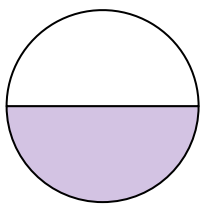
10)



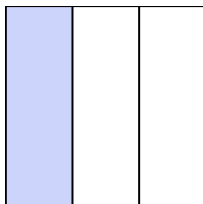
11)



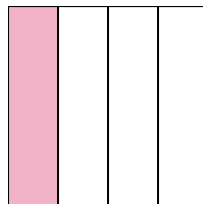
12)



13)



14)



Answers

Ex. **one-fourth**

1. _____

2. _____

3. _____

4. _____

5. _____

6. _____

7. _____

8. _____

9. _____

10. _____

11. _____

12. _____

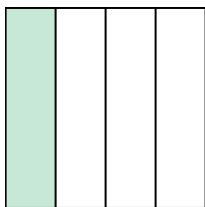
13. _____

14. _____




Write the shaded amount in word form.

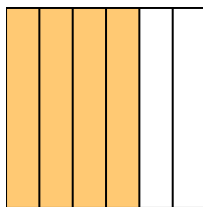
Ex)



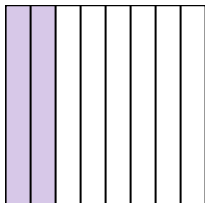
1)




2)



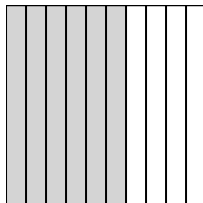
3)



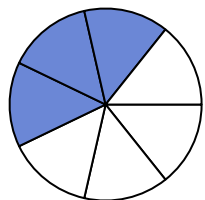
4)



5)



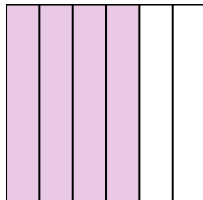
6)



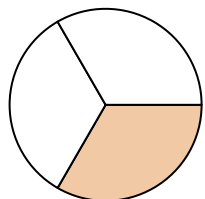
7)




8)



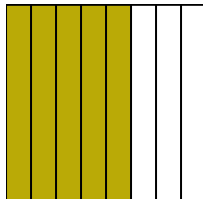
9)



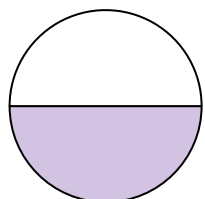
10)



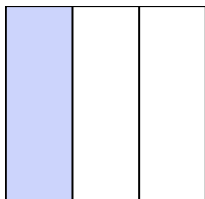
11)



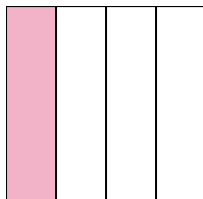
12)



13)



14)

**Answers**

Ex.

one-fourth

1.

two-fifths

2.

four-sixths

3.

two-eighths

4.

seven-ninths

5.

six-tenths

6.

three-sevenths

7.

one-tenth

8.

four-sixths

9.

one-third

10.

one-half

11.

five-eighths

12.

one-half

13.

one-third

14.

one-fourth