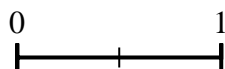
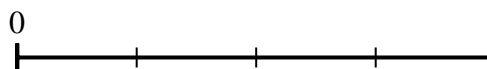






Use the number lines to answer the questions.

Answers

- 1) Using the number lines shown, what is the equivalent fraction to $\frac{2}{2}$? 2) Using the number lines shown, what is the equivalent fraction to $\frac{4}{8}$?



1. _____

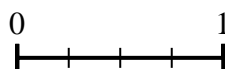
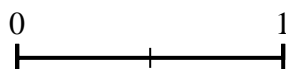
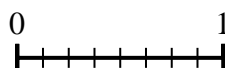

2. _____

3. _____

4. _____

5. _____

- 3) Using the number lines shown, what is the equivalent fraction to $\frac{8}{8}$? 4) Using the number lines shown, what is the equivalent fraction to $\frac{8}{8}$?

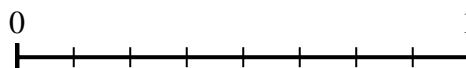
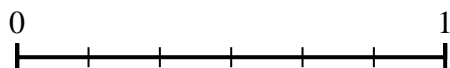
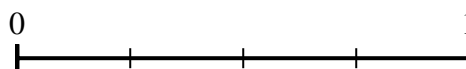
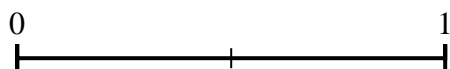


6. _____

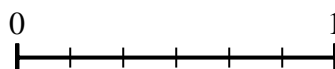
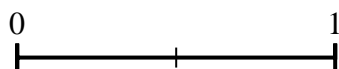

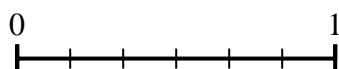
7. _____

8. _____

- 5) Using the number lines shown, what is the equivalent fraction to $\frac{0}{2}$? 6) Using the number lines shown, what is the equivalent fraction to $\frac{2}{4}$?



- 7) Using the number lines shown, what is the equivalent fraction to $\frac{3}{6}$? 8) Using the number lines shown, what is the equivalent fraction to $\frac{2}{3}$?

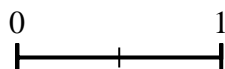
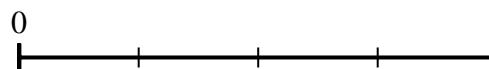






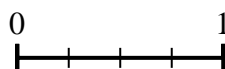
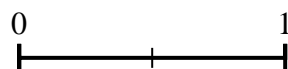
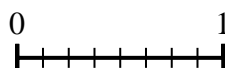

Use the number lines to answer the questions.

Answers

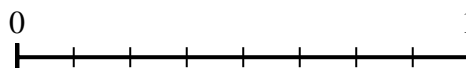
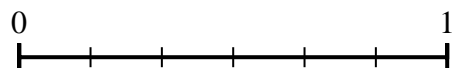
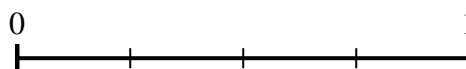
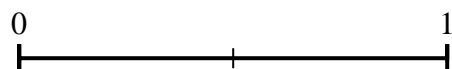
- 1) Using the number lines shown, what is the equivalent fraction to $\frac{2}{2}$? 2) Using the number lines shown, what is the equivalent fraction to $\frac{4}{8}$?



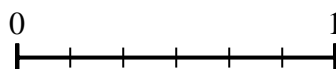
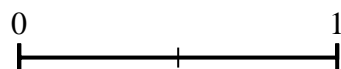
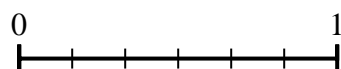
- 3) Using the number lines shown, what is the equivalent fraction to $\frac{8}{8}$? 4) Using the number lines shown, what is the equivalent fraction to $\frac{8}{8}$?



- 5) Using the number lines shown, what is the equivalent fraction to $\frac{0}{2}$? 6) Using the number lines shown, what is the equivalent fraction to $\frac{2}{4}$?



- 7) Using the number lines shown, what is the equivalent fraction to $\frac{3}{6}$? 8) Using the number lines shown, what is the equivalent fraction to $\frac{2}{3}$?



1. $\frac{4}{4}$
2. $\frac{1}{2}$
3. $\frac{2}{2}$
4. $\frac{4}{4}$
5. $\frac{0}{6}$
6. $\frac{4}{8}$
7. $\frac{1}{2}$
8. $\frac{4}{6}$