



Solve each problem by marking off the fractions. The first is completed for you.

**Answers**

Ex)  $3 \div \frac{1}{4} = ?$  This is the same as saying: How many  $\frac{1}{4}$  are there in 3 wholes?

Ex. **12**

1 Whole				1 Whole				1 Whole			

1. \_\_\_\_\_

1)  $5 \div \frac{1}{6} =$

2. \_\_\_\_\_

1 Whole		1 Whole		1 Whole		1 Whole		1 Whole	

3. \_\_\_\_\_

2)  $5 \div \frac{1}{2} =$

4. \_\_\_\_\_

1 Whole		1 Whole		1 Whole		1 Whole		1 Whole	

5. \_\_\_\_\_

3)  $5 \div \frac{1}{5} =$

6. \_\_\_\_\_

1 Whole		1 Whole		1 Whole		1 Whole		1 Whole	

7. \_\_\_\_\_

4)  $3 \div \frac{1}{2} =$

8. \_\_\_\_\_

1 Whole			1 Whole			1 Whole		

9. \_\_\_\_\_

5)  $2 \div \frac{1}{2} =$

1 Whole		1 Whole	

6)  $6 \div \frac{1}{7} =$

1 Whole	1 Whole	1 Whole	1 Whole	1 Whole	1 Whole

7)  $4 \div \frac{1}{4} =$

1 Whole		1 Whole		1 Whole		1 Whole	

8)  $6 \div \frac{1}{6} =$

1 Whole	1 Whole	1 Whole	1 Whole	1 Whole	1 Whole

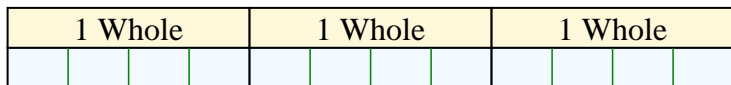
9)  $3 \div \frac{1}{3} =$

1 Whole		1 Whole		1 Whole	

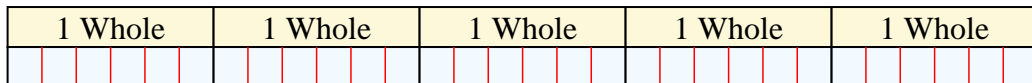


Solve each problem by marking off the fractions. The first is completed for you.

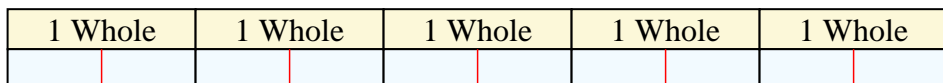
Ex)  $3 \div \frac{1}{4} = ?$  This is the same as saying: How many  $\frac{1}{4}$  are the in 3 wholes?



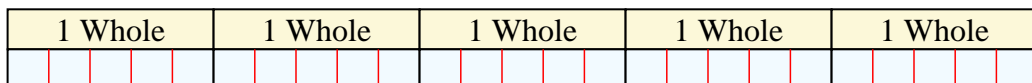
1)  $5 \div \frac{1}{6} =$  This is the same as saying: How many  $\frac{1}{6}$  are the in 5 wholes?



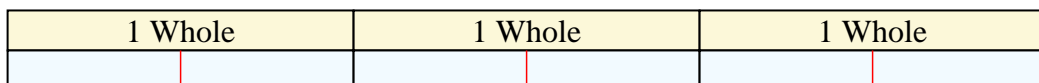
2)  $5 \div \frac{1}{2} =$  This is the same as saying: How many  $\frac{1}{2}$  are the in 5 wholes?




3)  $5 \div \frac{1}{5} =$  This is the same as saying: How many  $\frac{1}{5}$  are the in 5 wholes?



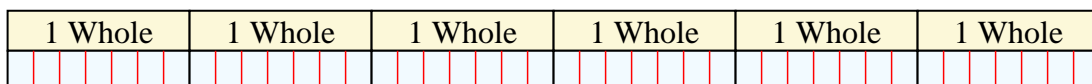
4)  $3 \div \frac{1}{2} =$  This is the same as saying: How many  $\frac{1}{2}$  are the in 3 wholes?



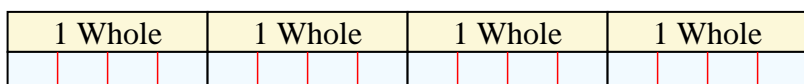
5)  $2 \div \frac{1}{2} =$  This is the same as saying: How many  $\frac{1}{2}$  are the in 2 wholes?



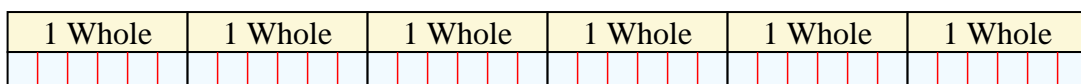
6)  $6 \div \frac{1}{7} =$  This is the same as saying: How many  $\frac{1}{7}$  are the in 6 wholes?



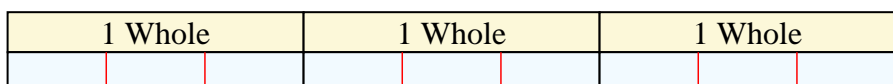
7)  $4 \div \frac{1}{4} =$  This is the same as saying: How many  $\frac{1}{4}$  are the in 4 wholes?



8)  $6 \div \frac{1}{6} =$  This is the same as saying: How many  $\frac{1}{6}$  are the in 6 wholes?



9)  $3 \div \frac{1}{3} =$  This is the same as saying: How many  $\frac{1}{3}$  are the in 3 wholes?



**Answers**

Ex. 12

1. 30

2. 10

3. 25

4. 6

5. 4

6. 42

7. 16

8. 36

9. 9