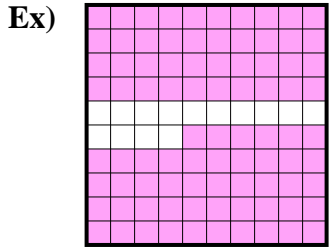


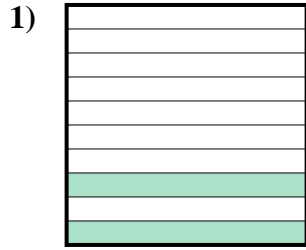


Determine the value written as a fraction , decimal & a percent.

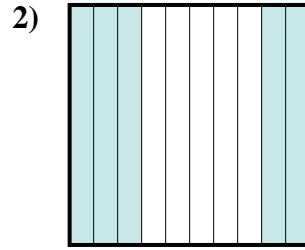
**Answers**



fraction  $\frac{86}{100}$   
 decimal 0.86  
 percent 86



fraction \_\_\_\_\_  
 decimal \_\_\_\_\_  
 percent \_\_\_\_\_



fraction \_\_\_\_\_  
 decimal \_\_\_\_\_  
 percent \_\_\_\_\_

Ex.  $\frac{86}{100}$  **0.86** **86%**

1. \_\_\_\_\_

2. \_\_\_\_\_

3. \_\_\_\_\_

4. \_\_\_\_\_

5. \_\_\_\_\_

6. \_\_\_\_\_

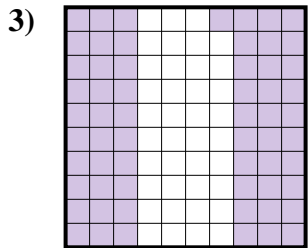
7. \_\_\_\_\_

8. \_\_\_\_\_

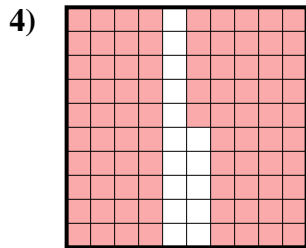
9. \_\_\_\_\_

10. \_\_\_\_\_

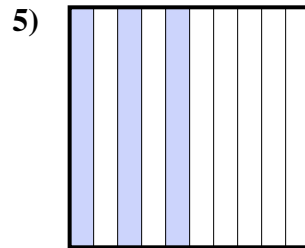
11. \_\_\_\_\_



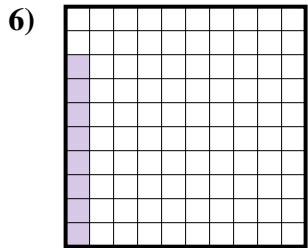
fraction \_\_\_\_\_  
 decimal \_\_\_\_\_  
 percent \_\_\_\_\_



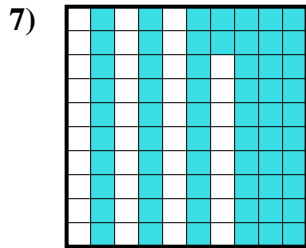
fraction \_\_\_\_\_  
 decimal \_\_\_\_\_  
 percent \_\_\_\_\_



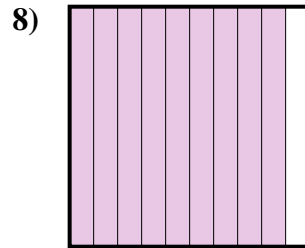
fraction \_\_\_\_\_  
 decimal \_\_\_\_\_  
 percent \_\_\_\_\_



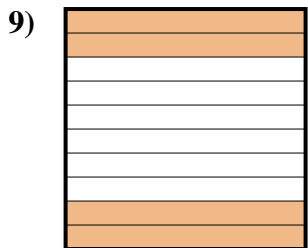
fraction \_\_\_\_\_  
 decimal \_\_\_\_\_  
 percent \_\_\_\_\_



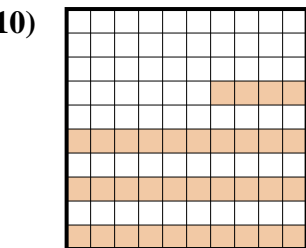
fraction \_\_\_\_\_  
 decimal \_\_\_\_\_  
 percent \_\_\_\_\_




fraction \_\_\_\_\_  
 decimal \_\_\_\_\_  
 percent \_\_\_\_\_



fraction \_\_\_\_\_  
 decimal \_\_\_\_\_  
 percent \_\_\_\_\_



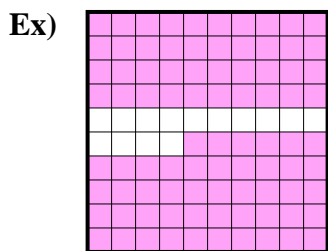
fraction \_\_\_\_\_  
 decimal \_\_\_\_\_  
 percent \_\_\_\_\_




fraction \_\_\_\_\_  
 decimal \_\_\_\_\_  
 percent \_\_\_\_\_



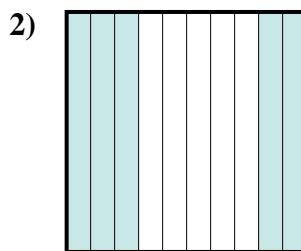
Determine the value written as a fraction , decimal & a percent.



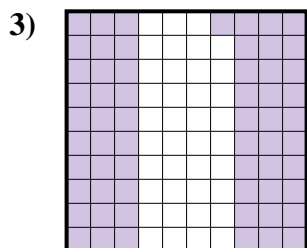
fraction  $\frac{86}{100}$   
 decimal  $0.86$   
 percent  $86$



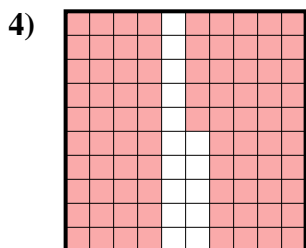
fraction  $\frac{2}{10}$   
 decimal  $0.2$   
 percent  $20$



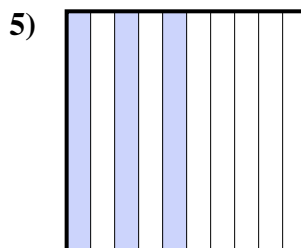
fraction  $\frac{5}{10}$   
 decimal  $0.5$   
 percent  $50$



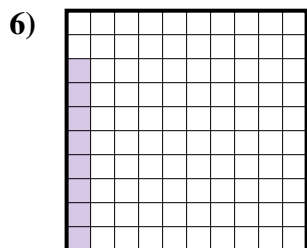
fraction  $\frac{61}{100}$   
 decimal  $0.61$   
 percent  $61$



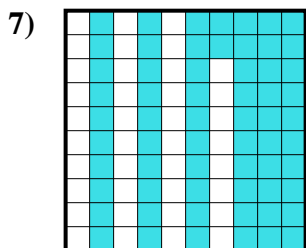
fraction  $\frac{85}{100}$   
 decimal  $0.85$   
 percent  $85$



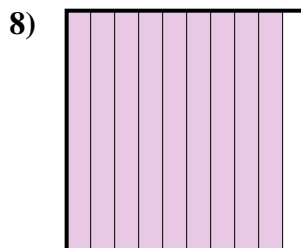
fraction  $\frac{3}{10}$   
 decimal  $0.3$   
 percent  $30$



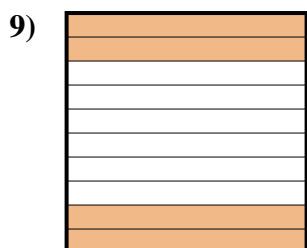
fraction  $\frac{8}{100}$   
 decimal  $0.08$   
 percent  $8$



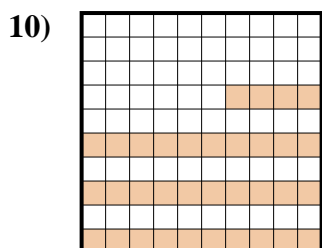
fraction  $\frac{62}{100}$   
 decimal  $0.62$   
 percent  $62$



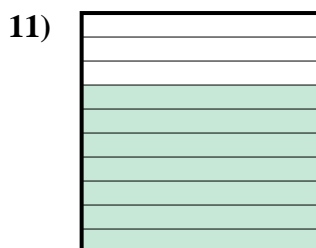
fraction  $\frac{9}{10}$   
 decimal  $0.9$   
 percent  $90$



fraction  $\frac{4}{10}$   
 decimal  $0.4$   
 percent  $40$



fraction  $\frac{34}{100}$   
 decimal  $0.34$   
 percent  $34$



fraction  $\frac{7}{10}$   
 decimal  $0.7$   
 percent  $70$

**Answers**

Ex.	$\frac{86}{100}$	<b>0.86</b>	<b>86%</b>
1.	$\frac{2}{10}$	<b>0.2</b>	<b>20%</b>
2.	$\frac{5}{10}$	<b>0.5</b>	<b>50%</b>
3.	$\frac{61}{100}$	<b>0.61</b>	<b>61%</b>
4.	$\frac{85}{100}$	<b>0.85</b>	<b>85%</b>
5.	$\frac{3}{10}$	<b>0.3</b>	<b>30%</b>
6.	$\frac{8}{100}$	<b>0.08</b>	<b>8%</b>
7.	$\frac{62}{100}$	<b>0.62</b>	<b>62%</b>
8.	$\frac{9}{10}$	<b>0.9</b>	<b>90%</b>
9.	$\frac{4}{10}$	<b>0.4</b>	<b>40%</b>
10.	$\frac{34}{100}$	<b>0.34</b>	<b>34%</b>
11.	$\frac{7}{10}$	<b>0.7</b>	<b>70%</b>