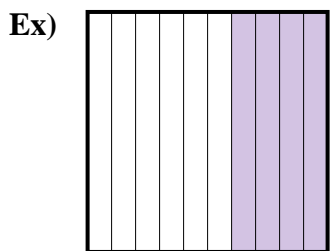
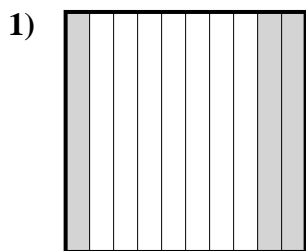




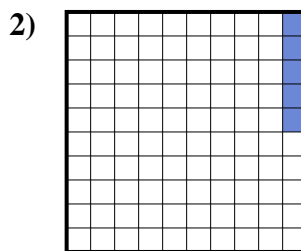
Determine the value written as a fraction , decimal & a percent.



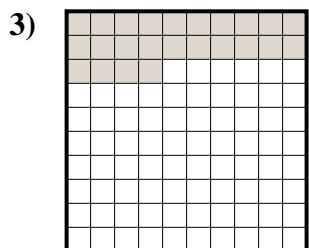
fraction  $\frac{4}{10}$   
 decimal 0.4  
 percent 40



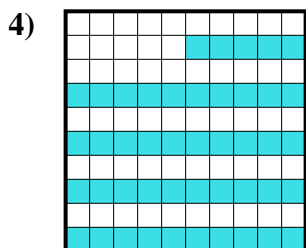
fraction \_\_\_\_\_  
 decimal \_\_\_\_\_  
 percent \_\_\_\_\_



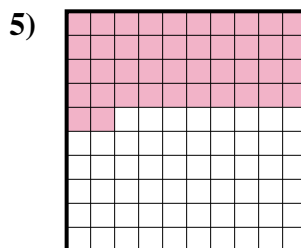
fraction \_\_\_\_\_  
 decimal \_\_\_\_\_  
 percent \_\_\_\_\_



fraction \_\_\_\_\_  
 decimal \_\_\_\_\_  
 percent \_\_\_\_\_




fraction \_\_\_\_\_  
 decimal \_\_\_\_\_  
 percent \_\_\_\_\_



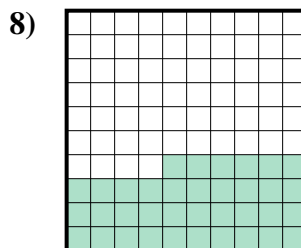
fraction \_\_\_\_\_  
 decimal \_\_\_\_\_  
 percent \_\_\_\_\_



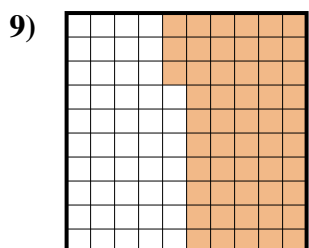
fraction \_\_\_\_\_  
 decimal \_\_\_\_\_  
 percent \_\_\_\_\_



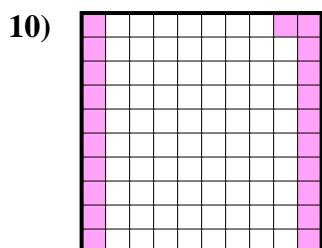
fraction \_\_\_\_\_  
 decimal \_\_\_\_\_  
 percent \_\_\_\_\_



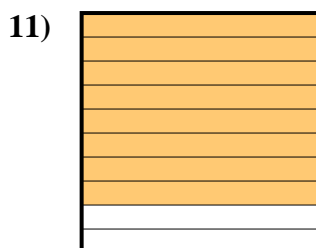
fraction \_\_\_\_\_  
 decimal \_\_\_\_\_  
 percent \_\_\_\_\_



fraction \_\_\_\_\_  
 decimal \_\_\_\_\_  
 percent \_\_\_\_\_



fraction \_\_\_\_\_  
 decimal \_\_\_\_\_  
 percent \_\_\_\_\_



fraction \_\_\_\_\_  
 decimal \_\_\_\_\_  
 percent \_\_\_\_\_

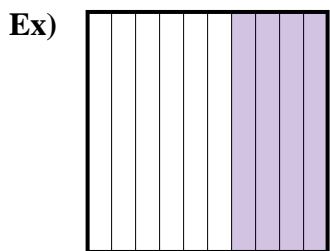
**Answers**

Ex.  $\frac{4}{10}$  **0.4** **40%**

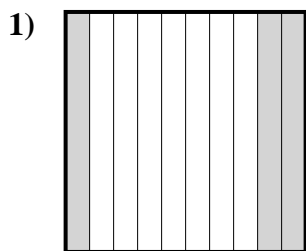
- 1. \_\_\_\_\_
- 2. \_\_\_\_\_
- 3. \_\_\_\_\_
- 4. \_\_\_\_\_
- 5. \_\_\_\_\_
- 6. \_\_\_\_\_
- 7. \_\_\_\_\_
- 8. \_\_\_\_\_
- 9. \_\_\_\_\_
- 10. \_\_\_\_\_
- 11. \_\_\_\_\_



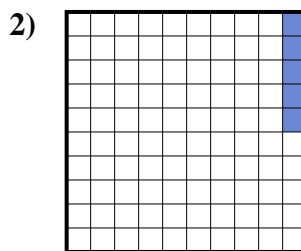
Determine the value written as a fraction , decimal & a percent.



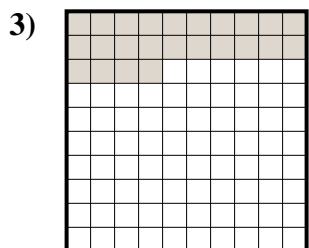
fraction  $\frac{4}{10}$   
 decimal  $0.4$   
 percent  $40$



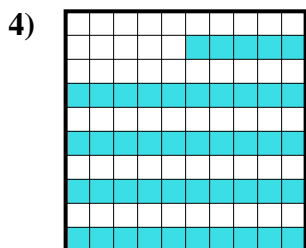
fraction  $\frac{3}{10}$   
 decimal  $0.3$   
 percent  $30$



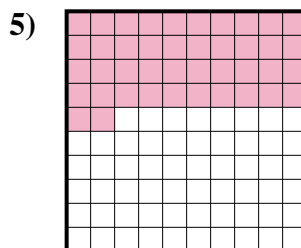
fraction  $\frac{5}{100}$   
 decimal  $0.05$   
 percent  $5$



fraction  $\frac{24}{100}$   
 decimal  $0.24$   
 percent  $24$




fraction  $\frac{45}{100}$   
 decimal  $0.45$   
 percent  $45$



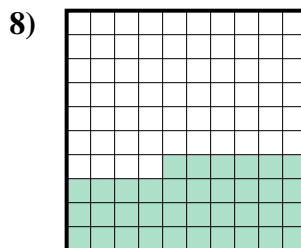
fraction  $\frac{42}{100}$   
 decimal  $0.42$   
 percent  $42$



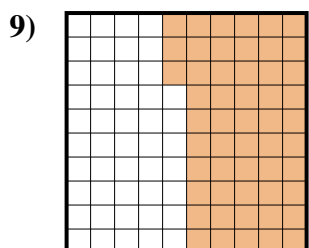
fraction  $\frac{2}{10}$   
 decimal  $0.2$   
 percent  $20$



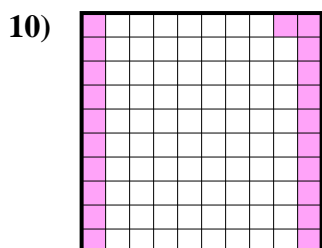
fraction  $\frac{1}{10}$   
 decimal  $0.1$   
 percent  $10$



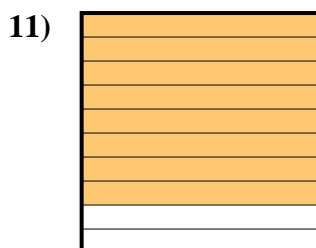
fraction  $\frac{36}{100}$   
 decimal  $0.36$   
 percent  $36$



fraction  $\frac{53}{100}$   
 decimal  $0.53$   
 percent  $53$



fraction  $\frac{21}{100}$   
 decimal  $0.21$   
 percent  $21$



fraction  $\frac{8}{10}$   
 decimal  $0.8$   
 percent  $80$

**Answers**

Ex.	$\frac{4}{10}$	<b>0.4</b>	<b>40%</b>
1.	$\frac{3}{10}$	<b>0.3</b>	<b>30%</b>
2.	$\frac{5}{100}$	<b>0.05</b>	<b>5%</b>
3.	$\frac{24}{100}$	<b>0.24</b>	<b>24%</b>
4.	$\frac{45}{100}$	<b>0.45</b>	<b>45%</b>
5.	$\frac{42}{100}$	<b>0.42</b>	<b>42%</b>
6.	$\frac{2}{10}$	<b>0.2</b>	<b>20%</b>
7.	$\frac{1}{10}$	<b>0.1</b>	<b>10%</b>
8.	$\frac{36}{100}$	<b>0.36</b>	<b>36%</b>
9.	$\frac{53}{100}$	<b>0.53</b>	<b>53%</b>
10.	$\frac{21}{100}$	<b>0.21</b>	<b>21%</b>
11.	$\frac{8}{10}$	<b>0.8</b>	<b>80%</b>