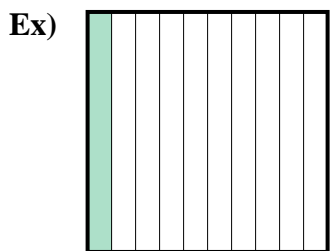
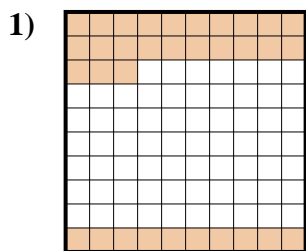




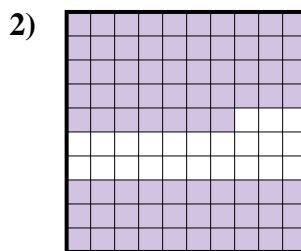
Determine the value written as a fraction , decimal & a percent.




fraction $\frac{1}{10}$
 decimal 0.1
 percent 10



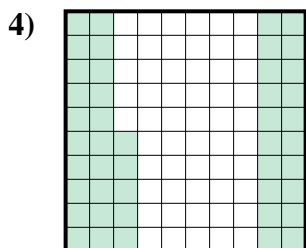
fraction $\frac{33}{100}$
 decimal 0.33
 percent 33



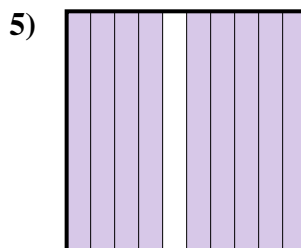
fraction $\frac{77}{100}$
 decimal 0.77
 percent 77




fraction $\frac{5}{100}$
 decimal 0.05
 percent 5



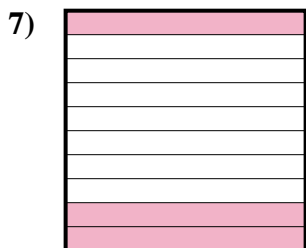
fraction $\frac{45}{100}$
 decimal 0.45
 percent 45




fraction $\frac{9}{10}$
 decimal 0.9
 percent 90



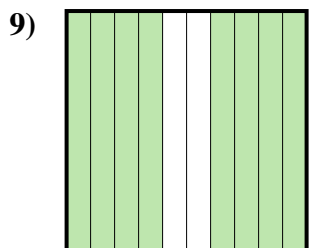
fraction $\frac{7}{10}$
 decimal 0.7
 percent 70



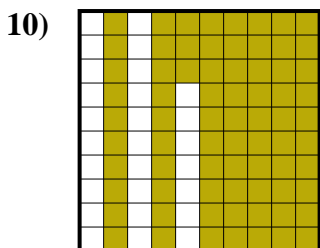
fraction $\frac{3}{10}$
 decimal 0.3
 percent 30



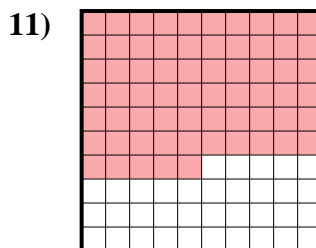
fraction $\frac{2}{10}$
 decimal 0.2
 percent 20



fraction $\frac{8}{10}$
 decimal 0.8
 percent 80



fraction $\frac{73}{100}$
 decimal 0.73
 percent 73



fraction $\frac{65}{100}$
 decimal 0.65
 percent 65

Answers

- Ex. $\frac{1}{10}$ **0.1** **10%**
 1. $\frac{33}{100}$ **0.33** **33%**
 2. $\frac{77}{100}$ **0.77** **77%**
 3. $\frac{5}{100}$ **0.05** **5%**
 4. $\frac{45}{100}$ **0.45** **45%**
 5. $\frac{9}{10}$ **0.9** **90%**
 6. $\frac{7}{10}$ **0.7** **70%**
 7. $\frac{3}{10}$ **0.3** **30%**
 8. $\frac{2}{10}$ **0.2** **20%**
 9. $\frac{8}{10}$ **0.8** **80%**
 10. $\frac{73}{100}$ **0.73** **73%**
 11. $\frac{65}{100}$ **0.65** **65%**