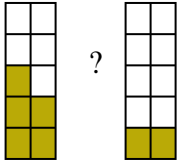




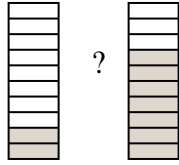
Compare the size of the fractions using  $<$ ,  $>$  or  $=$ .

Ex)



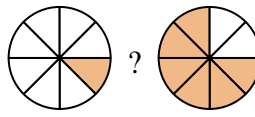
?

1)



?

2)



?

**Answers**

Ex.  $\frac{5}{10}$   $>$   $\frac{2}{10}$

1. \_\_\_\_\_

2. \_\_\_\_\_

3. \_\_\_\_\_

4. \_\_\_\_\_

5. \_\_\_\_\_

6. \_\_\_\_\_

7. \_\_\_\_\_

8. \_\_\_\_\_

9. \_\_\_\_\_

10. \_\_\_\_\_

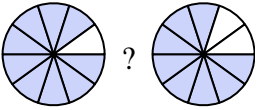
11. \_\_\_\_\_

12. \_\_\_\_\_

13. \_\_\_\_\_

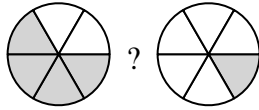
14. \_\_\_\_\_

3)



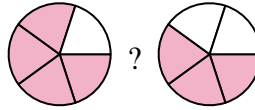
?

4)



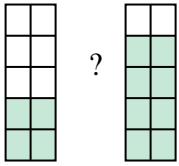
?

5)



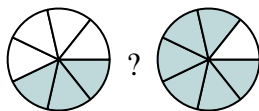
?

6)



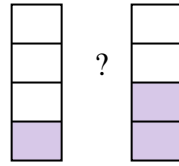
?

7)



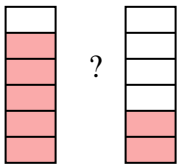
?

8)



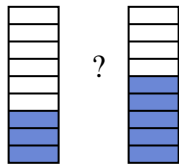
?

9)



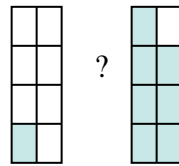
?

10)



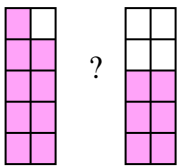
?

11)



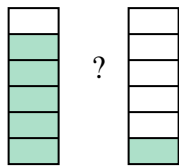
?

12)



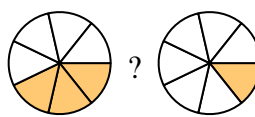
?

13)



?

14)

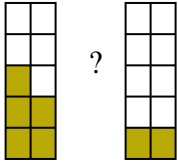


?

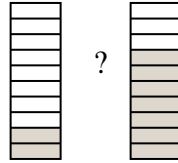


Compare the size of the fractions using  $<$ ,  $>$  or  $=$ .

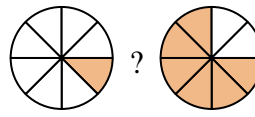
Ex)



1)



2)



**Answers**

Ex.  $\frac{5}{10} > \frac{2}{10}$

1.  $\frac{2}{10} < \frac{7}{10}$

2.  $\frac{1}{8} < \frac{6}{8}$

3.  $\frac{9}{10} > \frac{8}{10}$

4.  $\frac{4}{6} > \frac{1}{6}$

5.  $\frac{4}{5} > \frac{3}{5}$

6.  $\frac{4}{10} < \frac{8}{10}$

7.  $\frac{3}{7} < \frac{6}{7}$

8.  $\frac{1}{4} < \frac{2}{4}$

9.  $\frac{5}{6} > \frac{2}{6}$

10.  $\frac{3}{9} < \frac{5}{9}$

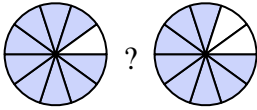
11.  $\frac{1}{8} < \frac{7}{8}$

12.  $\frac{9}{10} > \frac{6}{10}$

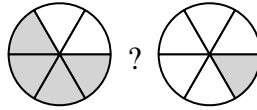
13.  $\frac{5}{6} > \frac{1}{6}$

14.  $\frac{3}{7} > \frac{1}{7}$

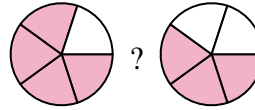
3)



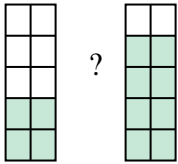
4)



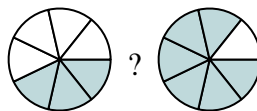
5)



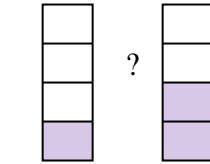
6)



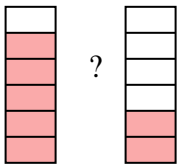
7)



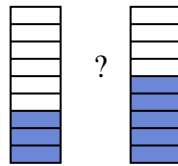
8)



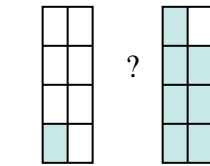
9)



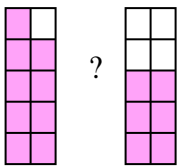
10)



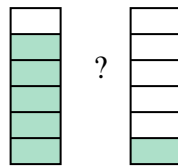
11)



12)



13)



14)

