




Use the number line to solve each problem.

Answers


- 1) Which amount is larger,
- $\frac{2}{3}$
- or 0.82?



- 2) Which amount is larger,
- $\frac{4}{6}$
- or 0.54?



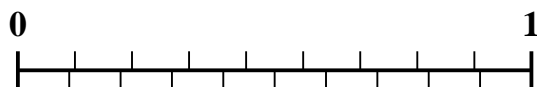
- 3) Which amount is larger,
- $\frac{6}{8}$
- or 0.62?



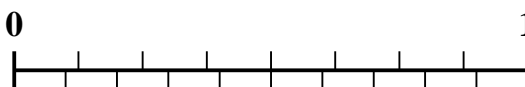
- 4) Which amount is larger,
- $\frac{1}{2}$
- or 0.68?




- 5) Which amount is larger,
- $\frac{1}{9}$
- or 0.26?



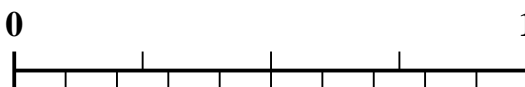
- 6) Which amount is larger,
- $\frac{3}{8}$
- or 0.52?



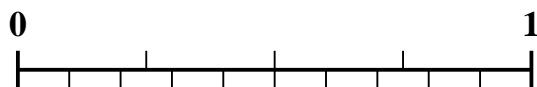
- 7) Which amount is larger,
- $\frac{2}{5}$
- or 0.56?



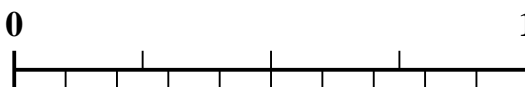
- 8) Which amount is larger,
- $\frac{3}{4}$
- or 0.86?



- 9) Which amount is larger,
- $\frac{1}{4}$
- or 0.14?



- 10) Which amount is larger,
- $\frac{2}{4}$
- or 0.68?

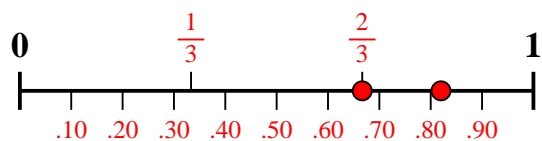


1. _____
2. _____
3. _____
4. _____
5. _____
6. _____
7. _____
8. _____
9. _____
10. _____

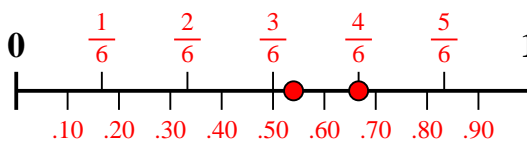


Use the number line to solve each problem.

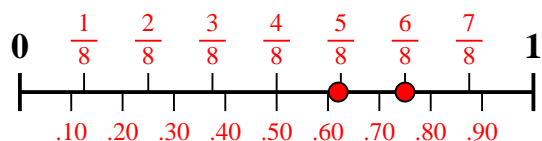
- 1) Which amount is larger,
- $\frac{2}{3}$
- or 0.82?



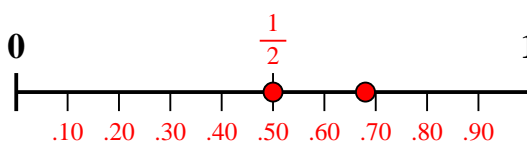
- 2) Which amount is larger,
- $\frac{4}{6}$
- or 0.54?



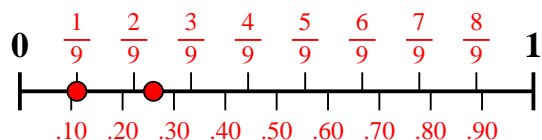
- 3) Which amount is larger,
- $\frac{6}{8}$
- or 0.62?



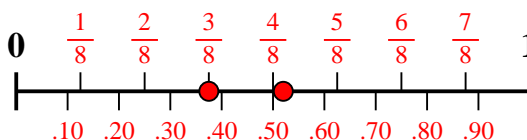
- 4) Which amount is larger,
- $\frac{1}{2}$
- or 0.68?



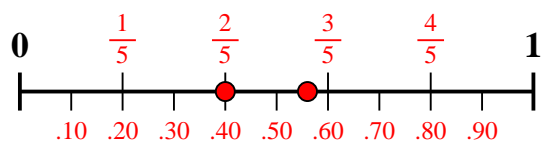
- 5) Which amount is larger,
- $\frac{1}{9}$
- or 0.26?



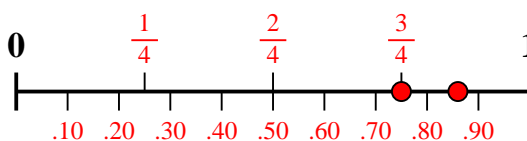
- 6) Which amount is larger,
- $\frac{3}{8}$
- or 0.52?



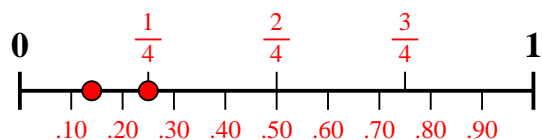
- 7) Which amount is larger,
- $\frac{2}{5}$
- or 0.56?



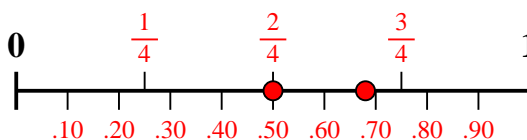
- 8) Which amount is larger,
- $\frac{3}{4}$
- or 0.86?



- 9) Which amount is larger,
- $\frac{1}{4}$
- or 0.14?



- 10) Which amount is larger,
- $\frac{2}{4}$
- or 0.68?

**Answers**

1. **0.82**
2. **$\frac{4}{6}$**
3. **$\frac{6}{8}$**
4. **0.68**
5. **0.26**
6. **0.52**
7. **0.56**
8. **0.86**
9. **$\frac{1}{4}$**
10. **0.68**