

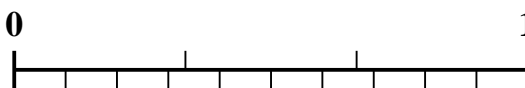


Use the number line to solve each problem.


1) Which amount is larger, $\frac{2}{9}$ or 0.36?



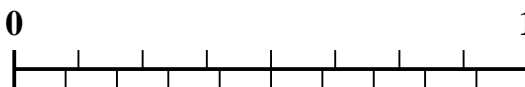
2) Which amount is larger, $\frac{1}{3}$ or 0.43?




3) Which amount is larger, $\frac{1}{5}$ or 0.35?



4) Which amount is larger, $\frac{2}{8}$ or 0.36?




5) Which amount is larger, $\frac{4}{6}$ or 0.57?



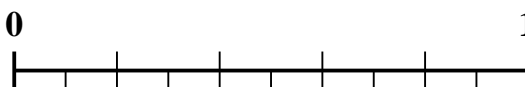
6) Which amount is larger, $\frac{3}{9}$ or 0.15?



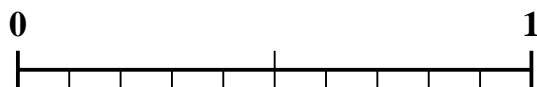
7) Which amount is larger, $\frac{3}{8}$ or 0.49?



8) Which amount is larger, $\frac{3}{5}$ or 0.71?



9) Which amount is larger, $\frac{1}{2}$ or 0.64?



10) Which amount is larger, $\frac{6}{9}$ or 0.52?



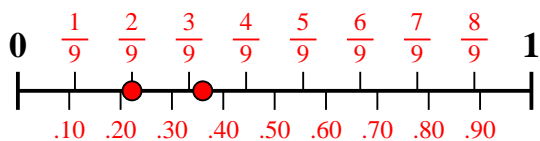
Answers

1. _____
2. _____
3. _____
4. _____
5. _____
6. _____
7. _____
8. _____
9. _____
10. _____

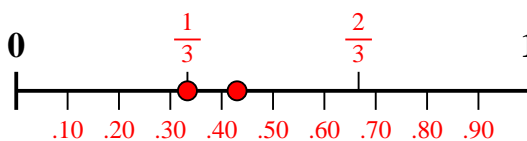


Use the number line to solve each problem.

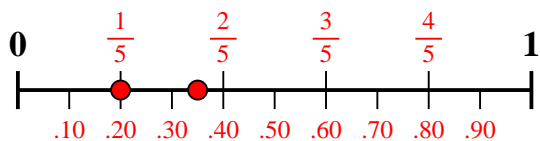
1) Which amount is larger, $\frac{2}{9}$ or 0.36?



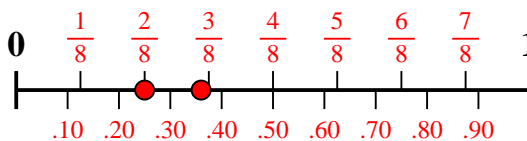
2) Which amount is larger, $\frac{1}{3}$ or 0.43?



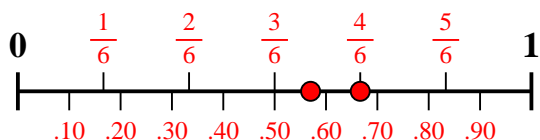
3) Which amount is larger, $\frac{1}{5}$ or 0.35?



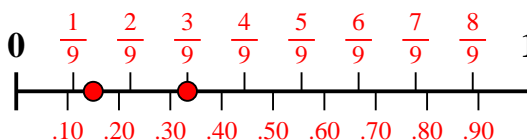
4) Which amount is larger, $\frac{2}{8}$ or 0.36?



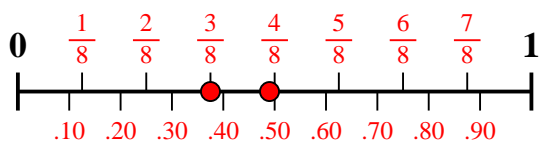
5) Which amount is larger, $\frac{4}{6}$ or 0.57?



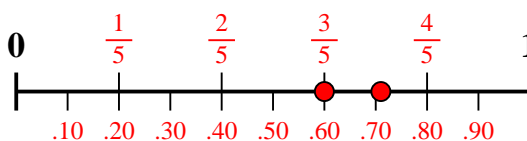
6) Which amount is larger, $\frac{3}{9}$ or 0.15?



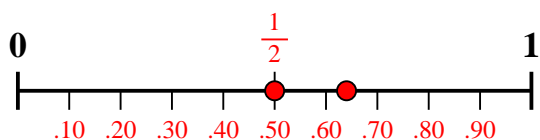
7) Which amount is larger, $\frac{3}{8}$ or 0.49?



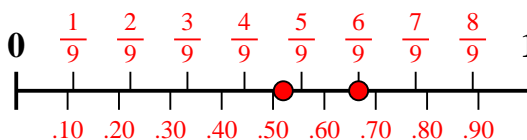
8) Which amount is larger, $\frac{3}{5}$ or 0.71?



9) Which amount is larger, $\frac{1}{2}$ or 0.64?



10) Which amount is larger, $\frac{6}{9}$ or 0.52?



Answers

1. **0.36**

2. **0.43**

3. **0.35**

4. **0.36**

5. **$\frac{4}{6}$**

6. **$\frac{3}{9}$**

7. **0.49**

8. **0.71**

9. **0.64**

10. **$\frac{6}{9}$**