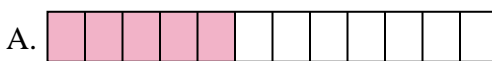




Match each equation to the answer and write the answer.

**Answers**

Ex)  $\frac{1}{10} + \frac{1}{10} + \frac{1}{10} + \frac{1}{10} + \frac{1}{10} + \frac{1}{10} + \frac{1}{10}$




Ex. **H**

1)  $\frac{1}{12} + \frac{1}{12} + \frac{1}{12} + \frac{1}{12}$



1. \_\_\_\_\_

2)  $\frac{1}{5} + \frac{1}{5} + \frac{1}{5} + \frac{1}{5}$




2. \_\_\_\_\_

3)  $\frac{1}{6} + \frac{1}{6} + \frac{1}{6}$



3. \_\_\_\_\_

4)  $\frac{1}{8} + \frac{1}{8} + \frac{1}{8} + \frac{1}{8}$



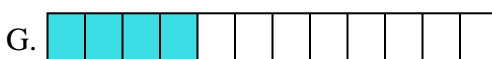
5. \_\_\_\_\_

5)  $\frac{1}{4} + \frac{1}{4}$



6. \_\_\_\_\_

6)  $\frac{1}{5} + \frac{1}{5} + \frac{1}{5}$



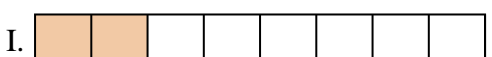
7. \_\_\_\_\_

7)  $\frac{1}{8} + \frac{1}{8} + \frac{1}{8} + \frac{1}{8} + \frac{1}{8}$



8. \_\_\_\_\_

8)  $\frac{1}{3} + \frac{1}{3}$



10. \_\_\_\_\_

9)  $\frac{1}{5} + \frac{1}{5}$




11. \_\_\_\_\_

10)  $\frac{1}{12} + \frac{1}{12}$




12. \_\_\_\_\_

11)  $\frac{1}{8} + \frac{1}{8}$



13. \_\_\_\_\_

12)  $\frac{1}{10} + \frac{1}{10} + \frac{1}{10}$



14. \_\_\_\_\_

13)  $\frac{1}{4} + \frac{1}{4} + \frac{1}{4}$




15. \_\_\_\_\_

14)  $\frac{1}{12} + \frac{1}{12} + \frac{1}{12} + \frac{1}{12} + \frac{1}{12}$



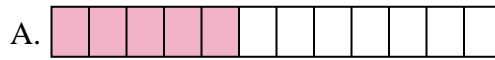
15)  $\frac{1}{6} + \frac{1}{6} + \frac{1}{6} + \frac{1}{6} + \frac{1}{6}$



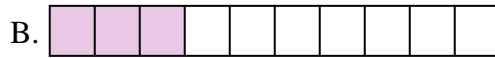


Match each equation to the answer and write the answer.

Ex)  $\frac{1}{10} + \frac{1}{10} + \frac{1}{10} + \frac{1}{10} + \frac{1}{10} + \frac{1}{10} + \frac{1}{10}$



1)  $\frac{1}{12} + \frac{1}{12} + \frac{1}{12} + \frac{1}{12}$




2)  $\frac{1}{5} + \frac{1}{5} + \frac{1}{5} + \frac{1}{5}$



3)  $\frac{1}{6} + \frac{1}{6} + \frac{1}{6}$



4)  $\frac{1}{8} + \frac{1}{8} + \frac{1}{8} + \frac{1}{8}$



5)  $\frac{1}{4} + \frac{1}{4}$




6)  $\frac{1}{5} + \frac{1}{5} + \frac{1}{5}$



7)  $\frac{1}{8} + \frac{1}{8} + \frac{1}{8} + \frac{1}{8} + \frac{1}{8}$



8)  $\frac{1}{3} + \frac{1}{3}$



9)  $\frac{1}{5} + \frac{1}{5}$




10)  $\frac{1}{12} + \frac{1}{12}$



11)  $\frac{1}{8} + \frac{1}{8}$



12)  $\frac{1}{10} + \frac{1}{10} + \frac{1}{10}$




13)  $\frac{1}{4} + \frac{1}{4} + \frac{1}{4}$



14)  $\frac{1}{12} + \frac{1}{12} + \frac{1}{12} + \frac{1}{12} + \frac{1}{12}$



15)  $\frac{1}{6} + \frac{1}{6} + \frac{1}{6} + \frac{1}{6} + \frac{1}{6}$



Answers

Ex.     **H**    

1.     **G**    

2.     **M**    

3.     **J**    

4.     **O**    

5.     **L**    

6.     **P**    

7.     **C**    

8.     **F**    

9.     **K**    

10.     **D**    

11.     **I**    

12.     **B**    

13.     **N**    

14.     **A**    

15.     **E**