



Use the visual model to solve each problem.

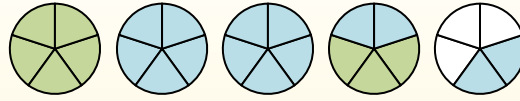
$$1 \frac{3}{5} + 2 \frac{4}{5} = ?$$



To solve a fraction addition problem one strategy is to shade in the whole amounts first (1 & 2).



Next fill in the fraction amounts ( $\frac{3}{5}$  &  $\frac{4}{5}$ ).



When all of the pieces are filled in we can see that  $1 \frac{3}{5} + 2 \frac{4}{5} = 4 \frac{2}{5}$

**Answers**

1. \_\_\_\_\_
2. \_\_\_\_\_
3. \_\_\_\_\_
4. \_\_\_\_\_
5. \_\_\_\_\_
6. \_\_\_\_\_
7. \_\_\_\_\_
8. \_\_\_\_\_
9. \_\_\_\_\_
10. \_\_\_\_\_

1)  $2 \frac{5}{8} + 3 \frac{7}{8} =$

2)  $1 \frac{5}{8} + 3 \frac{4}{8} =$

3)  $2 \frac{4}{5} + 3 \frac{1}{5} =$

4)  $1 \frac{2}{10} + 1 \frac{2}{10} =$

5)  $1 \frac{3}{12} + 3 \frac{11}{12} =$

6)  $2 \frac{4}{5} + 3 \frac{3}{5} =$

7)  $2 \frac{3}{6} + 3 \frac{5}{6} =$

8)  $1 \frac{5}{6} + 2 \frac{2}{6} =$

9)  $2 \frac{1}{4} + 1 \frac{3}{4} =$

10)  $2 \frac{1}{3} + 2 \frac{2}{3} =$



Use the visual model to solve each problem.

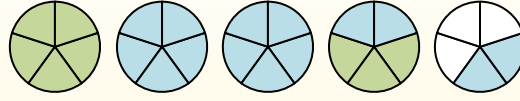
$$1\frac{3}{5} + 2\frac{4}{5} = ?$$



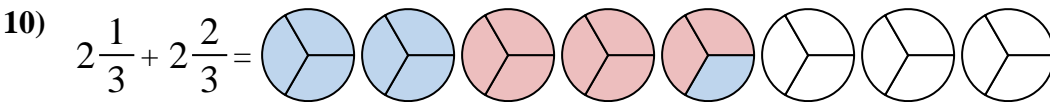
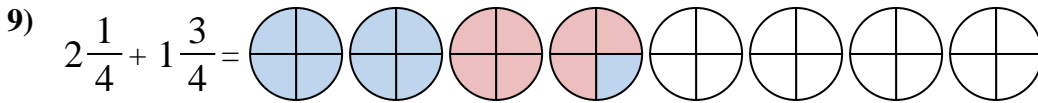
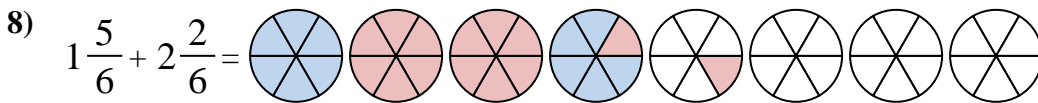
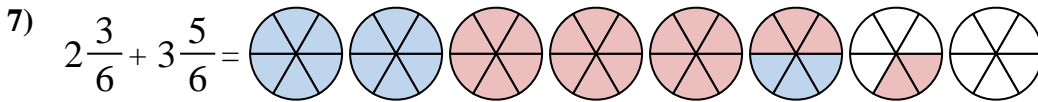
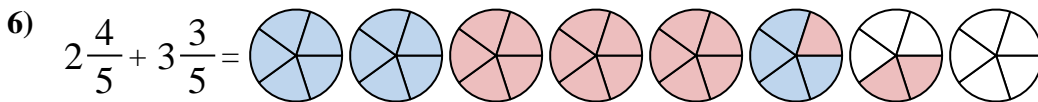
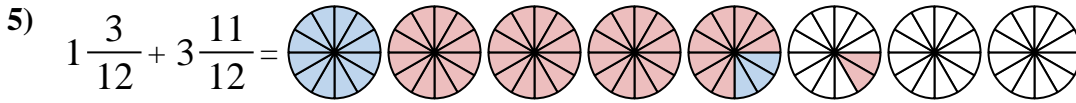
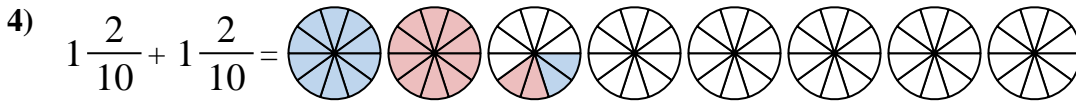
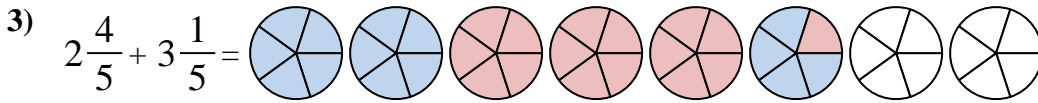
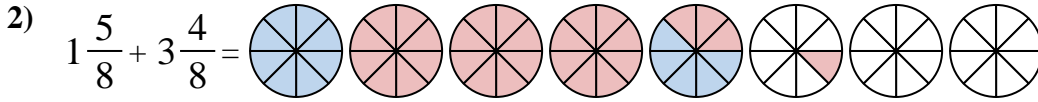
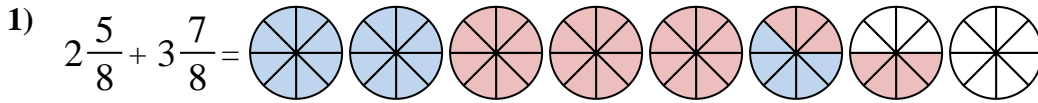
To solve a fraction addition problem one strategy is to shade in the whole amounts first (1 & 2).



Next fill in the fraction amounts ( $\frac{3}{5}$  &  $\frac{4}{5}$ ).



When all of the pieces are filled in we can see that  $1\frac{3}{5} + 2\frac{4}{5} = 4\frac{2}{5}$



**Answers**

1.  $6\frac{4}{8}$

2.  $5\frac{1}{8}$

3.  $6\frac{0}{5}$

4.  $2\frac{4}{10}$

5.  $5\frac{2}{12}$

6.  $6\frac{2}{5}$

7.  $6\frac{2}{6}$

8.  $4\frac{1}{6}$

9.  $4\frac{0}{4}$

10.  $5\frac{0}{3}$