



Determine which letter best represents the sum.

1) $\frac{3}{8} + \frac{2}{8}$

2) $\frac{1}{10} + \frac{4}{10}$

3) $\frac{6}{10} + \frac{3}{10}$

4) $\frac{1}{2} + \frac{1}{2}$

5) $\frac{4}{6} + \frac{1}{6}$

6) $\frac{4}{8} + \frac{3}{8}$

7) $\frac{1}{3} + \frac{2}{3}$

8) $\frac{1}{3} + \frac{1}{3}$

9) $\frac{6}{12} + \frac{2}{12}$

10) $\frac{1}{4} + \frac{2}{4}$

11) $\frac{4}{5} + \frac{1}{5}$

12) $\frac{1}{5} + \frac{1}{5}$

13) $\frac{9}{12} + \frac{5}{12}$

14) $\frac{2}{6} + \frac{4}{6}$

Answers

1. _____

2. _____

3. _____

4. _____

5. _____

6. _____

7. _____

8. _____

9. _____

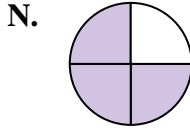
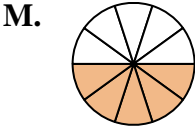
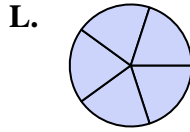
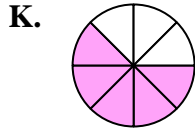
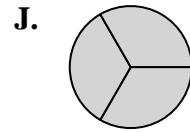
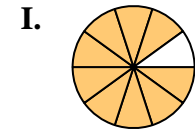
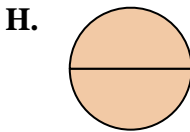
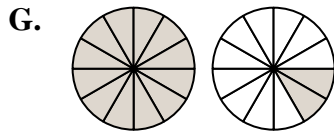
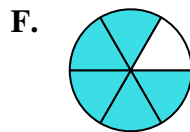
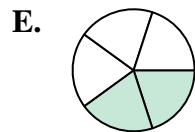
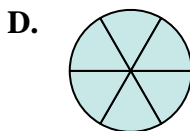
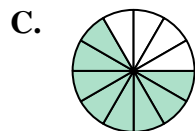
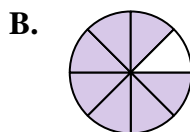
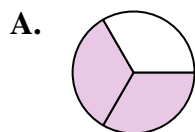
10. _____

11. _____

12. _____

13. _____

14. _____





Determine which letter best represents the sum.

1) $\frac{3}{8} + \frac{2}{8}$

2) $\frac{1}{10} + \frac{4}{10}$

3) $\frac{6}{10} + \frac{3}{10}$

4) $\frac{1}{2} + \frac{1}{2}$

5) $\frac{4}{6} + \frac{1}{6}$

6) $\frac{4}{8} + \frac{3}{8}$

7) $\frac{1}{3} + \frac{2}{3}$

8) $\frac{1}{3} + \frac{1}{3}$

9) $\frac{6}{12} + \frac{2}{12}$

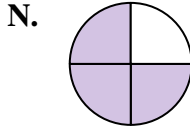
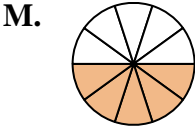
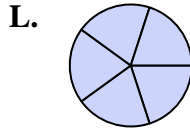
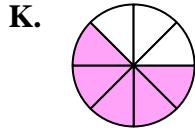
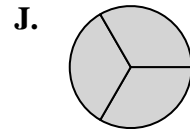
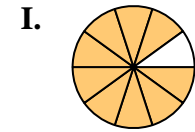
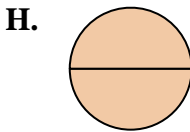
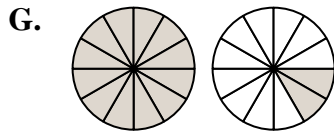
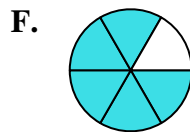
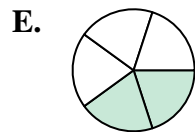
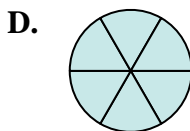
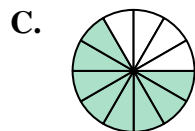
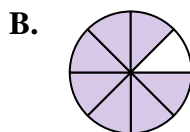
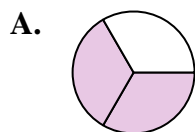
10) $\frac{1}{4} + \frac{2}{4}$

11) $\frac{4}{5} + \frac{1}{5}$

12) $\frac{1}{5} + \frac{1}{5}$

13) $\frac{9}{12} + \frac{5}{12}$

14) $\frac{2}{6} + \frac{4}{6}$



Answers

1. **K** $\frac{5}{8}$

2. **M** $\frac{5}{10}$

3. **I** $\frac{9}{10}$

4. **H** $\frac{2}{2}$

5. **F** $\frac{5}{6}$

6. **B** $\frac{7}{8}$

7. **J** $\frac{3}{3}$

8. **A** $\frac{2}{3}$

9. **C** $\frac{8}{12}$

10. **N** $\frac{3}{4}$

11. **L** $\frac{5}{5}$

12. **E** $\frac{2}{5}$

13. **G** $1\frac{2}{12}$

14. **D** $\frac{6}{6}$