



Determine which letter best represents the sum.

1) $\frac{5}{10} + \frac{2}{10}$

2) $\frac{3}{10} + \frac{5}{10}$

3) $\frac{1}{2} + \frac{1}{2}$

4) $\frac{3}{5} + \frac{3}{5}$

5) $\frac{1}{8} + \frac{5}{8}$

6) $\frac{1}{3} + \frac{2}{3}$

7) $\frac{1}{8} + \frac{6}{8}$

8) $\frac{1}{6} + \frac{4}{6}$

9) $\frac{6}{10} + \frac{9}{10}$

10) $\frac{8}{12} + \frac{10}{12}$

11) $\frac{2}{5} + \frac{2}{5}$

12) $\frac{2}{5} + \frac{3}{5}$

13) $\frac{4}{8} + \frac{4}{8}$

14) $\frac{4}{8} + \frac{5}{8}$

Answers

1. _____

2. _____

3. _____

4. _____

5. _____

6. _____

7. _____

8. _____

9. _____

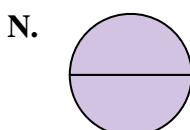
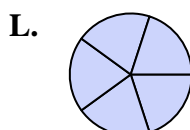
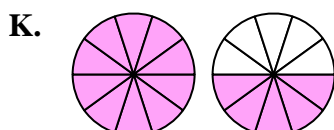
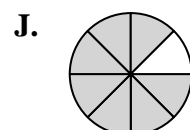
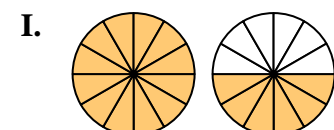
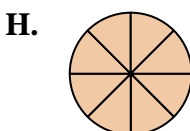
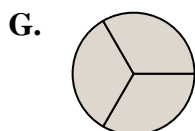
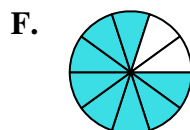
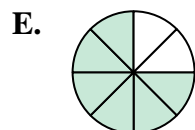
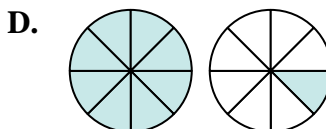
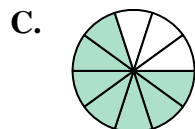
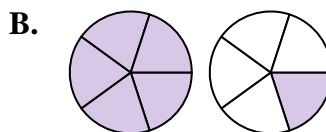
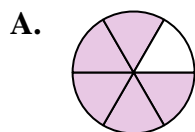
10. _____

11. _____

12. _____

13. _____

14. _____





Determine which letter best represents the sum.

1) $\frac{5}{10} + \frac{2}{10}$

2) $\frac{3}{10} + \frac{5}{10}$

3) $\frac{1}{2} + \frac{1}{2}$

4) $\frac{3}{5} + \frac{3}{5}$

5) $\frac{1}{8} + \frac{5}{8}$

6) $\frac{1}{3} + \frac{2}{3}$

7) $\frac{1}{8} + \frac{6}{8}$

8) $\frac{1}{6} + \frac{4}{6}$

9) $\frac{6}{10} + \frac{9}{10}$

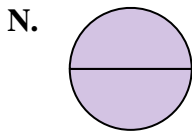
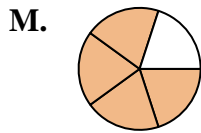
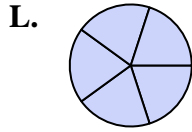
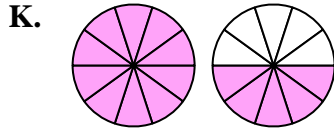
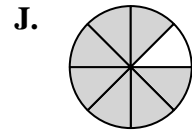
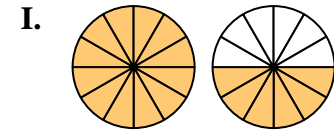
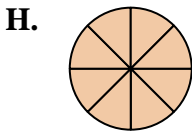
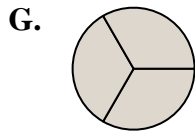
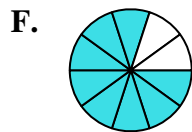
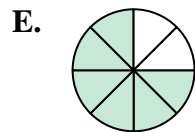
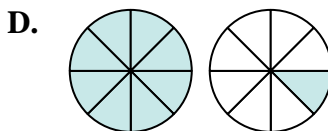
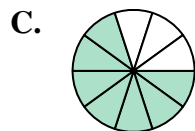
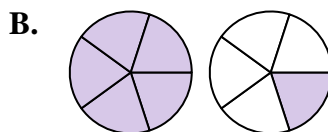
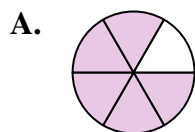
10) $\frac{8}{12} + \frac{10}{12}$

11) $\frac{2}{5} + \frac{2}{5}$

12) $\frac{2}{5} + \frac{3}{5}$

13) $\frac{4}{8} + \frac{4}{8}$

14) $\frac{4}{8} + \frac{5}{8}$



Answers

1. **C** $\frac{7}{10}$

2. **F** $\frac{8}{10}$

3. **N** $\frac{2}{2}$

4. **B** $1\frac{1}{5}$

5. **E** $\frac{6}{8}$

6. **G** $\frac{3}{3}$

7. **J** $\frac{7}{8}$

8. **A** $\frac{5}{6}$

9. **K** $1\frac{5}{10}$

10. **I** $1\frac{6}{12}$

11. **M** $\frac{4}{5}$

12. **L** $\frac{5}{5}$

13. **H** $\frac{8}{8}$

14. **D** $1\frac{1}{8}$



Determine which letter best represents the sum.

1) $\frac{2}{3} + \frac{1}{3}$

3) $\frac{3}{6} + \frac{1}{6}$

5) $\frac{5}{6} + \frac{4}{6}$

7) $\frac{5}{12} + \frac{1}{12}$

9) $\frac{4}{8} + \frac{1}{8}$

11) $\frac{1}{5} + \frac{1}{5}$

13) $\frac{1}{4} + \frac{3}{4}$

2) $\frac{1}{2} + \frac{1}{2}$

4) $\frac{3}{5} + \frac{2}{5}$

6) $\frac{4}{12} + \frac{8}{12}$

8) $\frac{4}{6} + \frac{2}{6}$

10) $\frac{2}{3} + \frac{2}{3}$

12) $\frac{2}{10} + \frac{7}{10}$

14) $\frac{3}{4} + \frac{2}{4}$

Answers

1. _____

2. _____

3. _____

4. _____

5. _____

6. _____

7. _____

8. _____

9. _____

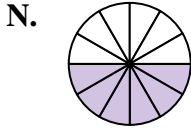
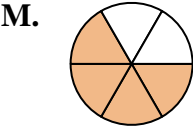
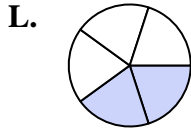
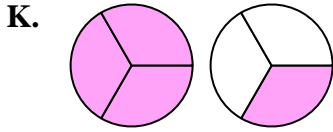
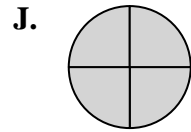
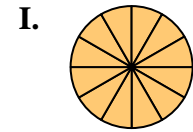
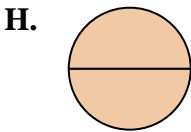
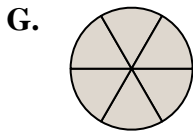
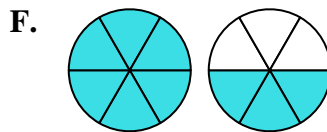
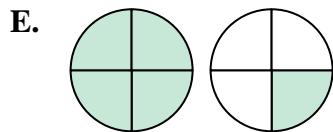
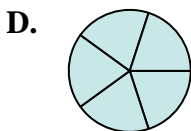
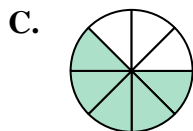
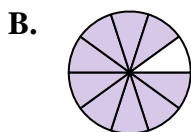
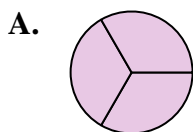
10. _____

11. _____

12. _____

13. _____

14. _____





Determine which letter best represents the sum.

1) $\frac{2}{3} + \frac{1}{3}$

3) $\frac{3}{6} + \frac{1}{6}$

5) $\frac{5}{6} + \frac{4}{6}$

7) $\frac{5}{12} + \frac{1}{12}$

9) $\frac{4}{8} + \frac{1}{8}$

11) $\frac{1}{5} + \frac{1}{5}$

13) $\frac{1}{4} + \frac{3}{4}$

2) $\frac{1}{2} + \frac{1}{2}$

4) $\frac{3}{5} + \frac{2}{5}$

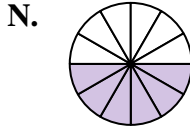
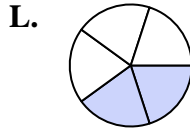
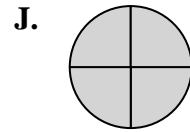
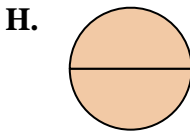
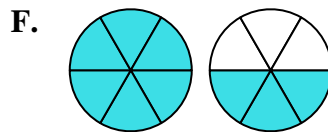
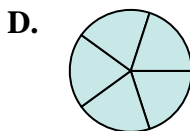
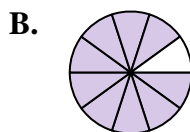
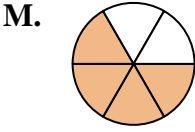
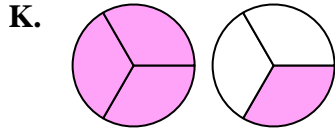
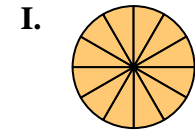
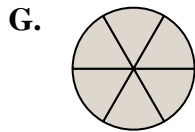
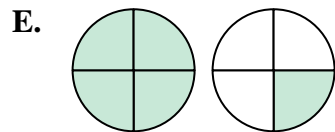
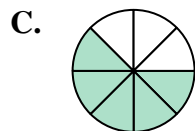
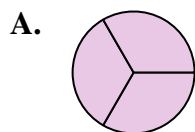
6) $\frac{4}{12} + \frac{8}{12}$

8) $\frac{4}{6} + \frac{2}{6}$

10) $\frac{2}{3} + \frac{2}{3}$

12) $\frac{2}{10} + \frac{7}{10}$

14) $\frac{3}{4} + \frac{2}{4}$



Answers

1. **A** $\frac{3}{3}$

2. **H** $\frac{2}{2}$

3. **M** $\frac{4}{6}$

4. **D** $\frac{5}{5}$

5. **F** $1\frac{3}{6}$

6. **I** $\frac{12}{12}$

7. **N** $\frac{6}{12}$

8. **G** $\frac{6}{6}$

9. **C** $\frac{5}{8}$

10. **K** $1\frac{1}{3}$

11. **L** $\frac{2}{5}$

12. **B** $\frac{9}{10}$

13. **J** $\frac{4}{4}$

14. **E** $1\frac{1}{4}$



Determine which letter best represents the sum.

1) $\frac{2}{4} + \frac{3}{4}$

2) $\frac{1}{12} + \frac{3}{12}$

3) $\frac{6}{10} + \frac{3}{10}$

4) $\frac{4}{10} + \frac{4}{10}$

5) $\frac{3}{12} + \frac{5}{12}$

6) $\frac{1}{2} + \frac{1}{2}$

7) $\frac{1}{6} + \frac{5}{6}$

8) $\frac{1}{3} + \frac{2}{3}$

9) $\frac{2}{5} + \frac{2}{5}$

10) $\frac{3}{4} + \frac{3}{4}$

11) $\frac{2}{4} + \frac{2}{4}$

12) $\frac{2}{4} + \frac{1}{4}$

13) $\frac{4}{5} + \frac{2}{5}$

14) $\frac{1}{6} + \frac{2}{6}$

Answers

1. _____

2. _____

3. _____

4. _____

5. _____

6. _____

7. _____

8. _____

9. _____

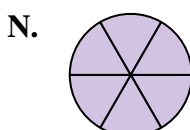
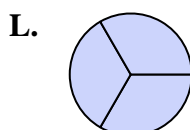
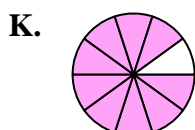
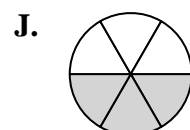
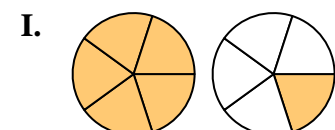
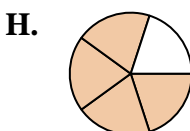
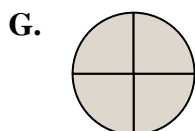
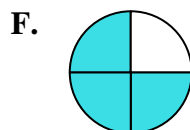
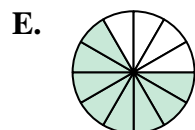
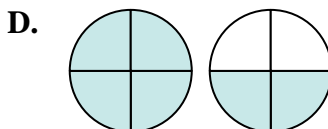
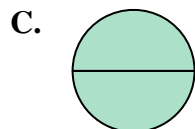
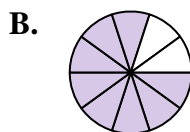
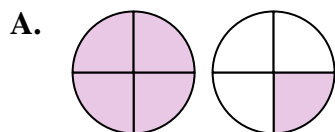
10. _____

11. _____

12. _____

13. _____

14. _____





Determine which letter best represents the sum.

1) $\frac{2}{4} + \frac{3}{4}$

2) $1\frac{1}{12} + \frac{3}{12}$

3) $\frac{6}{10} + \frac{3}{10}$

4) $\frac{4}{10} + \frac{4}{10}$

5) $\frac{3}{12} + \frac{5}{12}$

6) $\frac{1}{2} + \frac{1}{2}$

7) $\frac{1}{6} + \frac{5}{6}$

8) $\frac{1}{3} + \frac{2}{3}$

9) $\frac{2}{5} + \frac{2}{5}$

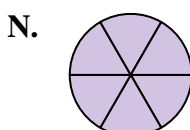
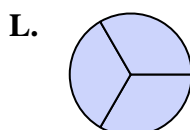
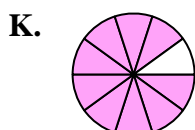
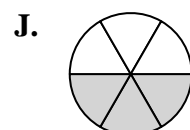
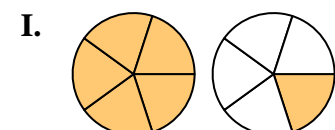
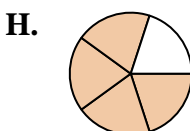
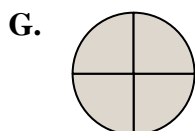
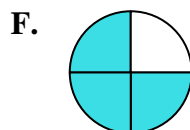
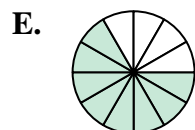
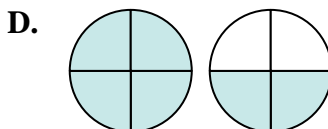
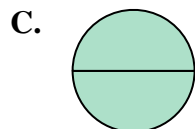
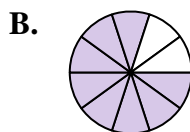
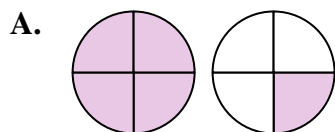
10) $\frac{3}{4} + \frac{3}{4}$

11) $\frac{2}{4} + \frac{2}{4}$

12) $\frac{2}{4} + \frac{1}{4}$

13) $\frac{4}{5} + \frac{2}{5}$

14) $\frac{1}{6} + \frac{2}{6}$



Answers

1. **A** $1\frac{1}{4}$

2. **M** $\frac{4}{12}$

3. **K** $\frac{9}{10}$

4. **B** $\frac{8}{10}$

5. **E** $\frac{8}{12}$

6. **C** $\frac{2}{2}$

7. **N** $\frac{6}{6}$

8. **L** $\frac{3}{3}$

9. **H** $\frac{4}{5}$

10. **D** $1\frac{2}{4}$

11. **G** $\frac{4}{4}$

12. **F** $\frac{3}{4}$

13. **I** $1\frac{1}{5}$

14. **J** $\frac{3}{6}$



Determine which letter best represents the sum.

1) $\frac{2}{3} + \frac{1}{3}$

2) $\frac{2}{5} + \frac{1}{5}$

3) $\frac{5}{8} + \frac{4}{8}$

4) $\frac{6}{8} + \frac{4}{8}$

5) $\frac{8}{10} + \frac{5}{10}$

6) $\frac{1}{6} + \frac{4}{6}$

7) $\frac{5}{8} + \frac{6}{8}$

8) $\frac{3}{4} + \frac{3}{4}$

9) $\frac{7}{10} + \frac{3}{10}$

10) $\frac{2}{4} + \frac{2}{4}$

11) $\frac{4}{6} + \frac{5}{6}$

12) $\frac{5}{6} + \frac{5}{6}$

13) $\frac{4}{10} + \frac{5}{10}$

14) $\frac{4}{5} + \frac{4}{5}$

Answers

1. _____

2. _____

3. _____

4. _____

5. _____

6. _____

7. _____

8. _____

9. _____

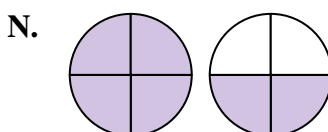
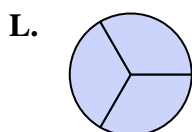
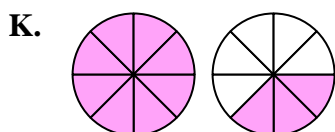
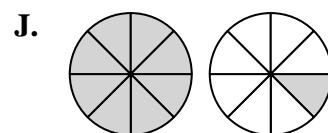
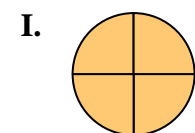
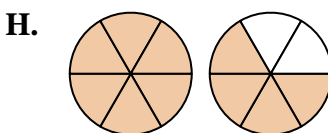
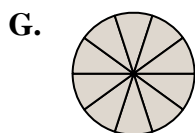
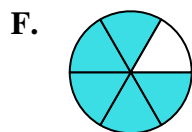
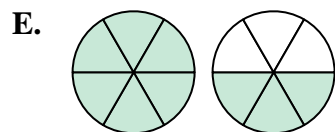
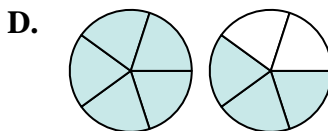
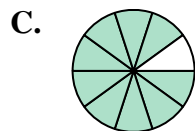
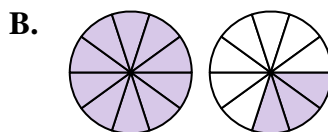
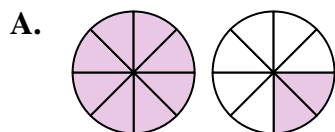
10. _____

11. _____

12. _____

13. _____

14. _____





Determine which letter best represents the sum.

1) $\frac{2}{3} + \frac{1}{3}$

2) $\frac{2}{5} + \frac{1}{5}$

3) $\frac{5}{8} + \frac{4}{8}$

4) $\frac{6}{8} + \frac{4}{8}$

5) $\frac{8}{10} + \frac{5}{10}$

6) $1\frac{4}{6} + \frac{4}{6}$

7) $\frac{5}{8} + \frac{6}{8}$

8) $\frac{3}{4} + \frac{3}{4}$

9) $\frac{7}{10} + \frac{3}{10}$

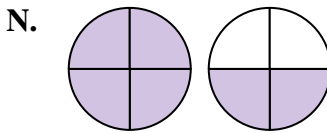
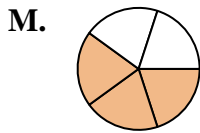
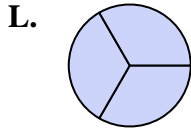
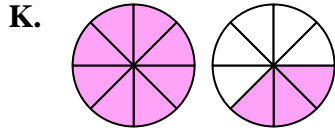
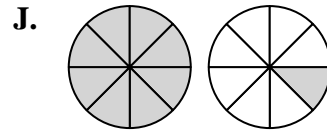
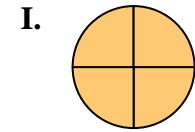
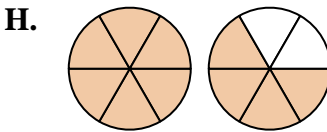
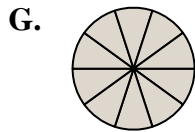
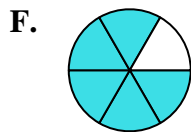
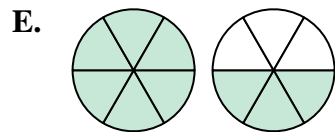
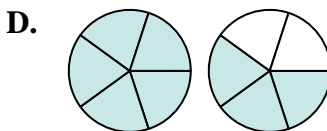
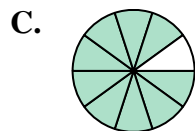
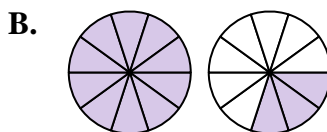
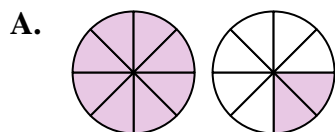
10) $\frac{2}{4} + \frac{2}{4}$

11) $\frac{4}{6} + \frac{5}{6}$

12) $\frac{5}{6} + \frac{5}{6}$

13) $\frac{4}{10} + \frac{5}{10}$

14) $\frac{4}{5} + \frac{4}{5}$



Answers

1. L $\frac{3}{3}$

2. M $\frac{3}{5}$

3. J $1\frac{1}{8}$

4. A $1\frac{2}{8}$

5. B $1\frac{3}{10}$

6. F $\frac{5}{6}$

7. K $1\frac{3}{8}$

8. N $1\frac{2}{4}$

9. G $\frac{10}{10}$

10. I $\frac{4}{4}$

11. E $1\frac{3}{6}$

12. H $1\frac{4}{6}$

13. C $\frac{9}{10}$

14. D $1\frac{3}{5}$



Determine which letter best represents the sum.

1) $\frac{7}{10} + \frac{3}{10}$

3) $\frac{2}{4} + \frac{1}{4}$

5) $\frac{8}{12} + \frac{6}{12}$

7) $\frac{5}{12} + \frac{3}{12}$

9) $\frac{1}{3} + \frac{1}{3}$

11) $\frac{3}{6} + \frac{2}{6}$

13) $\frac{2}{5} + \frac{4}{5}$

2) $\frac{2}{3} + \frac{1}{3}$

4) $\frac{3}{6} + \frac{4}{6}$

6) $\frac{7}{8} + \frac{4}{8}$

8) $\frac{1}{12} + \frac{2}{12}$

10) $\frac{1}{2} + \frac{1}{2}$

12) $\frac{1}{8} + \frac{2}{8}$

14) $\frac{5}{6} + \frac{4}{6}$

Answers

1. _____

2. _____

3. _____

4. _____

5. _____

6. _____

7. _____

8. _____

9. _____

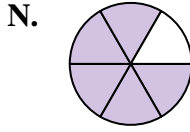
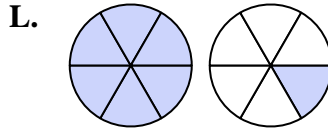
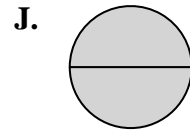
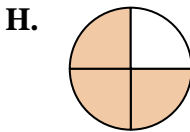
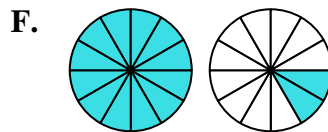
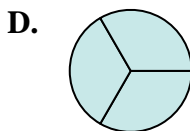
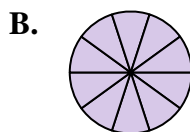
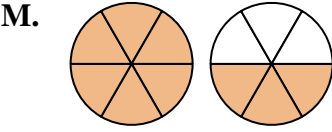
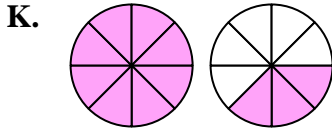
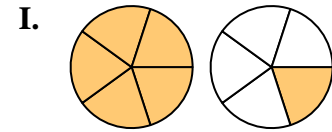
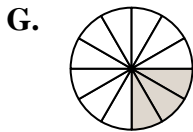
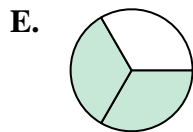
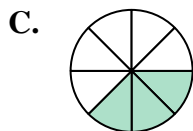
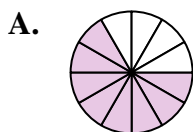
10. _____

11. _____

12. _____

13. _____

14. _____





Determine which letter best represents the sum.

1) $\frac{7}{10} + \frac{3}{10}$

3) $\frac{2}{4} + \frac{1}{4}$

5) $\frac{8}{12} + \frac{6}{12}$

7) $\frac{5}{12} + \frac{3}{12}$

9) $\frac{1}{3} + \frac{1}{3}$

11) $\frac{3}{6} + \frac{2}{6}$

13) $\frac{2}{5} + \frac{4}{5}$

2) $\frac{2}{3} + \frac{1}{3}$

4) $\frac{3}{6} + \frac{4}{6}$

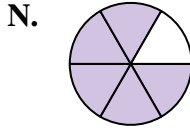
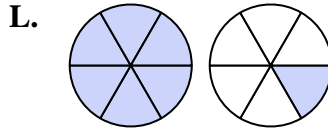
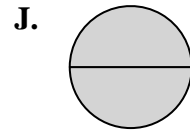
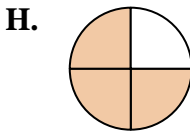
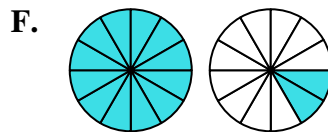
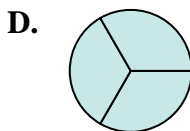
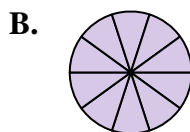
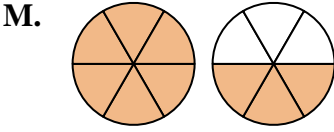
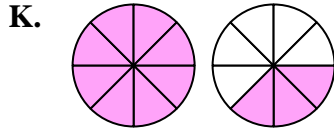
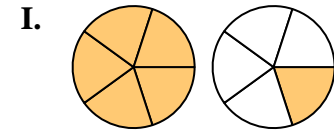
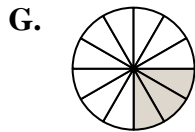
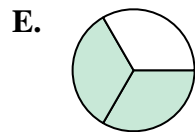
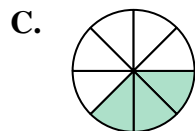
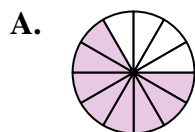
6) $\frac{7}{8} + \frac{4}{8}$

8) $\frac{1}{12} + \frac{2}{12}$

10) $\frac{1}{2} + \frac{1}{2}$

12) $\frac{1}{8} + \frac{2}{8}$

14) $\frac{5}{6} + \frac{4}{6}$



Answers

1. **B** $\frac{10}{10}$

2. **D** $\frac{3}{3}$

3. **H** $\frac{3}{4}$

4. **L** $1\frac{1}{6}$

5. **F** $1\frac{2}{12}$

6. **K** $1\frac{3}{8}$

7. **A** $\frac{8}{12}$

8. **G** $\frac{3}{12}$

9. **E** $\frac{2}{3}$

10. **J** $\frac{2}{2}$

11. **N** $\frac{5}{6}$

12. **C** $\frac{3}{8}$

13. **I** $1\frac{1}{5}$

14. **M** $1\frac{3}{6}$



Determine which letter best represents the sum.

1) $\frac{4}{6} + \frac{5}{6}$

3) $\frac{3}{6} + \frac{2}{6}$

5) $\frac{5}{10} + \frac{2}{10}$

7) $\frac{4}{5} + \frac{3}{5}$

9) $\frac{7}{12} + \frac{6}{12}$

11) $\frac{2}{4} + \frac{3}{4}$

13) $\frac{7}{8} + \frac{4}{8}$

2) $\frac{8}{12} + \frac{10}{12}$

4) $\frac{3}{6} + \frac{5}{6}$

6) $\frac{2}{10} + \frac{7}{10}$

8) $\frac{1}{3} + \frac{1}{3}$

10) $\frac{1}{3} + \frac{2}{3}$

12) $\frac{2}{3} + \frac{2}{3}$

14) $\frac{1}{2} + \frac{1}{2}$

Answers

1. _____

2. _____

3. _____

4. _____

5. _____

6. _____

7. _____

8. _____

9. _____

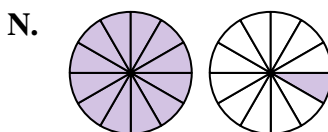
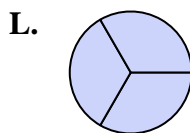
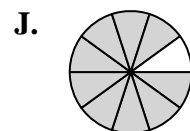
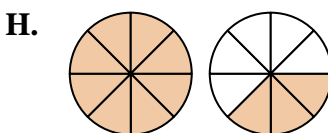
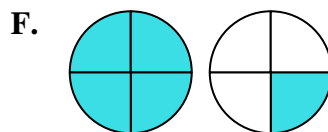
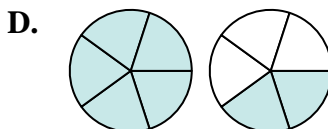
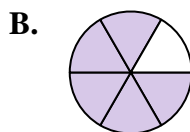
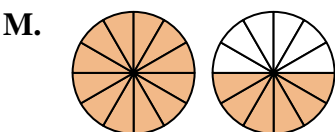
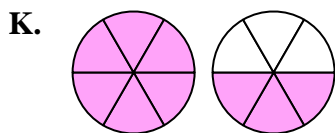
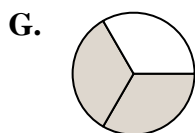
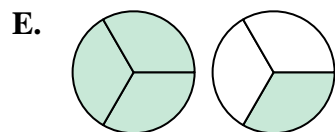
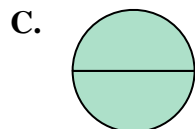
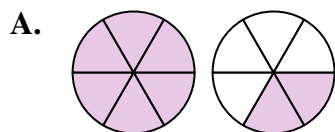
10. _____

11. _____

12. _____

13. _____

14. _____





Determine which letter best represents the sum.

1) $\frac{4}{6} + \frac{5}{6}$

2) $\frac{8}{12} + \frac{10}{12}$

3) $\frac{3}{6} + \frac{2}{6}$

4) $\frac{3}{6} + \frac{5}{6}$

5) $\frac{5}{10} + \frac{2}{10}$

6) $\frac{2}{10} + \frac{7}{10}$

7) $\frac{4}{5} + \frac{3}{5}$

8) $\frac{1}{3} + \frac{1}{3}$

9) $\frac{7}{12} + \frac{6}{12}$

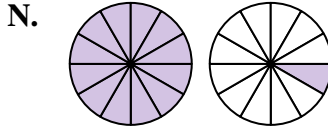
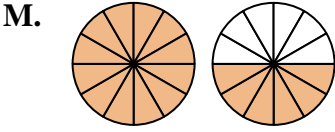
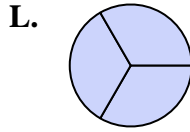
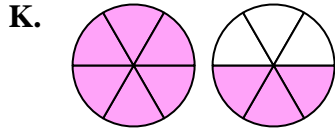
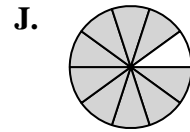
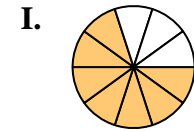
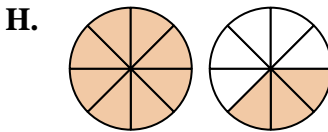
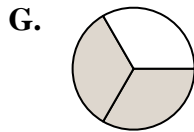
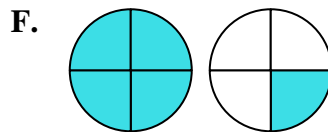
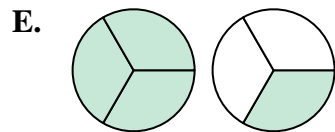
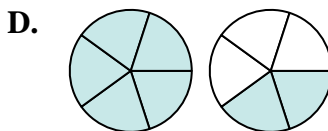
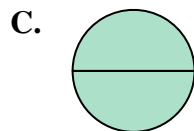
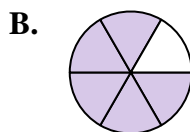
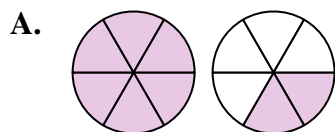
10) $\frac{1}{3} + \frac{2}{3}$

11) $\frac{2}{4} + \frac{3}{4}$

12) $\frac{2}{3} + \frac{2}{3}$

13) $\frac{7}{8} + \frac{4}{8}$

14) $\frac{1}{2} + \frac{1}{2}$



Answers

1. **K** $1\frac{3}{6}$

2. **M** $1\frac{6}{12}$

3. **B** $\frac{5}{6}$

4. **A** $1\frac{2}{6}$

5. **I** $\frac{7}{10}$

6. **J** $\frac{9}{10}$

7. **D** $1\frac{2}{5}$

8. **G** $\frac{2}{3}$

9. **N** $1\frac{1}{12}$

10. **L** $\frac{3}{3}$

11. **F** $1\frac{1}{4}$

12. **E** $1\frac{1}{3}$

13. **H** $1\frac{3}{8}$

14. **C** $\frac{2}{2}$



Determine which letter best represents the sum.

1) $\frac{9}{10} + \frac{7}{10}$

3) $\frac{4}{6} + \frac{1}{6}$

5) $\frac{2}{6} + \frac{1}{6}$

7) $\frac{2}{5} + \frac{1}{5}$

9) $\frac{1}{2} + \frac{1}{2}$

11) $\frac{8}{10} + \frac{5}{10}$

13) $\frac{2}{8} + \frac{3}{8}$

2) $\frac{9}{10} + \frac{1}{10}$

4) $\frac{6}{8} + \frac{3}{8}$

6) $\frac{3}{10} + \frac{3}{10}$

8) $\frac{7}{8} + \frac{1}{8}$

10) $\frac{4}{5} + \frac{4}{5}$

12) $\frac{1}{3} + \frac{2}{3}$

14) $\frac{1}{4} + \frac{1}{4}$

Answers

1. _____

2. _____

3. _____

4. _____

5. _____

6. _____

7. _____

8. _____

9. _____

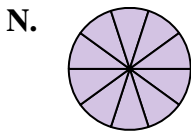
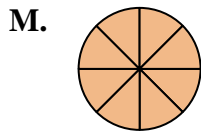
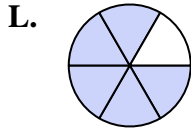
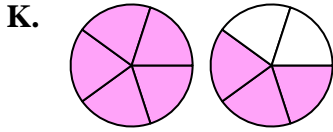
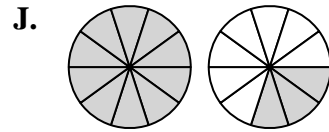
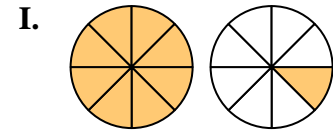
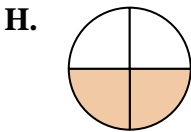
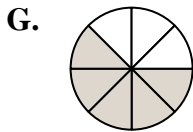
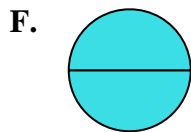
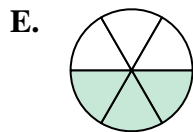
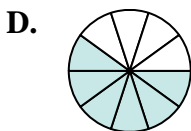
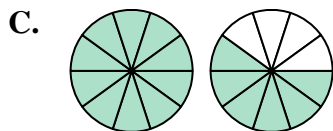
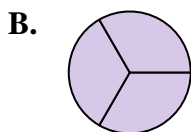
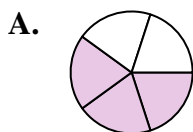
10. _____

11. _____

12. _____

13. _____

14. _____





Determine which letter best represents the sum.

1) $\frac{9}{10} + \frac{7}{10}$

2) $\frac{9}{10} + \frac{1}{10}$

3) $\frac{4}{6} + \frac{1}{6}$

4) $\frac{6}{8} + \frac{3}{8}$

5) $\frac{2}{6} + \frac{1}{6}$

6) $\frac{3}{10} + \frac{3}{10}$

7) $\frac{2}{5} + \frac{1}{5}$

8) $\frac{7}{8} + \frac{1}{8}$

9) $\frac{1}{2} + \frac{1}{2}$

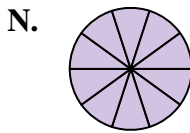
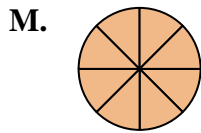
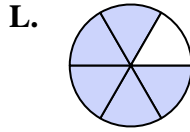
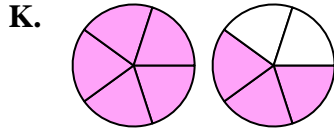
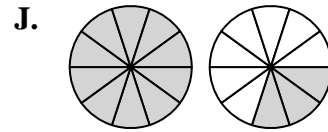
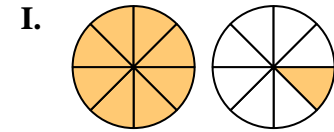
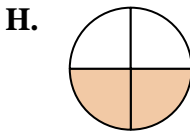
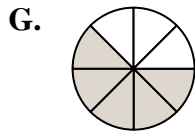
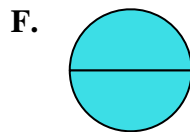
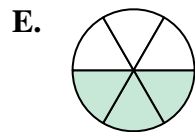
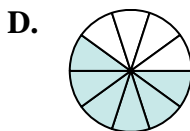
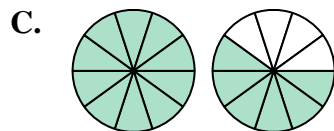
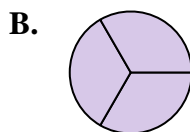
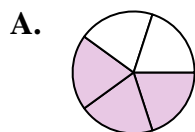
10) $\frac{4}{5} + \frac{4}{5}$

11) $\frac{8}{10} + \frac{5}{10}$

12) $\frac{1}{3} + \frac{2}{3}$

13) $\frac{2}{8} + \frac{3}{8}$

14) $\frac{1}{4} + \frac{1}{4}$



Answers

1. **C** $1 \frac{6}{10}$

2. **N** $1 \frac{10}{10}$

3. **L** $\frac{5}{6}$

4. **I** $1 \frac{1}{8}$

5. **E** $\frac{3}{6}$

6. **D** $\frac{6}{10}$

7. **A** $\frac{3}{5}$

8. **M** $\frac{8}{8}$

9. **F** $\frac{2}{2}$

10. **K** $1 \frac{3}{5}$

11. **J** $1 \frac{3}{10}$

12. **B** $\frac{3}{3}$

13. **G** $\frac{5}{8}$

14. **H** $\frac{2}{4}$



Determine which letter best represents the sum.

1) $\frac{1}{8} + \frac{2}{8}$

3) $\frac{2}{6} + \frac{3}{6}$

5) $\frac{3}{5} + \frac{1}{5}$

7) $\frac{1}{2} + \frac{1}{2}$

9) $\frac{3}{6} + \frac{5}{6}$

11) $\frac{3}{10} + \frac{5}{10}$

13) $\frac{5}{8} + \frac{2}{8}$

2) $\frac{4}{6} + \frac{3}{6}$

4) $\frac{4}{6} + \frac{2}{6}$

6) $\frac{3}{4} + \frac{3}{4}$

8) $\frac{4}{5} + \frac{4}{5}$

10) $\frac{2}{10} + \frac{9}{10}$

12) $\frac{1}{6} + \frac{1}{6}$

14) $\frac{2}{8} + \frac{2}{8}$

Answers

1. _____

2. _____

3. _____

4. _____

5. _____

6. _____

7. _____

8. _____

9. _____

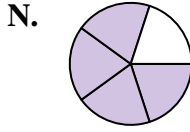
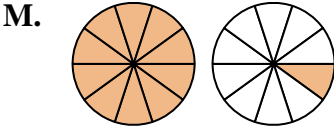
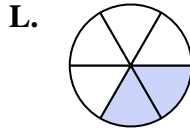
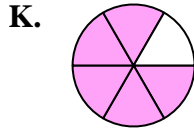
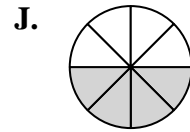
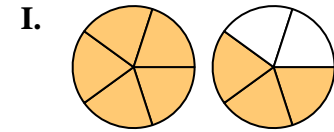
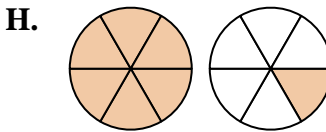
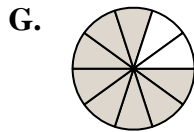
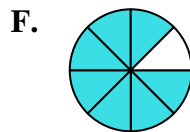
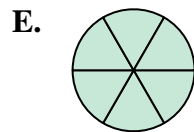
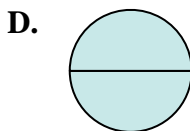
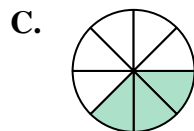
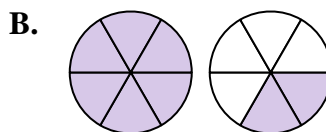
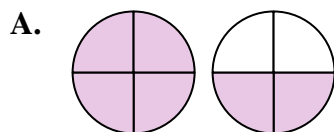
10. _____

11. _____

12. _____

13. _____

14. _____





Determine which letter best represents the sum.

1) $\frac{1}{8} + \frac{2}{8}$

3) $\frac{2}{6} + \frac{3}{6}$

5) $\frac{3}{5} + \frac{1}{5}$

7) $\frac{1}{2} + \frac{1}{2}$

9) $\frac{3}{6} + \frac{5}{6}$

11) $\frac{3}{10} + \frac{5}{10}$

13) $\frac{5}{8} + \frac{2}{8}$

2) $\frac{4}{6} + \frac{3}{6}$

4) $\frac{4}{6} + \frac{2}{6}$

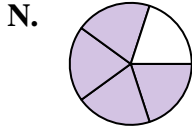
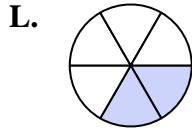
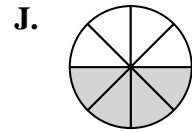
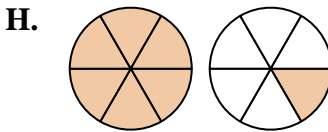
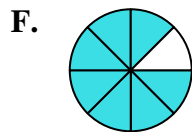
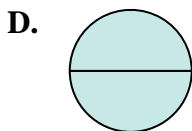
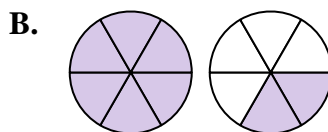
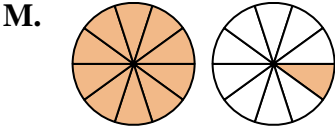
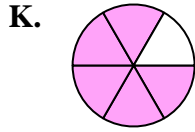
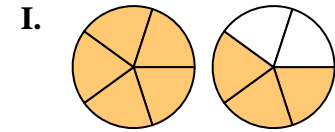
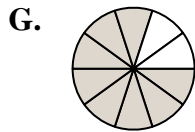
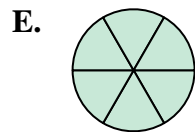
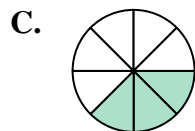
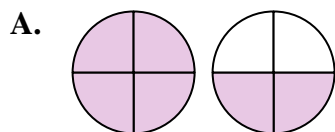
6) $\frac{3}{4} + \frac{3}{4}$

8) $\frac{4}{5} + \frac{4}{5}$

10) $\frac{2}{10} + \frac{9}{10}$

12) $\frac{1}{6} + \frac{1}{6}$

14) $\frac{2}{8} + \frac{2}{8}$



Answers

1. **C** $\frac{3}{8}$

2. **H** $1\frac{1}{6}$

3. **K** $\frac{5}{6}$

4. **E** $\frac{6}{6}$

5. **N** $\frac{4}{5}$

6. **A** $1\frac{2}{4}$

7. **D** $\frac{2}{2}$

8. **I** $1\frac{3}{5}$

9. **B** $1\frac{2}{6}$

10. **M** $1\frac{1}{10}$

11. **G** $\frac{8}{10}$

12. **L** $\frac{2}{6}$

13. **F** $\frac{7}{8}$

14. **J** $\frac{4}{8}$



Determine which letter best represents the sum.

1) $\frac{2}{3} + \frac{2}{3}$

2) $\frac{2}{8} + \frac{2}{8}$

3) $\frac{4}{12} + \frac{8}{12}$

4) $\frac{4}{12} + \frac{7}{12}$

5) $\frac{1}{2} + \frac{1}{2}$

6) $\frac{3}{5} + \frac{3}{5}$

7) $\frac{2}{6} + \frac{4}{6}$

8) $\frac{1}{5} + \frac{2}{5}$

9) $\frac{6}{10} + \frac{8}{10}$

10) $\frac{1}{3} + \frac{1}{3}$

11) $\frac{9}{10} + \frac{4}{10}$

12) $\frac{1}{8} + \frac{5}{8}$

13) $\frac{1}{4} + \frac{1}{4}$

14) $\frac{9}{10} + \frac{7}{10}$

Answers

1. _____

2. _____

3. _____

4. _____

5. _____

6. _____

7. _____

8. _____

9. _____

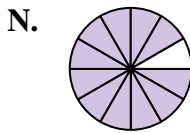
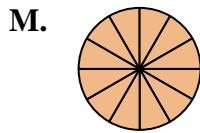
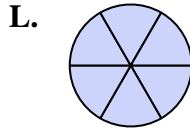
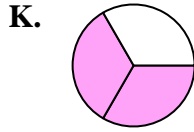
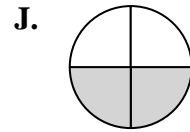
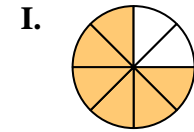
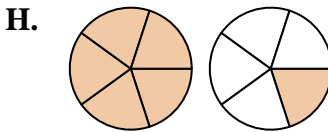
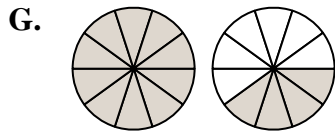
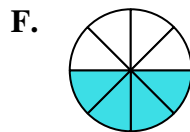
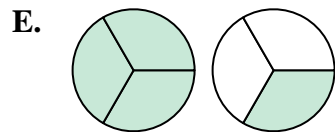
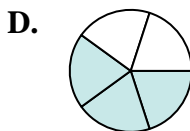
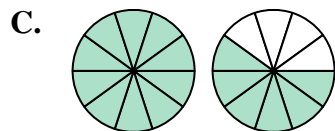
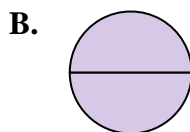
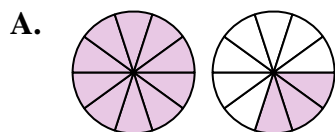
10. _____

11. _____

12. _____

13. _____

14. _____





Determine which letter best represents the sum.

1) $\frac{2}{3} + \frac{2}{3}$

2) $\frac{2}{8} + \frac{2}{8}$

3) $\frac{4}{12} + \frac{8}{12}$

4) $\frac{4}{12} + \frac{7}{12}$

5) $\frac{1}{2} + \frac{1}{2}$

6) $\frac{3}{5} + \frac{3}{5}$

7) $\frac{2}{6} + \frac{4}{6}$

8) $\frac{1}{5} + \frac{2}{5}$

9) $\frac{6}{10} + \frac{8}{10}$

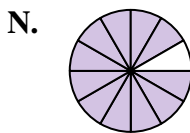
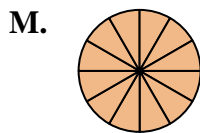
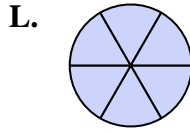
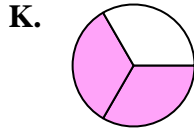
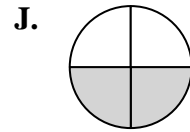
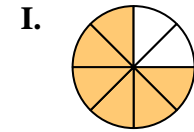
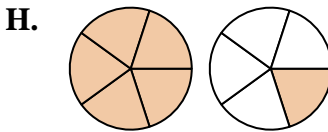
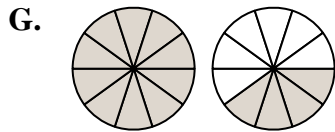
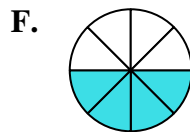
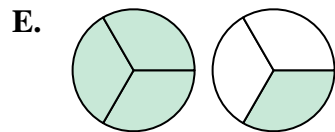
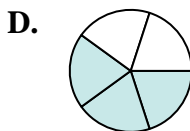
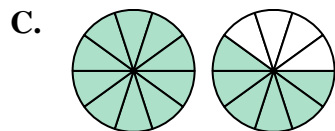
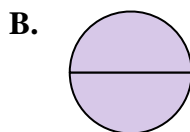
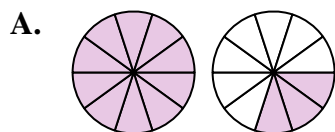
10) $\frac{1}{3} + \frac{1}{3}$

11) $\frac{9}{10} + \frac{4}{10}$

12) $\frac{1}{8} + \frac{5}{8}$

13) $\frac{1}{4} + \frac{1}{4}$

14) $\frac{9}{10} + \frac{7}{10}$



Answers

1. **E** $1\frac{1}{3}$

2. **F** $\frac{4}{8}$

3. **M** $\frac{12}{12}$

4. **N** $1\frac{11}{12}$

5. **B** $\frac{2}{2}$

6. **H** $1\frac{1}{5}$

7. **L** $\frac{6}{6}$

8. **D** $\frac{3}{5}$

9. **G** $1\frac{4}{10}$

10. **K** $\frac{2}{3}$

11. **A** $1\frac{3}{10}$

12. **I** $\frac{6}{8}$

13. **J** $\frac{2}{4}$

14. **C** $1\frac{6}{10}$



Determine which letter best represents the sum.

1) $\frac{2}{3} + \frac{2}{3}$

3) $\frac{1}{2} + \frac{1}{2}$

5) $\frac{1}{4} + \frac{2}{4}$

7) $\frac{4}{8} + \frac{1}{8}$

9) $\frac{6}{10} + \frac{9}{10}$

11) $\frac{3}{10} + \frac{3}{10}$

13) $\frac{2}{6} + \frac{4}{6}$

2) $\frac{3}{5} + \frac{3}{5}$

4) $\frac{2}{4} + \frac{3}{4}$

6) $\frac{4}{12} + \frac{6}{12}$

8) $\frac{2}{5} + \frac{1}{5}$

10) $\frac{6}{12} + \frac{11}{12}$

12) $\frac{2}{8} + \frac{1}{8}$

14) $\frac{3}{5} + \frac{4}{5}$

Answers

1. _____

2. _____

3. _____

4. _____

5. _____

6. _____

7. _____

8. _____

9. _____

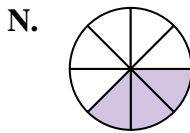
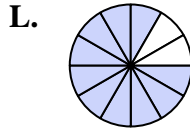
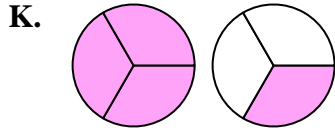
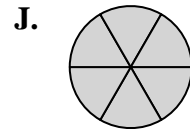
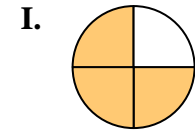
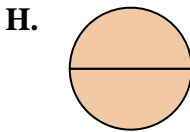
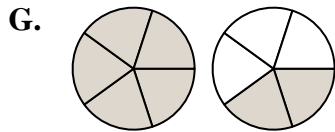
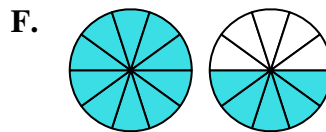
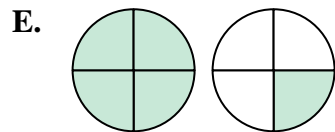
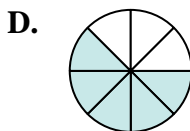
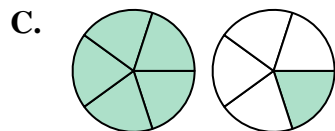
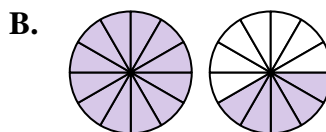
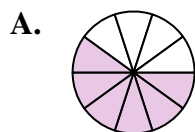
10. _____

11. _____

12. _____

13. _____

14. _____





Determine which letter best represents the sum.

1) $\frac{2}{3} + \frac{2}{3}$

2) $\frac{3}{5} + \frac{3}{5}$

3) $\frac{1}{2} + \frac{1}{2}$

4) $\frac{2}{4} + \frac{3}{4}$

5) $\frac{1}{4} + \frac{2}{4}$

6) $\frac{4}{12} + \frac{6}{12}$

7) $\frac{4}{8} + \frac{1}{8}$

8) $\frac{2}{5} + \frac{1}{5}$

9) $\frac{6}{10} + \frac{9}{10}$

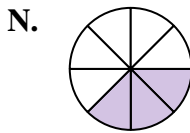
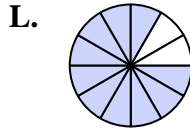
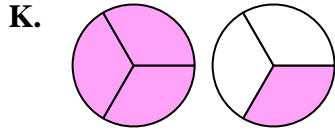
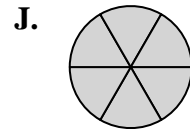
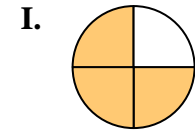
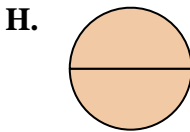
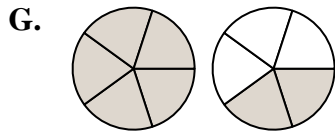
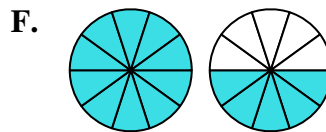
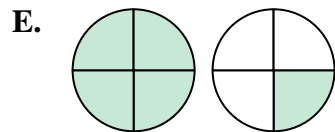
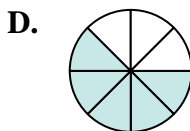
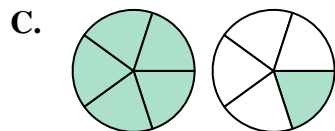
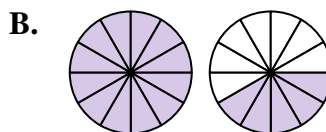
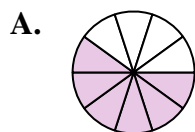
10) $\frac{6}{12} + \frac{11}{12}$

11) $\frac{3}{10} + \frac{3}{10}$

12) $\frac{2}{8} + \frac{1}{8}$

13) $\frac{2}{6} + \frac{4}{6}$

14) $\frac{3}{5} + \frac{4}{5}$



Answers

1. **K** $1\frac{1}{3}$

2. **C** $1\frac{1}{5}$

3. **H** $\frac{2}{2}$

4. **E** $1\frac{1}{4}$

5. **I** $\frac{3}{4}$

6. **L** $\frac{10}{12}$

7. **D** $\frac{5}{8}$

8. **M** $\frac{3}{5}$

9. **F** $1\frac{5}{10}$

10. **B** $1\frac{5}{12}$

11. **A** $\frac{6}{10}$

12. **N** $\frac{3}{8}$

13. **J** $\frac{6}{6}$

14. **G** $1\frac{2}{5}$