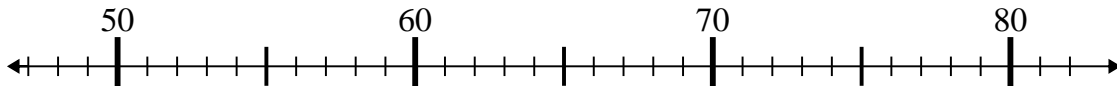




Use the numberlines to solve each problem.

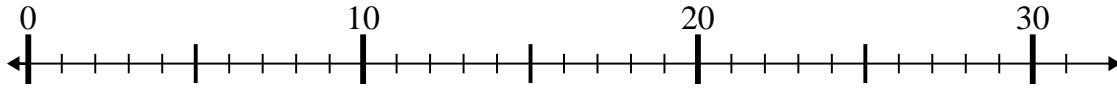
Answers

1)  $72 - 25 =$



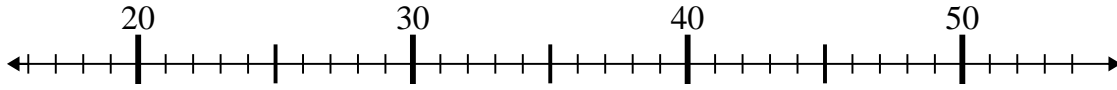
1. \_\_\_\_\_

2)  $27 - 1 =$



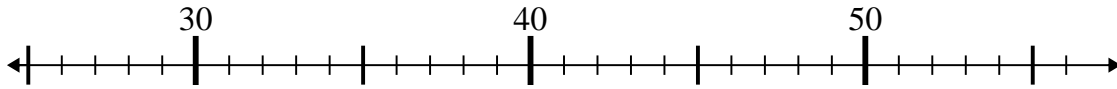
2. \_\_\_\_\_

3)  $26 + 7 =$



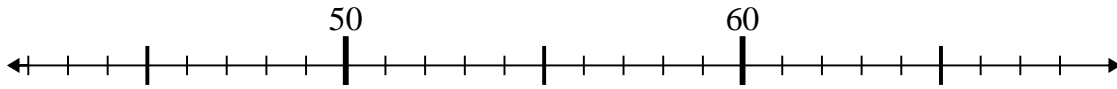
3. \_\_\_\_\_

4)  $33 - 8 =$



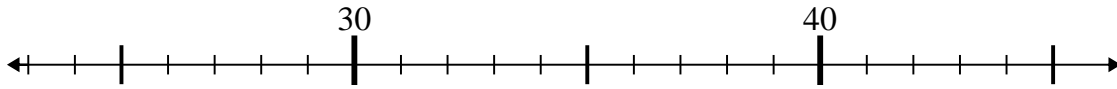
4. \_\_\_\_\_

5)  $42 + 14 =$



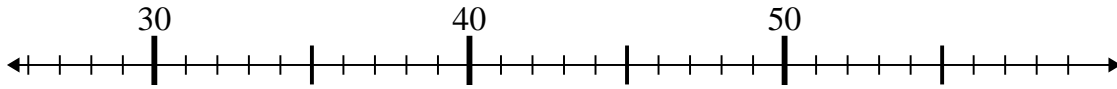
5. \_\_\_\_\_

6)  $25 + 14 =$



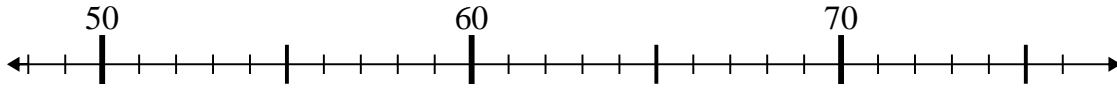
6. \_\_\_\_\_

7)  $59 - 28 =$



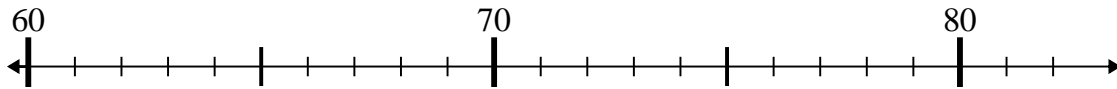
7. \_\_\_\_\_

8)  $53 + 16 =$



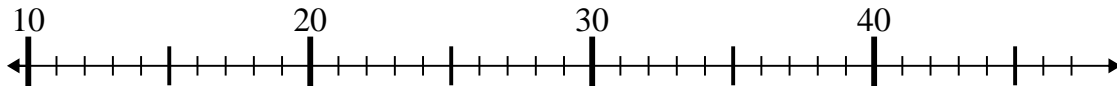
8. \_\_\_\_\_

9)  $66 + 7 =$



9. \_\_\_\_\_

10)  $28 - 0 =$

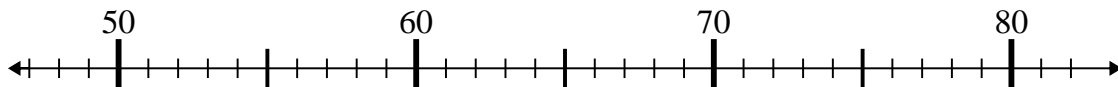


10. \_\_\_\_\_

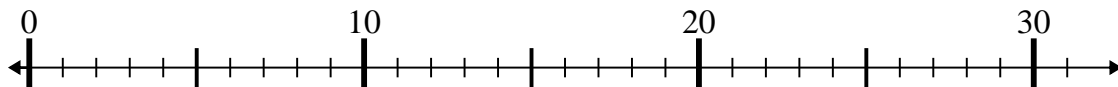


Use the numberlines to solve each problem.

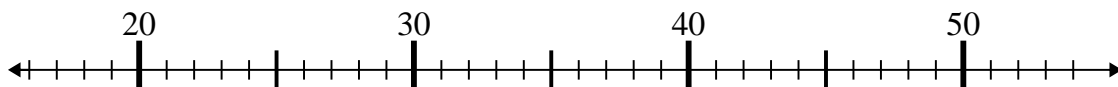
1)  $72 - 25 =$



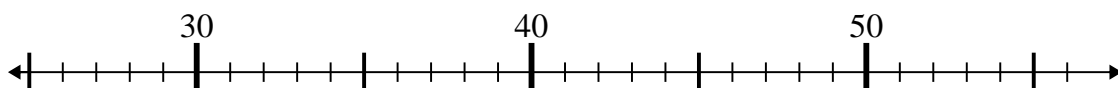
2)  $27 - 1 =$



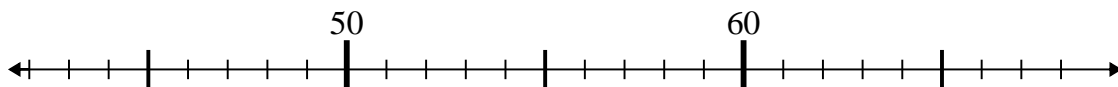
3)  $26 + 7 =$



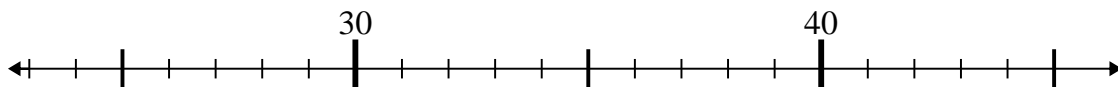
4)  $33 - 8 =$



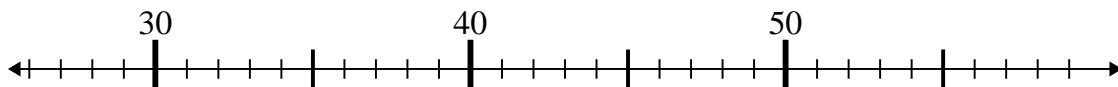
5)  $42 + 14 =$



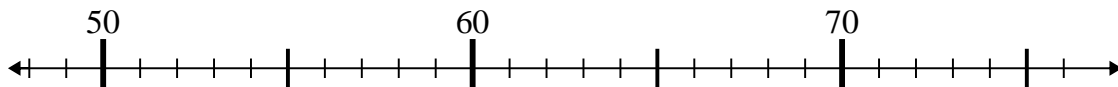
6)  $25 + 14 =$



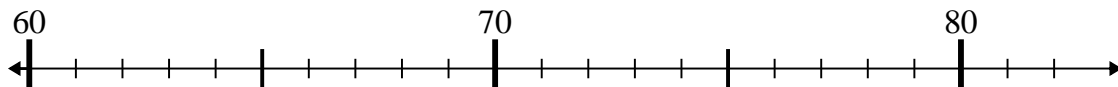
7)  $59 - 28 =$



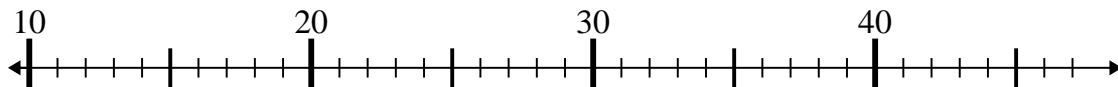
8)  $53 + 16 =$



9)  $66 + 7 =$



10)  $28 - 0 =$



Answers

1. 47

2. 26

3. 33

4. 25

5. 56

6. 39

7. 31

8. 69

9. 73

10. 28