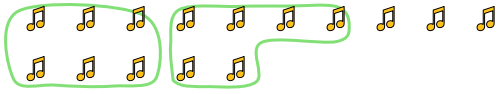




Use the shapes provided to answer the questions.

Answers

Ex) There are 15 shapes below. How many groups of 6 can you make with them? How many will you have left over?

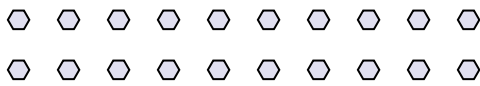


1) There are 26 shapes below. How many groups of 5 can you make with them? How many will you have left over?

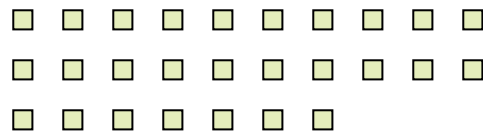


Ex. 2 3

2) There are 20 shapes below. How many groups of 2 can you make with them? How many will you have left over?



3) There are 27 shapes below. How many groups of 8 can you make with them? How many will you have left over?



1. _____

2. _____

3. _____

4. _____

5. _____


6. _____

7. _____

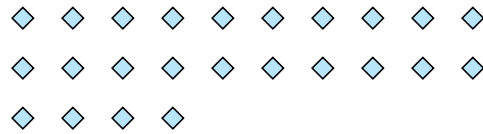
8. _____

9. _____

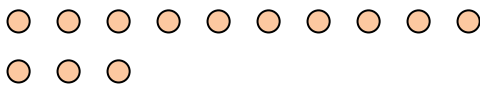
4) There are 22 shapes below. How many groups of 8 can you make with them? How many will you have left over?



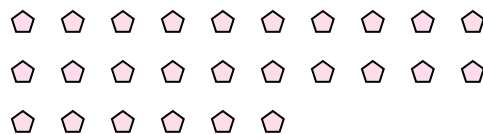
5) There are 24 shapes below. How many groups of 6 can you make with them? How many will you have left over?



6) There are 13 shapes below. How many groups of 7 can you make with them? How many will you have left over?




7) There are 26 shapes below. How many groups of 2 can you make with them? How many will you have left over?



8) There are 11 shapes below. How many groups of 3 can you make with them? How many will you have left over?



9) There are 23 shapes below. How many groups of 2 can you make with them? How many will you have left over?





Use the shapes provided to answer the questions.

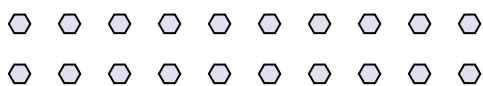
Ex) There are 15 shapes below. How many groups of 6 can you make with them? How many will you have left over?



1) There are 26 shapes below. How many groups of 5 can you make with them? How many will you have left over?




2) There are 20 shapes below. How many groups of 2 can you make with them? How many will you have left over?



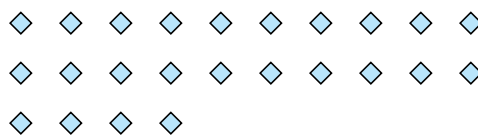
3) There are 27 shapes below. How many groups of 8 can you make with them? How many will you have left over?



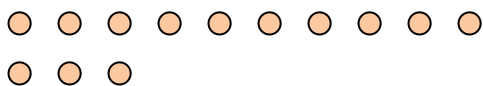
4) There are 22 shapes below. How many groups of 8 can you make with them? How many will you have left over?



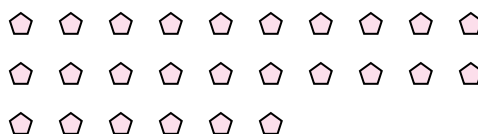
5) There are 24 shapes below. How many groups of 6 can you make with them? How many will you have left over?



6) There are 13 shapes below. How many groups of 7 can you make with them? How many will you have left over?




7) There are 26 shapes below. How many groups of 2 can you make with them? How many will you have left over?



8) There are 11 shapes below. How many groups of 3 can you make with them? How many will you have left over?



9) There are 23 shapes below. How many groups of 2 can you make with them? How many will you have left over?



Answers

Ex. 2 3

1. 5 1

2. 10 0

3. 3 3

4. 2 6

5. 4 0

6. 1 6

7. 13 0

8. 3 2

9. 11 1