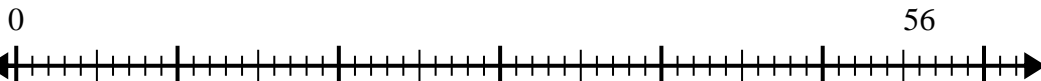




Use the number line to solve the division problem.

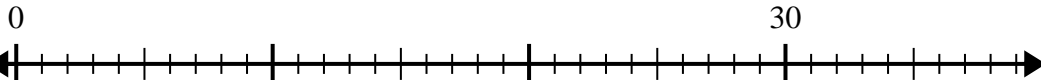
Answers

1) $56 \div 7 =$



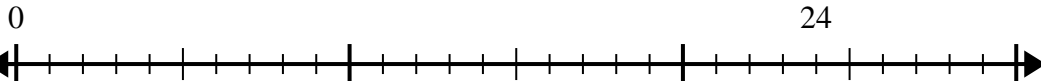
1. _____

2) $30 \div 5 =$



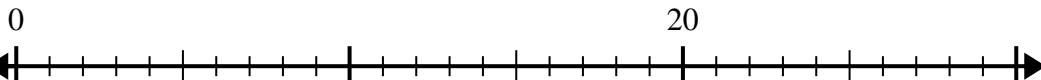
2. _____

3) $24 \div 4 =$



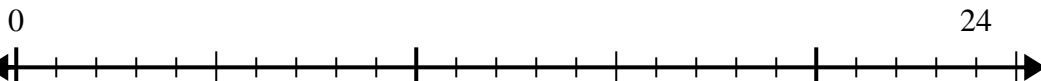
3. _____

4) $20 \div 5 =$



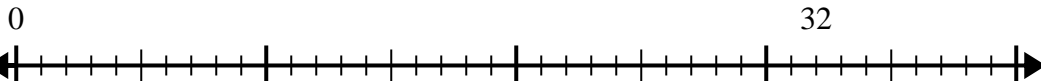
4. _____

5) $24 \div 8 =$



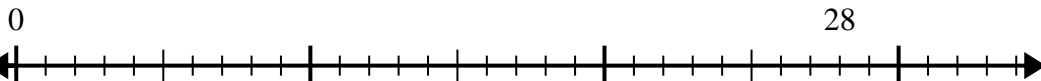
5. _____

6) $32 \div 4 =$



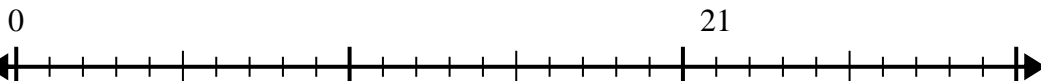
6. _____

7) $28 \div 7 =$



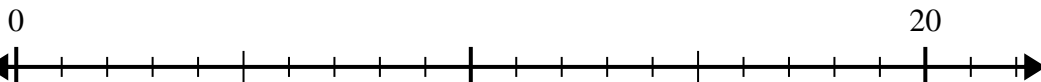
7. _____

8) $21 \div 7 =$



8. _____

9) $20 \div 4 =$



9. _____

10) $48 \div 6 =$



10. _____

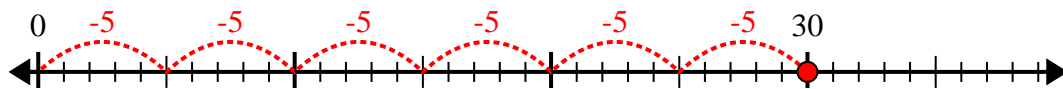


Use the number line to solve the division problem.

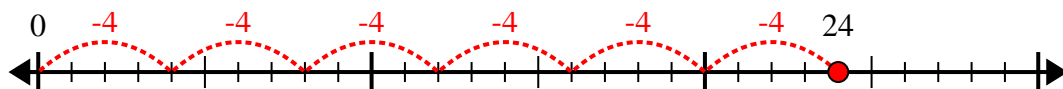
1) $56 \div 7 =$



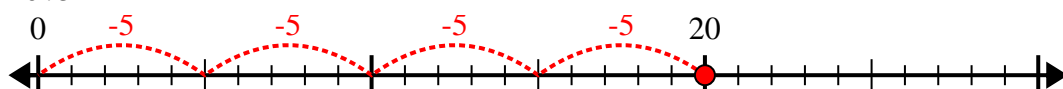
2) $30 \div 5 =$



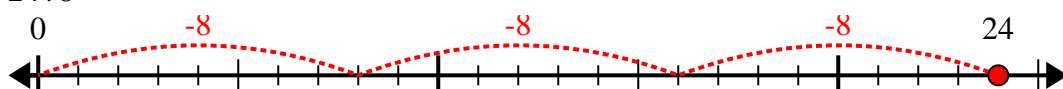
3) $24 \div 4 =$



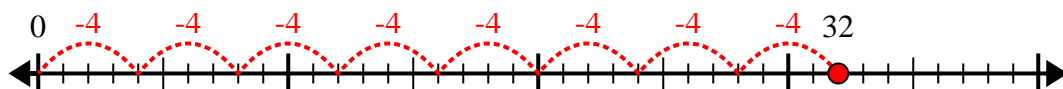
4) $20 \div 5 =$



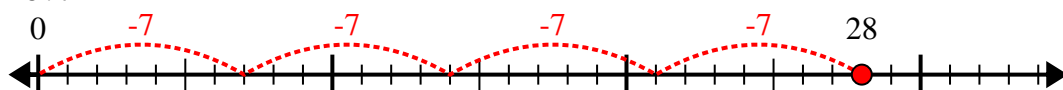
5) $24 \div 8 =$



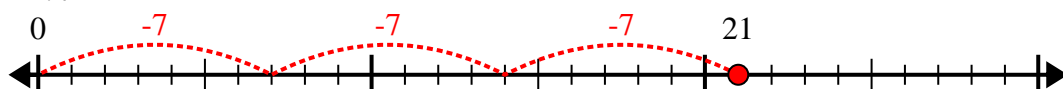
6) $32 \div 4 =$



7) $28 \div 7 =$



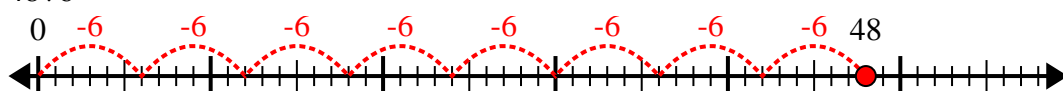
8) $21 \div 7 =$



9) $20 \div 4 =$



10) $48 \div 6 =$



Answers

1. 8

2. 6

3. 6

4. 4

5. 3

6. 8

7. 4

8. 3

9. 5

10. 8