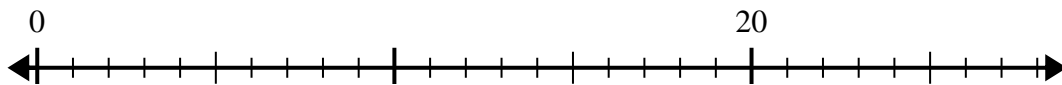


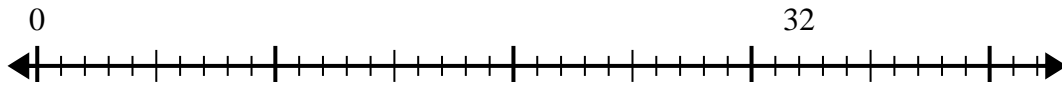


Use the number line to solve the division problem.

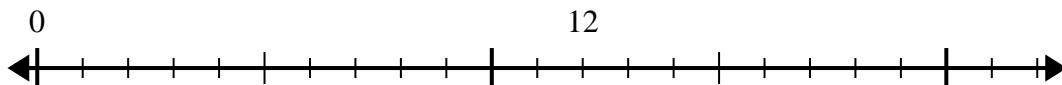
1) $20 \div 4 =$



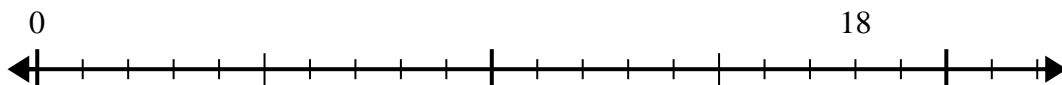
2) $32 \div 8 =$



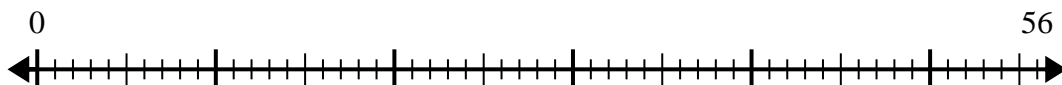
3) $12 \div 4 =$



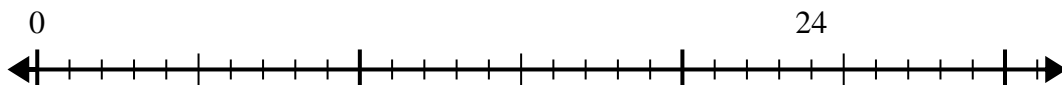
4) $18 \div 6 =$



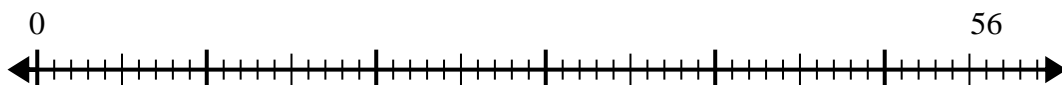
5) $56 \div 8 =$



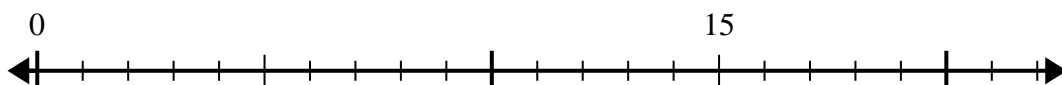
6) $24 \div 8 =$



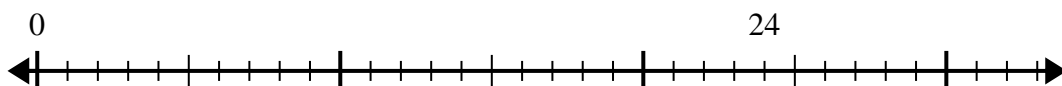
7) $56 \div 7 =$



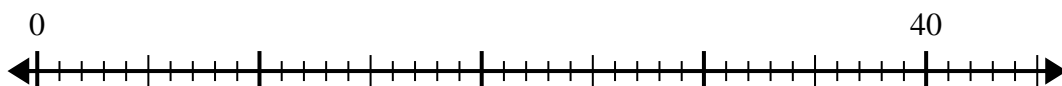
8) $15 \div 5 =$



9) $24 \div 4 =$



10) $40 \div 5 =$

**Answers**

1. _____

2. _____

3. _____

4. _____

5. _____

6. _____

7. _____

8. _____

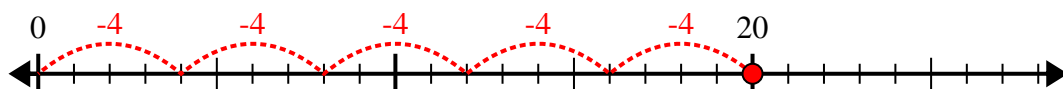
9. _____

10. _____

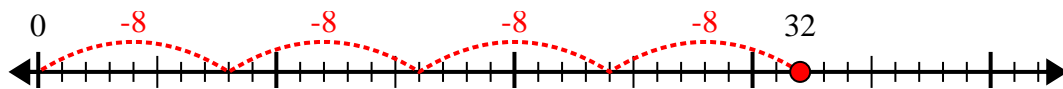


Use the number line to solve the division problem.

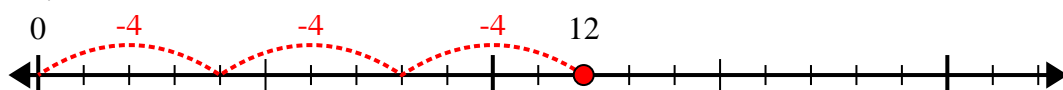
1) $20 \div 4 =$



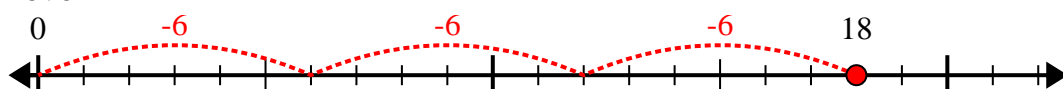
2) $32 \div 8 =$



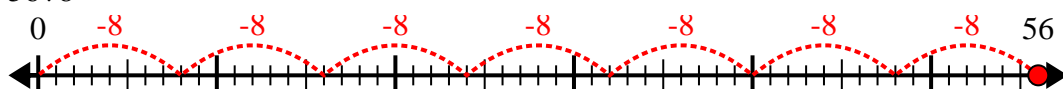
3) $12 \div 4 =$



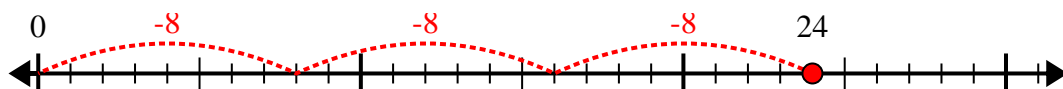
4) $18 \div 6 =$



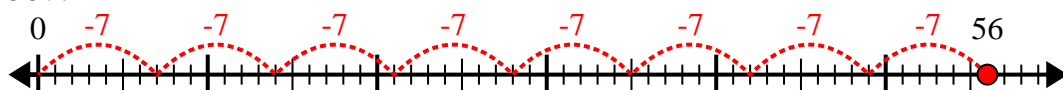
5) $56 \div 8 =$



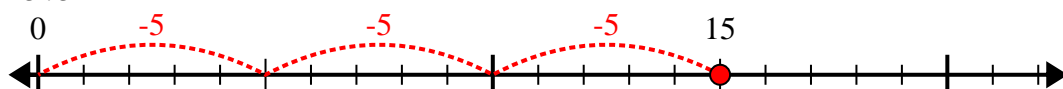
6) $24 \div 8 =$



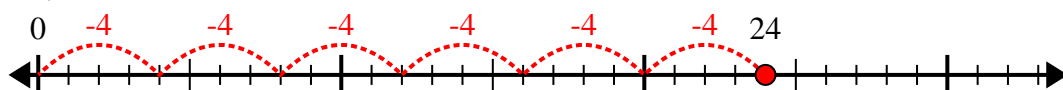
7) $56 \div 7 =$



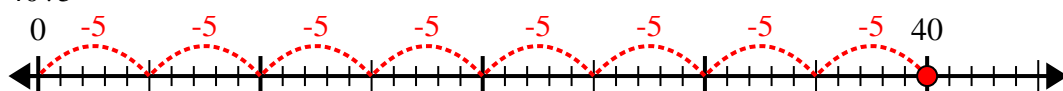
8) $15 \div 5 =$



9) $24 \div 4 =$



10) $40 \div 5 =$



Answers

1. 5

2. 4

3. 3

4. 3

5. 7

6. 3

7. 8

8. 3

9. 6

10. 8