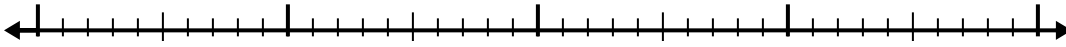


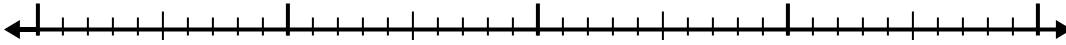


Use the number line to solve each problem.

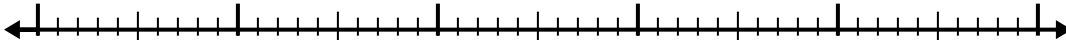
1) $8.8 - 2.8 =$




2) $6.7 - 2.5 =$



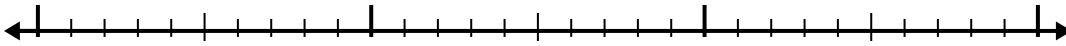
3) $7.3 - 2.7 =$



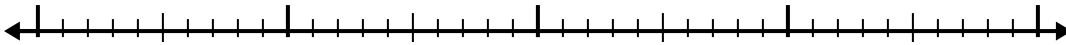
4) $11.2 - 3.4 =$



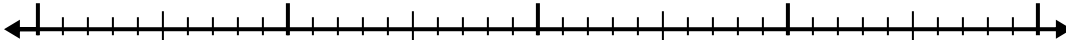
5) $2.9 - 1.6 =$



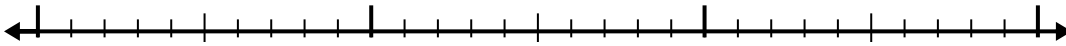
6) $8.6 - 2.3 =$



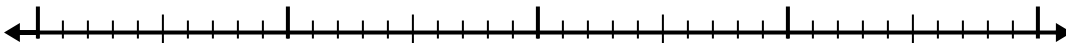
7) $9 - 2.6 =$




8) $2.1 - 1.1 =$



9) $9 - 1.8 =$



10) $8.3 - 1.4 =$



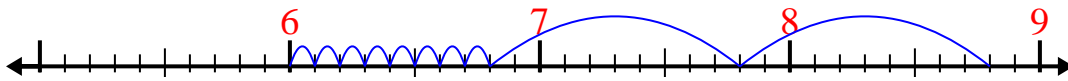
Answers

- 1. _____
- 2. _____
- 3. _____
- 4. _____
- 5. _____
- 6. _____
- 7. _____
- 8. _____
- 9. _____
- 10. _____

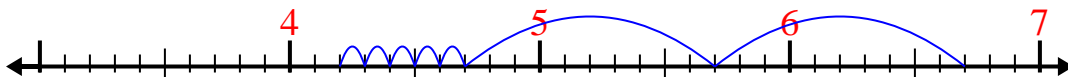


Use the number line to solve each problem.

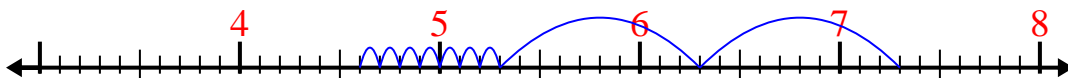
1) $8.8 - 2.8 =$



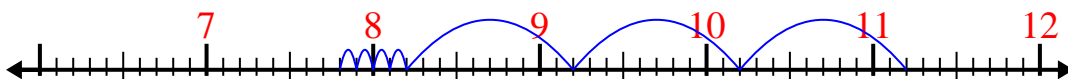
2) $6.7 - 2.5 =$



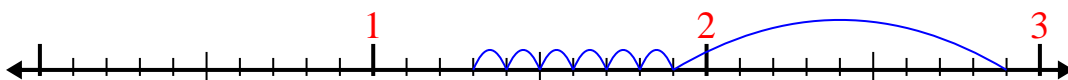
3) $7.3 - 2.7 =$



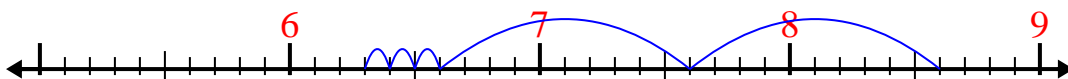
4) $11.2 - 3.4 =$



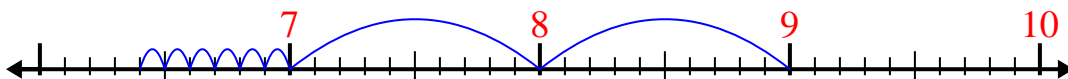
5) $2.9 - 1.6 =$



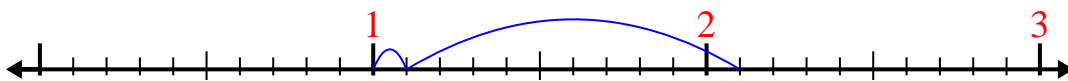
6) $8.6 - 2.3 =$



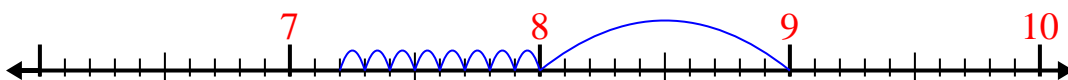
7) $9 - 2.6 =$



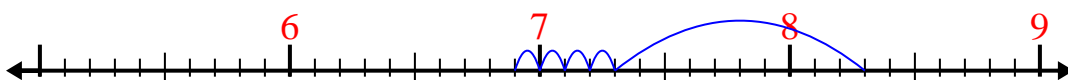
8) $2.1 - 1.1 =$



9) $9 - 1.8 =$



10) $8.3 - 1.4 =$

Answers1. 62. 4.23. 4.64. 7.85. 1.36. 6.37. 6.48. 19. 7.210. 6.9