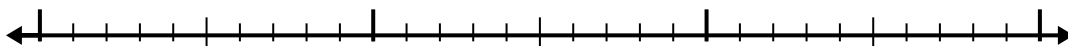





Use the number line to solve each problem.


1)  $2.5 - 1.3 =$



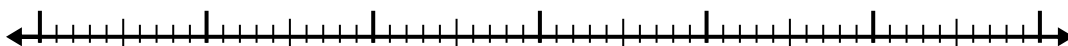
2)  $10.8 - 2.4 =$



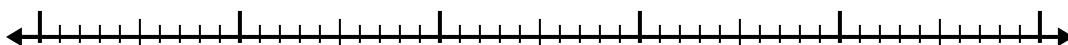
3)  $4.5 - 1.7 =$



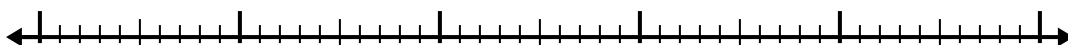
4)  $9.9 - 3.8 =$



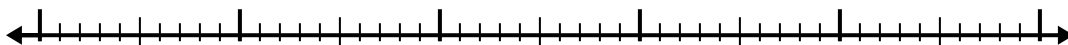
5)  $4.4 - 2.5 =$



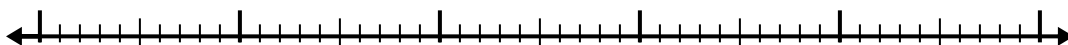
6)  $9.7 - 2.4 =$



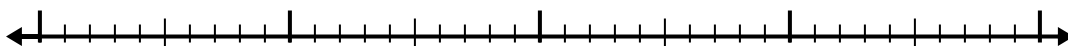
7)  $12.6 - 3.7 =$



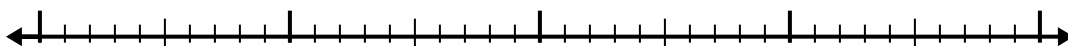
8)  $6.2 - 2.7 =$



9)  $7.7 - 1.6 =$



10)  $6.5 - 2.1 =$



Answers

1. \_\_\_\_\_

2. \_\_\_\_\_

3. \_\_\_\_\_

4. \_\_\_\_\_

5. \_\_\_\_\_

6. \_\_\_\_\_

7. \_\_\_\_\_

8. \_\_\_\_\_

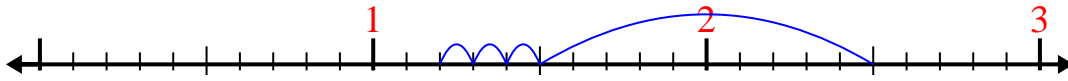
9. \_\_\_\_\_

10. \_\_\_\_\_

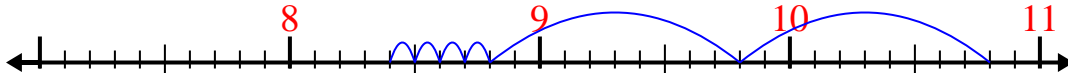


Use the number line to solve each problem.

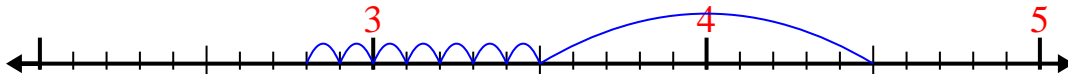
1)  $2.5 - 1.3 =$



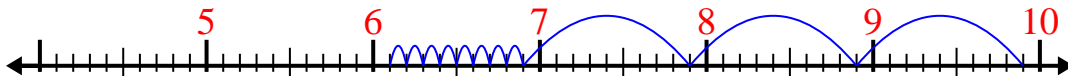
2)  $10.8 - 2.4 =$



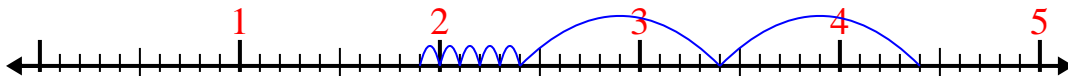
3)  $4.5 - 1.7 =$



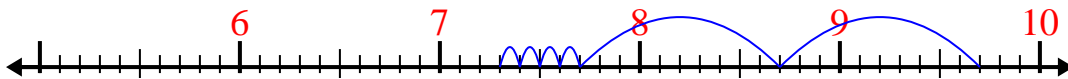
4)  $9.9 - 3.8 =$



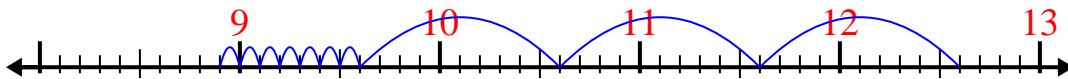
5)  $4.4 - 2.5 =$



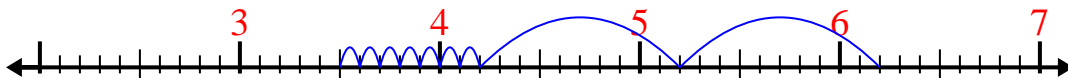
6)  $9.7 - 2.4 =$



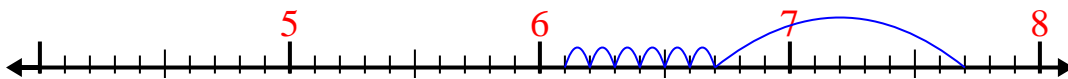
7)  $12.6 - 3.7 =$



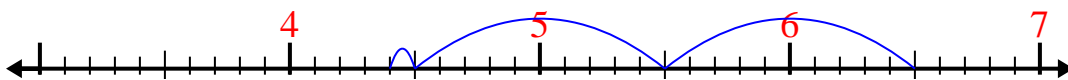
8)  $6.2 - 2.7 =$



9)  $7.7 - 1.6 =$



10)  $6.5 - 2.1 =$

Answers1. 1.22. 8.43. 2.84. 6.15. 1.96. 7.37. 8.98. 3.59. 6.110. 4.4