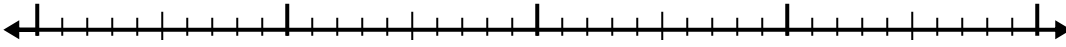


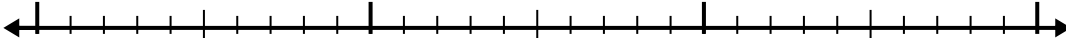


Use the number line to solve each problem.

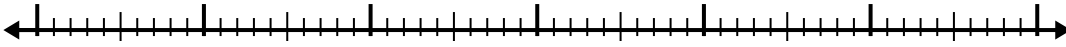
1)  $2.6 + 2.1 =$



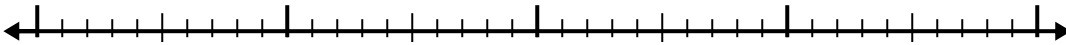
2)  $1.9 + 1.8 =$



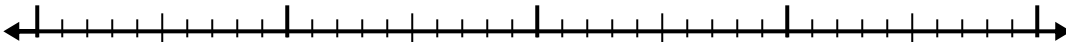
3)  $5.3 + 3.9 =$




4)  $3.6 + 2.4 =$



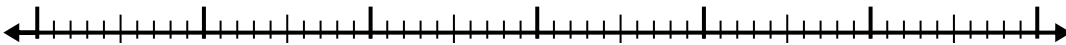
5)  $7 + 2.8 =$



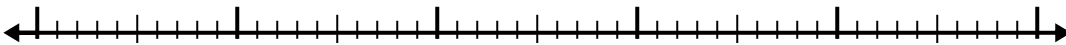
6)  $6.1 + 3.6 =$



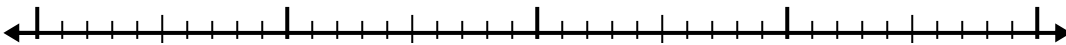
7)  $8.6 + 3.4 =$



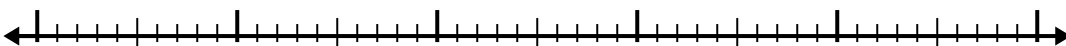
8)  $7.6 + 2.8 =$



9)  $4.5 + 1.5 =$



10)  $8.5 + 3.2 =$



Answers

1. \_\_\_\_\_

2. \_\_\_\_\_

3. \_\_\_\_\_

4. \_\_\_\_\_

5. \_\_\_\_\_

6. \_\_\_\_\_

7. \_\_\_\_\_

8. \_\_\_\_\_

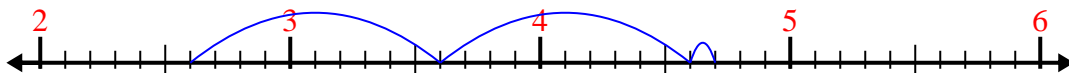
9. \_\_\_\_\_

10. \_\_\_\_\_

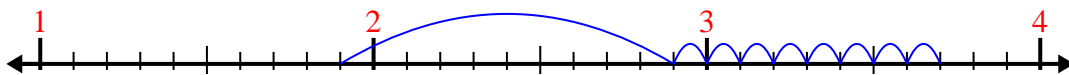


Use the number line to solve each problem.

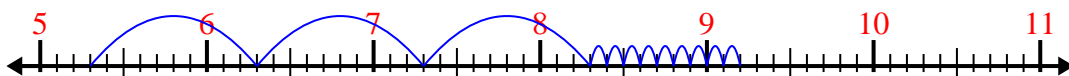
1)  $2.6 + 2.1 =$



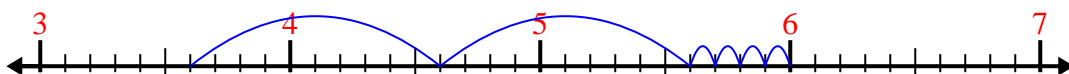
2)  $1.9 + 1.8 =$



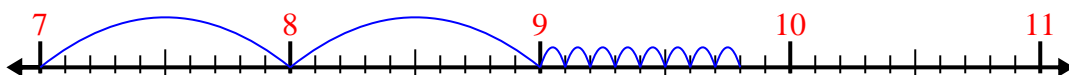
3)  $5.3 + 3.9 =$



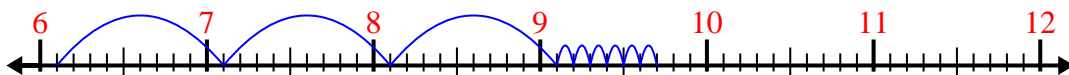
4)  $3.6 + 2.4 =$



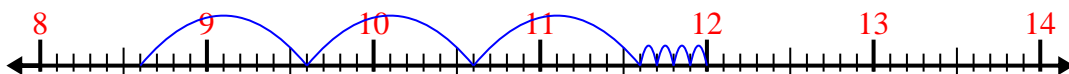
5)  $7 + 2.8 =$



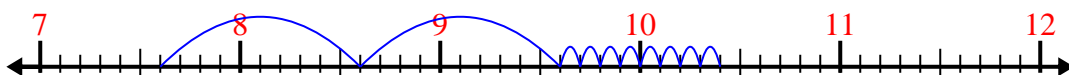
6)  $6.1 + 3.6 =$



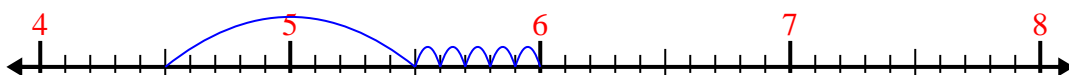
7)  $8.6 + 3.4 =$



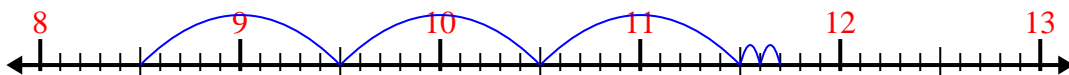
8)  $7.6 + 2.8 =$



9)  $4.5 + 1.5 =$



10)  $8.5 + 3.2 =$



Answers

1. 4.7

2. 3.7

3. 9.2

4. 6.0

5. 9.8

6. 9.7

7. 12.0

8. 10.4

9. 6.0

10. 11.7