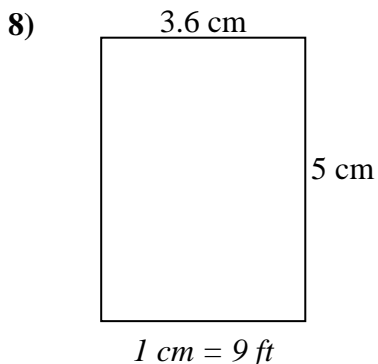
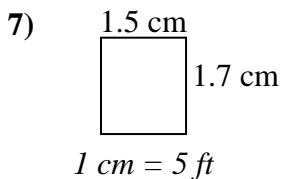
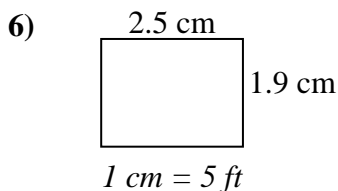
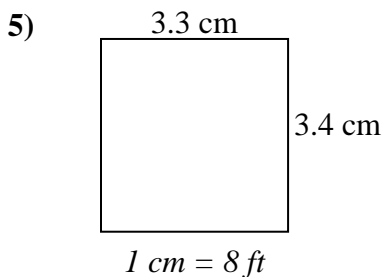
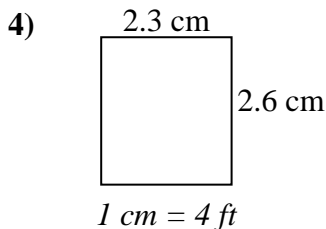
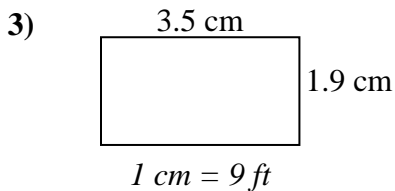
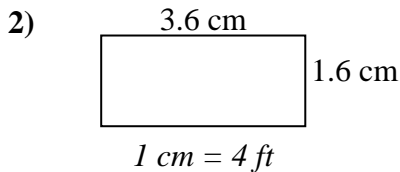
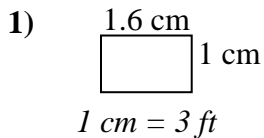




Determine the actual width, height and area of each scale rectangle.

Round the area to the nearest whole number.



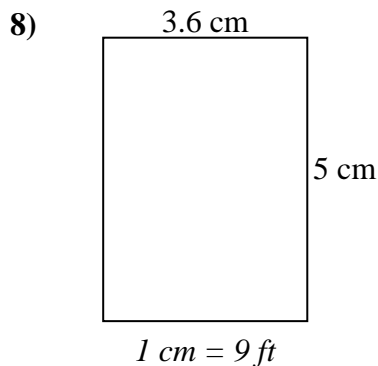
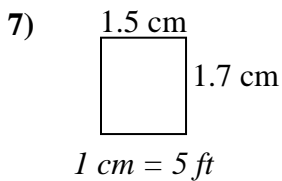
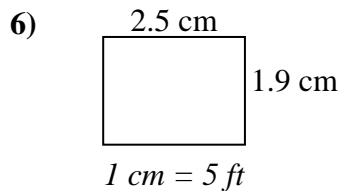
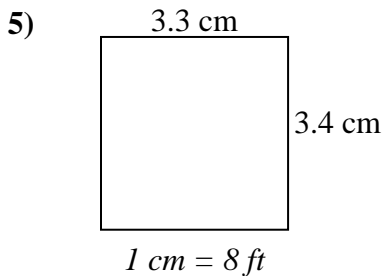
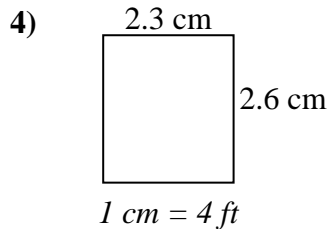
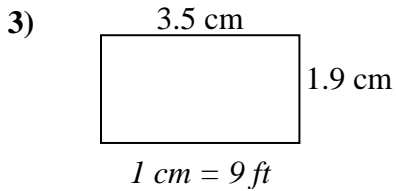
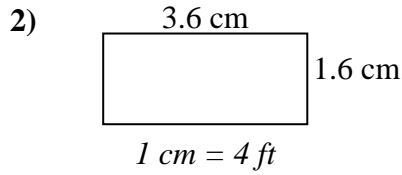
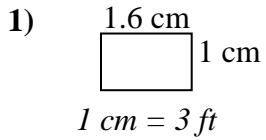
Answers

1. _____
2. _____
3. _____
4. _____
5. _____
6. _____
7. _____
8. _____



Determine the actual width, height and area of each scale rectangle.

Round the area to the nearest whole number.



Answers

1.	<u>4.8</u>	<u>3</u>	<u>14</u>
2.	<u>14.4</u>	<u>6.4</u>	<u>92</u>
3.	<u>31.5</u>	<u>17.1</u>	<u>539</u>
4.	<u>9.2</u>	<u>10.4</u>	<u>96</u>
5.	<u>26.4</u>	<u>27.2</u>	<u>718</u>
6.	<u>12.5</u>	<u>9.5</u>	<u>119</u>
7.	<u>7.5</u>	<u>8.5</u>	<u>64</u>
8.	<u>32.4</u>	<u>45</u>	<u>1,458</u>