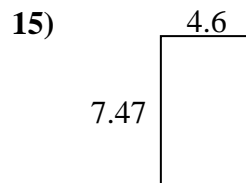
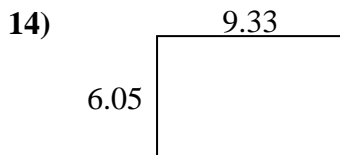
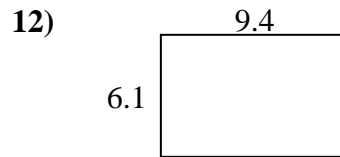
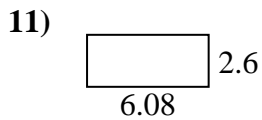
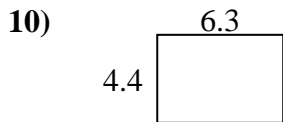
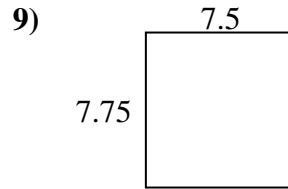
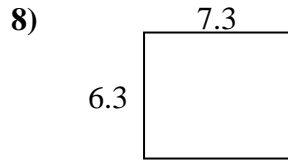
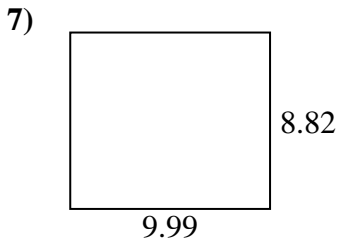
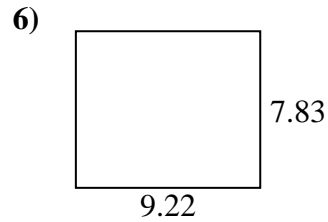
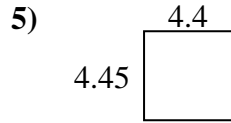
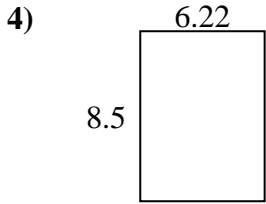
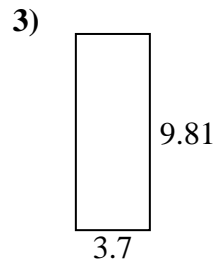
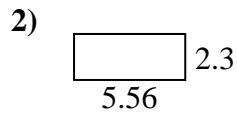
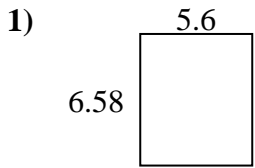




Find the perimeter and area of each figure. Answer to the nearest 10th.

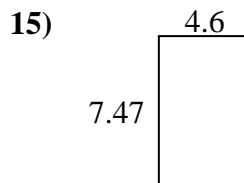
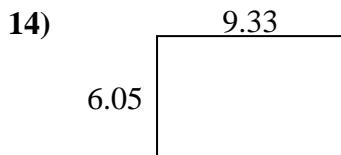
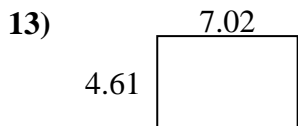
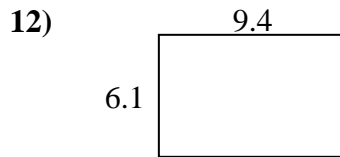
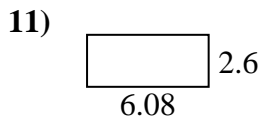
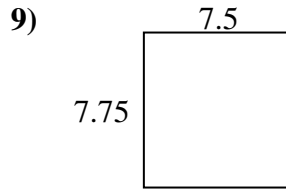
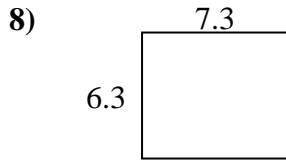
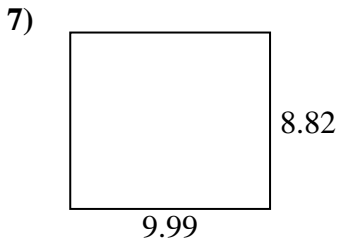
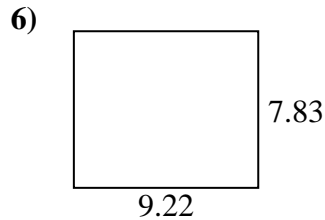
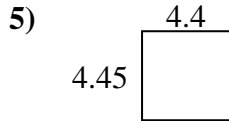
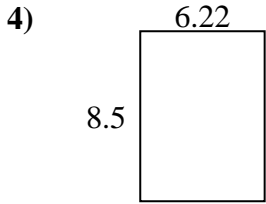
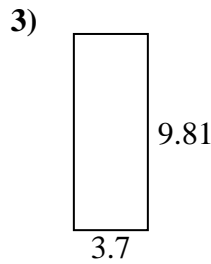
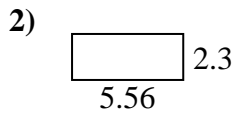
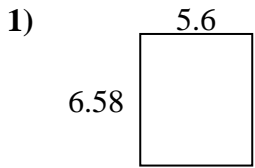


Answers

1. _____
2. _____
3. _____
4. _____
5. _____
6. _____
7. _____
8. _____
9. _____
10. _____
11. _____
12. _____
13. _____
14. _____
15. _____



Find the perimeter and area of each figure. Answer to the nearest 10th.



Answers

1.	<u>36.8</u>	<u>24.4</u>
2.	<u>12.8</u>	<u>15.7</u>
3.	<u>36.3</u>	<u>27.0</u>
4.	<u>52.9</u>	<u>29.4</u>
5.	<u>19.6</u>	<u>17.7</u>
6.	<u>72.2</u>	<u>34.1</u>
7.	<u>88.1</u>	<u>37.6</u>
8.	<u>46.0</u>	<u>27.2</u>
9.	<u>58.1</u>	<u>30.5</u>
10.	<u>27.7</u>	<u>21.4</u>
11.	<u>15.8</u>	<u>17.4</u>
12.	<u>57.3</u>	<u>31.0</u>
13.	<u>32.4</u>	<u>23.3</u>
14.	<u>56.4</u>	<u>30.8</u>
15.	<u>34.4</u>	<u>24.1</u>