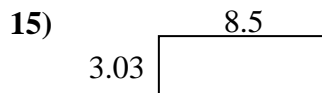
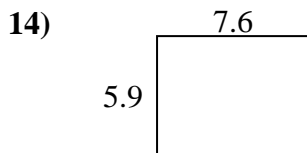
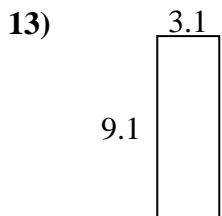
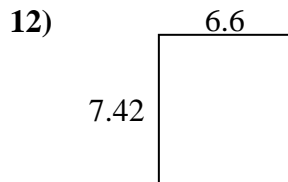
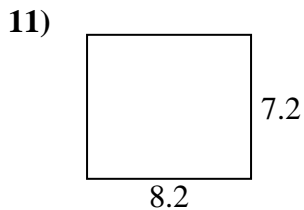
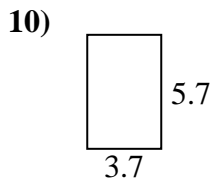
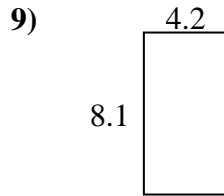
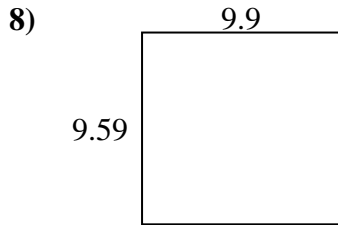
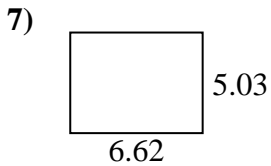
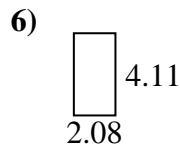
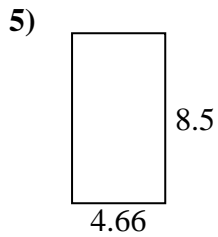
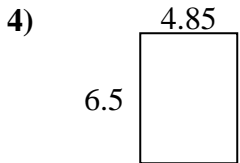
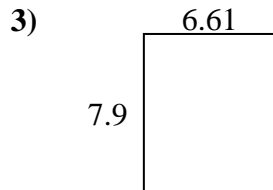
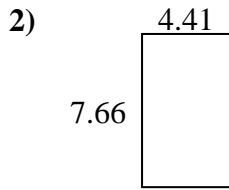
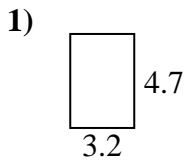




Find the perimeter and area of each figure. Answer to the nearest 10th.

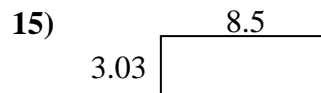
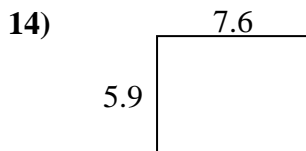
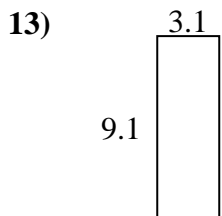
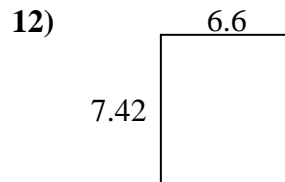
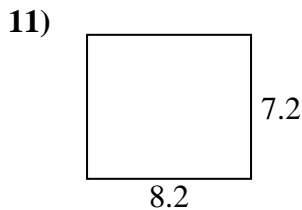
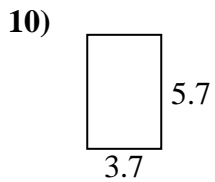
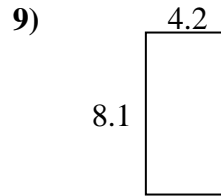
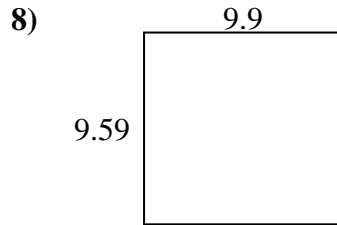
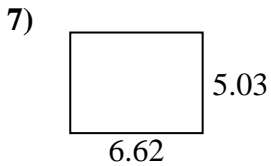
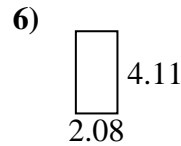
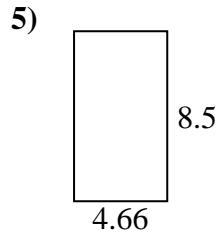
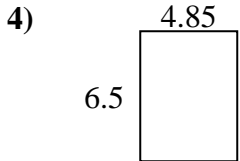
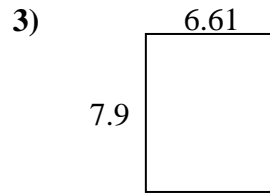
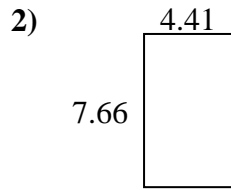
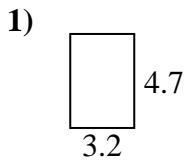


Answers

1. _____
2. _____
3. _____
4. _____
5. _____
6. _____
7. _____
8. _____
9. _____
10. _____
11. _____
12. _____
13. _____
14. _____
15. _____



Find the perimeter and area of each figure. Answer to the nearest 10th.



Answers

1.	<u>15.0</u>	<u>15.8</u>
2.	<u>33.8</u>	<u>24.1</u>
3.	<u>52.2</u>	<u>29.0</u>
4.	<u>31.5</u>	<u>22.7</u>
5.	<u>39.6</u>	<u>26.3</u>
6.	<u>8.5</u>	<u>12.4</u>
7.	<u>33.3</u>	<u>23.3</u>
8.	<u>94.9</u>	<u>39.0</u>
9.	<u>34.0</u>	<u>24.6</u>
10.	<u>21.1</u>	<u>18.8</u>
11.	<u>59.0</u>	<u>30.8</u>
12.	<u>49.0</u>	<u>28.0</u>
13.	<u>28.2</u>	<u>24.4</u>
14.	<u>44.8</u>	<u>27.0</u>
15.	<u>25.8</u>	<u>23.1</u>