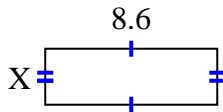


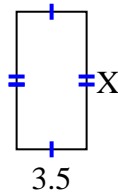


Find the value of X for each figure. Each figure is in centimeters (cm). Not to scale.

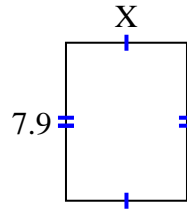
1) area =  $24.08 \text{ cm}^2$



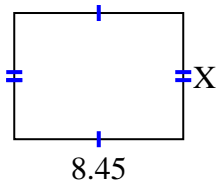
2) area =  $24.08 \text{ cm}^2$



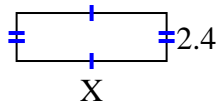
3) area =  $47.795 \text{ cm}^2$



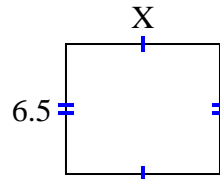
4) area =  $53.3195 \text{ cm}^2$



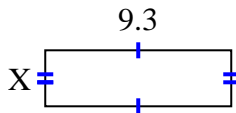
5) area =  $18 \text{ cm}^2$



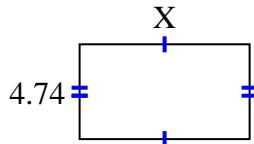
6) area =  $50.05 \text{ cm}^2$



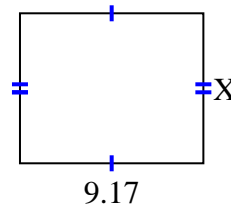
7) area =  $26.04 \text{ cm}^2$



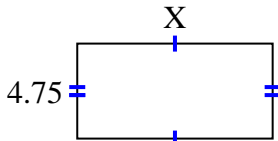
8) area =  $40.29 \text{ cm}^2$



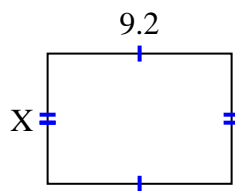
9) area =  $68.775 \text{ cm}^2$



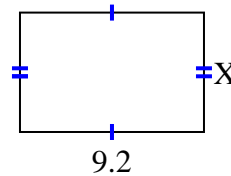
10) area =  $46.4075 \text{ cm}^2$



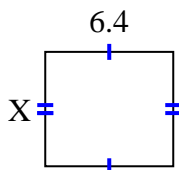
11) area =  $59.892 \text{ cm}^2$



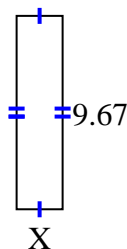
12) area =  $54.924 \text{ cm}^2$



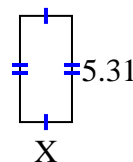
13) area =  $36.608 \text{ cm}^2$



14) area =  $22.241 \text{ cm}^2$



15) area =  $13.806 \text{ cm}^2$



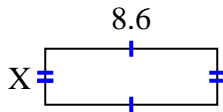
**Answers**

1. \_\_\_\_\_
2. \_\_\_\_\_
3. \_\_\_\_\_
4. \_\_\_\_\_
5. \_\_\_\_\_
6. \_\_\_\_\_
7. \_\_\_\_\_
8. \_\_\_\_\_
9. \_\_\_\_\_
10. \_\_\_\_\_
11. \_\_\_\_\_
12. \_\_\_\_\_
13. \_\_\_\_\_
14. \_\_\_\_\_
15. \_\_\_\_\_

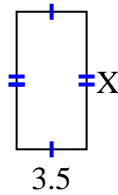


Find the value of X for each figure. Each figure is in centimeters (cm). Not to scale.

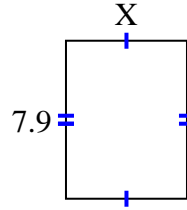
1) area =  $24.08 \text{ cm}^2$



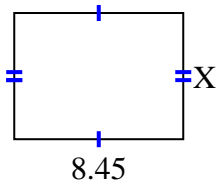
2) area =  $24.08 \text{ cm}^2$



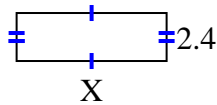
3) area =  $47.795 \text{ cm}^2$



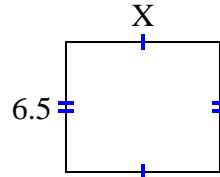
4) area =  $53.3195 \text{ cm}^2$



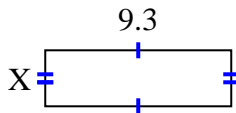
5) area =  $18 \text{ cm}^2$



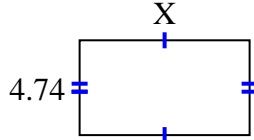
6) area =  $50.05 \text{ cm}^2$



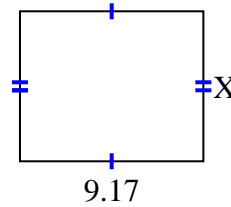
7) area =  $26.04 \text{ cm}^2$



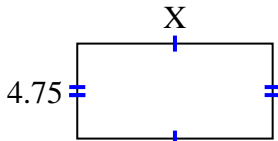
8) area =  $40.29 \text{ cm}^2$



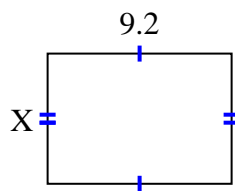
9) area =  $68.775 \text{ cm}^2$



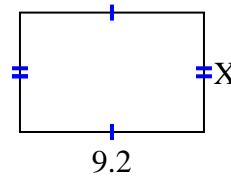
10) area =  $46.4075 \text{ cm}^2$



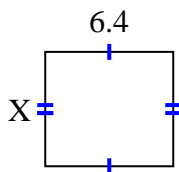
11) area =  $59.892 \text{ cm}^2$



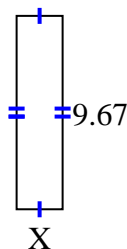
12) area =  $54.924 \text{ cm}^2$



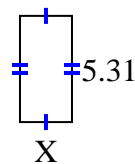
13) area =  $36.608 \text{ cm}^2$



14) area =  $22.241 \text{ cm}^2$



15) area =  $13.806 \text{ cm}^2$



Answers

1. 2.8

2. 6.88

3. 6.05

4. 6.31

5. 7.5

6. 7.7

7. 2.8

8. 8.5

9. 7.5

10. 9.77

11. 6.51

12. 5.97

13. 5.72

14. 2.3

15. 2.6