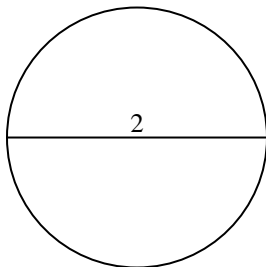


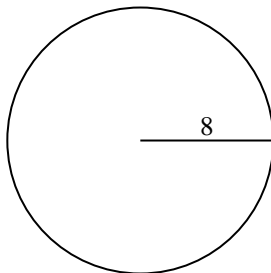


Find the area and circumference of the circle. Circles are not to scale. Round to the nearest 10th.

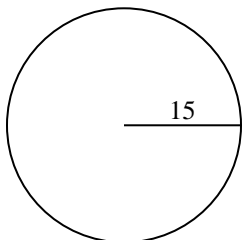
1)



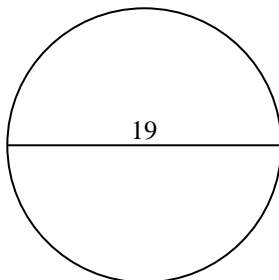
2)



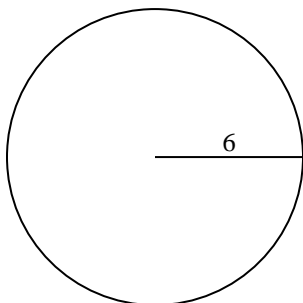
3)



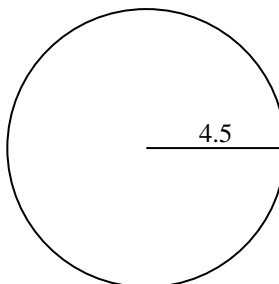
4)



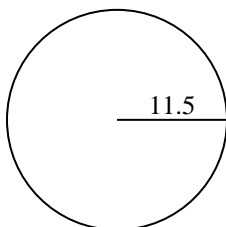
5)



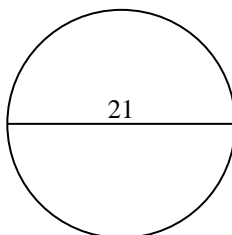
6)



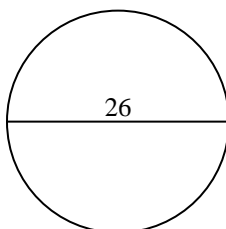
7)



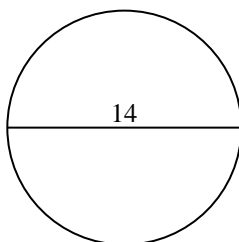
8)



9)



10)

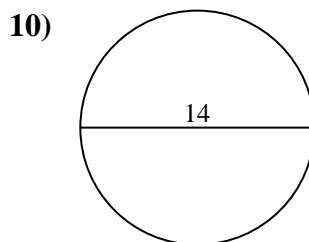
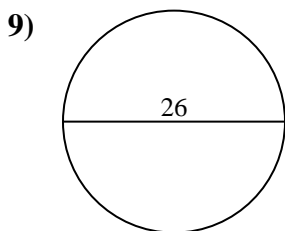
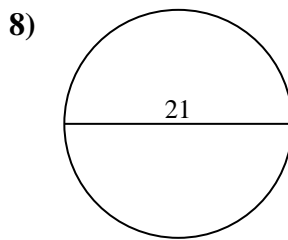
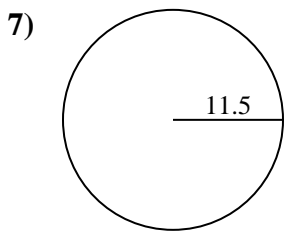
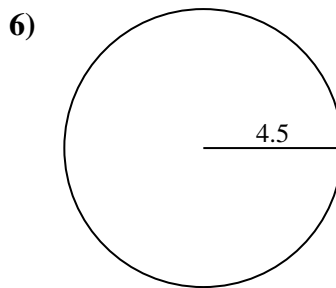
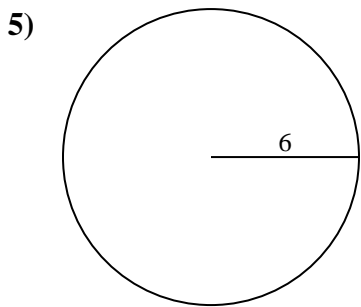
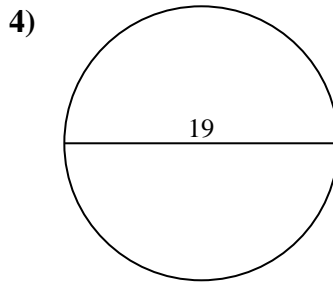
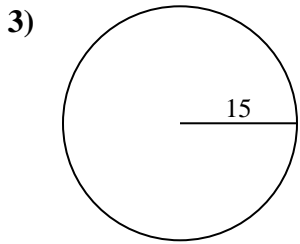
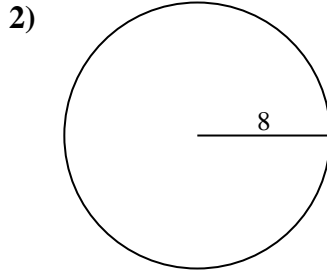
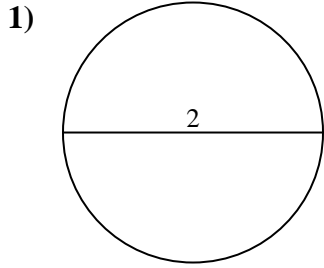


Answers

- 1. \_\_\_\_\_
- 2. \_\_\_\_\_
- 3. \_\_\_\_\_
- 4. \_\_\_\_\_
- 5. \_\_\_\_\_
- 6. \_\_\_\_\_
- 7. \_\_\_\_\_
- 8. \_\_\_\_\_
- 9. \_\_\_\_\_
- 10. \_\_\_\_\_



Find the area and circumference of the circle. Circles are not to scale. Round to the nearest 10th.



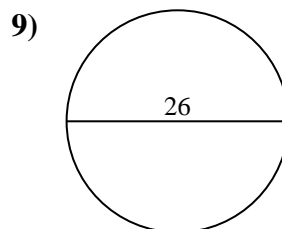
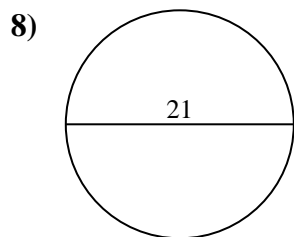
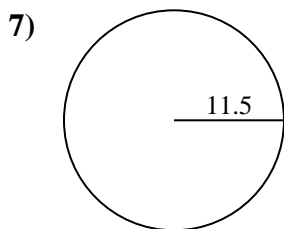
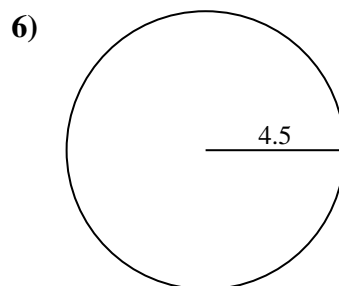
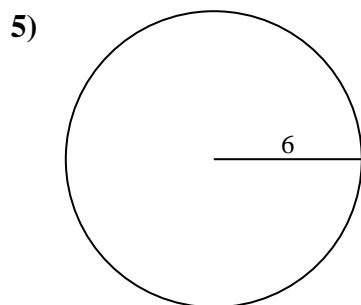
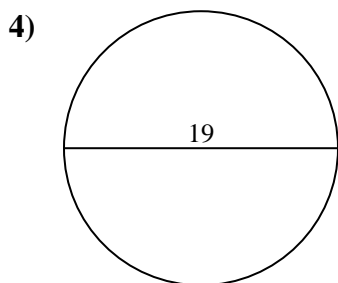
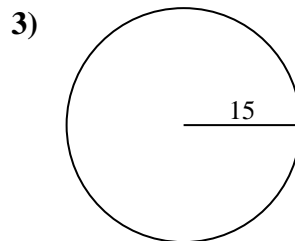
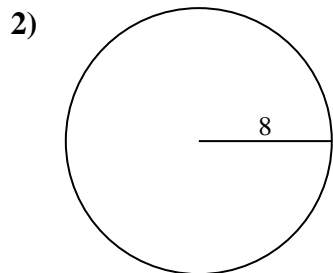
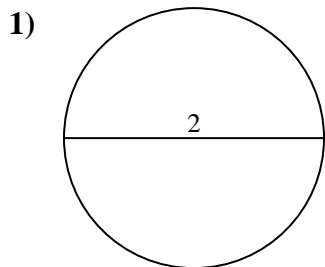
Answers

1.	<u>3.1</u>	<u>6.3</u>
2.	<u>201.1</u>	<u>50.3</u>
3.	<u>706.9</u>	<u>94.2</u>
4.	<u>283.5</u>	<u>59.7</u>
5.	<u>113.1</u>	<u>37.7</u>
6.	<u>63.6</u>	<u>28.3</u>
7.	<u>415.5</u>	<u>72.3</u>
8.	<u>346.4</u>	<u>66</u>
9.	<u>530.9</u>	<u>81.7</u>
10.	<u>153.9</u>	<u>44</u>



Find the area and circumference of the circle. Circles are not to scale. Round to the nearest 10th.

81.7	72.3	706.9	346.4	94.2
6.3	530.9	415.5	37.7	66
3.1	28.3	63.6	50.3	201.1
113.1	59.7	283.5		



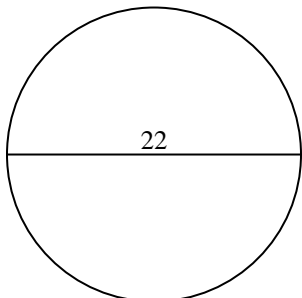
Answers

1. \_\_\_\_\_
2. \_\_\_\_\_
3. \_\_\_\_\_
4. \_\_\_\_\_
5. \_\_\_\_\_
6. \_\_\_\_\_
7. \_\_\_\_\_
8. \_\_\_\_\_
9. \_\_\_\_\_

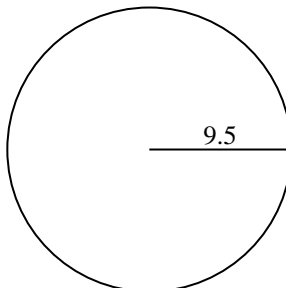


Find the area and circumference of the circle. Circles are not to scale. Round to the nearest 10th.

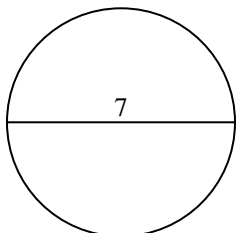
1)



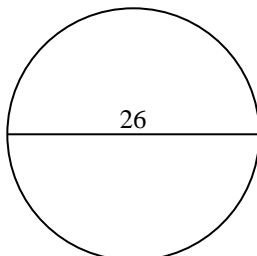
2)



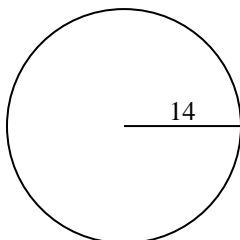
3)



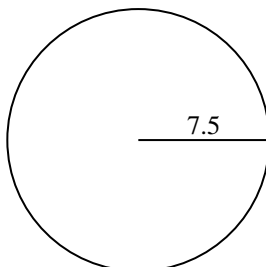
4)



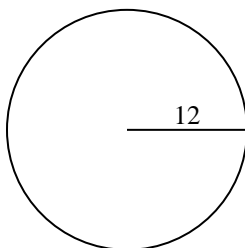
5)



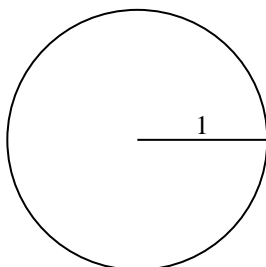
6)



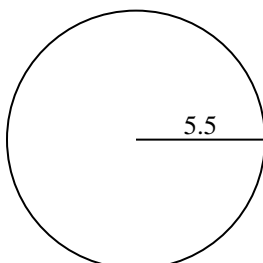
7)



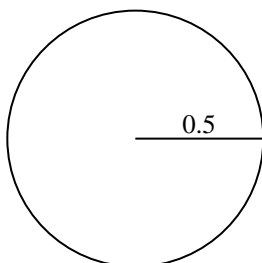
8)



9)



10)



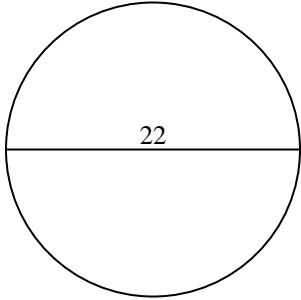
Answers

- 1. \_\_\_\_\_
- 2. \_\_\_\_\_
- 3. \_\_\_\_\_
- 4. \_\_\_\_\_
- 5. \_\_\_\_\_
- 6. \_\_\_\_\_
- 7. \_\_\_\_\_
- 8. \_\_\_\_\_
- 9. \_\_\_\_\_
- 10. \_\_\_\_\_

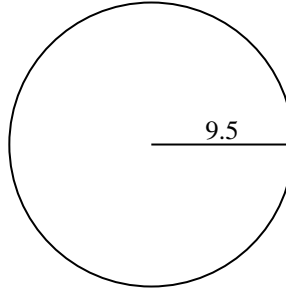


Find the area and circumference of the circle. Circles are not to scale. Round to the nearest 10th.

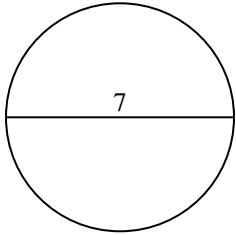
1)



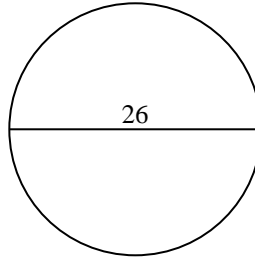
2)



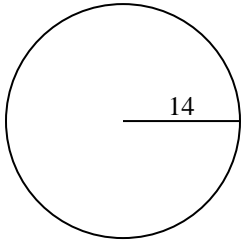
3)



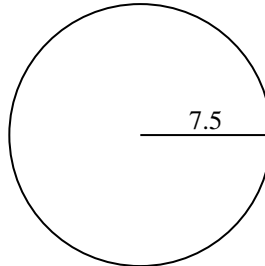
4)



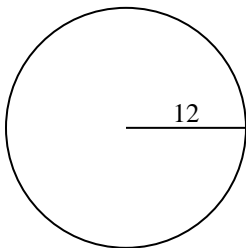
5)



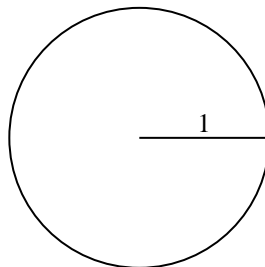
6)



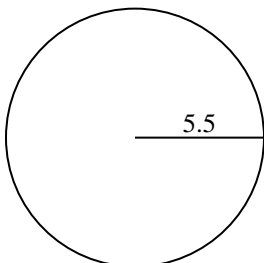
7)



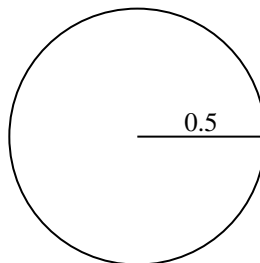
8)



9)



10)



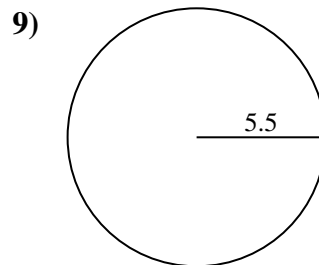
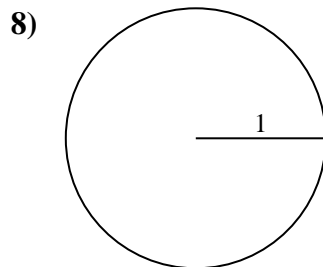
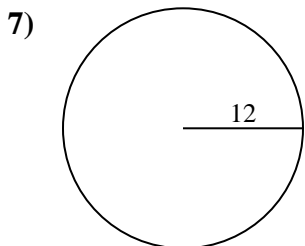
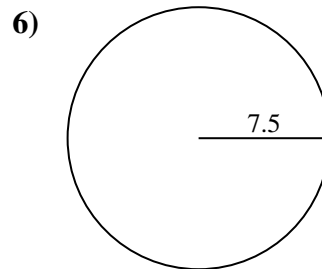
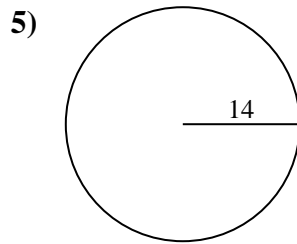
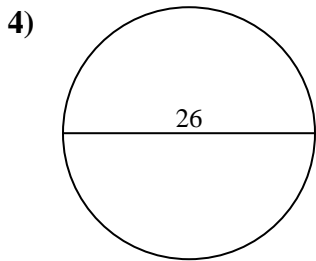
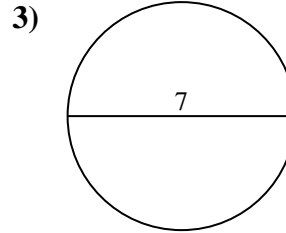
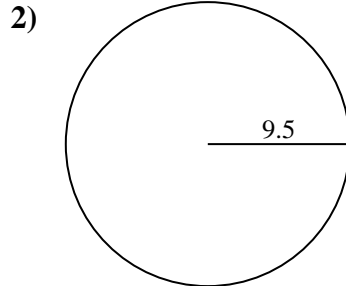
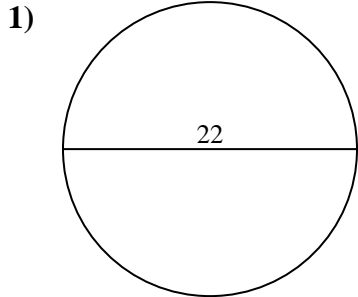
Answers

1.	<u>380.1</u>	<u>69.1</u>
2.	<u>283.5</u>	<u>59.7</u>
3.	<u>38.5</u>	<u>22</u>
4.	<u>530.9</u>	<u>81.7</u>
5.	<u>615.8</u>	<u>88</u>
6.	<u>176.7</u>	<u>47.1</u>
7.	<u>452.4</u>	<u>75.4</u>
8.	<u>3.1</u>	<u>6.3</u>
9.	<u>95</u>	<u>34.6</u>
10.	<u>0.8</u>	<u>3.1</u>



Find the area and circumference of the circle. Circles are not to scale. Round to the nearest 10th.

95	34.6	283.5	380.1	530.9
75.4	59.7	615.8	452.4	6.3
81.7	3.1	47.1	22	176.7
69.1	38.5	88		



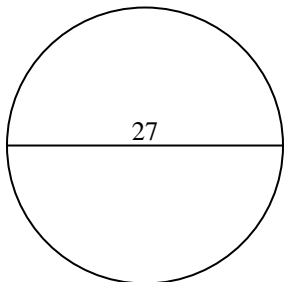
Answers

1. \_\_\_\_\_
2. \_\_\_\_\_
3. \_\_\_\_\_
4. \_\_\_\_\_
5. \_\_\_\_\_
6. \_\_\_\_\_
7. \_\_\_\_\_
8. \_\_\_\_\_
9. \_\_\_\_\_

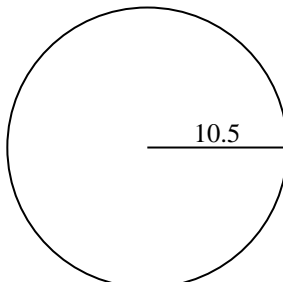


Find the area and circumference of the circle. Circles are not to scale. Round to the nearest 10th.

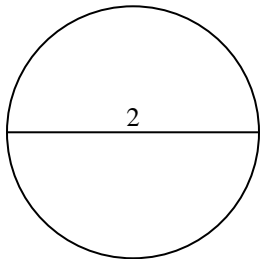
1)



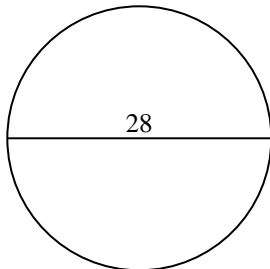
2)



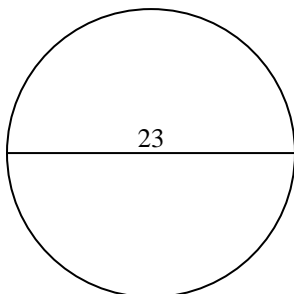
3)



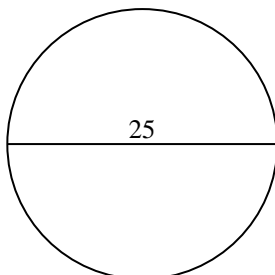
4)



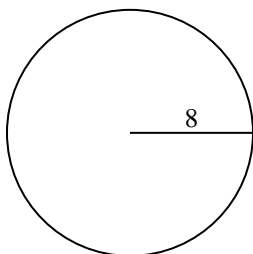
5)



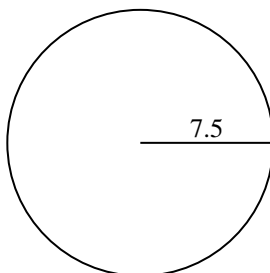
6)



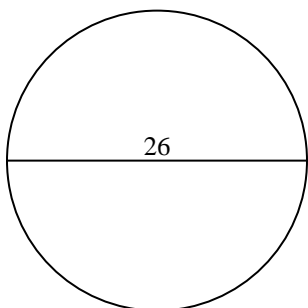
7)



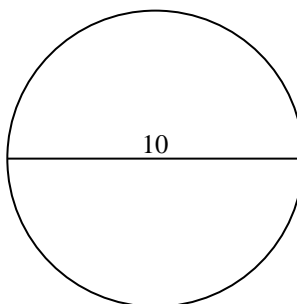
8)



9)



10)

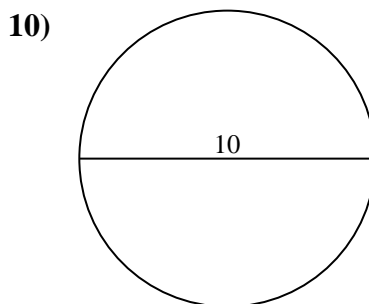
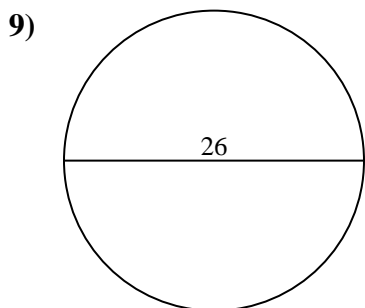
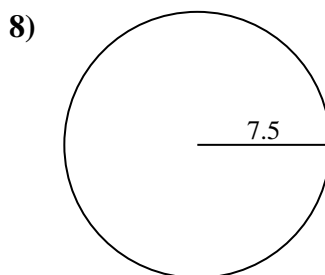
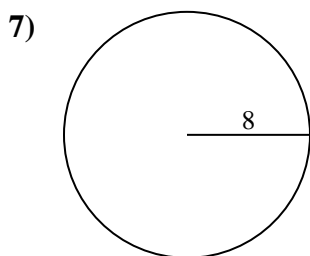
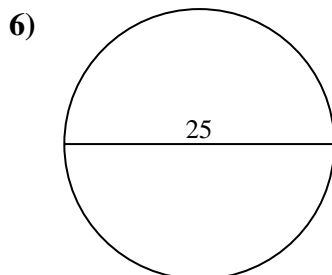
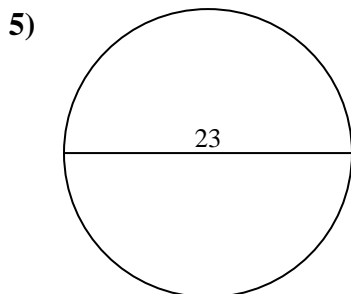
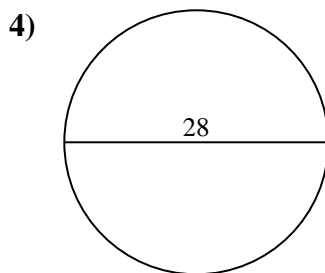
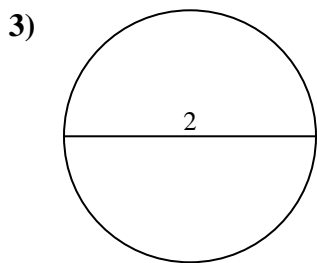
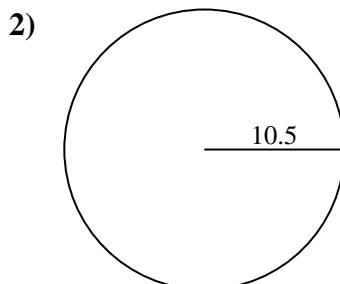
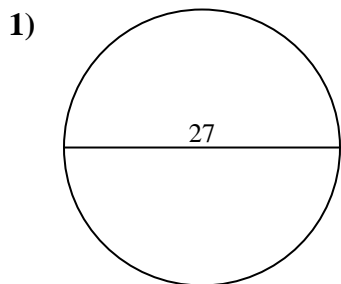


Answers

- 1. \_\_\_\_\_
- 2. \_\_\_\_\_
- 3. \_\_\_\_\_
- 4. \_\_\_\_\_
- 5. \_\_\_\_\_
- 6. \_\_\_\_\_
- 7. \_\_\_\_\_
- 8. \_\_\_\_\_
- 9. \_\_\_\_\_
- 10. \_\_\_\_\_



Find the area and circumference of the circle. Circles are not to scale. Round to the nearest 10th.



Answers

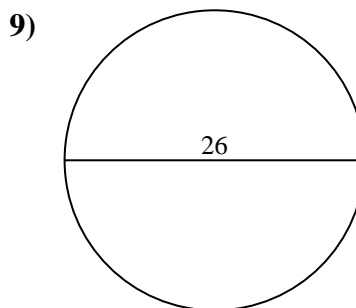
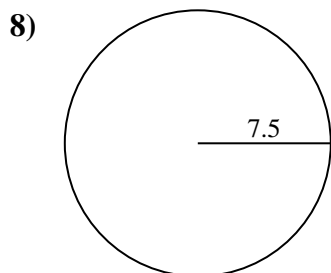
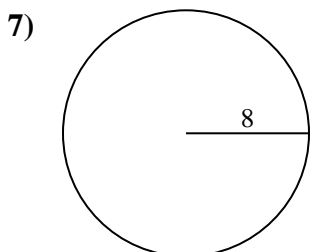
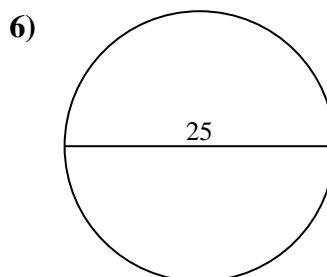
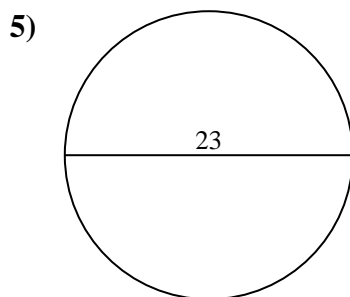
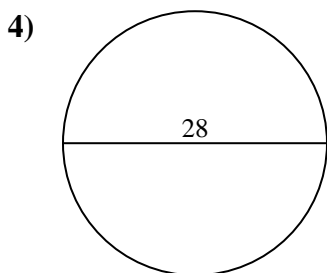
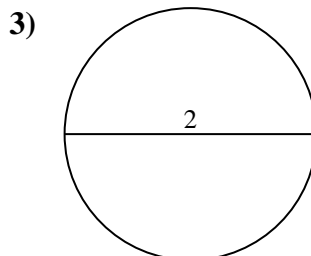
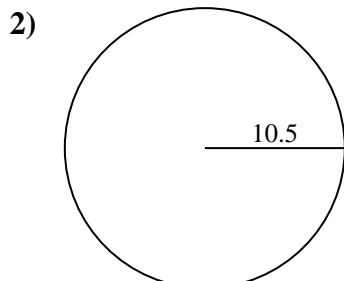
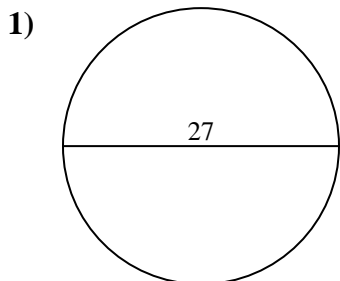
1.	<u>572.6</u>	<u>84.8</u>
2.	<u>346.4</u>	<u>66</u>
3.	<u>3.1</u>	<u>6.3</u>
4.	<u>615.8</u>	<u>88</u>
5.	<u>415.5</u>	<u>72.3</u>
6.	<u>490.9</u>	<u>78.5</u>
7.	<u>201.1</u>	<u>50.3</u>
8.	<u>176.7</u>	<u>47.1</u>
9.	<u>530.9</u>	<u>81.7</u>
10.	<u>78.5</u>	<u>31.4</u>





Find the area and circumference of the circle. Circles are not to scale. Round to the nearest 10th.

3.1	346.4	530.9	6.3	572.6
66	490.9	201.1	415.5	176.7
47.1	615.8	88	78.5	72.3
81.7	50.3	84.8		



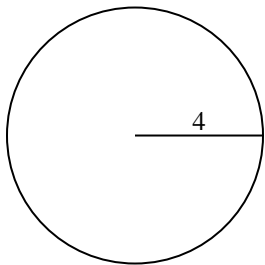
Answers

1. \_\_\_\_\_
2. \_\_\_\_\_
3. \_\_\_\_\_
4. \_\_\_\_\_
5. \_\_\_\_\_
6. \_\_\_\_\_
7. \_\_\_\_\_
8. \_\_\_\_\_
9. \_\_\_\_\_

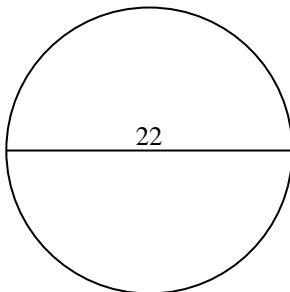


Find the area and circumference of the circle. Circles are not to scale. Round to the nearest 10th.

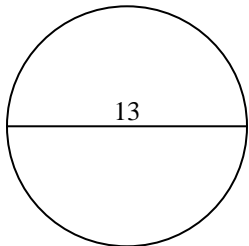
1)



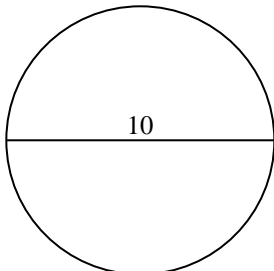
2)



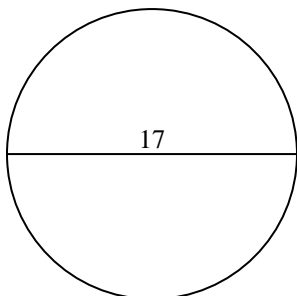
3)



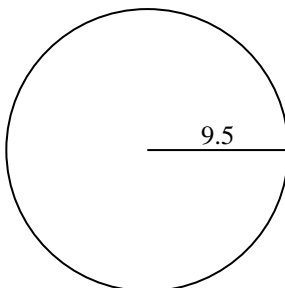
4)



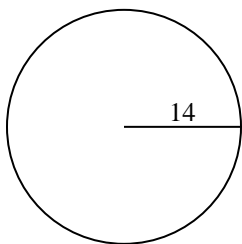
5)



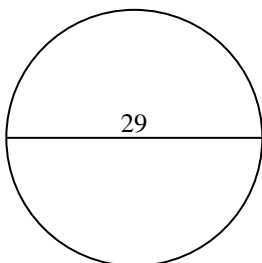
6)



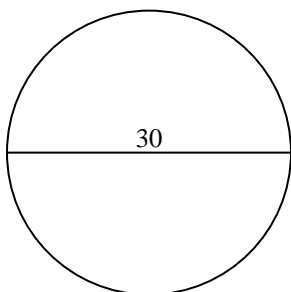
7)



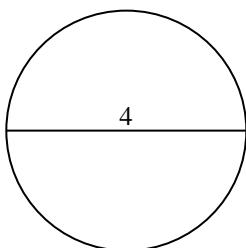
8)



9)



10)

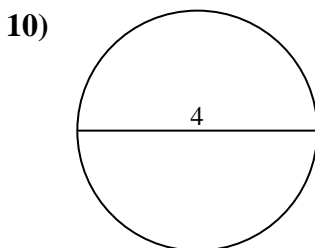
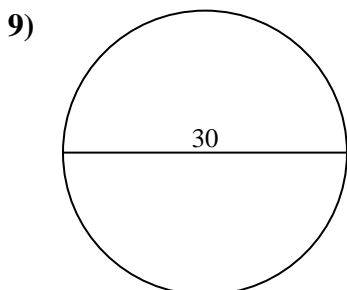
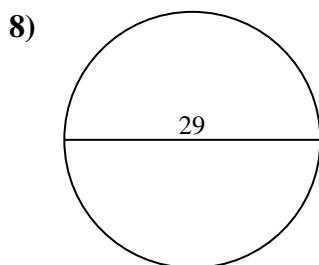
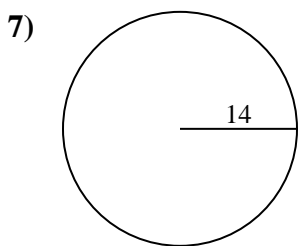
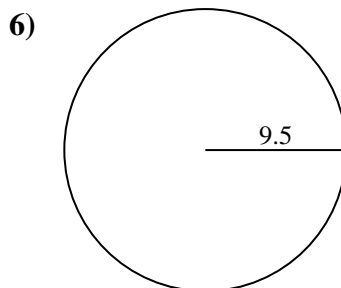
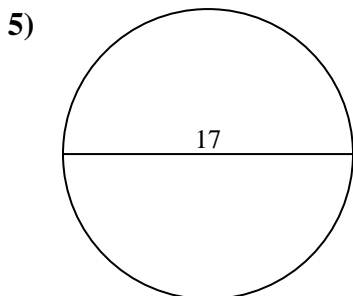
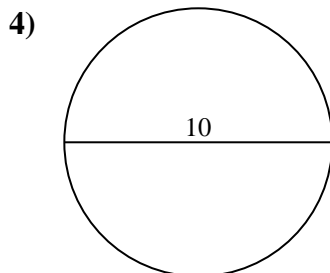
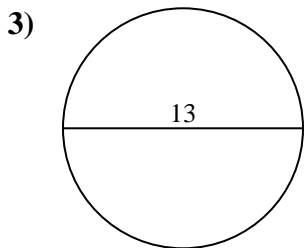
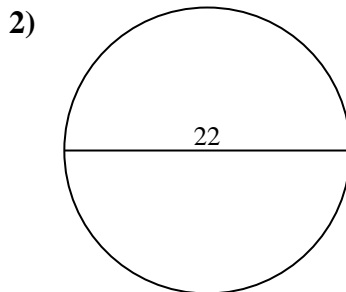
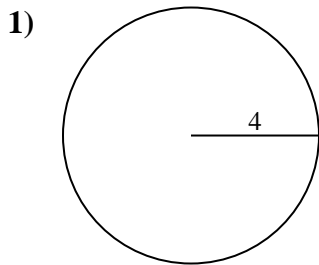


Answers

- 1. \_\_\_\_\_
- 2. \_\_\_\_\_
- 3. \_\_\_\_\_
- 4. \_\_\_\_\_
- 5. \_\_\_\_\_
- 6. \_\_\_\_\_
- 7. \_\_\_\_\_
- 8. \_\_\_\_\_
- 9. \_\_\_\_\_
- 10. \_\_\_\_\_



Find the area and circumference of the circle. Circles are not to scale. Round to the nearest 10th.



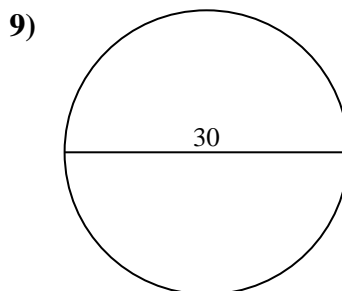
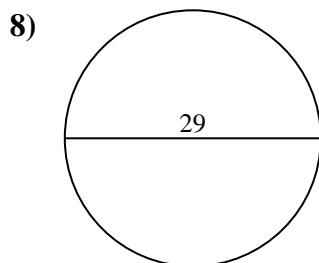
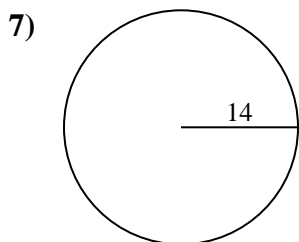
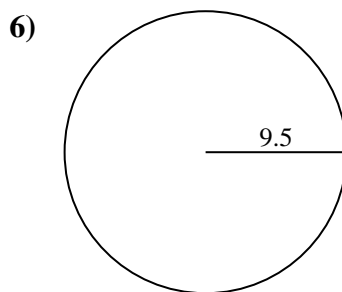
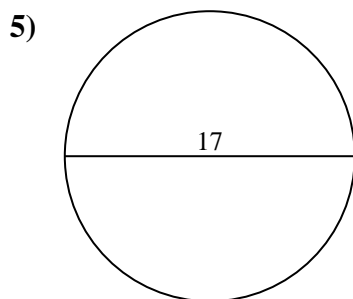
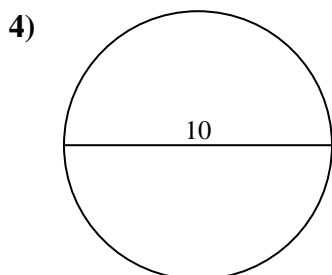
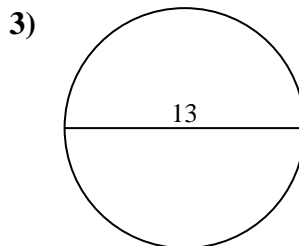
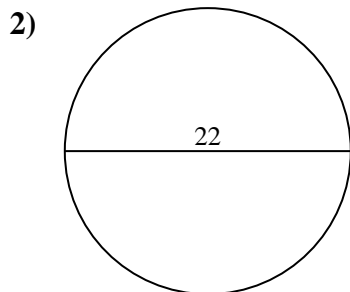
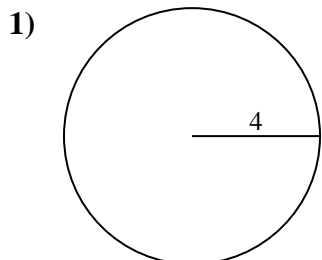
Answers

1.	<u>50.3</u>	<u>25.1</u>
2.	<u>380.1</u>	<u>69.1</u>
3.	<u>132.7</u>	<u>40.8</u>
4.	<u>78.5</u>	<u>31.4</u>
5.	<u>227</u>	<u>53.4</u>
6.	<u>283.5</u>	<u>59.7</u>
7.	<u>615.8</u>	<u>88</u>
8.	<u>660.5</u>	<u>91.1</u>
9.	<u>706.9</u>	<u>94.2</u>
10.	<u>12.6</u>	<u>12.6</u>



Find the area and circumference of the circle. Circles are not to scale. Round to the nearest 10th.

25.1	227	78.5	615.8	91.1
380.1	31.4	132.7	706.9	59.7
50.3	69.1	88	53.4	660.5
283.5	40.8	94.2		



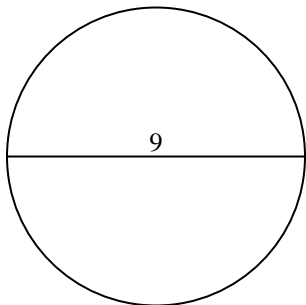
Answers

1. \_\_\_\_\_
2. \_\_\_\_\_
3. \_\_\_\_\_
4. \_\_\_\_\_
5. \_\_\_\_\_
6. \_\_\_\_\_
7. \_\_\_\_\_
8. \_\_\_\_\_
9. \_\_\_\_\_

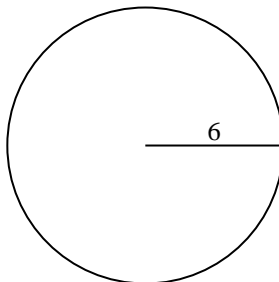


Find the area and circumference of the circle. Circles are not to scale. Round to the nearest 10th.

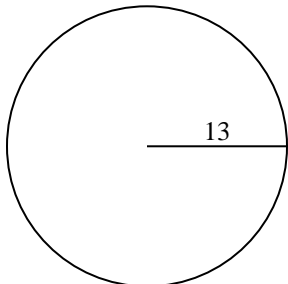
1)



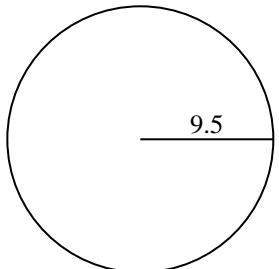
2)



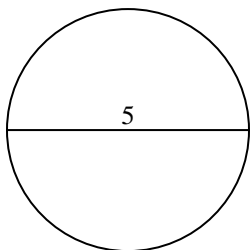
3)



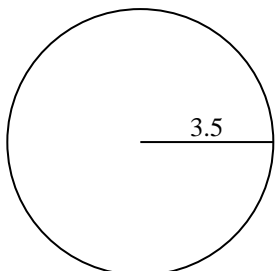
4)



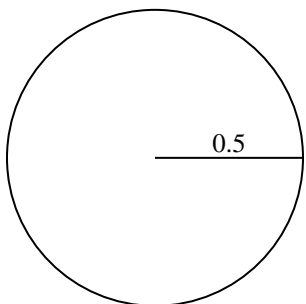
5)



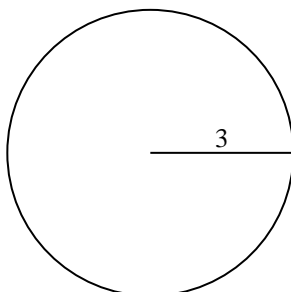
6)



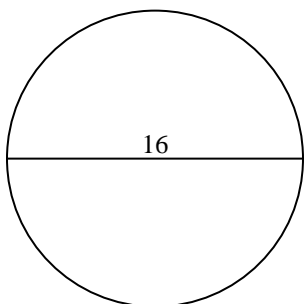
7)



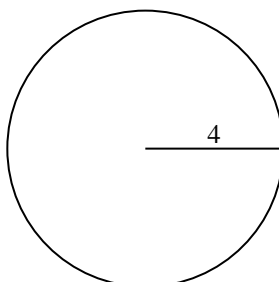
8)



9)



10)

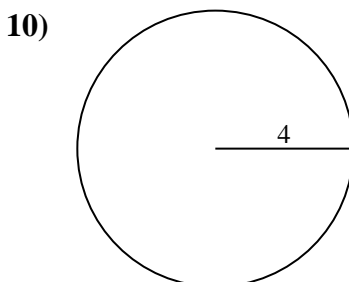
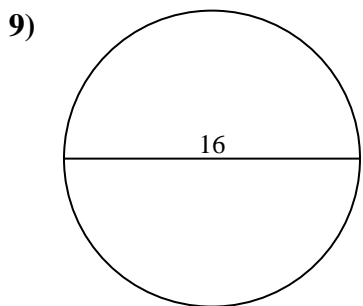
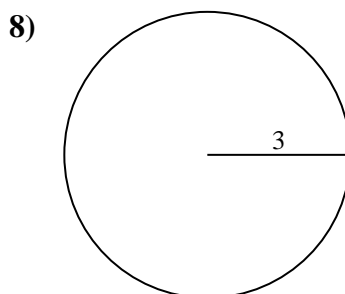
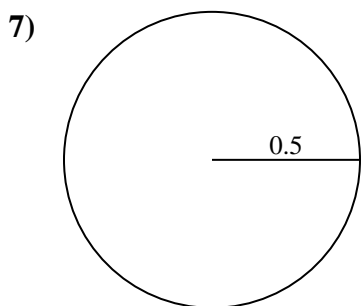
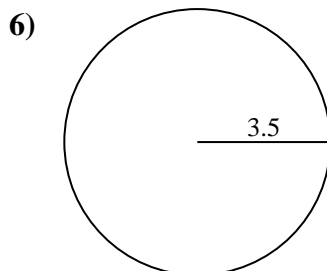
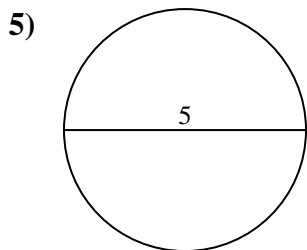
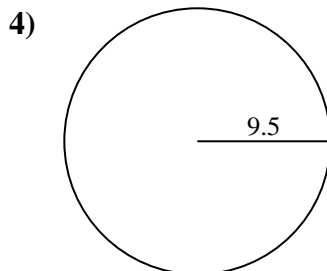
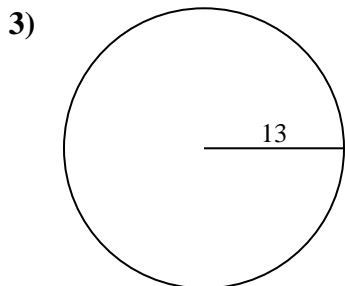
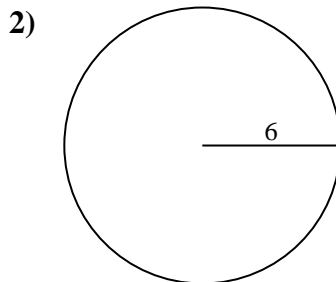
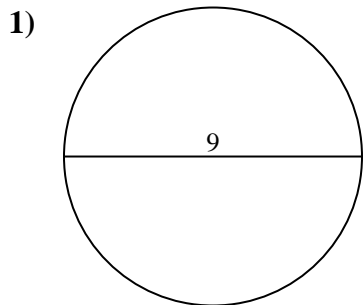


Answers

- 1. \_\_\_\_\_
- 2. \_\_\_\_\_
- 3. \_\_\_\_\_
- 4. \_\_\_\_\_
- 5. \_\_\_\_\_
- 6. \_\_\_\_\_
- 7. \_\_\_\_\_
- 8. \_\_\_\_\_
- 9. \_\_\_\_\_
- 10. \_\_\_\_\_



Find the area and circumference of the circle. Circles are not to scale. Round to the nearest 10th.



Answers

1.	<u>63.6</u>	<u>28.3</u>
2.	<u>113.1</u>	<u>37.7</u>
3.	<u>530.9</u>	<u>81.7</u>
4.	<u>283.5</u>	<u>59.7</u>
5.	<u>19.6</u>	<u>15.7</u>
6.	<u>38.5</u>	<u>22</u>
7.	<u>0.8</u>	<u>3.1</u>
8.	<u>28.3</u>	<u>18.8</u>
9.	<u>201.1</u>	<u>50.3</u>
10.	<u>50.3</u>	<u>25.1</u>

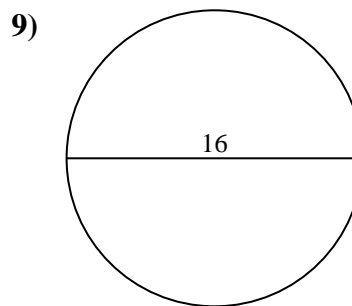
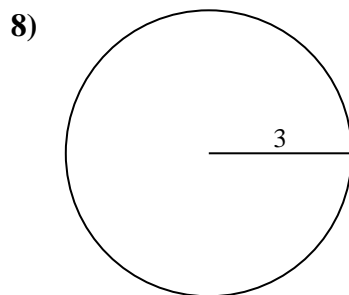
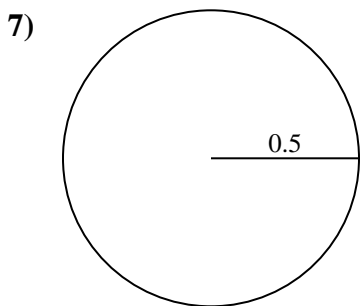
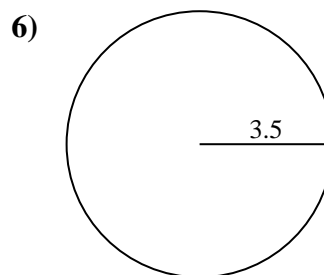
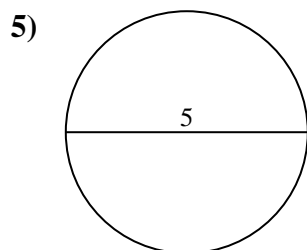
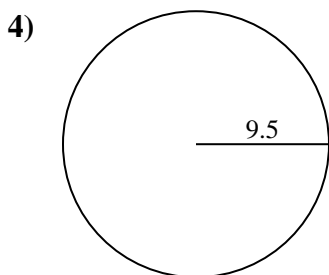
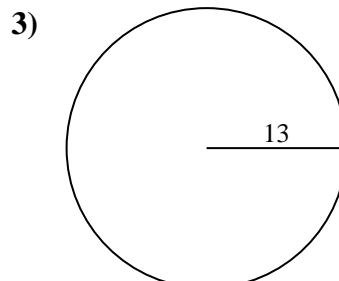
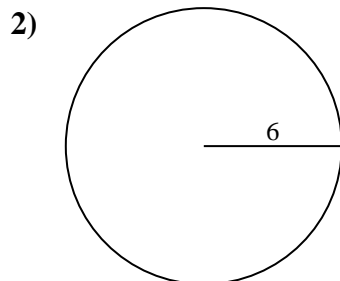
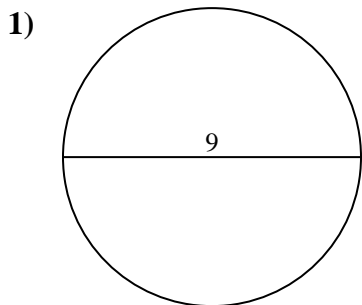


Find the area and circumference of the circle. Circles are not to scale. Round to the nearest 10th.

18.8	0.8	59.7	28.3	201.1
38.5	37.7	63.6	15.7	19.6
28.3	50.3	81.7	283.5	530.9
22	3.1	113.1		

**Answers**

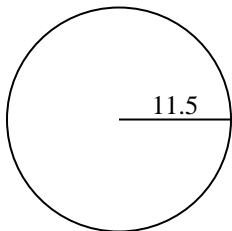
1. \_\_\_\_\_
2. \_\_\_\_\_
3. \_\_\_\_\_
4. \_\_\_\_\_
5. \_\_\_\_\_
6. \_\_\_\_\_
7. \_\_\_\_\_
8. \_\_\_\_\_
9. \_\_\_\_\_



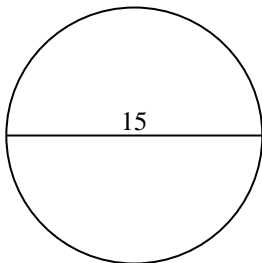


Find the area and circumference of the circle. Circles are not to scale. Round to the nearest 10th.

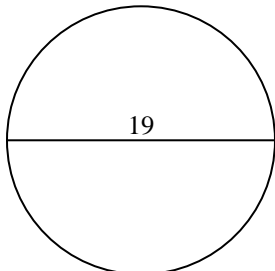
1)



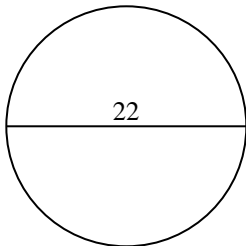
2)



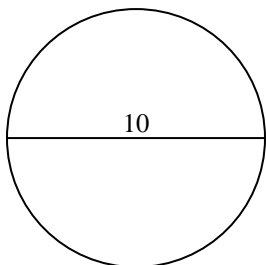
3)



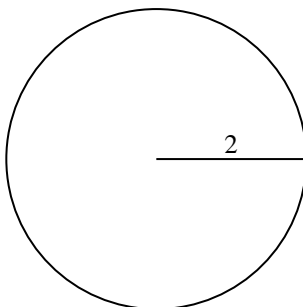
4)



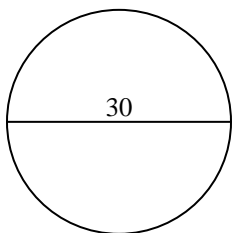
5)



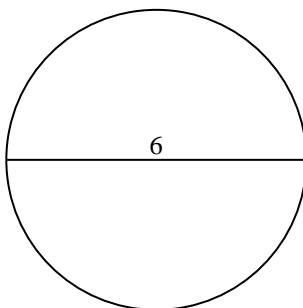
6)



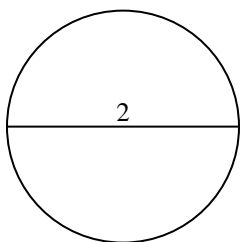
7)



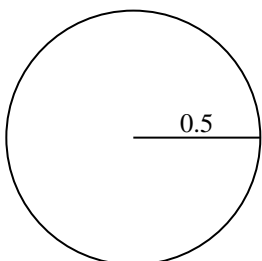
8)



9)



10)



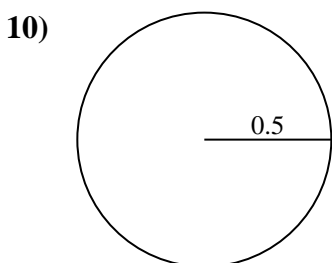
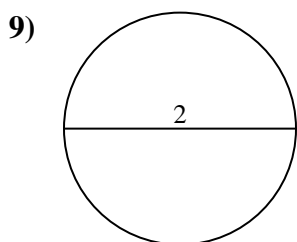
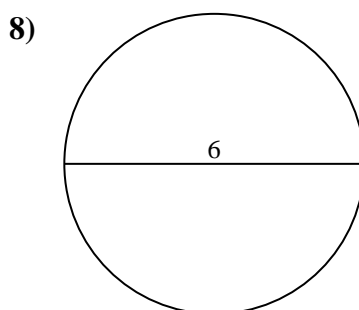
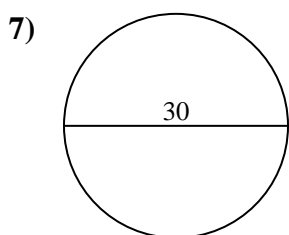
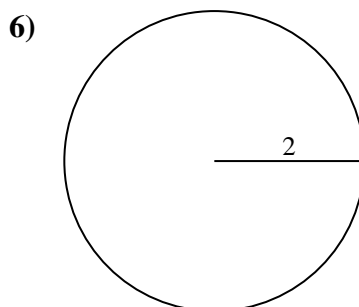
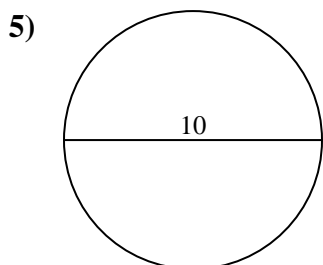
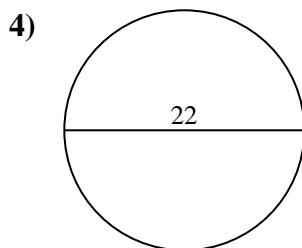
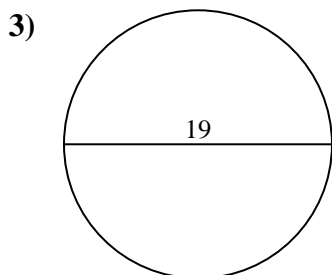
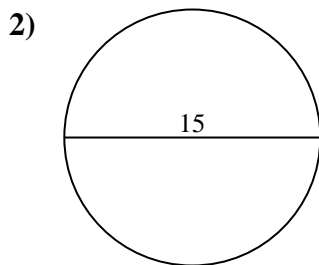
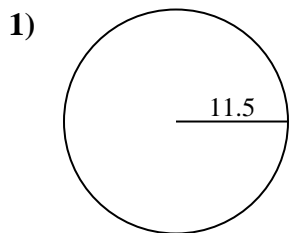
Answers

- 1. \_\_\_\_\_
- 2. \_\_\_\_\_
- 3. \_\_\_\_\_
- 4. \_\_\_\_\_
- 5. \_\_\_\_\_
- 6. \_\_\_\_\_
- 7. \_\_\_\_\_
- 8. \_\_\_\_\_
- 9. \_\_\_\_\_
- 10. \_\_\_\_\_





Find the area and circumference of the circle. Circles are not to scale. Round to the nearest 10th.

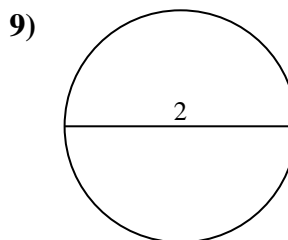
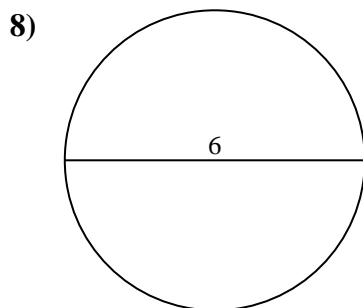
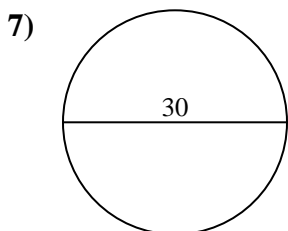
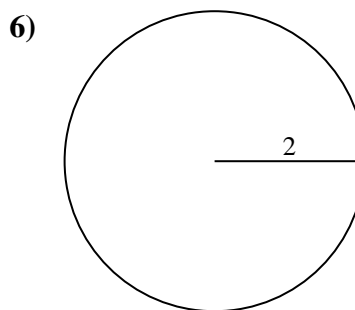
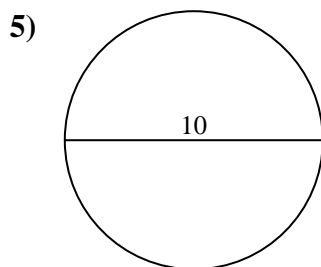
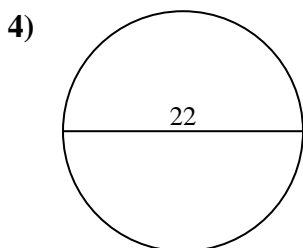
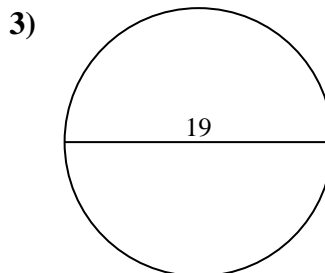
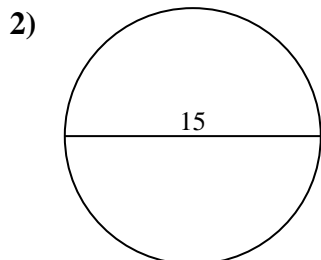
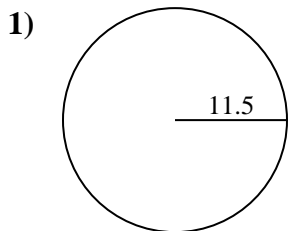
Answers

1.	<u>415.5</u>	<u>72.3</u>
2.	<u>176.7</u>	<u>47.1</u>
3.	<u>283.5</u>	<u>59.7</u>
4.	<u>380.1</u>	<u>69.1</u>
5.	<u>78.5</u>	<u>31.4</u>
6.	<u>12.6</u>	<u>12.6</u>
7.	<u>706.9</u>	<u>94.2</u>
8.	<u>28.3</u>	<u>18.8</u>
9.	<u>3.1</u>	<u>6.3</u>
10.	<u>0.8</u>	<u>3.1</u>



Find the area and circumference of the circle. Circles are not to scale. Round to the nearest 10th.

72.3	18.8	78.5	6.3	380.1
706.9	12.6	12.6	69.1	415.5
176.7	28.3	94.2	47.1	31.4
283.5	3.1	59.7		



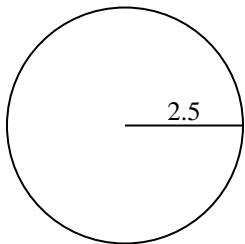
Answers

1. \_\_\_\_\_
2. \_\_\_\_\_
3. \_\_\_\_\_
4. \_\_\_\_\_
5. \_\_\_\_\_
6. \_\_\_\_\_
7. \_\_\_\_\_
8. \_\_\_\_\_
9. \_\_\_\_\_

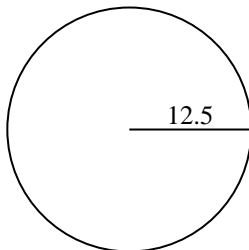


Find the area and circumference of the circle. Circles are not to scale. Round to the nearest 10th.

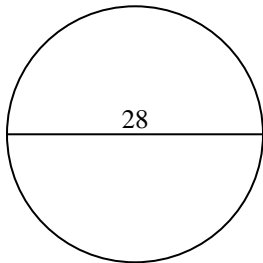
1)



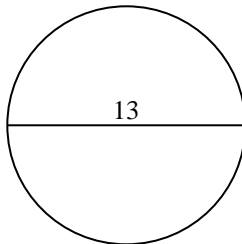
2)



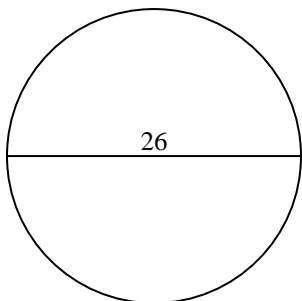
3)



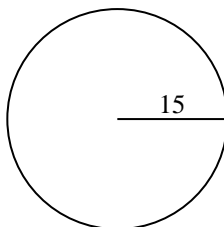
4)



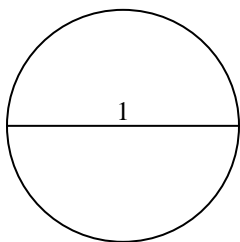
5)



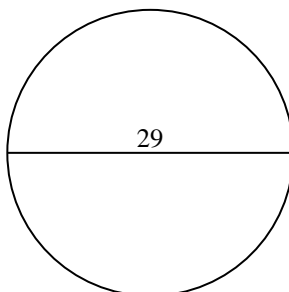
6)



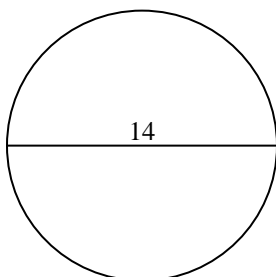
7)



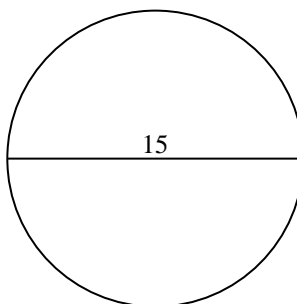
8)



9)



10)

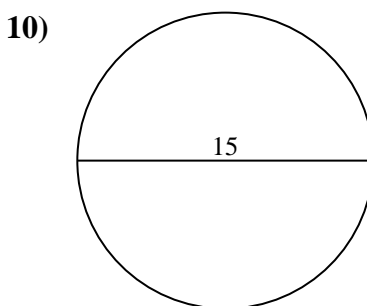
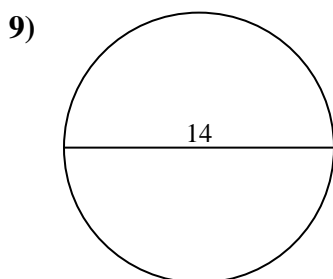
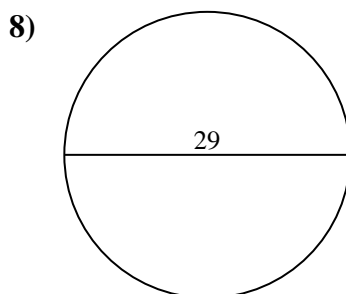
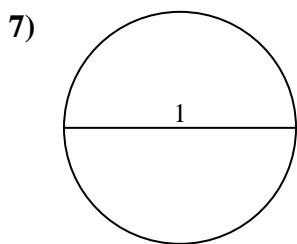
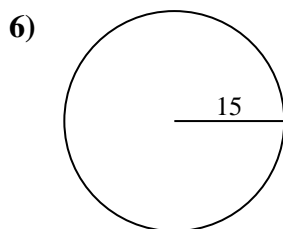
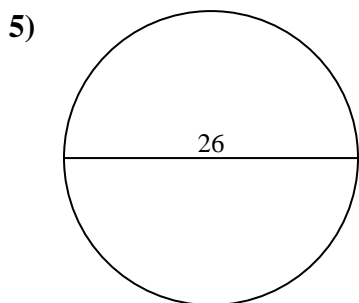
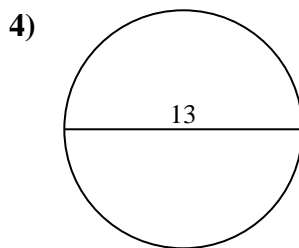
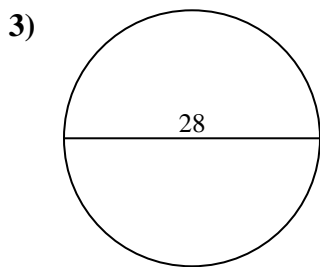
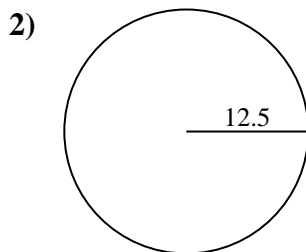
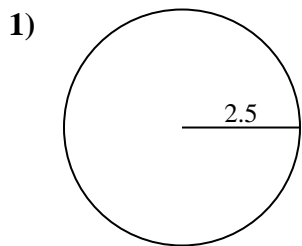


Answers

- 1. \_\_\_\_\_
- 2. \_\_\_\_\_
- 3. \_\_\_\_\_
- 4. \_\_\_\_\_
- 5. \_\_\_\_\_
- 6. \_\_\_\_\_
- 7. \_\_\_\_\_
- 8. \_\_\_\_\_
- 9. \_\_\_\_\_
- 10. \_\_\_\_\_



Find the area and circumference of the circle. Circles are not to scale. Round to the nearest 10th.



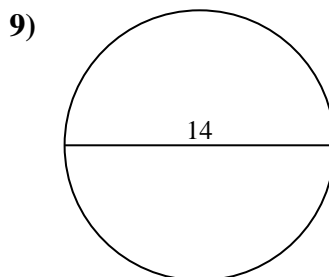
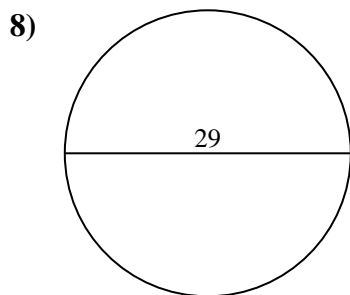
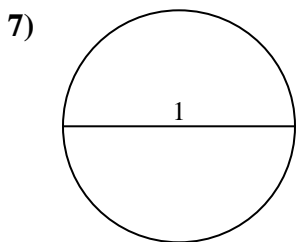
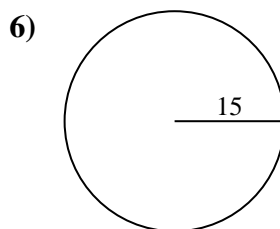
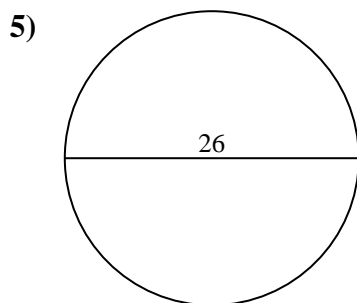
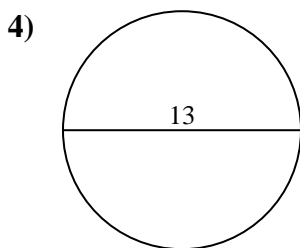
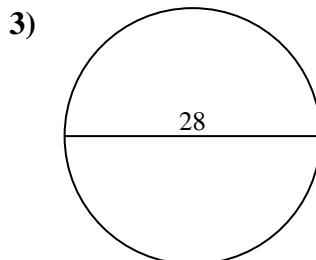
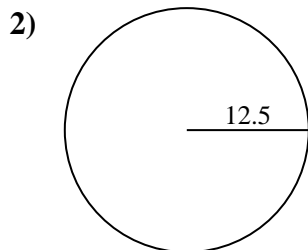
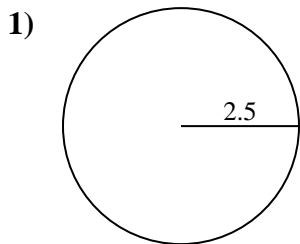
Answers

1.	<u>19.6</u>	<u>15.7</u>
2.	<u>490.9</u>	<u>78.5</u>
3.	<u>615.8</u>	<u>88</u>
4.	<u>132.7</u>	<u>40.8</u>
5.	<u>530.9</u>	<u>81.7</u>
6.	<u>706.9</u>	<u>94.2</u>
7.	<u>0.8</u>	<u>3.1</u>
8.	<u>660.5</u>	<u>91.1</u>
9.	<u>153.9</u>	<u>44</u>
10.	<u>176.7</u>	<u>47.1</u>



Find the area and circumference of the circle. Circles are not to scale. Round to the nearest 10th.

490.9	78.5	15.7	88	530.9
0.8	153.9	44	660.5	3.1
615.8	81.7	94.2	91.1	19.6
706.9	132.7	40.8		



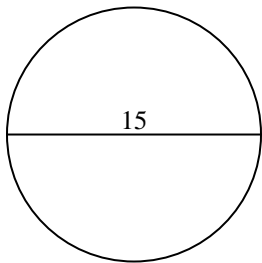
Answers

1. \_\_\_\_\_
2. \_\_\_\_\_
3. \_\_\_\_\_
4. \_\_\_\_\_
5. \_\_\_\_\_
6. \_\_\_\_\_
7. \_\_\_\_\_
8. \_\_\_\_\_
9. \_\_\_\_\_

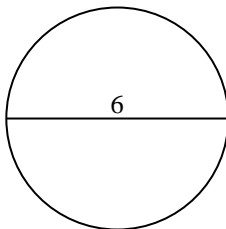


Find the area and circumference of the circle. Circles are not to scale. Round to the nearest 10th.

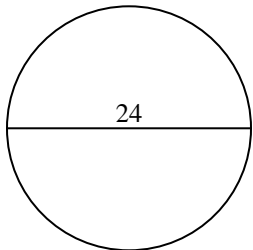
1)



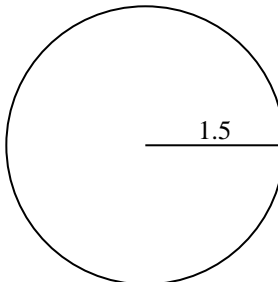
2)



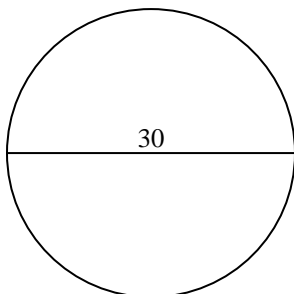
3)



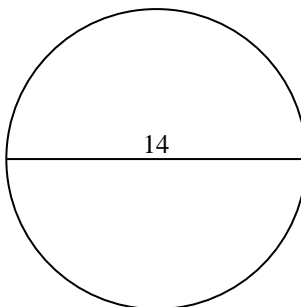
4)



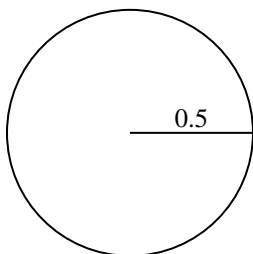
5)



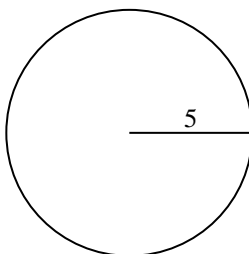
6)



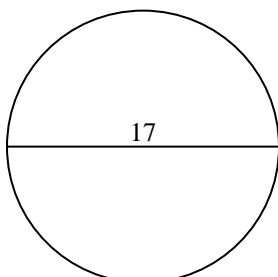
7)



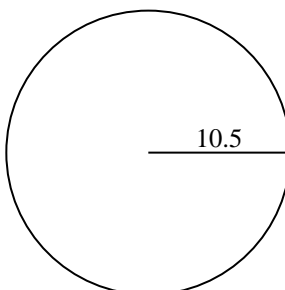
8)



9)



10)

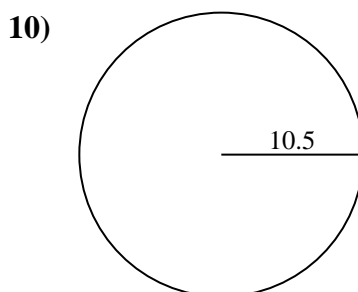
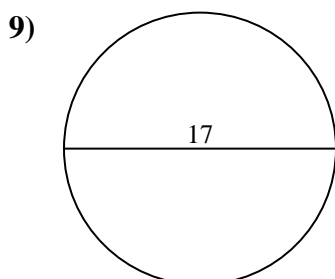
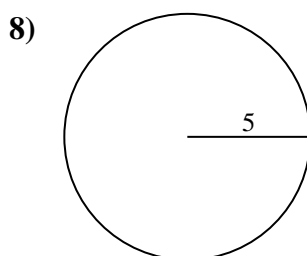
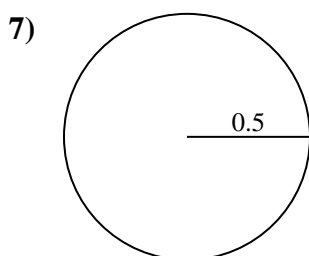
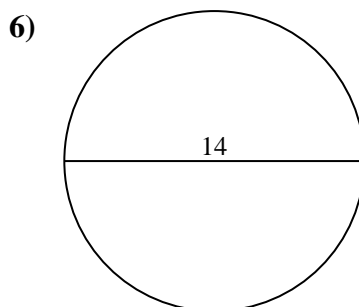
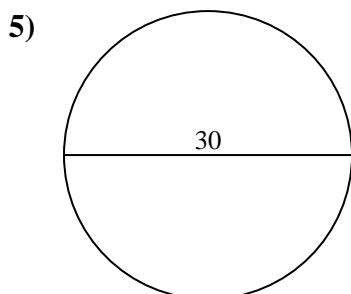
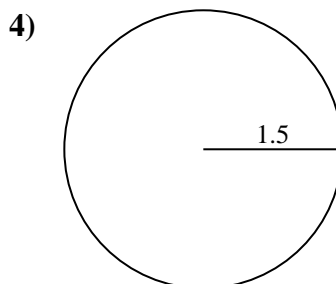
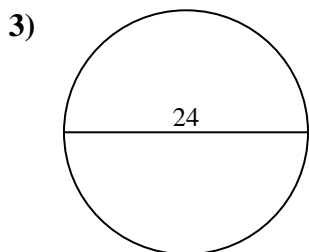
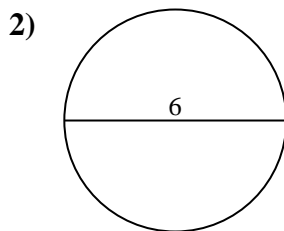
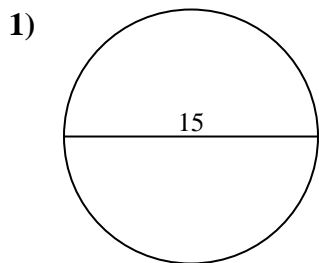


Answers

- 1. \_\_\_\_\_
- 2. \_\_\_\_\_
- 3. \_\_\_\_\_
- 4. \_\_\_\_\_
- 5. \_\_\_\_\_
- 6. \_\_\_\_\_
- 7. \_\_\_\_\_
- 8. \_\_\_\_\_
- 9. \_\_\_\_\_
- 10. \_\_\_\_\_



Find the area and circumference of the circle. Circles are not to scale. Round to the nearest 10th.

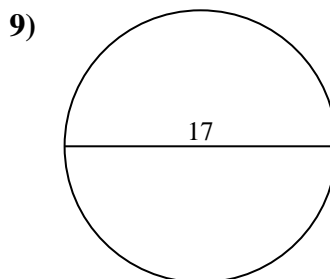
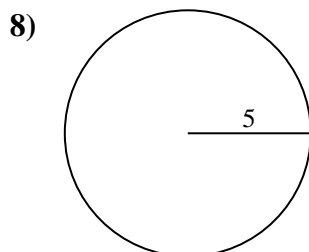
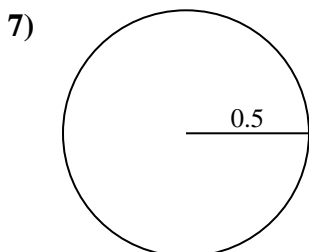
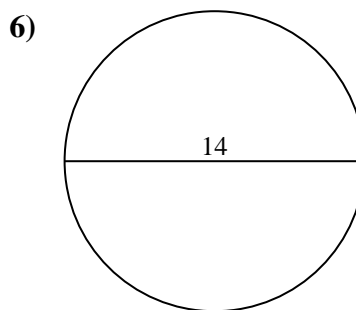
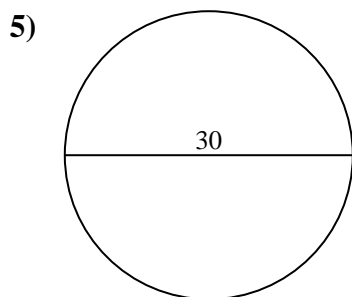
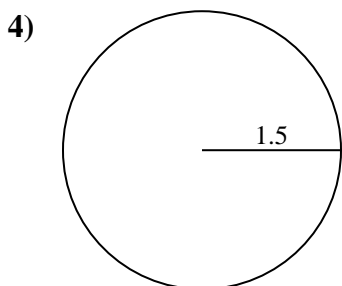
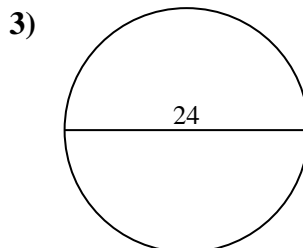
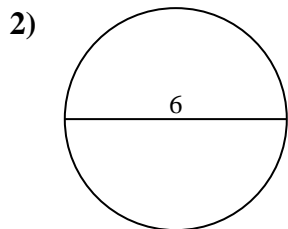
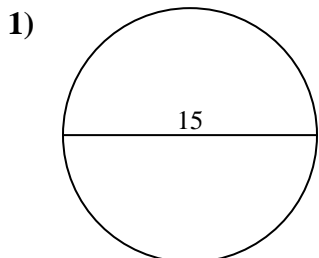
Answers

1.	<u>176.7</u>	<u>47.1</u>
2.	<u>28.3</u>	<u>18.8</u>
3.	<u>452.4</u>	<u>75.4</u>
4.	<u>7.1</u>	<u>9.4</u>
5.	<u>706.9</u>	<u>94.2</u>
6.	<u>153.9</u>	<u>44</u>
7.	<u>0.8</u>	<u>3.1</u>
8.	<u>78.5</u>	<u>31.4</u>
9.	<u>227</u>	<u>53.4</u>
10.	<u>346.4</u>	<u>66</u>



Find the area and circumference of the circle. Circles are not to scale. Round to the nearest 10th.

78.5	75.4	7.1	18.8	53.4
31.4	28.3	153.9	3.1	9.4
176.7	0.8	452.4	706.9	47.1
227	44	94.2		



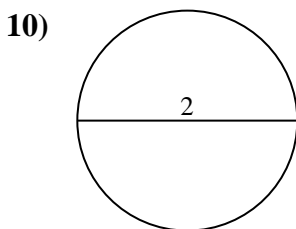
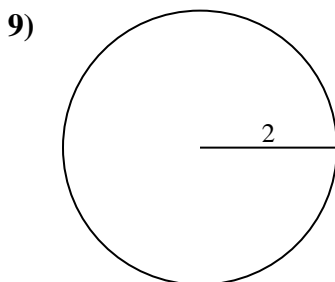
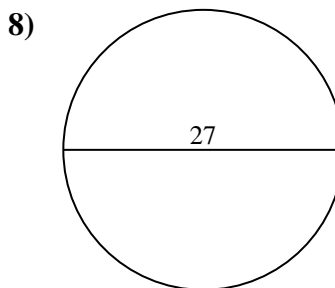
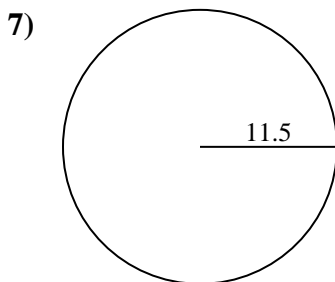
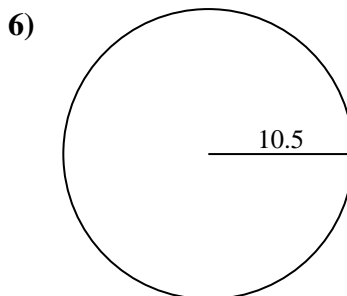
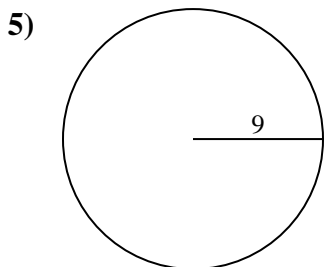
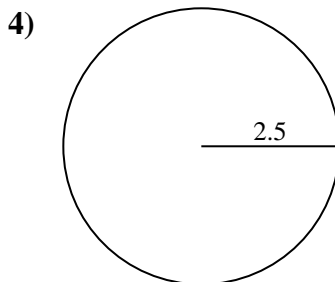
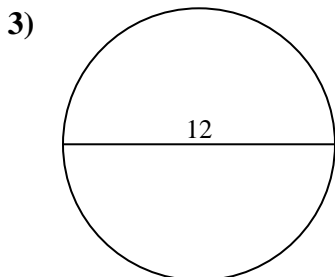
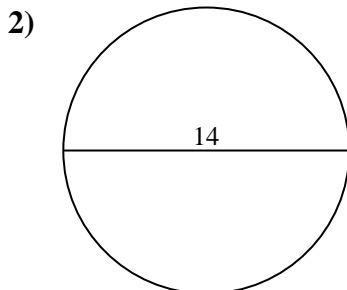
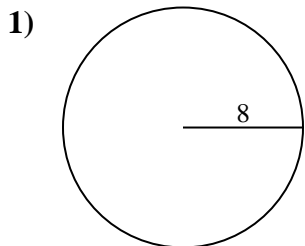
Answers

1. \_\_\_\_\_
2. \_\_\_\_\_
3. \_\_\_\_\_
4. \_\_\_\_\_
5. \_\_\_\_\_
6. \_\_\_\_\_
7. \_\_\_\_\_
8. \_\_\_\_\_
9. \_\_\_\_\_





Find the area and circumference of the circle. Circles are not to scale. Round to the nearest 10th.

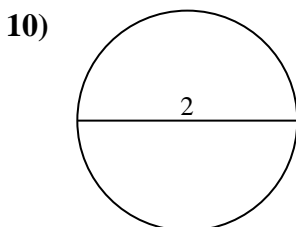
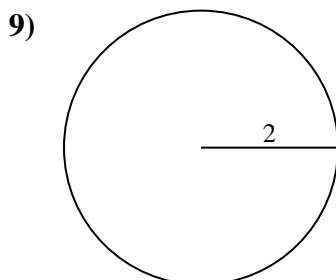
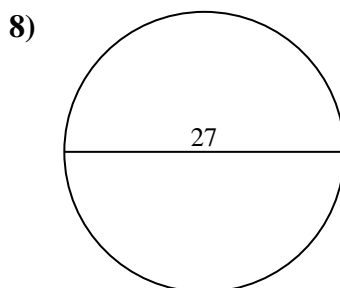
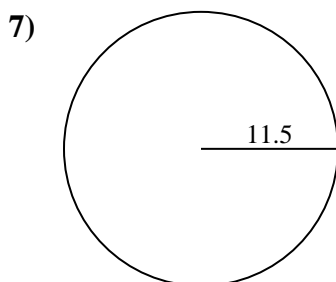
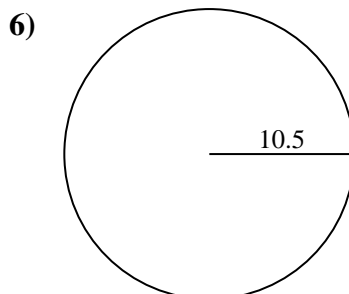
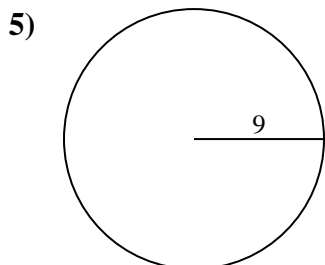
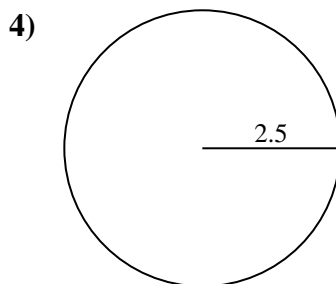
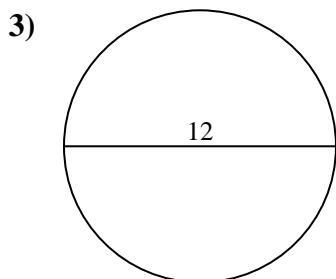
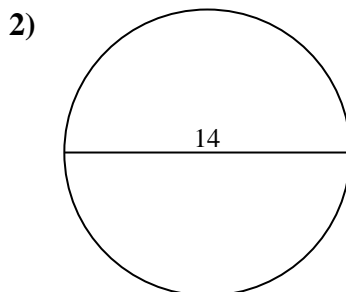
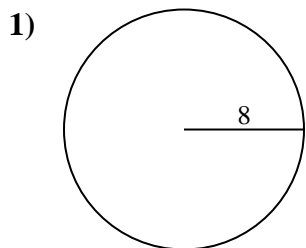


Answers

- 1. \_\_\_\_\_
- 2. \_\_\_\_\_
- 3. \_\_\_\_\_
- 4. \_\_\_\_\_
- 5. \_\_\_\_\_
- 6. \_\_\_\_\_
- 7. \_\_\_\_\_
- 8. \_\_\_\_\_
- 9. \_\_\_\_\_
- 10. \_\_\_\_\_



Find the area and circumference of the circle. Circles are not to scale. Round to the nearest 10th.



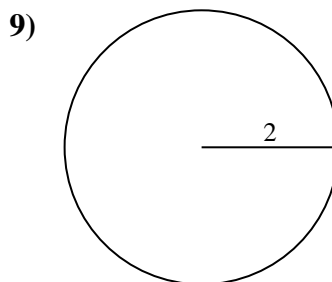
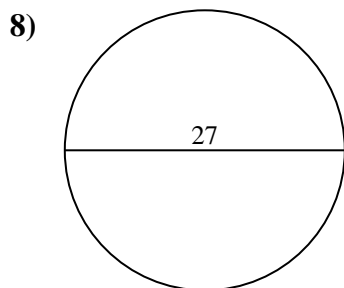
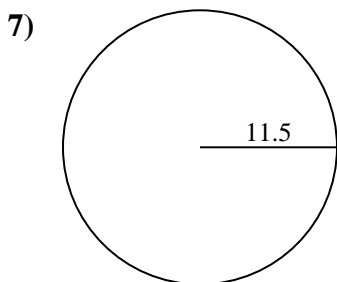
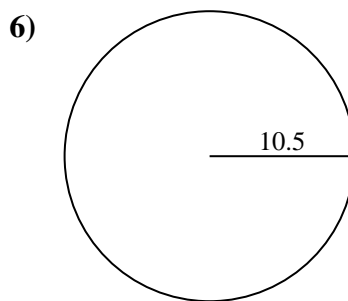
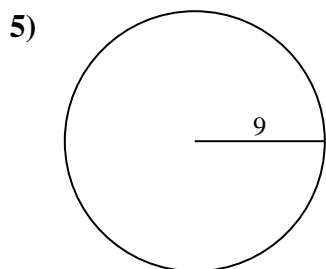
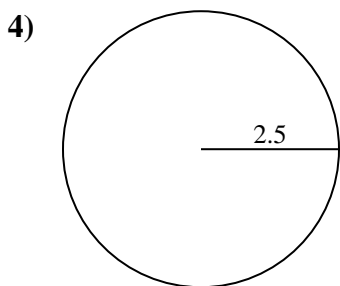
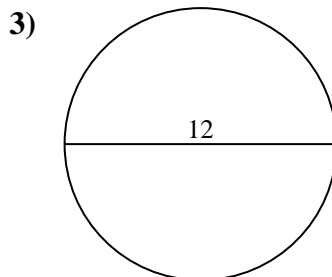
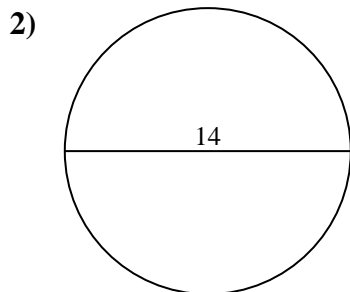
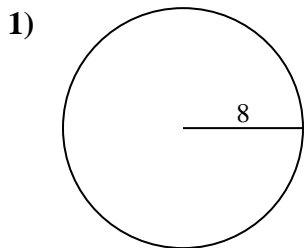
Answers

1.	<u>201.1</u>	<u>50.3</u>
2.	<u>153.9</u>	<u>44</u>
3.	<u>113.1</u>	<u>37.7</u>
4.	<u>19.6</u>	<u>15.7</u>
5.	<u>254.5</u>	<u>56.5</u>
6.	<u>346.4</u>	<u>66</u>
7.	<u>415.5</u>	<u>72.3</u>
8.	<u>572.6</u>	<u>84.8</u>
9.	<u>12.6</u>	<u>12.6</u>
10.	<u>3.1</u>	<u>6.3</u>



Find the area and circumference of the circle. Circles are not to scale. Round to the nearest 10th.

66	254.5	50.3	572.6	37.7
72.3	12.6	19.6	113.1	153.9
15.7	346.4	56.5	201.1	84.8
415.5	12.6	44		

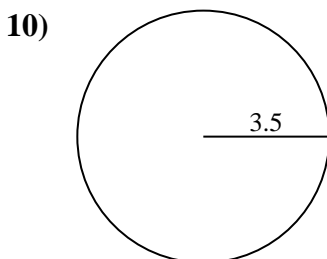
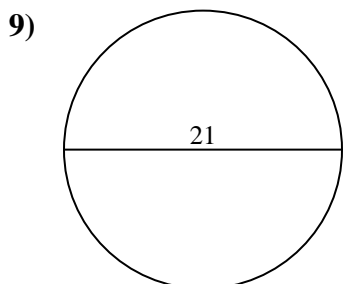
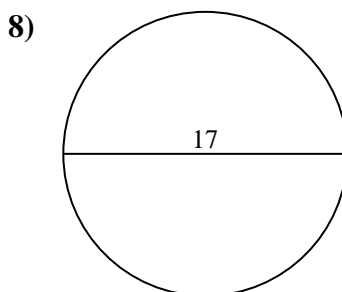
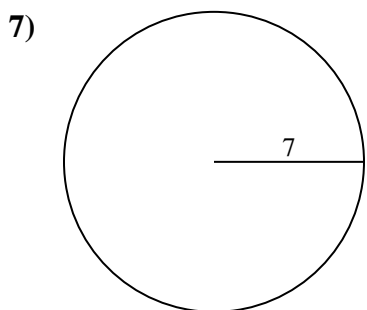
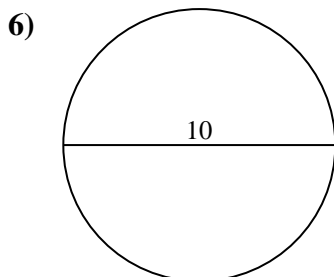
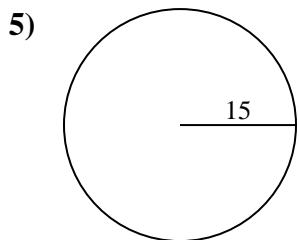
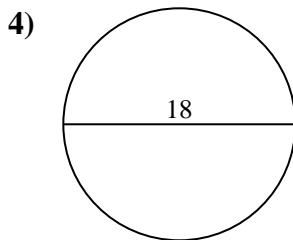
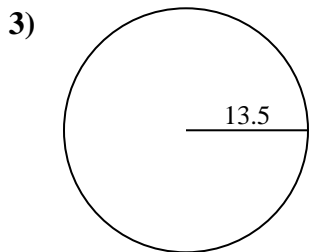
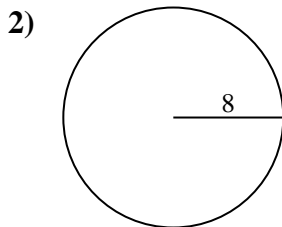
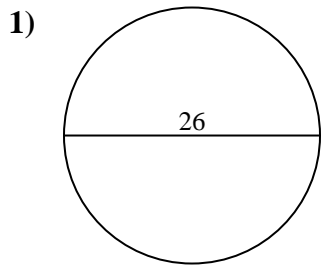


Answers

1. \_\_\_\_\_
2. \_\_\_\_\_
3. \_\_\_\_\_
4. \_\_\_\_\_
5. \_\_\_\_\_
6. \_\_\_\_\_
7. \_\_\_\_\_
8. \_\_\_\_\_
9. \_\_\_\_\_



Find the area and circumference of the circle. Circles are not to scale. Round to the nearest 10th.

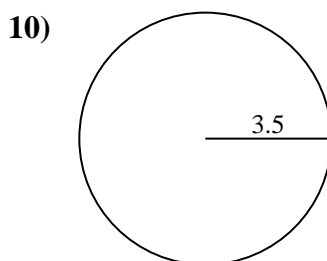
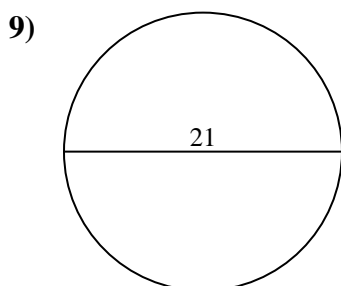
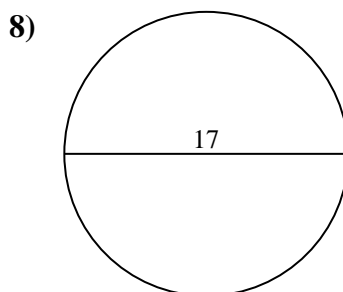
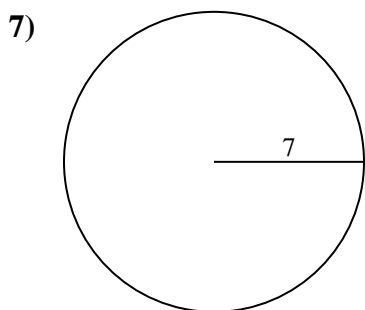
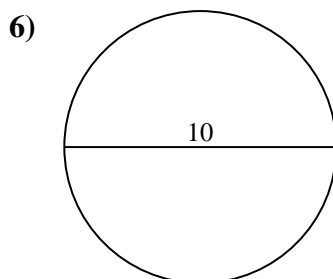
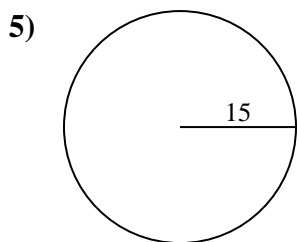
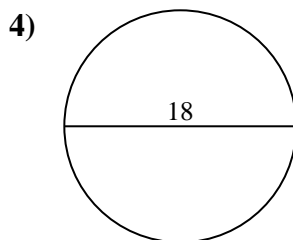
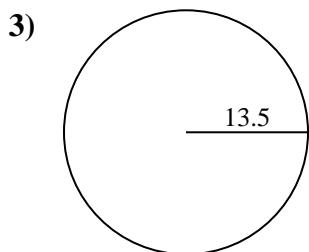
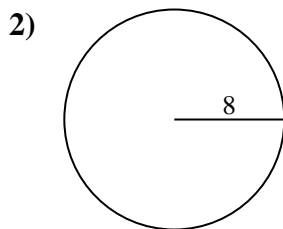
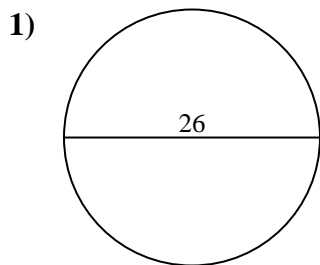


Answers

- 1. \_\_\_\_\_
- 2. \_\_\_\_\_
- 3. \_\_\_\_\_
- 4. \_\_\_\_\_
- 5. \_\_\_\_\_
- 6. \_\_\_\_\_
- 7. \_\_\_\_\_
- 8. \_\_\_\_\_
- 9. \_\_\_\_\_
- 10. \_\_\_\_\_



Find the area and circumference of the circle. Circles are not to scale. Round to the nearest 10th.

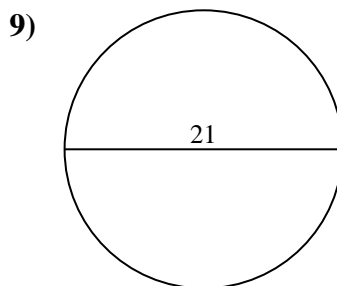
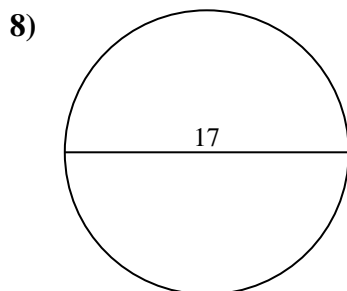
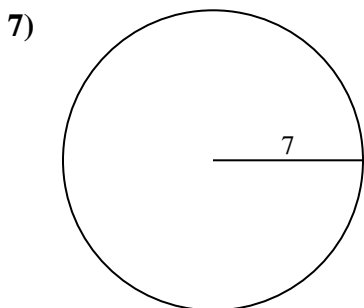
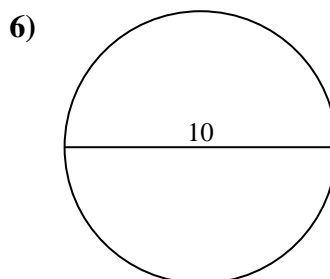
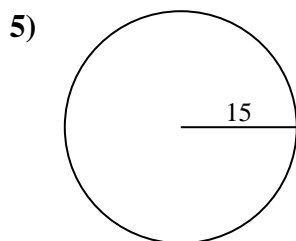
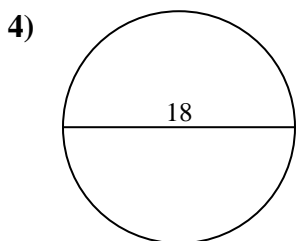
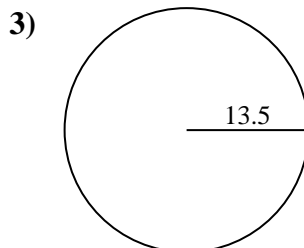
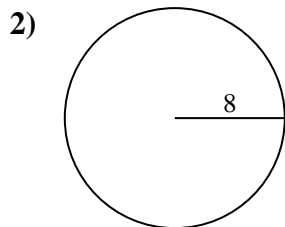
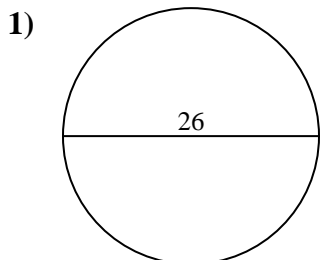
Answers

1.	<u>530.9</u>	<u>81.7</u>
2.	<u>201.1</u>	<u>50.3</u>
3.	<u>572.6</u>	<u>84.8</u>
4.	<u>254.5</u>	<u>56.5</u>
5.	<u>706.9</u>	<u>94.2</u>
6.	<u>78.5</u>	<u>31.4</u>
7.	<u>153.9</u>	<u>44</u>
8.	<u>227</u>	<u>53.4</u>
9.	<u>346.4</u>	<u>66</u>
10.	<u>38.5</u>	<u>22</u>



Find the area and circumference of the circle. Circles are not to scale. Round to the nearest 10th.

227	346.4	530.9	201.1	706.9
84.8	31.4	78.5	153.9	53.4
44	94.2	66	254.5	56.5
572.6	81.7	50.3		



Answers

1. \_\_\_\_\_
2. \_\_\_\_\_
3. \_\_\_\_\_
4. \_\_\_\_\_
5. \_\_\_\_\_
6. \_\_\_\_\_
7. \_\_\_\_\_
8. \_\_\_\_\_
9. \_\_\_\_\_