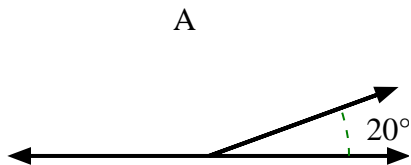


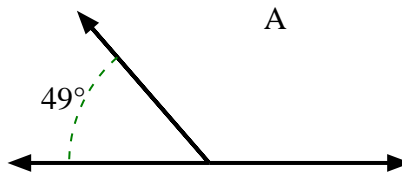


Find the value of 'A' in the set of supplementary angles.

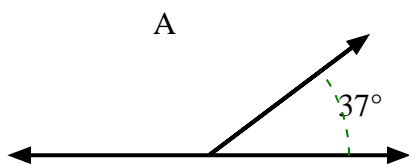
1)



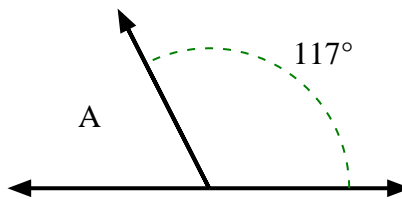
2)



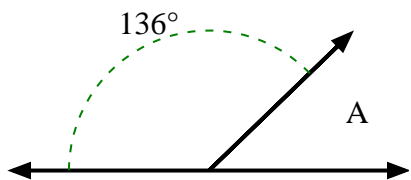
3)



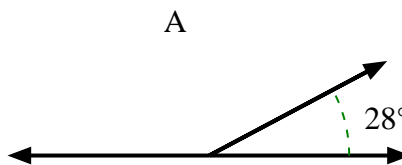
4)



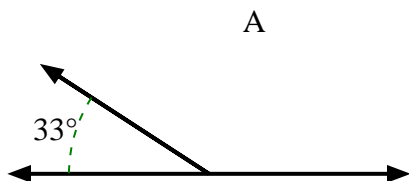
5)



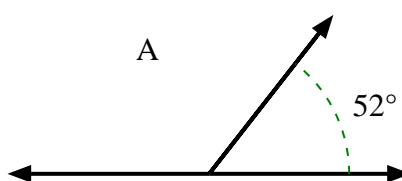
6)



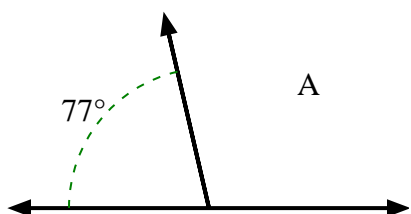
7)



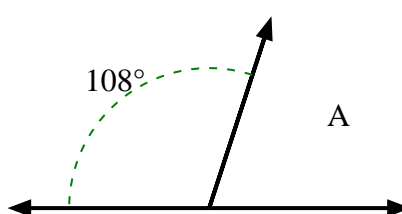
8)



9)



10)



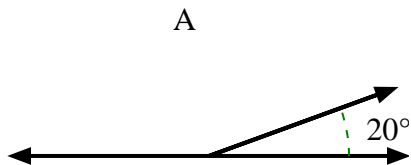
Answers

- 1. _____
- 2. _____
- 3. _____
- 4. _____
- 5. _____
- 6. _____
- 7. _____
- 8. _____
- 9. _____
- 10. _____

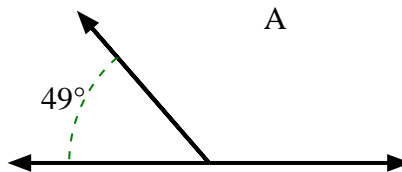


Find the value of 'A' in the set of supplementary angles.

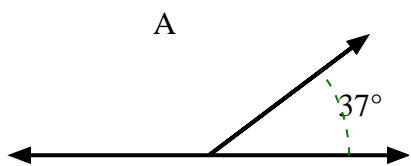
1)



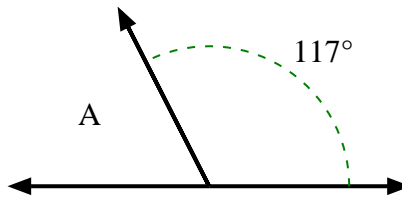
2)



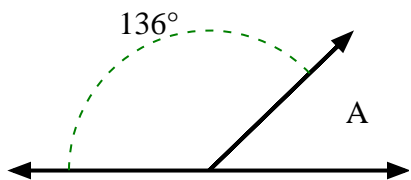
3)



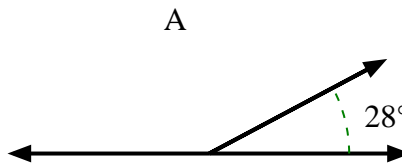
4)



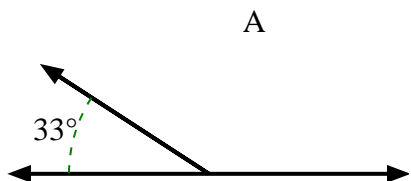
5)



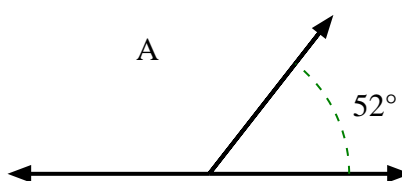
6)



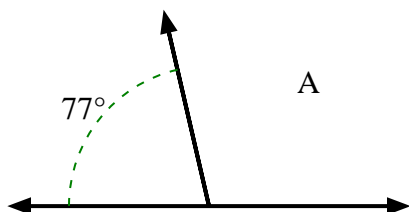
7)



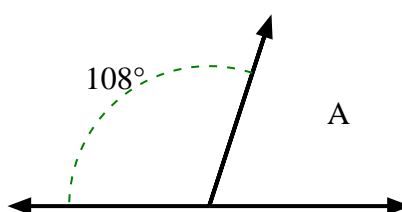
8)



9)



10)



Answers

1. **160°**

2. **131°**

3. **143°**

4. **63°**

5. **44°**

6. **152°**

7. **147°**

8. **128°**

9. **103°**

10. **72°**